




GDS TO PM/MTS HIMACHAL PRADESH CIRCLE-2022


- (1.) Head Quarter of Haryana Postal Circle is situated at
(A.) Chandigarh (B.) Ambala (C.) Gurgaon (D.) Karnal
- (2.) Which articles cannot be booked to the address of Army Post office?
(A.) Value - payable articles (B.) Money Orders
(C.) Both (a) and (b) above (D.) None of the above
- (3.) Use of previously used postage stamp, is an offence under:
(A.) Indian Penal Code (B.) Indian Post Office Act
(C.) Postal Manual Volume-V (D.) It is not an offense
- (4.) Articles addressed to other person or firms c/o Post Box Nos. are not delivered through the post box. Which amongst the following cases is exception?
(i) Articles addressed to legitimate personnel of a firm renting a post box
(ii) Articles addressed to family members and guests of the renter
(iii) Articles addressed towards, trainees or inmates of an institution controlled by a recognized and known authority
(iv) Articles addressed to casual visitors and commercial representatives staying with the renter
(A.) Only (i), (ii), (iii) & (iv) (B.) Only (ii), (iii) & (iv)
(C.) Only (i), (iii) & (iv) (D.) Only (i), (ii) & (iii)
- (5.) Which articles can be delivered through post box/post bags?
(A.) Fully prepaid unregistered articles
(B.) Insufficiently paid unregistered articles
(C.) Taxed articles
(D.) None of the above
- (6.) The postage stamp should be affixed to which corner of the address side?
(A.) Left hand top corner (B.) Left hand bottom corner
(C.) Right hand top corner (D.) Right hand bottom corner
- (7.) In case of article addressed to foreign countries the address should be written in?
(A.) Roman letters and Arabic figures (B.) Roman letters
(C.) Latin figures (D.) Arabic letters and Roman figures
- (8.) What amongst following is prohibited A transmission by the Inland post?
(A.) Any indecent or obscene printing
(B.) Any letter having on it an mark of seditious nature
(C.) Anything which is sent in contravention of any enactment
(D.) All of the above
- (9.) If a franked article is found in letter box
(A.) It should be returned to sender
(B.) It should be treated as unpaid
(C.) Police case to be registered
(D.) Franking Machine license to be cancelled




- (10.) Registered newspaper are accepted without payment of late fee on all days including Sundays and Post Office holiday at
(A.) Press sorting office (B.) RMS offices
(C.) Night Post office (D.) All the above
- (11.) Franked article should be:
(A.) Handed over to Sorting PA (B.) Handed over to Registration PA
(C.) Handed over to Treasurer (D.) Presented at the counter
- (12.) Franking impression should be a
(A.) Green colour (B.) Blue colour (C.) Red colour (D.) Black colour
- (13.) Who is entitled to the privilege of special bags and camp bags?
(A.) Senior Superintendent of Post Offices
(B.) D.G. Posts
(C.) Secretary Posts
(D.) Post Master General
- (14.) Which of the following is prohibited between Kutch and another place?
(A.) Skins and feather of birds (B.) Coca leaves and hemp
(C.) Atropa Belladonna (D.) Icerya Purchasi
- (15.) One person wants to send a pistol to his friend by India Post. Choose the correct option:
(A.) He is allowed as anything can be sent through post
(B.) He has to book such article under insured article
(C.) No, this article is prohibited for transmission
(D.) He is allowed with special permission
- (16.) What is the rate of discount for walk in customer who pays Rs.55000 for booking Speed Post articles in a day?
(A.) 5% (B.) 6.5% (C.) 7% (D.) 10%
- (17.) What is maximum life cover to the insurant of Gram Priya (RPLI) policy and for how many years?
(A.) Maximum sum Assured is Rs. 10 lacs for 15 years
(B.) Maximum sum Assured is Rs. 10 lacs for 10 years
(C.) Maximum sum Assured is Rs. 05 lacs for 15 years
(D.) Maximum sum Assured is Rs. 05 lacs for 05 years
- (18.) India Post offers a unique advertisement concept to help the Indian Corporate and the Government Organizations to reach potential customer through?
(A.) Media Post (B.) Business Post
(C.) Retail Post (D.) e-Post
- (19.) What is the fee for transfer of Monthly Income Scheme Account from one post office to another post office?
(A.) Rs.50 + GST (B.) Rs.100 + GST
(C.) Rs.200 + GST (D.) Rs.500 + GST
- (20.) Which one of the following statement is incorrect regarding duties of letter box peon?



- (A.) He has the duty of clearance of the LB
(B.) He has to upload the data in Nanyatha App
(C.) He has to remove the plates of changeable hours plate and replace with new one
(D.) None of the above
- (21.) Which of the following need to be insured while posting through India Post?
(A.) Precious stones (B.) Jewellery
(C.) Currency or Bank Notes (D.) All of the above
- (22.) Who may extend the working hours of any post office up to 8:30 P.M. and keep them open on Sundays also.
(A.) CPMG (B.) Director General (Posts)
(C.) Secretary Posts (D.) Post Master General
- (23.) Mark the correct sequence of Letter Box clearance through Nanyatha App.
(A.) Open Nanyatha GPS and Update – Upload letters data in Nanyatha app-check upload data
(B.) Upload letter data in Nanyatha app- Open PO Nanyatha GPS and Update-Check upload data
(C.) Check Upload data- Upload letter data in Nanyatha app- Open Nanyatha GPS and Update
(D.) None of the above
- (24.) Post office which is situated on a line of through mail communication, receive & sort bags intended for office in advance, without opening them, is a
(A.) TMO (B.) SO
(C.) Transit office (D.) None of the above
- (25.) A and B order is issued by:
(A.) Supdt. Of RMS (B.) PMG
(C.) Supdt of Post Office (D.) HRO
- (26.) An article which has been erroneously forwarded by an office to an office other than the office of destination is
(A.) Mis-sent article (B.) Mis-directed article
(C.) Too late letter (D.) Late letter
- (27.) Mark correct option
(A.) SO to HO account bag contain SO dally account
(B.) HO to SO account bag contain SO slip
(C.) Account bag are due bag
(D.) All the above
- (28.) Journey performed by a set of Section travelling on duty from one end to the another end of its beat is called
(A.) Section (B.) Beat
(C.) Trip (D.) None of these
- (29.) The first class HO situated at the HQ of the Head of the circle or, where there are more than one such HO, the one is attached to HQ is called as
(A.) Head Post Office (B.) First Class Post Office
(C.) General Post Office (D.) None of the above



- (30.) The service responsible for the carriage of mails by rail, road, river and air and for the collection and distribution of mails received from Post Offices by mail offices and section is:-
(A.) Army Postal Service POS (B.) Mobile Post Office Service
(C.) Railway Mail Service (D.) None of the above
- (31.) Which of the following State is surrounded by Bangladesh from three sides?
(A.) Nagaland (B.) Assam
(C.) Arunachal Pradesh (D.) Tripura
- (32.) Which State in India has the largest coastline?
(A.) Tamil Nadu (B.) Andhra Pradesh
(C.) Gujarat (D.) West Bengal
- (33.) Who was the President of the Constituent Assembly?
(A.) Pt. Jawahar Lal Nehru (B.) Sardar Patel
(C.) Dr. Rajendra Prasad (D.) Dr. B.R. Ambedkar
- (34.) Which of the following is not a Union Territory?
(A.) Lakshadweep (B.) Puducherry
(C.) Nagaland (D.) Dadra and Nagar Haveli
- (35.) Where was the first conference of SAARC (South Asian Association for Regional Cooperation) held?
(A.) Dhaka (B.) New Delhi (C.) Colombo (D.) Kathmandu
- (36.) First Indian to make a speech in Hindi before the General Assembly was
(A.) Atal Bihari Vajpayee (B.) Lal Bahadur Shastri
(C.) Lal Krishna Advani (D.) Moraji Desai
- (37.) What Satyagraha was held at Nagpur in 1923?
(A.) Salt Satyagraha (B.) Individual Satyagraha
(C.) Rowlatt Satyagraha (D.) Flag Satyagraha
- (38.) Which among the following movements was not by Mahatma Gandhi?
(A.) Civil Disobedience Movement (B.) Quit India Movement
(C.) Home Rule Movement (D.) Non-Cooperation Movement
- (39.) Mr. A promises to Mr. B, without any intention performing it. This is a case of:-
(A.) Cheating (B.) Fraud
(C.) Valid Case (D.) None of the above
- (40.) Cheque is a
(A.) Promissory note (B.) Bill of exchange
(C.) Both A and B (D.) None of the above
- (41.) What should come in place of the question mark in the following question?
 $2 - [6 - (3 + (-4 + 5 + 1) * 8) + 12] = ?$
(A.) 4 (B.) 2 (C.) 3 (D.) 1
- (42.) Simplify the expression $[25 - 3(6 + 1)] \div 4 + 9$
(A.) $4/13$ (B.) 10 (C.) $154/13$ (D.) 47.5
- (43.) $860\% \text{ of } 50 + 50\% \text{ of } 860 = ?$



- (A.) 430 (B.) 516 (C.) 860 (D.) 960
- (44.) A's salary is 40% of B's salary which is 25% of C's salary. What percentage of C's salary is A's salary?
 (A.) 5% (B.) 10% (C.) 15% (D.) 20%
- (45.) The cost price of 6 pens is equal to the selling price of 4 pens. Find the profit percent.
 (A.) 25% (B.) 60% (C.) 50% (D.) 80%
- (46.) If Rs. 640 amounts to Rs. 832 in 2 years, what will Rs. 860 amount to in 4 years at the same rate of interest per annum?
 (A.) 1736 (B.) 1376 (C.) 3176 (D.) 3716
- (47.) The average of five numbers is 27. If one number is excluded, the average becomes 25. The excluded number is:-
 (A.) 25 (B.) 27 (C.) 30 (D.) 35
- (48.) P & Q can do a piece of work in 30 & 40 days respectively. They began the work together, but P left after some days & Q finished the remaining work In 12 days. After how many days did P leave?
 (A.) 8 days (B.) 10 days (C.) 12 days (D.) 14 days
- (49.) A man walking at the rate of 5 km/hr crosses a bridge in 15 minutes. The length of the bridge (in metres) is
 (A.) 600 (B.) 750 (C.) 1000 (D.) 1250
- (50.) The distance from place A to place B is 8.7 cm on a map. If 1.5 cm on the map is equal to 2 Km on the ground, then what is the distance (in metres) between these two places?
 (A.) 12300 metres (B.) 11900 metres
 (C.) 11600 metres (D.) 10600 metres

GDS TO PM/MTS HIMACHAL PRADESH CIRCLE-2022 KEY

ANSWER

(1.)	B	(2.)		(3.)	A	(4.)	A	(5.)	A
(6.)	C	(7.)	A	(8.)	D	(9.)	B	(10.)	D
(11.)	D	(12.)	B,C	(13.)	B	(14.)	C	(15.)	C
(16.)	A	(17.)	B	(18.)	A	(19.)	B	(20.)	D
(21.)	D	(22.)	B	(23.)	A	(24.)	C	(25.)	A
(26.)	A	(27.)	D	(28.)	C	(29.)	C	(30.)	C
(31.)	D	(32.)	C	(33.)	C	(34.)	C	(35.)	A
(36.)	A	(37.)	D	(38.)	C	(39.)	A,B	(40.)	B
(41.)	C	(42.)	B	(43.)	C	(44.)	B	(45.)	C
(46.)	B	(47.)	D	(48.)	C	(49.)	D	(50.)	C