




GDS TO PM/MTS RAJSTHAN CIRCLE-2021


- (1.) Which of the following articles can be transmitted by air without any additional charge?
(A.) Parcels
(B.) Book packets
(C.) All first class mail and money orders
(D.) All the above
- (2.) What can be the maximum weight of inland letter card?
(A.) 5 gm (B.) 15 gm (C.) 10 gm (D.) 20gm
- (3.) What can be the maximum length of a Parcel?
(A.) 1 Meter (B.) 3 Meter (C.) 2 Meter (D.) 4 Meter
- (4.) A bag used to enclose several bags sent to the same office or section thereby affording protection to them called as which of the following?
(A.) Packet Bag (B.) Transit Bag
(C.) Insured Bag (D.) None of these
- (5.) How many Sukanya Samridhi Accounts can be opened by a guardian in the name of different girls?
(A.) 4 (B.) 2 (C.) 3 (D.) 1
- (6.) An Account Bag is used between which of the following?
(A.) Sub Post Office and Branch Post Office
(B.) Head Post Office and Branch Post Office
(C.) Sub Post Office and Sub Post Office
(D.) Sub Post Office and Head Post Office
- (7.) Which bag is used ordinarily for closing airmail bag?
(A.) Polythene Bag (B.) Blue Bag
(C.) Jute Bag (D.) Khaki Bag
- (8.) Where is the Headquarters of North-East Postal Circle?
(A.) Kohima (B.) Agartala (C.) Shilong (D.) Itanaagar
- (9.) How many postal circles are there in India?
(A.) 16 (B.) 18 (C.) 20 (D.) 23
- (10.) How many TD Accounts can be opened by an individual in a Post Office?
(A.) 1 (B.) 7 (C.) 5 (D.) No limit
- (11.) Identity cards are issued by which type of Post Offices?
(A.) Head post Office (B.) Branch Post Office
(C.) Sub Post Office (D.) All Post Offices
- (12.) Redirection charged on which of the following articles?
(A.) Registered letters (B.) Parcels
(C.) Speed Post (D.) None of these
- (13.) For which of the following articles registration is compulsory?
(A.) Insured article (B.) Value payable article
(C.) Parcels exceeding 4kg (D.) All of these



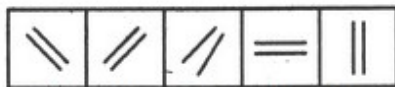
- (14.) What can be the maximum weight of a letter?
(A.) 50 gram (B.) 1 kg (C.) 100 gram (D.) 2 kg
- (15.) What is the preservation period of the Invoices of the articles received from the Stores Depot?
(A.) 122 Years (B.) 1 Year (C.) 3 Years (D.) Permanent
- (16.) Post Offices are divided into how ma classes?
(A.) 2 (B.) 4 (C.) 3 (D.) 5
- (17.) Which of the following can redirect a 'Postal Article'?
(A.) Office of posting (B.) Office of destination
(C.) Any intermediate office (D.) None of these
- (18.) The registered Newspaper should be published in large numbers at interval of not more than which of the following?
(A.) 15 Days (B.) 60 Days (C.) 31 Days (D.) 90 Days
- (19.) The First class Head Office situated at the headquarters of the Head of a Circle known as what?
(A.) Head Post Office (B.) Sub Post Office
(C.) General Post Office (D.) Record Office
- (20.) A POSB Account is treated as silent if deposit or withdrawal is not done in that account for how many complete financial years?
(A.) 1 Year (B.) 3 Years (C.) 2 Years (D.) 4 Years
- (21.) Payment of postage can be done with which of the following in India?
(A.) CRFS Stamps (B.) Revenue Stamps
(C.) Postage Stamps (D.) None of the above
- (22.) What is full form of TMO?
(A.) Transport Mail Office (B.) Transition Mail Office
(C.) Transfer Mail Office (D.) Transit Mail Office
- (23.) 'A' Orders are orders issued by whom?
(A.) Superintendent, RMS (B.) Superintendent, Post Offices
(C.) Postmaster (D.) Head Record Officer
- (24.) A 'Station Bundle' contains which of the following?
(A.) Station Registered Articles (B.) Station Unregistered Articles
(C.) Only Station Registered Parcel (D.) Only Value Payable Articles
- (25.) What is the minimum amount for opening of Saving Bank Account in the Post Office?
(A.) Rs 100 (B.) Rs 1000 (C.) Rs 500 (D.) Rs 1500
- (26.) SO daily account is prepared in which Form?
(A.) ACG-1 (B.) ACG-36 (C.) ACG-67 (D.) ACG-22
- (27.) What should be examined when an ordinary parcel is received for dispatch to a foreign country?
(A.) Good Outward condition (B.) Limits of weight
(C.) Limits of size (D.) All of them
- (28.) What is the preservation period for unserviceable bags register?
(A.) One Year (B.) Five Years (C.) Two Years (D.) Ten Years



- (29.) Which of the following is true about Night Post Offices?
(A.) Function in the Night (B.) Function till 8:30pm
(C.) Function till midnight (D.) Function after midnight
- (30.) Which of the following need not be insured when posted?
(A.) Coins (B.) Bullion
(C.) Bank Notes (D.) None of these
- (31.) What is the full form of CRC?
(A.) Computerized Registration Sorting Centre
(B.) Computerized Registry Sorting Centre
(C.) Central Registry Sorting Centre
(D.) Central Registration Sorting Centre
- (32.) 'Public Provident Fund (PPF) Account' can be extended in one stretch for how many years after maturity?
(A.) 1 year (B.) 10 years (C.) 5 years (D.) 15 years
- (33.) What is the currency period of an IPO?
(A.) One year (B.) Six month (C.) Two years (D.) Three years
- (34.) Pre-mature closure of Monthly Income Scheme (MIS) Account is allowed after how many years?
(A.) 1 Year (B.) 3 Years (C.) 2 Years (D.) 4 Years
- (35.) What are the charges for cancellation or change of nomination in accounts schemes?
(A.) Rs 20 (B.) Rs 100 (C.) Rs 50 (D.) Rs 200
- (36.) Which of the following stamps and seals are supplied to every Set in RMS?
(A.) Date Stamp (B.) Date Seal (C.) Name Stamp (D.) All of them
- (37.) A journey performed by a set of a section travelling on duty from one end of its beat to the other is called as what?
(A.) Trip (B.) Round
(C.) Event (D.) None of the above
- (38.) When was PLI started by Department of Posts?
(A.) 1st February, 1884 (B.) 1st March, 1884
(C.) 1st February, 1885 (D.) 1st March, 1885
- (39.) Which of the following products are available in the Post Offices for sale?
(A.) Ganga Jal (B.) LED Bulbs (C.) Stamps (D.) All of these
- (40.) What are the charges for window delivery of an article?
(A.) Equal to the postage (B.) Rs. 10
(C.) Double than postage (D.) No charges
- (41.) The empty bags remaining over from the previous trips or spells of duty are required to be sent to whom?
(A.) Unit Bag Office (B.) District Bag Office
(C.) Both 'a' & 'b' (D.) None of these
- (42.) What is the minimum amount of customs duty to be recovered for which articles are ordinarily delivered at the Post Office window?
(A.) Rs10 (B.) Rs 50 (C.) Rs 25 (D.) Rs 75

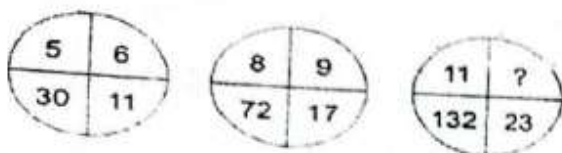


- (43.) Which of the following at Head Post Office must pay attention to the balances held by a subordinate offices?
 (A.) Postmaster (B.) Sub-Account Assistant
 (C.) Treasurer (D.) Deputy Postmaster
- (44.) Which of the following activities is done to the unregistered articles of letter mail before they are stamped, sorted, distributed to the Postmen for delivery, or made up into labeled bundles for dispatch to facilitate their handling?
 (A.) Facing (B.) Mixing
 (C.) Defacing (D.) None of these
- (45.) Where should stamps affixed on an article?
 (A.) At any empty space
 (B.) Right hand top corner of the address side
 (C.) Left hand top corner of the address side
 (D.) In the middle of the back side
- (46.) Who among the following is the Chairman of the Postal Service Board?
 (A.) Director General of Posts (B.) Secretary Posts
 (C.) Additional Director General Posts (D.) Member (Personnel), PSB
- (47.) Terms like "Value Die" and "Licence Die" are associated with which of the following?
 (A.) SB accounts (B.) Registered articles
 (C.) Franking Machine (D.) Philatelic Bureaus
- (48.) What should be the maximum dimensions of an Inland letter part including its flaps when folded?
 (A.) 25 cm x 21 cm (B.) 30 cm x 21 cm
 (C.) 20 cm x 21 cm (D.) 35 cm x 21 cm
- (49.) Window delivery of an insured article will be made when its value is more than which of the following?
 (A.) Rs.500 (B.) Rs.200 (C.) Rs.100 (D.) No limit
- (50.) Pre-mature closure of RD account is allowed after which period?
 (A.) 1 Year (B.) 3 Years (C.) 2 Years (D.) 4 Years
- (51.) Choose the figure which is different from the rest.




(1) (2) (3) (4) (5)

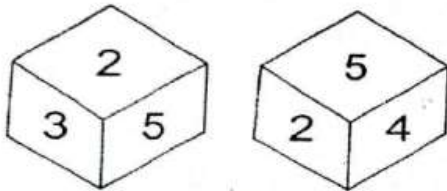
- (A.) 1 (B.) 4 (C.) 3 (D.) 5
- (52.) Which number can be placed at the sign of interrogation (?)?



- (A.) 10 (B.) 14 (C.) 12 (D.) 16



(53.) Which number is in opposite plane of 3?



- (A.) 1 (B.) 6 (C.) 4 (D.) 5

(54.) Choose the alternative which is closely resembles the mirror image of the given combination.

MAGAZINE

(1) MAZAGINE

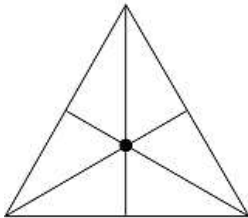
(2) ENIZAGAM

(3) MAGAZINE

(4) ENIZAGAM

- (A.) 4 (B.) 3 (C.) 2 (D.) 1

(55.) How many triangles are there in the figure given below?



- (A.) 16 (B.) 9 (C.) 13 (D.) 7

(56.) The marked price of an article is 30% more than its cost price. A discount of 40% is given on the marked price. In this kind of sale the seller bears:

- (A.) no gain, no loss (B.) a gain of 16%
 (C.) a gain of 22% (D.) a loss of 22%

(57.) A 130 meter long train, travelling at a speed of 45km/hr crosses a bridge in 30 seconds, what is the length of the bridge?

- (A.) 200 meter (B.) 225 meter (C.) 245 meter (D.) 250 meter

(58.) In what time will the simple interest on a certain sum be 3/4th of the principal at 6% per annum?


- (A.) $12 \frac{1}{2}$ years (B.) 14 years (C.) 13 years (D.) $14 \frac{1}{2}$ years

(59.) A painter paints 240 square feet of a wall. If this is 48% of total wall surface, what is the area of wall in square feet?

- (A.) 400 (B.) 300 (C.) 240 (D.) 500

(60.) A train is moving at a uniform speed of 90km/hour. How much time will it take to cover a distance of 270 km?

- (A.) 4 hours (B.) $2 \frac{1}{2}$ hours (C.) 3 hours (D.) $3 \frac{1}{2}$ hours



- (61.) A takes twice as much time as B or thrice as much time as C to finish a piece of work. Working together they can finish the work in 2 days. Working alone in how many days B can finish the same work?
(A.) 6days (B.) 4days (C.) 8days (D.) 12days
- (62.) The scale of a map is given as 1:30000000. Two cities are 4 cm apart on the map. What is the actual distance between them?
(A.) 1400km (B.) 1100km (C.) 1300km (D.) 1200km
- (63.) The population of a city decreased from 25000 to 24500. What is the percentage decrease?
(A.) 1% (B.) 3% (C.) 2% (D.) 4%
- (64.) $(62 \div 2 - 3) \times 3 + 6 \times 2 = ?$
(A.) 34 (B.) 96 (C.) -44 (D.) 10.3
- (65.) $24 + 13 - 5 \times \frac{1}{2} \text{ of } 10 - \{45 \div (17 - 2)\} = ?$
(A.) 11 (B.) -7 (C.) 9 (D.) 18
- (66.) Where is 'Palk strait' situate
(A.) Between India and Pakistan (B.) Between India and Bangladesh
(C.) Between India and Sri Lanka (D.) Between India and Myanmar
- (67.) What is 'Cartography'?
(A.) Science of making carts (B.) Science of making maps
(C.) Science of making sketches (D.) Science of making graphs
- (68.) 'Bharatnatyam' is the dance form of which state?
(A.) Madhya Pradesh (B.) Uttar Pradesh
(C.) Tamil Nadu (D.) Kerala
- (69.) The famous artist 'Bismillah Khan' was associated with which of the following?
(A.) Guitar (B.) Shehnai (C.) Tabla (D.) Flute
- (70.) In which Article of the Indian Constitution Fundamental Duties have been enumerated?
(A.) 50 A (B.) 52 A (C.) 51 A (D.) 53 A
- (71.) The 'Governor' of a state is appointed by whom in India?
(A.) Prime Minister of India (B.) Home Minister of India
(C.) Chief Minister of the state (D.) President of India
- (72.) Which is the hardest element available on earth?
(A.) Gold (B.) Iron (C.) Platinum (D.) Diamond
- (73.) Who was the first Tirthankara of Jainism?
(A.) Anantnath (B.) Malinath (C.) Rishabha (D.) Mahavira
- (74.) Who is the author of the book "God of Small Things"?
(A.) Salman Rusdi (B.) Vikram Seth
(C.) Arundhati Roy (D.) Taslima Nasreen
- (75.) Where did Mahatma Gandhi do his first Satyagraha in India?
(A.) Patna (B.) Champaran (C.) Gaya (D.) Begusarai



GDS TO PM/MTS RAJSTHAN CIRCLE-2021 KEY

ANSWER

(1.)	C	(2.)	A	(3.)	A	(4.)	B	(5.)	B
(6.)	D	(7.)	B	(8.)	C	(9.)	D	(10.)	D
(11.)	A	(12.)	B	(13.)	D	(14.)	D	(15.)	C
(16.)	C	(17.)	B	(18.)	C	(19.)	C	(20.)	B
(21.)	C	(22.)	D	(23.)	A	(24.)	B	(25.)	C
(26.)	D	(27.)	D	(28.)	D	(29.)	B	(30.)	D
(31.)	A	(32.)	C	(33.)	C	(34.)	A	(35.)	C
(36.)	D	(37.)	A	(38.)	A	(39.)	D	(40.)	D
(41.)	C	(42.)	B	(43.)	A	(44.)	A	(45.)	B
(46.)	B	(47.)	C	(48.)	B	(49.)	A	(50.)	B
(51.)	C	(52.)	C	(53.)	C	(54.)	A	(55.)	A
(56.)	D	(57.)	C	(58.)	A	(59.)	D	(60.)	C
(61.)	A	(62.)	D	(63.)		(64.)	B	(65.)	C
(66.)	C	(67.)	B	(68.)	C	(69.)	B	(70.)	C
(71.)	D	(72.)	D	(73.)	C	(74.)	C	(75.)	B