



**TELANGANA CIRCLE-PA/SA EXAM -2023**

- (1.) For the use of Franking Machine, the license will be issued by:
  - (A.) Chief Postmaster General
  - (B.) Postmaster General
  - (C.) Divisional Head
  - (D.) Sub Divisional Head
- (2.) The Payment of Indian Postal order will be forfeited. If it is presented after:
  - (A.) 6 months after the date of issue of the Indian Postal Order
  - (B.) 12 months after the date of issue of the Indian Postal Order
  - (C.) 6 months after the last day of the month of Issue of Indian Postal Order
  - (D.) 6 months after the last day of the month of issue of the Indian Postal Order
- (3.) Manufacture and use of fictitious postage stamp for any purpose is prohibited and it is an offense punishable under Section .....of the Indian Penal Code:
  - (A.) 263
  - (B.) 263-A
  - (C.) 264
  - (D.) 264-A
- (4.) An application for recall or alteration of address of a Postal Article under clause 34 of PO Guide Part-1 shall be made by
  - (A.) Sender of the article
  - (B.) Receiver of the article
  - (C.) Any person authorized by the Receiver
  - (D.) None of the above
- (5.) Any person who desires to avail himself of the facility of having his mail delivered through a Postbox should submit an application in the form prescribed to the following authority:
  - (A.) Postmaster/SPM
  - (B.) Sub Divisional Head
  - (C.) Divisional Head
  - (D.) Postmaster General
- (6.) Application for issue of license to sell Postage Stamps should be addressed to:
  - (A.) Divisional Head
  - (B.) Sub Divisional Head
  - (C.) Head Postmaster
  - (D.) None of the above
- (7.) Which of the following is not a Second Class mail?
  - (A.) Post Card
  - (B.) Book Packet
  - (C.) Blind Literature Packet
  - (D.) Registered News Paper
- (8.) Which of the following fees are exempted for Blind Literature Packets?
  - (A.) Postage fee
  - (B.) Registration fee
  - (C.) Fee for acknowledgement
  - (D.) All the above
- (9.) For Issue of a license for posting of News Papers without prepayment of postage, the Proprietor, Manager or Publisher of any Registered News Paper should apply in the prescribed form to:
  - (A.) Head of the Circle
  - (B.) Head of the Region
  - (C.) Head of the Division
  - (D.) Head Postmaster
- (10.) Which of the following statement(s) is/are correct?
  - (i) The sender of a postal article posted in India may have it withdrawn from the post.
  - (ii) The remitter of a Money Order which has not been paid may request the Post Office to stop payment and the money be repaid to himself
  - (A.) (i) is correct
  - (B.) (ii) is correct
  - (C.) Both (i) & (ii) are correct
  - (D.) Both (i) & (ii) are wrong
- (11.) AOPU was established in the year.....
  - (A.) 1961
  - (B.) 1962
  - (C.) 1965
  - (D.) 1970
- (12.) As per PO Guide Part II, which of the following is not a category of basic international postal services provided by India Post?
  - (A.) Small Packets
  - (B.) Book Packet



- (C.) Printed Papers (D.) M Bag
- (13.) Period of detention of Foreign articles (parcels also) addressed "Poste Restante" except VP is  
(A.) 7 Days (B.) 14 Days (C.) 30 Days (D.) 31 Days
- (14.) As per PO Guide Part II, "Animauxvivants" means:  
(A.) Living Animals (B.) Bulk Bag  
(C.) Reply Coupon (D.) Picture Post Card
- (15.) AOPU stands for  
(A.) Asian Oceanic Postal Union (B.) African Oceanic Postal Union  
(C.) Asian Oman Postal Union (D.) Arabic Oman Postal Union
- (16.) In respect of a foreign article posted in India and addressed to a Country which is a member of the Union, which of the following statement(s) is/are correct:  
i.) The sender can have the article withdrawn  
ii.) There is no provision to alter the address of the addressee  
(A.) (i) is correct (B.) (ii) is correct  
(C.) Both (i) & (ii) are correct (D.) Both (i) & (ii) are wrong
- (17.) Which of the following statement(s) in respect of posting of Registered News Paper to a foreign Country is/are correct?  
i.) Facility is not available for prepayment of postage in cash for posting of Registered News Paper to a foreign Country  
ii.) The license issued for prepayment in cash for posting a Registered News Paper in India is sufficient for posting of Registered News Paper for a foreign Country  
(A.) (i) is correct (B.) (ii) is correct  
(C.) Both (i) & (ii) are correct (D.) Both (i) & (ii) are wrong
- (18.) Which of the following statement(s) is/are correct?  
i.) Redirection facility is not available to Surface mail items received from any Country for delivery in India  
ii.) Only First Class mail whether surcharged or un- surcharged are eligible for free redirection by Air within India  
(A.) (i) is correct (B.) (ii) is correct  
(C.) Both (i) & (ii) are correct (D.) Both (i) & (ii) are wrong
- (19.) How to treat the correspondence for the personnel of the Indian Armed forces serving outside India?  
(A.) Foreign postage rates to be applied (B.) Exempted from Postal charges  
(C.) Will be treated as Inland Articles (D.) None of the above
- (20.) What is the time limit for preferring complaints regarding articles of Letter mail and Parcel mail in the foreign post?  
(A.) Before lapse of three months (B.) Before lapse of six months  
(C.) Before lapse of two years (D.) Before lapse of one year
- (21.) Number of types of Reply coupons in respect of foreign mail?  
(A.) 2 (B.) 3 (C.) 4 (D.) 5
- (22.) DPMS stands for  
(A.) Department of Posts Management System (B.) Delivery Postman Management System  
(C.) Department of Posts Mail System (D.) Delivery Postman Mail System
- (23.) Where is Data Recovery Centre located?  
(A.) Mysore (B.) Bangalore (C.) Chennai (D.) Mumbai
- (24.) What is TNF?  
(A.) Temporary Not Feasible (B.) Temporary Network Fiber  
(C.) Technically Not Feasible (D.) Temporary Network Failure



- (25.) What is DCF?  
 (A.) Digital Centre Facility (B.) Disaster Centre Facility  
 (C.) Data Computing Facility (D.) Data Centre Facility
- (26.) What is SAP?  
 (A.) Systematic Approach in Programming (B.) System Application and Programmes  
 (C.) System Application & Products in data processing (D.) System Analyze In Programming
- (27.) IPVS stands for  
 (A.) India Post Voice Response (B.) India Post Visibility System  
 (C.) Internet Provider Visibility Service (D.) Internet Provider Voice Response
- (28.) What is API?  
 (A.) Application Protocol Interaction (B.) Application Programming Internet  
 (C.) Application Programming Interface (D.) Application Postal Interface
- (29.) AEPS stands for  
 (A.) Aadhar Entitled Payment System (B.) Aadhar Enabled Payment System  
 (C.) Aadhar Enabled Payment Scheme (D.) Aadhar Entitled Payment Scheme
- (30.) HDMS in CSI refers to  
 (A.) Hard Disk Management System (B.) Hard Disk Manual System  
 (C.) Help Desk Management System (D.) Help Desk Manual System
- (31.) To avail DoP Internet Banking, which of the following is not mandatory?  
 (A.) PAN number (B.) Valid User Mobile Number  
 (C.) E-Mail address (D.) Aadhar Card
- (32.) Which of the following is not a part of Jan Suraksha- Scheme?  
 (A.) Pradhan Mantri Jeevan Jyothi Bima Yojna (PMJJBY)  
 (B.) Pradhan Mantri Suraksha Bima Yojna (PMSBY)  
 (C.) Pradhan Mantri Jan Arogya Yojna (PMJAY)  
 (D.) Atal Pension Yojna (APY)
- (33.) What is Jeevan Praman?  
 (A.) Domestic Money Transfer (B.) International Money Transfer  
 (C.) Digital Life Certificate (D.) CELC Service
- (34.) In PLI/RPLI up to ..... number of persons can be made as nominee?  
 (A.) 2 Persons (B.) 1 Person (C.) 3 Persons (D.) 4 Persons
- (35.) PLI was introduced on  
 (A.) 1 February 1884 (B.) 1 February 1894  
 (C.) 1 February 1904 (D.) 1 February 1874
- (36.) Cash on Delivery facility provides collection of amount up to Rs..... Consignments at the time of delivery of  
 (A.) Rs. 10,000 (B.) Rs. 20,000  
 (C.) Rs. 50,000 (D.) Rs. 1,00,000
- (37.) How many POPSKS have been set up across the Country?  
 (A.) 252 (B.) 380 (C.) 429 (D.) 328
- (38.) Gold Coin or Bullion or Gold ornaments or articles of Gold or both of value exceeding ..... shall not be transmitted by Post.  
 (A.) Rs. 50,000 (B.) Rs. 2,00,000  
 (C.) Rs. 1,00,000 (D.) Rs. 3,00,000
- (39.) Bulk customer is defined as anyone who provides worth of Speed Post business in a calendar month at a Speed Post booking Office



- (A.) Rs 10,000 (B.) Rs 10,00,000  
 (C.) Rs 1,00,000 (D.) Rs 50,000
- (40.) My stamp was first introduced in India during the World Philatelic Exhibition  
 (A.) INDIPEX 2012 (B.) INDIPEX 2011  
 (C.) INDIPEX 2014 (D.) INDIPEX 2013
- (41.) Deen Dayal SPARSH Yojana is a scholarship scheme to award children in the class category of  
 (A.) Standard V to X (B.) Standard VI to IX  
 (C.) Standard VI to X (D.) Standard V to IX
- (42.) What is the maximum weight allowed for a foreign country in respect of blind literature?  
 (A.) 3 KG (B.) 5 KG (C.) 7 KG (D.) 10 KG
- (43.) Whenever the monthly limit for which cash can be obtained by a Sub Office from Its Cash office is exceeded in a particular month, authority of the following is to be obtained to place further indent on cash office.  
 (A.) Divisional Head (B.) Sub Divisional Head  
 (C.) Head Postmaster (D.) Postmaster/SPM of cash office
- (44.) In respect of opening of an account bag in the Head Post Office, which of the following is correct?  
 (A.) Sub Account assistant will open the account bag in the presence of treasurer  
 (B.) Treasurer will open the account bag in the presence of Sub Account assistant  
 (C.) Head Postmaster will open the account bag in the presence of Sub Account assistant  
 (D.) APM (treasury) will open the account bag in the presence of Sub Account assistant
- (45.) Cash bag which contain remittance of cash must always be packed, closed and sealed by  
 (A.) Treasurer in the presence of Sub Account assistant  
 (B.) Sub Account assistant in the presence of Postmaster and Treasurer  
 (C.) Assistant Postmaster (Treasury) in the presence of Treasurer and Sub Account Assistant  
 (D.) None of the above
- (46.) Head Post Office will submit the memorandum of RD disbursement of pay & allowances (including travelling allowance) to which of the following authority:  
 (A.) Director of Accounts (Postal) (B.) Divisional Head  
 (C.) Postmaster General (D.) None of the above
- (47.) What is LSM?  
 (A.) Letter Sorting Machine (B.) Logistic Service Management  
 (C.) Logistic System Management (D.) Letter Sequencing Management
- (48.) The Head Sorting Assistant is required to submit to the Superintendent or the Superintendent (Sorting a daily report in the form MS-83 which contains:  
 (A.) Details of all bags received and dispatched that day  
 (B.) Daily sale of Postage Stamp and other stationery Items  
 (C.) Important irregularities observed by him or reported to him by the other Sorting Assistants  
 (D.) None of the above
- (49.) Acquaintance Rolls of RMS staff are required to be preserved for..... years.  
 (A.) 5 years (B.) 6 years (C.) 8 years (D.) 10 years
- (50.) The preservation period of work paper of RMS offices and Sections is:  
 (A.) 1 year (B.) 3 years (C.) 18 months (D.) 15 months.
- (51.) Kalhana wrote  
 (A.) Kumarasambhava (B.) Amukthamalyada  
 (C.) Rajatarangini (D.) Gitagovinda
- (52.) Uthiramerur inscription belongs to





- (A.) Cheras (B.) Kakatiyas  
(C.) Cholas (D.) Rashtrakutas
- (53.) Where is ICF located?  
(A.) Bangalore (B.) Chennai (C.) Hyderabad (D.) Mumbai
- (54.) The Indian State which has the longest Coastline is  
(A.) Tamilnadu (B.) Kerala  
(C.) Andhra Pradesh (D.) Gujarat
- (55.) Who was the Chief Guest of 74 Republic day celebrations of India?  
(A.) President of USA (B.) Prime Minister of UK  
(C.) President of Egypt (D.) President of Sri Lanka
- (56.) Who allots symbol to Political Parties  
(A.) The president of India. (B.) The parliament  
(C.) The Election Commission of India (D.) The Prime Minister of India
- (57.) Which one of the following is not one of the three organs of Government?  
(A.) Legislative (B.) Executive  
(C.) Bureaucracy (D.) Judiciary
- (58.) Utkal plain is found in..... State  
(A.) Andhra Pradesh (B.) Maharashtra  
(C.) Odisha (D.) Tamilnadu
- (59.) If you can keep things at work in order and have a neat workplace, then you have great.....  
(A.) Loyalty (B.) Organization skills  
(C.) Communication skills (D.) Humour
- (60.) Having.....means you can be trusted to do what you are expected to do at work  
(A.) Responsibility (B.) Respect  
(C.) Teamwork (D.) Cooperation
- (61.) The number which exceeds 16% of it by 42 is.....  
(A.) 50 (B.) 52 (C.) 58 (D.) 60
- (62.) Rs. 800/- amounts to Rs. 920 in three years at simple Interest. If the interest rate is increased by 3%, it would amount to  
(A.) Rs. 1056 (B.) Rs. 1112 (C.) Rs. 1182 (D.) Rs. 992
- (63.) If 'A' is to the south of 'B' and 'C' is to the east of 'B'. In what direction is 'A' with respect to 'C'  
(A.) North East (B.) North West (C.) South East (D.) South West
- (64.) The population of a town is 1, 76,400, it increases annually at the rate of 5%. What will be its population after two years?  
(A.) 194781 (B.) 194681 (C.) 194581 (D.) 194481
- (65.) Rajan is 6 times as old as his son Shankar. After 4 years he will be four times as old as his son. What are their present ages?  
(A.) 30,5 (B.) 36,6 (C.) 48,8 (D.) 24,4
- (66.) 'A' can do a piece of work in 20 days and 'B' can do it in 30 days. How long will they take to do the work together?  
(A.) 10 days (B.) 12 days (C.) 11 days (D.) 20 days
- (67.) Find the simple interest on Rs. 7500 at rate 8% per annum for 1 year 6 months.  
(A.) Rs. 600 (B.) Rs. 700 (C.) Rs. 800 (D.) Rs. 900
- (68.) Cricket player Dhoni's average in first 30 matches was 72 runs. After 31 match his average raised as 73 runs. How many runs did he taken in his 31 match?  
(A.) 100 (B.) 103 (C.) 74 (D.) 108



- (69.) Evaluate  $3 \times 6 + 8 - 6 \div 3 + 9$   
 (A.) 12 (B.) 45 (C.) 212 (D.) 33
- (70.) A train is moving with a speed of 180 km/hr. Its speed in meter/second is  
 (A.) 5 (B.) 40 (C.) 30 (D.) 50
- (71.) A man goes from Mysore to Bangalore at uniform speed of 40 km/hr and comes back to Mysore at 60 km/hr. His average speed for whole journey is  
 (A.) 48 km/hr (B.) 50 km/hr (C.) 54 km/hr (D.) 55 km/hr
- (72.) If a principle of Rs. 100 is getting double in 4 years at simple interest, then calculate the rate of Interest.  
 (A.) 28% (B.) 25% (C.) 17% (D.) 21%
- (73.) Two candidates contested in an election. If one got 520 votes which was 65% of votes. What was the total number of votes?  
 (A.) 858 (B.) 702 (C.) 780 (D.) 800
- (74.) 10 men can complete a piece of work in 8 days. In how many days can 16 men can complete the work?  
 (A.) 4 days (B.) 5 days (C.) 6 days (D.) 3 days
- (75.) A safety locker in a Jewel shop requires a 4 digit unique code. The code has the digits from 0 to 9. How many unique codes are possible?  
 (A.) 10,000 (B.) 1,000 (C.) 100 (D.) 10
- (76.) Find the length of the longest rope that can be used to measure exactly the ropes of length 1M 20 cm 3M 60 cm, 4M?  
 (A.) 30 cm (B.) 40 cm (C.) 120 cm (D.) 360 cm
- (77.) 15 persons working 6hours per day earns Rs. 900. How much money will 20 persons earn, working 10 hours per day?  
 (A.) Rs. 1800 (B.) Rs. 2000 (C.) Rs. 1500 (D.) Rs. 2100
- (78.) Two female and two male are playing a card game. All of them are sitting around a table facing north, south, east and west. No woman is facing 'East'; The persons who are sitting opposite to each other are not of same gender. A man is facing south. Tell which direction the women are facing?  
 (A.) North and West (B.) East and West  
 (C.) West and South (D.) North and East
- (79.) Pamila is the granddaughter of Akum who is marries to Nikita. Murali is the brother-in-law of Akun who has two daughters but no son. Rahul is the cousin of Kamal and brother of Pamila. Uday and Vanmay are the son-in-laws of Nikita. Vanmay is marries to Yamini and they have two daughters and one son. Uday has one son and one daughter. Tina and Smita are the daughters of Yamini. Murall is unmarried. How is Yamini related to Rahul?  
 (A.) Aunt (B.) Mother (C.) Sister (D.) Daughter
- (80.) My face is in South Direction. I turn Right and walks 20 m, then turns Right and walks 10 m. Then turns left and walk 10 m. then turns right and walk 20 m. Again turns right and walks 60 m. In which TA direction I am from (starting) initial point?  
 (A.) North (B.) North-East (C.) North-West (D.) East
- (81.) Bus to Meerut leaves every 30 minutes from the bus depot. The Inquiry clerk told the passenger that the bus for Meerut had left 10 minutes before and the next bus would leave at 10:30. What was the time when the Inquiry clerk said?  
 (A.) 10:10 (B.) 10:20 (C.) 10:00 (D.) 09:50
- (82.) If in the year 2016 the Republic Day was celebrated on Friday, then in the year 2020, on which day the Republic Day was celebrated?



A Vision of Victory

**V V ACADEMY**

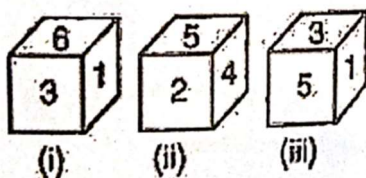
➤ RPF ➤ RRB GROUP - D ➤ POSTAL ➤ SI/CONSTABLE

Address : Near Chuttugunta Signals, Eluru Road, VJA 2. Cell : 9985525552, 8977525552

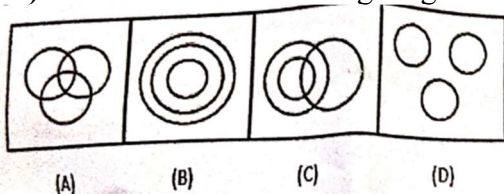
www.vvacademy.com



- (A.) Monday (B.) Wednesday (C.) Friday (D.) Sunday
- (83.) How many squares are there in a standard chess board?  
 (A.) 216 (B.) 118 (C.) 204 (D.) 264
- (84.) If the word PHONE is coded as SKRQR, how will RADIO be coded?  
 (A.) SCGNH (B.) VRGNG (C.) UDGLR (D.) SDHKQ
- (85.) 2, 16, 112, 672, 3360, 13440, \_\_\_\_?  
 (A.) 3430 (B.) 3340 (C.) 40320 (D.) 43240
- (86.) A man from point A walks 20 meters to the North, then turns left and walks 40 m. Again turns left and walks 20 m. At last he turns right and walks 20 m to reach at point B. Find distance and direction from Point A to B.  
 (A.) 20 m/ West (B.) 40 m/ East (C.) 60 m/ West (D.) 60 m/ East
- (87.) If "p" denotes "subtracted from", "q" denotes "multiplies by", "r" denotes "added to" and "s" denotes "divided by",  $10r8q4s8p9$  then =?  
 (A.) 5 (B.) 7 (C.) 9 (D.) 11
- (88.) A, B, C, D, E are five rivers. River 'A' is shorter than 'B' but no longer than 'E'. C is the longest. D is a little shorter than B and little taller than A. which is the shortest river?  
 (A.) B (B.) D (C.) E (D.) A
- (89.) In a row 64 students, Manjoj's rank is 19th from the top, then what will be his position from bottom?  
 (A.) 44 (B.) 45 (C.) 46 (D.) 47
- (90.) Select the correct option form the given alternatives.  
 DLOC: ECI:: TOH:?  
 (A.) EET (B.) EAT (C.) AET (D.) ETA
- (91.) Selection the correct option form given alternatives. 0.16: 0.0016::1.02: ?  
 (A.) 10.20 (B.) 0.102 (C.) 0.0102 (D.) 1.020
- (92.) A solid cube with a size of 4 inches, sides are painted red, green and black, this solid cube has been cut into a 1-inch cubes. How many cubes have nocolour on any panel?  
 (A.) Zero (B.) 4 (C.) 8 (D.) 16
- (93.) In a certain code language TULIPS is written as GFORKH. How will 'GARDEN' be written in that language?  
 (A.) SZIXVM (B.) TZIWUM (C.) TBIWVK (D.) TZIWVM
- (94.) How many times does 'n' occur before 'p' in the given series?  
**mstnpzxnpnqpypranpst**  
 (A.) 2 (B.) 3 (C.) 4 (D.) 5
- (95.) Which number will be opposite 3?



- (A.) 2 (B.) 1 (C.) 4 (D.) 5
- (96.) Which of the following diagram indicates the best relation between Woman, Mother, Doctor?





A Vision of Victory

# V V ACADEMY


➤ RPF ➤ RRB GROUP - D ➤ POSTAL ➤ SI/CONSTABLE

Address : Near Chuttugunta Signals, Eluru Road, VJA 2. Cell : 9985525552, 8977525552



(A.) C (B.) D (C.) A (D.) B

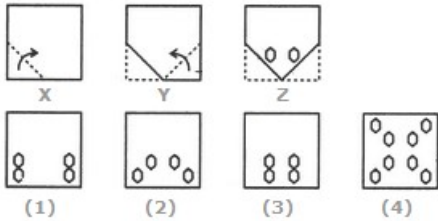
(97.) Find water image of

M  N



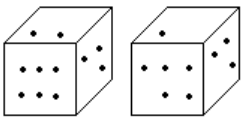
(A.) C (B.) D (C.) A (D.) B

(98.) Choose a figure which would most closely resemble the unfolded form of figure (Z).



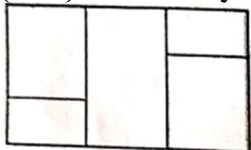
(A.) C (B.) D (C.) A (D.) B

(99.) Two positions of dice are shown below. How many points will be on the top when 2 points are at the bottom?



(A.) 6 (B.) 5 (C.) 4 (D.) 1

(100.) How many number of rectangles are there in the following diagram?



(A.) 9 (B.) 10 (C.) 11 (D.) 12





**TELANGANA CIRCLE-PA/SA EXAM -2023**

**ANSWER**

(1.)	C	(2.)	D	(3.)	B	(4.)	A	(5.)	A
(6.)	A	(7.)	A	(8.)	D	(9.)	A	(10.)	C
(11.)	A	(12.)	B	(13.)	C	(14.)	A	(15.)	A
(16.)	A	(17.)	D	(18.)	B	(19.)	C	(20.)	D
(21.)	A	(22.)	B	(23.)	A	(24.)	C	(25.)	D
(26.)	C	(27.)	B	(28.)	C	(29.)	B	(30.)	C
(31.)	D	(32.)	C	(33.)	C	(34.)	C	(35.)	A
(36.)	C	(37.)	C	(38.)	C	(39.)	A	(40.)	B
(41.)	B	(42.)	C	(43.)	C	(44.)	B	(45.)	A
(46.)	B	(47.)	A	(48.)	C	(49.)	B	(50.)	C
(51.)	C	(52.)	C	(53.)	A	(54.)	D	(55.)	C
(56.)	C	(57.)	C	(58.)	C	(59.)	B	(60.)	A
(61.)	A	(62.)	D	(63.)	D	(64.)	D	(65.)	B
(66.)	B	(67.)	D	(68.)	B	(69.)	D	(70.)	D
(71.)	A	(72.)	B	(73.)	D	(74.)	B	(75.)	A
(76.)	B	(77.)	B	(78.)	A	(79.)	A	(80.)	B
(81.)	A	(82.)	B	(83.)	C	(84.)	C	(85.)	C
(86.)	C	(87.)	A	(88.)	C	(89.)	C	(90.)	C
(91.)	C	(92.)	C	(93.)	D	(94.)	C	(95.)	A
(96.)	A	(97.)	A	(98.)	D	(99.)	D	(100.)	B

