



RAJASTHAN CIRCLE-PA/SA EXAM -2023

- (1.) Mar correct option related to packet of regd. news paper
(A.) In case of breach of conditions the packet will not be forwarded but will be returned to sender
(B.) Sender will be required to pay double deficiency in the internal postage
(C.) If the sender wishes to repost the article after complying with necessary conditions, he may do so by paying fresh postage in full on the article.
(D.) All the above are correct
- (2.) Night Post Office may extend up to and by whom
(A.) 08:30 pm, DG posts (B.) 07:00 pm, HOC
(C.) 10:00 pm, PMG (D.) 06:00 pm, SSP
- (3.) Manufacture and use of fictitious postage stamps for any purpose whatsoever is prohibited, is an offence punishable under which section of the Indian Penal Code?
(A.) Section 263-A (B.) Section 253-A
(C.) Section 71 (D.) Section 191-B
- (4.) If the lock and key are not surrendered by the renter to the Postmaster within 15 days of the expiry of the period of rent or the renting of the post box is not renewed within the aforesaid period, then?
(A.) Renter will not be eligible to apply for post box for another two years
(B.) His security deposit will be forfeited
(C.) Both A and B
(D.) None of the above
- (5.) A Poste Restante article (except value payable) kept in the post office to which it is addressed, for a period not exceeding?
(A.) 15 days (B.) 7 days
(C.) One month (D.) Three Months
- (6.) When the last day for the payment of any postal dues or for the receipt of sums due from the post office falls on a Sunday or post office holiday, then which shall be taken as the last day for such transmissions?
(A.) The actual day even if it is a Sunday or post office holiday
(B.) The next working day after the due date
(C.) The last working day before the due date
(D.) None of these
- (7.) Second Class Malls are forwarded by air transmission under the following circumstances?
(A.) If they are marked for its transmission (B.) Are paid with the requisite air surcharge
(C.) Both A and B (D.) Second class mails will never get air transmission
- (8.) A letter posted unpaid is charged on delivery with?
(A.) Normal postage rate (B.) Double the postage
(C.) Half the postage rate (D.) Three times the postage rate
- (9.) A person who wishes to obtain a reply from his dent without putting him to the expenditure of paying the postage charges may use which among the following service?
(A.) Postcards (B.) Inland Letter Cards
(C.) Business Reply Service (D.) Any of the above
- (10.) Franking machine has
(A.) Value die (B.) License die
(C.) Both a & b (D.) None of these



- (11.) Articles the addresses of which are so illegible or Incomplete as to render delivery impossible are called
- (A.) Insufficient address article (B.) Undeliverable articles
(C.) Refused article (D.) Undelivered articles
- (12.) Correspondence for personnel of the Indian Armed Forces serving outside India addressed to the Indian Army PO
- (A.) Should be prepaid as air article
(B.) Should be prepaid as if SAL
(C.) Should be prepaid at inland rates & will be treated as inland article for all purpose
(D.) None of above
- (13.) Mark correct option related to FOREIGN POST official postal articles
- (A.) The rules relating to private correspondence apply equally to official postal article
(B.) Service stamps can be used for prepaying outward official foreign mail but the postage due on inward foreign mail addressed to Govt officers cannot be paid by means of service stamps
(C.) All of above are correct
(D.) None of these are correct
- (14.) In reference to PO guide part II, mark incorrect option related to Postcard
- (A.) Should not be folded, cut or altered and should be sent unenclosed
(B.) In case of breach of the conditions postcards are treated as letter and postage will be taxed accordingly.
(C.) Unpaid and Insufficiently paid postcards are forwarded to their destination and are taxed.
(D.) The left hand half of the front (address side) should be reserved for the address of the or franking recipient, postage stamps Impressions.
- (15.) Which of the following foreign article is not eligible for re-direction in India by air?
- (A.) Letters (B.) Small Packets
(C.) Aerogrammes (D.) Postcards
- (16.) If a foreign article is addressed 'poste restante' from which day warehousing charges will be levied?
- (A.) Thirty first day (B.) Twenty first day
(C.) Eighth day (D.) Fifteenth day
- (17.) If the addressee of an inward foreign parcel wants to take delivery of his parcel at the office of exchange, then-
- (A.) it will be refused as there is no provision in the rule
(B.) it has to be approved by the D section of the directorate
(C.) the addressee has to call on the office of exchange with all the documents related including proof of his identity
(D.) none of the above
- (18.) an assessment memo accompanies -
- (A.) only the Inward foreign parcel on which duty is assessed
(B.) all inward foreign parcels even If no duty is assessed on it
(C.) all Inward foreign parcels weighing more than 10 KG
(D.) None of the above
- (19.) The delivery of a foreign article in the country of destination:
- (A.) Varies from country to country (B.) Uniform all over
(C.) As desired by the sender (D.) None of these
- (20.) Which of the following indication is permitted on contents of a small packet in foreign post?
- (A.) Registration number of goods (B.) Trade marks



- (C.) Address of sender (D.) All of the above
- (21.) Which among the following is not a part of IT Modernization Project of Department of Posts?
 (A.) Data Centre
 (B.) Disaster Recovery Centre
 (C.) Providing solar powered and portable handheld computing devices (Micro ATM compliant) to all the Branch Post Offices
 (D.) Providing automatic mail content detection system to Returned Letter Offices (RLO)
- (22.) Which committee approved the IT Modernization project of Department of posts in November 2012.
 (A.) Cabinet Committee on Economic affairs (CCEA)
 (B.) Cabinet Committee on Parliamentary affairs (CCPA)
 (C.) Cabinet Committee on Accommodation (CCA)
 (D.) Cabinet Committee on Security (CCS)
- (23.) What was the change management stream of the IT Modernization Project
 (A.) Changing the old computer and services
 (B.) Changing the products, services of the department
 (C.) Training preparing all the employees of the department including GDS
 (D.) Changing all the earlier vendors of the department
- (24.) With reference to RICT which of the following cannot be considered as a peripheral of Main computing device-
 (A.) Laser Printer (B.) Thermal Printer
 (C.) 2D Scanner (D.) Finger print Scanner
- (25.) DPMS and F&A is a module of?
 (A.) CIS (B.) CSI
 (C.) NI (D.) None of these
- (26.) Which module is used for dispatching the accountable articles?
 (A.) Back office (B.) IPVS (C.) DPMS (D.) POS
- (27.) Counter user cannot login in multiple systems as counter are mapped with -
 (A.) MAC-Media Access control binding (B.) MAC-Multiple Access control binding
 (C.) MAC-Mapped Access control binding (D.) None of the above
- (28.) How many digits the Facility ID, Unique ID to identify a post office has?
 (A.) Eight (B.) Nine (C.) Eleven (D.) Ten
- (29.) Transactions that can be done using DARPAN CBS app includes
 (A.) Deposits only (B.) Deposits and withdrawals only
 (C.) Withdrawals only (D.) Account opening, deposits and withdrawals
- (30.) The type of printer used in DARPAN
 (A.) Dot matrix (B.) Thermal (C.) Ink jet (D.) Laser
- (31.) Which are the custom forms used to book International Speed Post articles
 (A.) CN 22 & CN 23 (B.) CN 25 & CN 21
 (C.) CN 21 & CN 23 (D.) CN 22 & CN 21
- (32.) At present 4 types of Post Cards are available. Find the Odd one out.
 (A.) Meghdoot Postcard (B.) Reply Postcard
 (C.) Printed Postcard (D.) Competition Postcard
- (33.) For periodicals, following details must present on the periodicals. Find the odd one out.
 (A.) RNI number (B.) DOP license number
 (C.) Price (D.) Content Declaration



- (34.) What is the discount rate for corporate customer who is paying monthly Rs 90laks for booking speed post articles?
(A.) 10% (B.) 15% (C.) 20% (D.) 25%
- (35.) Which of the following custom forms used for International Speed post articles having value above 300 SDR?
(A.) No custom forms are required (B.) CN22
(C.) CN23 (D.) PB50
- (36.) Maximum weight of International speed post article:
(A.) 20 Kg (B.) 30 Kg (C.) 35 Kg (D.) 50 Kg
- (37.) Which of the following service is not a premium product?
(A.) Logistic Post service (B.) Speed Post
(C.) Business Parcel (D.) Book Packet
- (38.) What is the maximum amount up to which you can insure an article booked at post offices other than Branch post offices?
(A.) Rs 600. (B.) Rs 20,000
(C.) Rs 50,000 (D.) Rs 1,00,000
- (39.) What is the solution that provides business customers a cost-effective and efficient solution, which manages the entire value chain from collection to storage to transmission to distribution across the country In India Post?
(A.) Direct Post (B.) Business parcel
(C.) Logistic Post (D.) Media Post
- (40.) Which of the following statements are true w.r.t. Direct Post?
(i) Articles posted as 'Direct Post will bear no address or name on the communication.
(ii) These will be accepted in bulk in designated offices.
(iii) Direct post articles will not be posted in a letter box.
(iv) in case of articles meant for delivery in other towns, Direct Post articles would be accepted in PIN Code wise bundles.
(A.) (i) & (ii) are correct (B.) (iii) & (iv) are correct
(C.) (i) & (iii) are correct (D.) (i) (ii) (iii) & (iv) are correct
- (41.) A VP articles on which Intimation has been served and lying in the deposit for seven days can be retained
(A.) For further seven days without any fees (B.) For further seven days on payment of fees
(C.) For fifteen days on payment of fees (D.) Cannot be retained return to sender after 7 days
- (42.) Acknowledgement attached card to an unclaimed/returned registered article for redelivery to sender should be
(A.) Delivered back to sender along with article (B.) Filed
(C.) Along with delivery slips (D.) Destroyed
- (43.) Acquittance rolls should be signed by.....and forwarded to
(A.) Sub account assistant, HO (B.) Treasurer, Account office
(C.) S.P.M, HO (D.) Treasurer, HO
- (44.) The duties of Head postman is
(A.) To convey cash from and to the treasury or town 50s
(B.) To take out for delivery article that has been returned by other postman as unclaimed or refused
(C.) To work in the place of any postman who is temporarily absent
(D.) All the above



- (45.) In which of the following SB order the annual account maintenance charge for POSB account was revised to Rs 50 instead of Rs 100?
(A.) SB order 01/2021 (B.) SB order 07/2021
(C.) SB order 08/2021 (D.) SB order 02/2021
- (46.) Each set of a sorting office is divided into
(A.) Two departments (B.) Three departments
(C.) Four departments (D.) None of these
- (47.) At all stations except charging stations, the set about to proceed
(A.) Should be present one hour before the departure of the train
(B.) 15 Min before the departure of the train
(C.) At the hour fixed by the Supdt, which will be at least half an hour before the departure of the train
(D.) None of these
- (48.) The Insurance seals must always remain in the possession of the.....who is responsible for it safe custody, and will be held answerable if any Improper use is made of it?
(A.) Mall Sorting Assistant (B.) Head Sorting Assistant
(C.) Head Record Officer (D.) Parcel Sorting Assistant
- (49.) How to treat articles addressed in Indian Language intended for dispatch abroad?
(A.) No action required (B.) Returned to sender for transcription
(C.) Transcription in French should be added (D.) Transcription in English should be added
- (50.) How much test checks of credits and debits in each bill shall be checked by another senior and experience official in the office of account? (related with foreign mails)
(A.) 5% (B.) 10% (C.) 20% (D.) 25%
- (51.) Which of the following is called the 'ecological hot spot of India?'
(A.) Western Ghats (B.) Easter Ghats
(C.) Western Himalayas (D.) Easter Himalayas
- (52.) With which country India has the longest International boundary?
(A.) Nepal (B.) Pakistan
(C.) China (D.) Bangladesh
- (53.) The speaker of the Lok Sabha has to address his/her letter of resignation to
(A.) Prime Minister of India (B.) President of India
(C.) Deputy Speaker of Lok Sabha (D.) Minister of Parliamentary Affairs
- (54.) Which type of democracy do we follow in India?
(A.) Direct (B.) Presidential
(C.) Representative (D.) Dictatorship
- (55.) First Indian Prime Minister to visit Siachen has been
(A.) Rajiv Gandhi (B.) Inder Kumar Gujaral
(C.) Man Mohan Singh (D.) Narendra Modi
- (56.) What is the name of the currency of Bangladesh?
(A.) Taka (B.) Lek (C.) Dinar (D.) Peso
- (57.) Which of the following folk/tribal dances is associated with Uttar Pradesh?
(A.) Veedhi (B.) Thora (C.) Tamasha (D.) Raut
- (58.) Which among the following incidents took place immediately after theChauriChaura incident?
1. Gandhi called off Civil Disobedience Movement
2. Gandhi was arrested and sent to jail
3. Swaraj Party was established
Which among the above statements is/are correct?



- (A.) Only 1 & 2 (B.) Only 2 & 3 (C.) Only 1&3 (D.) 1, 2&3
- (59.) A paid 500 to a Government servant to get him a contract for the canteen. The Government servant I could not get the contract for A. can A recover 500 paid by him to the Government servant?
- (A.) Yes, the agreement between them is valid and enforceable.
 (B.) Yes, the agreement is not opposed to public policy,
 (C.) No, the agreement is a voidable agreement and can be avoided by A
 (D.) No, the agreement is void.
- (60.) S sells certain goods to B of Bombay. The goods are handed over to the railways for transmission to B. in. the meantime, B sells the goods to a third party T for consideration without the consent of S. B becomes Insolvent. In this case-
- (A.) S has the right of stoppage in transit. (B.) S has lost his right of stoppage in transit.
 (C.) Station Master has the right of stoppage in transit. (D.) None of the above.
- (61.) Sonal and Preeti started working on a project and they can complete the project in 30 days. Sonal worked for 16 days and Preeti completed the remaining work In 44 days. How many days would Preeti have taken to complete the entire project all by herself?
- (A.) 20 days (B.) 25 days (C.) 55 days (D.) 60 days
- (62.) A man completes a journey in 10 hours. He travels first half of the journey at the rate of 21 km/hr and second half at the rate of 24 km/hr. Find the total Journey in km.
- (A.) 220 km (B.) 224 km (C.) 230 km (D.) 234 km
- (63.) A person crosses a 600 m long street in 5 minutes. What is his speed in km per hour?
- (A.) 3.6 (B.) 7.2 (C.) 8.4 (D.) 10
- (64.) If 48metres of cloth costs Rs 4800, how many metres of it can be bought for RS 5600?
- (A.) 53metres (B.) 59metres. (C.) 63metres (D.) 56metres
- (65.) 2000 soldiers in a fort had enough food for 20 days. But some soldiers were transferred to another fort and the food lasted for 25 days. How many soldiers were transferred?
- (A.) 400 (B.) 450 (C.) 525 (D.) 500
- (66.) If cost of 15 eggs is Rs. 75, then find out the cost of 4 dozen eggs.
- (A.) Rs. 240 (B.) Rs. 300 (C.) Rs. 150 (D.) Rs. 185
- (67.) Evaluate:
 $0.07 \times 0.28 \div 0.02 + 0.48 - 2.48 \div 0.04$
- (A.) 60.54 (B.) - 60.54 (C.) 3.3 (D.) -3.3
- (68.) Evaluate:
 $(8+4-2) \times (17-12) \times 10-89$
- (A.) 3950 (B.) 411 (C.) 412 (D.) 3949
- (69.) Evaluate:
 $23\% \text{ of } 8040 + 42\% \text{ of } 545 = ?\% \text{ of } 3000$
- (A.) 56.17 (B.) 63.54 (C.) 71.04 (D.) 69.27
- (70.) Suresh gave 40% of his income to his wife. He gave 25% of the remaining amount to his son. Of the remaining amount he spent 60% on education. Now the amount with him is Rs 2700. What is the amount he gave to his wife?
- (A.) Rs 4000 (B.) Rs 5000 (C.) Rs 8000 (D.) Rs 6000
- (71.) Evaluate:
 $65\% \text{ of } ? = 20\% \text{ of } 422.50$
- (A.) 84.5 (B.) 130 (C.) 139.425 (D.) 200
- (72.) A shopkeeper buys 8 articles for Rs 16 and sells 9 articles for Rs 20. What is his gain or loss percent?
- (A.) 10% loss (B.) 10% gain



- (C.) 111/9% gain (D.) 11 1/9% loss
- (73.) If cost price of 20 tables is equal to selling price of 25 tables, find the loss
(A.) 10% (B.) 20% (C.) 30% (D.) 40%
- (74.) A sum of Rs 25400 was lent out in two parts, one at 12% and the other at 12%. If the total annual Income is 3124.2 the money lent at 12% is
(A.) 15240 (B.) 25400 (C.) 10160 (D.) 31242
- (75.) A lent Rs 5,000 to B for 2 years and Rs 3,000 to C for 4 years on simple interest at the same rate of Interest and received RS 2200 in all from both of them as interest. The rate of interest per annum is
(A.) 5% (B.) 7% (C.) 7 1/8% (D.) 10%
- (76.) A sum of money will double itself In 16 years at simple interest at an yearly rate of
(A.) 25% (B.) 12 1/2% (C.) 6 1/4% (D.) 8 1/3%
- (77.) The average marks of a student obtained in Physics, Chemistry and Biology is 70. If the student obtained 90 marks in Mathematics, then the new average is
(A.) 80 (B.) 78 (C.) 76 (D.) 75
- (78.) The average of five numbers is 27. If one number is excluded, the average becomes 25. The excluded number is
(A.) 25 (B.) 27 (C.) 30 (D.) 35
- (79.) The average of 7 consecutive numbers is 20. What is the largest of these numbers?
(A.) 21 (B.) 22 (C.) 23 (D.) 24
- (80.) 3 men and 4 boys can complete a certain work in 8 days, while 4 men and 4 boys can complete the same work in 6 days. Then 2 men and 4 boys will finish it in.....days
(A.) 24 days (B.) 8 days
(C.) 6 days (D.) None of these
- (81.) There is certain relation between two given words on one side of and one word is given on the other side of while other word is to be found from the given alternatives, having the same relation with this word as the given pair of words bear. Choose the best alternative.
Accommodation: Rent: Journey: ?
(A.) Expense (B.) Octrol (C.) Freight (D.) Fare
- (82.) The following question consist of two words each that have a certain relationship to each other, followed by four lettered pair of words. Select the lettered pair that has the same relationship as the original pair of words.
Doctor: Hospital
(A.) Plumber: Wrench (B.) Chef: Kitchen
(C.) Water: Reservoir (D.) Farmer: Village
- (83.) Book is related to magazine in the same way newspaper is related to,
(A.) Journal (B.) News (C.) Article (D.) Headline
- (84.) Choose the word which is different from the rest.
(A.) Flute (B.) Guitar (C.) Sitar (D.) Violin
- (85.) Complete the series: 4, -8, 16, -32, 64, (...)
(A.) 128 (B.) -128 (C.) 192 (D.) -192
- (86.) Choose the alternative that will complete the series: aku, fpz, kue, (...), ueo, zjt
(A.) pzej (B.) Jjd (C.) jue (D.) kve
- (87.) If PLANE is coded as OKZMD in a certain language, how will TRAIN be coded?
(A.) SQZHM (B.) UQBHO (C.) SQZJM (D.) USBJM
- (88.) Introducing a man, a woman said, "His wife is the only daughter of my father". How was that man related to the woman?



A Vision of Victory

www.vvacademy.com

V V ACADEMY

➤ RPF ➤ RRB GROUP - D ➤ POSTAL ➤ SI/CONSTABLE



Address : Near Chuttugunta Signals, Eluru Road, VJA 2. Cell : 9985525552, 8977525552

- (A.) Brother (B.) Father-in-law
(C.) Maternal Uncle (D.) Husband

(89.) After walking a distance of 50 m to the south of her house, Lakshmi turns left and walks another 20 m. Then she turns north and walks 30 m and then starts walking to her house. In which direction is she walking now?

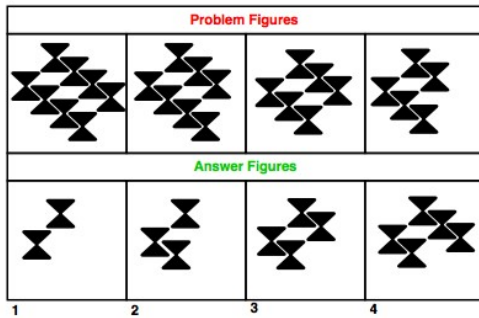
- (A.) North-west (B.) North (C.) South-east (D.) East

(90.) How many 8s are there in the following number sequence which are preceded by 7 but no immediately followed by 4?

238257837846984327895781529

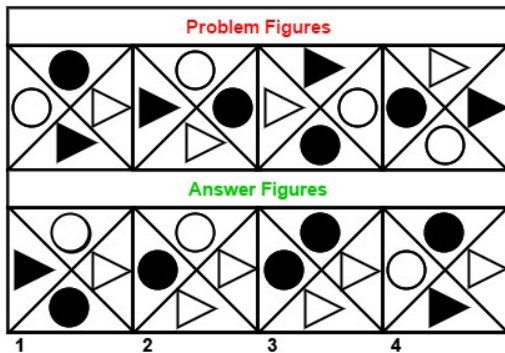
- (A.) One (B.) Two (C.) Three (D.) Four

(91.) The following question consists of some Problem Figures followed by other figures marked 1, 2, 3, 4 called the Answer Figures. Find out the correct answer figure that should come next in the sequence of problem figures.



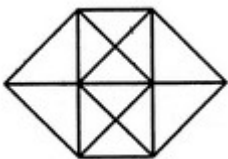
- (A.) 1 (B.) 2 (C.) 3 (D.) 4

(92.) The following question consists of some Problem Figures followed by other figures marked 1, 2, 3, 4 called the Answer Figures. Find out the correct answer figure that should come next in the sequence of problem figures.



- (A.) 1 (B.) 2 (C.) 3 (D.) 4

(93.) Find the number of triangles in the figure.



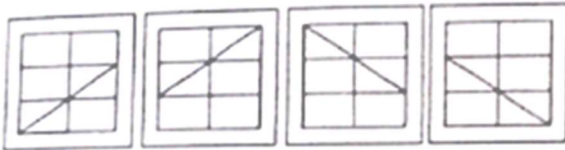
- (A.) 20 (B.) 24 (C.) 28 (D.) 32

(94.) In the following question, which answer figure will complete the question figure?

Question figure:



Answer figure:



1

2

3

4

(A.) 1

(B.) 2

(C.) 3

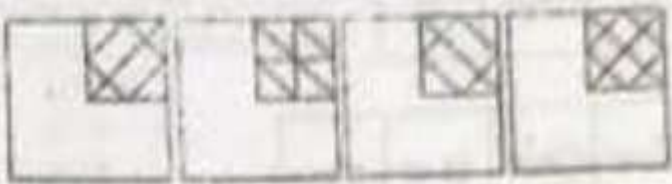
(D.) 4

(95.) In the following question, which answer figure will complete the question figure?

Question figure:



Answer figure:



1

2

3

4


(A.) 1

(B.) 2

(C.) 3

(D.) 4

(96.) Which figure includes all the specific parts of the question figure?





A Vision of Victory

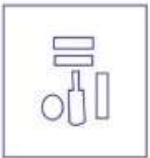
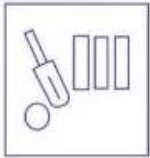
www.vvacademy.com

VV ACADEMY

➤ RPF ➤ RRB GROUP - D ➤ POSTAL ➤ SI/CONSTABLE



Address : Near Chuttugunta Signals, Eluru Road, VJA 2. Cell : 9985525552, 8977525552



(A.) 1

(B.) 2

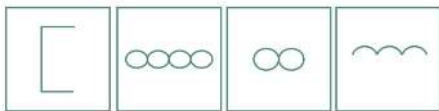
(C.) 3

(D.) 4

(97.) From the given answer figures, find that answer figure which will replace the question mark in the question figure.



Answer Figures



(A)

(B)

(C)

(D)


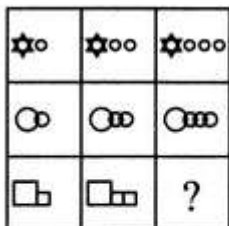
(A.) 1

(B.) 2

(C.) 3

(D.) 4

(98.) Select a suitable figure from the four alternatives that would complete the figure matrix



(1) (2) (3) (4)



A Vision of Victory

VV ACADEMY

➤ RPF ➤ RRB GROUP - D ➤ POSTAL ➤ SI/CONSTABLE

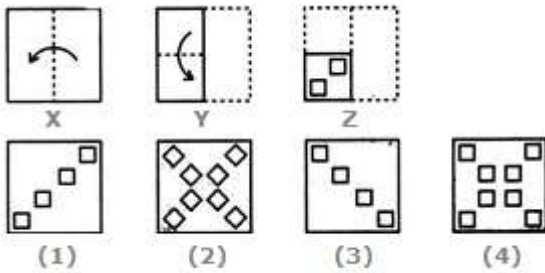
Address : Near Chuttugunta Signals, Eluru Road, VJA 2. Cell : 9985525552, 8977525552

www.vvacademy.com



- (A.) 1 (B.) 2 (C.) 3 (D.) 4

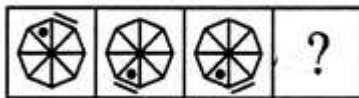
(99.) Following question consists of a set of three figures X, Y and Z showing a sequence of folding of a piece of paper. Fig (Z) shows the manner in which the folded paper has been cut. These three figures are followed by four answer figures from which you have to choose a figure which would most closely.



- (A.) Fig. A (B.) Fig. B (C.) Fig. C (D.) Fig. D

(100.) From the given answer figures, find that answer figure which will replace the question mark in the question figure.

Problem Figures:



- (A) (B) (C) (D)

Answer Figures:



- (1) (2) (3) (4) (5)

- (A.) 1 (B.) 2 (C.) 3 (D.) 4



**RAJASTHAN CIRCLE-PA/SA EXAM -2023****ANSWER**

(1.)	D	(2.)	A	(3.)	A	(4.)	B	(5.)	C
(6.)	B	(7.)	C	(8.)	B	(9.)	C	(10.)	C
(11.)	B	(12.)	C	(13.)	C	(14.)	D	(15.)	B
(16.)	C	(17.)	C	(18.)	B	(19.)	A	(20.)	D
(21.)	D	(22.)	A	(23.)	C	(24.)	A	(25.)	B
(26.)	B	(27.)	A	(28.)	C	(29.)	D	(30.)	B
(31.)	A	(32.)	D	(33.)	D	(34.)	C	(35.)	C
(36.)	C	(37.)	D	(38.)	D	(39.)	C	(40.)	D
(41.)	B	(42.)	C	(43.)	C	(44.)	D	(45.)	C
(46.)	C	(47.)	C	(48.)	B	(49.)	D	(50.)	C
(51.)	A	(52.)	D	(53.)	C	(54.)	C	(55.)	C
(56.)	A	(57.)	B	(58.)	B	(59.)	D	(60.)	C
(61.)	D	(62.)	B	(63.)	B	(64.)	D	(65.)	A
(66.)	A	(67.)	B	(68.)	B	(69.)	D	(70.)	D
(71.)	B	(72.)	C	(73.)	B	(74.)	C	(75.)	D
(76.)	C	(77.)	D	(78.)	D	(79.)	C	(80.)	D
(81.)	D	(82.)	B	(83.)	A	(84.)	A	(85.)	B
(86.)	A	(87.)	A	(88.)	D	(89.)	A	(90.)	C
(91.)	C	(92.)	D	(93.)	C	(94.)	A	(95.)	C
(96.)	A	(97.)	D	(98.)	A	(99.)	D	(100.)	C