



ODISHA CIRCLE-PA/SA EXAM -2023

- (1.) Night Post Office working can be extended up to 8.30 PM and also kept open on Sundays under the orders of the
(A.) Director General Posts (B.) Head of the Circle
(C.) Director of Postal Services (D.) Senior Superintendent/Superintendent of Post Offices.
- (2.) Articles addressed to person who are dead will be treated
(A.) Deposited. (B.) Un-disposed
(C.) Unclaimed (D.) Delivered
- (3.) When a registered article of the letter mail or a parcel is received in the office of delivery in a damaged condition, a notice will be sent by the Postmaster of that office to the addressee requesting him to attend the Post Office within how many days in the case of foreign article to take delivery of it either personally or through an agent.
(A.) 2 days (B.) 7 days (C.) 10 days (D.) 15 days
- (4.) A traveler may not use the "post-restante" service for more than
(A.) One month (B.) Two months
(C.) 15 days (D.) Three months
- (5.) Subject to the provisions, a value-payable article marked "Post-Restante" is kept in the post office to which it is addressed for a period of
(A.) 07 days only (B.) 30 days only
(C.) One year only (D.) Unlimited days
- (6.) Complaints relating to loss or damage to a registered or insured article where a claim for compensation is made should be preferred within
(A.) 03 months from the date of posting of the article
(B.) 06 months from the date of posting of the article
(C.) 09 months from the date of posting of the article
(D.) 12 months from the date of posting of the article
- (7.) Any parcel found in a letter box will be treated and charged as
(A.) Unregistered parcel (B.) Registered parcel
(C.) Insured parcel. (D.) None of the above
- (8.) Foreign parcels posted in Branch Offices cannot be insured for more than:
(A.) Rs. 500 (B.) Rs. 600 (C.) Rs. 1000 (D.) Rs 5000
- (9.) Post Offices are divided into how many classes?
(A.) One (B.) Two (C.) Three (D.) Four
- (10.) Postal articles exchanged in foreign post are broadly divided into.....categories?
(A.) One (B.) Two (C.) Three (D.) Four
- (11.) As per Post Office Guide Part-II, letters should not exceed.....in weight
(A.) 5kgs (B.) 3kgs (C.) 4kgs (D.) 2kgs
- (12.) The general maximum limit of weight for a foreign parcel is:
(A.) 10 kilogram: (B.) 15 kilogram
(C.) 20 kilogram (D.) No limit.
- (13.) An Aerogramme should not exceed 110 x 220 mm when folded and should not weight more than?
(A.) 2 grams (B.) 3 grams (C.) 5 grams (D.) 6 grams
- (14.) Insufficiently paid outward foreign article can be taxed only be
(A.) Office of posting (B.) RMS office
(C.) Office of foreign exchange (D.) Country of destination



- (15.) UPU stands for
(A.) United Postal University (B.) United Postal Union
(C.) Universal People's Union (D.) Universal Postal Union.
- (16.) The period of detention of undelivered articles addressed to foreign countries is governed by the internal regulations of the:
(A.) Country of origin (B.) Country of destination
(C.) Both (a) & (b) (D.) None of the above
- (17.) The phrase "Port Paye" means:
(A.) Postage has to be paid at port of departure (B.) Postage has to be paid by addressee
(C.) Postage has been pre-paid (D.) Free postage
- (18.) With reference to foreign parcels which of the following is incorrect:
(A.) The length should not exceed 1.05metre
(B.) The sum of the length and the greatest circumference measured in a direction other than the length should not exceed 2metres.
(C.) A parcel should have a surface measuring not less than 90 mm x 140 mm
(D.) The general maximum limit of weight is 10kgs.
- (19.) Disaster Recovery Centre is located at.....
(A.) Chennai (B.) Mumbai (C.) Mysore. (D.) Bangalore
- (20.) "NI" with reference to IT modernization stands for:
(A.) Negative Indicator. (B.) Network Inclusion
(C.) National Information (D.) Network Integrator
- (21.) "CBS stands for
(A.) Civil Banking Solution (B.) Central Banking Service
(C.) Core Banking Solution (D.) Core Banker's Service
- (22.) The letter 'P' standing first from left in the term 'PNOP' refers to:
(A.) Parcel (B.) Premium (C.) Pre-paid (D.) Post paid
- (23.) The primary Network Service Provider for IT Modernization Project inDoP is
(A.) BSNL (B.) Airtel (C.) Jio (D.) Vodafone
- (24.) For what abbreviation "CSI stands for
(A.) Core System Integrator (B.) Central System Integrator
(C.) Core Solution Inventor (D.) Central Service Inventor
- (25.) RAM means:
(A.) Read and Memorize (B.) Random Access Memory
(C.) Read Access Memory (D.) Right of Access to Memory
- (26.) Who is the vendor for Cash Management and Cash loading in Post Office ATMs?
(A.) AGS (B.) TCS (C.) Infosys (D.) Ricoh
- (27.) Nanyatha is related to:
(A.) Online letter box painting (B.) Input device
(C.) A software for letter clearance from letter boxes (D.) Rural network device
- (28.) The rate of premium for Pradhan Mantri Jeevan Jyoti Bima Yojana (PMJJBY) is
(A.) Rs. 330 per month (B.) Rs. 436 per month
(C.) Rs. 436 per annum (D.) Rs. 20 per annum
- (29.) What is "AEPS"
(A.) Aadhar Enabled Pension System. (B.) Aadhar Enabled Payment System
(C.) Aadhar Enabled Private System (D.) Aadhar Enclosed Payment Service
- (30.) What is the maximum weight limit of a book packet containing periodicals?



- (A.) Not more than 4 kg (B.) Not more than 5 kg
(C.) Not more than 7 kg (D.) Not more than 10 kg
- (31.) What is the maximum weight and insurance of a Speed Post consignment
(A.) 35 kg and Rs. 1lakh (B.) 20 kg and Rs. 1lakh
(C.) 35 kg and Rs. 10000 (D.) 20 kg and Rs. 10000
- (32.) What is the price of a Meghdoot Postcard?
(A.) Rs. 5.00 (B.) Rs. 2.50 (C.) Rs. 0.50 (D.) Rs. 0.25
- (33.) If there is breach of condition in a single post card of Rs. 0.50 posted in letter box how much amount should be taxed.
(A.) Rs.9 (B.) Rs. 4.50
(C.) Returned to sender or RLO (D.) No fees
- (34.) Registration charges for foreign letter is?
(A.) Rs. 25 (B.) Rs. 50 (C.) Rs. 70 (D.) Rs. 100
- (35.) CN22 form is to be attached to foreign articles if the value is less than?
(A.) SDR 100 (B.) SDR 200 (C.) SDR 300 (D.) SDR 500
- (36.) What is the minimum amount for opening of a Sukanya Samriddhi Account?
(A.) Rs. 250 (B.) Rs. 500 (C.) Rs. 1000 (D.) Rs. 5000
- (37.) Which of the product/services have not been launched by IPPB?
(A.) Unified Payment Interface (B.) Domestic Money Transfer
(C.) Virtual Debit Card (D.) Issue of Printed Passbook
- (38.) What is the charge for issue of a duplicate Pass Book?
(A.) Rs. 20.00 (B.) Rs.50.00 (C.) Rs. 100.00 (D.) Free
- (39.) In PLI schemes "Endowment Assurance is otherwise termed as:
(A.) Suraksha (B.) Sumangal (C.) Suvidha (D.) Santosh
- (40.) Compensation for loss of Speed Post article is equal to:
(A.) Speed Post charges or Rs. 1000 whichever is less
(B.) Double Speed Post charges or Rs. 1000 whichever is less
(C.) Triple the Speed Post charges
(D.) No compensation
- (41.) Who can purchase a PLI policy?
(A.) A Graduate (B.) A Lawyer (C.) A Doctor (D.) All of above
- (42.) A postcard of private manufacture of more than prescribed size and thickness was found in delivery office. The article will be.....
(A.) Taxed with double the amount
(B.) Returned to office of posting
(C.) Taxed with single the amount
(D.) Treated as letter and difference between minimum postage payable on a letter and postage already paid was charged.
- (43.) Speed Post receipts have:
(A.) 11-digit alphanumeric code (B.) 14-digit numeric code
(C.) 12-digit numeric code (D.) 13-digit alphanumeric code
- (44.) As per SB order 26/2022 dated 30.12.2022 the rate of interest effective from 01.01.2023 in respect of 1 year Time Deposit account is:
(A.) 6.6% (B.) 6.7% (C.) 6.8% (D.) 6.9%
- (45.) The round and oblong MO stamps and insurance seal should be kept in custody of
(A.) Sub Account PA (B.) Money Order PA



- (C.) Postmaster (D.) None of the above
- (46.) How the matter relating to information regarding any postal transaction requested by any Government officer, is disposed of?
- (A.) The Postmaster will refer the matter to the Head of the Circle for order
(B.) The Postmaster will refer the matter to the Inspector Posts for order
(C.) The Postmaster will refer the matter to the Head Postmaster for order
(D.) The Postmaster will supply the information to the Government servant
- (47.) Disposal of surplus funds at Sub-Office may be disposed of among the following ways:
- (A.) By remittances to the treasury or bank in the case of Sub-Offices situated at treasury or bank stations
(B.) By remittance to another sub office
(C.) Both (a) & (b)
(D.) None of the above
- (48.) Daily report of HSA must be submitted to
- (A.) Head Record Officer only (B.) Superintendent RMS through Record Officer
(C.) Sorting Assistant (D.) Inspector
- (49.) Transit bags must always be closed and sealed in the presence of:
- (A.) The IRM/Asst.Sudpt. of RMS
(B.) The Head Sorting Assistant/Mail Guard/Mail Agent
(C.) The senior most MTS of the set
(D.) None of the above
- (50.) The preservation period of work papers of RMS offices and Section is:
- (A.) 06 months (B.) 12 months (C.) 18 months (D.) 24 months
- (51.) "Ethics is the science of
- (A.) Truth (B.) Beauty (C.) Conduct (D.) Mind
- (52.) It is important to have a good to be successful in your career
- (A.) Appearance (B.) Attendance
(C.) Attitude (D.) Respect
- (53.) Which of the following states does not share a boundary with Myanmar?
- (A.) Arunachal Pradesh (B.) Manipur
(C.) Nagaland (D.) Assam
- (54.) The Jakham dam is located in which State?
- (A.) Madhya Pradesh (B.) Gujarat
(C.) Rajasthan (D.) Uttar Pradesh
- (55.) Which of the following is "not" a fundamental duty of a Citizen?
- (A.) Respect for the Constitution (B.) Respect for the National Flag
(C.) Respect for the National Anthem (D.) Respect for the Government
- (56.) The member of the Rajya Sabha are elected by
- (A.) The people
(B.) Lok Sabha
(C.) Elected members of the Legislative Assembly of the States
(D.) Elected members of the Legislative Council of the States
- (57.) 1024 kilo byte is equal to
- (A.) 1 (one) tera byte (B.) 1 (one) mega byte
(C.) 1 (one) giga byte (D.) 1 (one) hexa byte
- (58.) "Martyr's Day" is celebrated every year on
- (A.) 30 January (B.) 31 January (C.) 28 January (D.) 29 January



- (59.) Which Indian Academy is promoting dance, drama and music
 (A.) Sahitya Academy (B.) Lalita Kala Academy
 (C.) National Theatre Academy (D.) Sangeet Natak Academy
- (60.) When was the "Quit India" movement launched by Mahatma Gandhi?
 (A.) 1946 AD (B.) 1939 AD (C.) 1942 AD (D.) 1940 AD
- (61.) 'A' does a work in 10 days and 'B' does the same work in 15 days. In how many days they together will do the same work?
 (A.) 5 days (B.) 6 days (C.) 8 days (D.) 9 days
- (62.) How many minutes does Aditya take to cover a distance of 2 km, if he runs at a speed of 20km/hr?
 (A.) 5 minutes (B.) 6 minutes (C.) 3 minutes (D.) 9 minutes
- (63.) A sum of money at simple interest amounts to Rs. 815 in 3 years and to Rs. 854 in 4 years. The sum is:
 (A.) Rs. 650 (B.) Rs. 690 (C.) Rs. 698 (D.) Rs. 700
- (64.) If a sum of money at simple interest double in 6 years, it will become 4 times in:
 (A.) 12 years (B.) 14 years (C.) 16 years (D.) 18 years
- (65.) If 6 books weight 1260kgs. How many books will weigh 3150 kgs?
 (A.) 12 (B.) 18 (C.) 15 (D.) 20
- (66.) If weight of 8 identical articles is 4.8kgs, what will be weight of 11 such articles?
 (A.) 6.6kgs (B.) 6.2kgs (C.) 6.4kgs (D.) 6.0kgs
- (67.) $107 \times 107 + 93 \times 93 =$
 (A.) 19578 (B.) 19418 (C.) 20098 (D.) 21908
- (68.) $3 + 33 + 333 + 3.33 = ?$
 (A.) 363.3 (B.) 372.33 (C.) 702.33 (D.) 702
- (69.) $5005 - 5000 \div 10 =$
 (A.) 4505 (B.) 450.5 (C.) 4515 (D.) 5405
- (70.) $(3080 + 6160) \div 28 = ?$
 (A.) 320 (B.) 440 (C.) 330 (D.) 340
- (71.) $3640 \div 14 \times 16 + 340 =$
 (A.) 0.70 (B.) 4500 (C.) 4480 (D.) 4600
- (72.) The average of 25 results is 18. The average of first twelve of them is 14 and that of last twelve is 17. Find the thirteenth result.
 (A.) 74 (B.) 78 (C.) 72 (D.) 76
- (73.) The average of 11 results is 60. If the average of first six results is 58 and that of the last six is 63, find the sixth result.
 (A.) 86 (B.) 76 (C.) 56 (D.) 66
- (74.) The average of five consecutive numbers is 4. The largest of these number is:
 (A.) 06 (B.) 07 (C.) 05 (D.) 08
- (75.) $28\% \text{ of } 450 + 45\% \text{ of } 280 =$
 (A.) 258 (B.) 254 (C.) 256 (D.) 252
- (76.) $9\% \text{ of } ? = 6.3$
 (A.) 75 (B.) 70 (C.) 60 (D.) 65
- (77.) What is 15 percent of Rs.347?
 (A.) Rs. 3.40 (B.) Rs. 3.75 (C.) Rs. 4.50 (D.) Rs. 5.10
- (78.) If loss is $\frac{1}{3}$ of S.P., the loss percentage is:
 (A.) $16 \frac{2}{3}\%$ (B.) 20% (C.) 25% (D.) $33 \frac{1}{3}\%$
- (79.) Find S.P. If CP- Rs. 56.25 and gain is 20%
 (A.) Rs. 67.50 (B.) Rs. 72.40 (C.) Rs. 65.80 (D.) Rs. 70.20



A Vision of Victory

VV ACADEMY

➤ RPF ➤ RRB GROUP - D ➤ POSTAL ➤ SI/CONSTABLE

Address : Near Chuttugunta Signals, Eluru Road, VJA 2. Cell : 9985525552, 8977525552

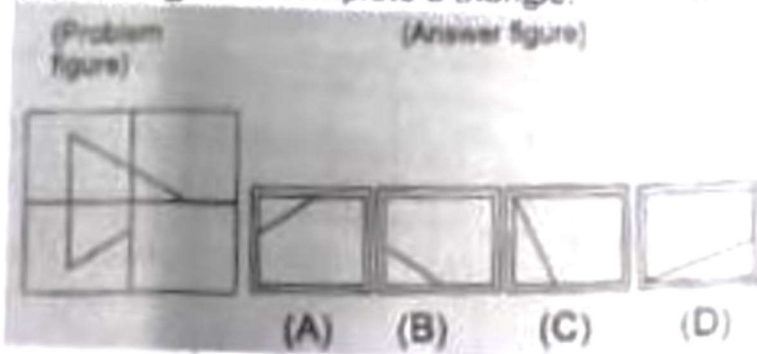
www.vvacademy.com



(80.) 'A' and 'B' together can complete a piece of work in 4 days. If 'A' alone can complete the same work in 12 days, in how many days can 'B' alone complete that work?

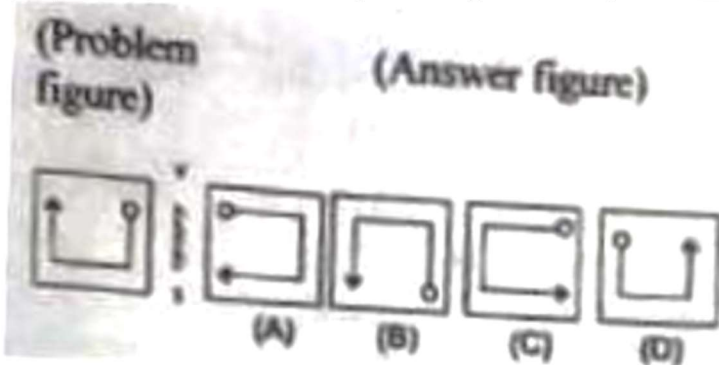
- (A.) 8 days (B.) 7 days (C.) 6 days

(81.) Find out the answer figures that best fit in the question figure to complete a triangle.



- (A.) A (B.) B (C.) C (D.) D

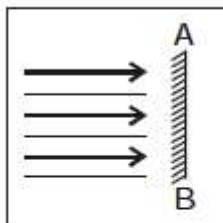
(82.) Find out mirror image of the problem figure from answer figures.



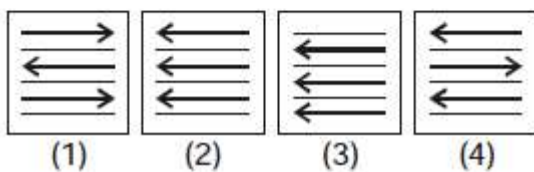
- (A.) A (B.) B (C.) C (D.) D

(83.) Find out mirror image of the problem figure from answer figures.

Question Figure :



Answer Figures :



- (A.) A (B.) B (C.) C (D.) D

(84.) Find out mirror Image of the problem figure from answer figures



A Vision of Victory

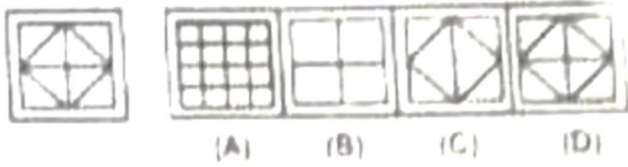
VV ACADEMY

RPF > RRB GROUP - D > POSTAL > SI/CONSTABLE

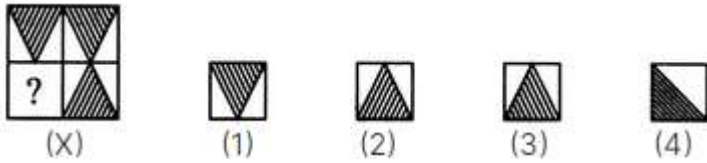
Address : Near Chuttugunta Signals, Eluru Road, VJA 2. Cell : 9985525552, 8977525552

www.vvacademy.com





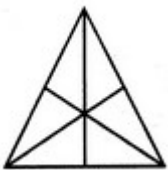
- (A.) A (B.) B (C.) C (D.) D
- (85.) Complete the pattern in problem figure amongst the option given in the answer figure?



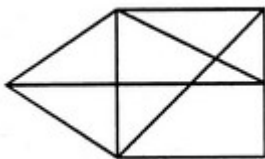
- (A.) A (B.) B (C.) C (D.) D
- (86.) Find the number of triangles in the given figure



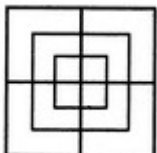
- (A.) 28 (B.) 12 (C.) 13 (D.) 25
- (87.) Find the number of triangles in the given figure



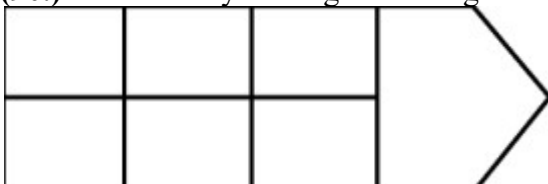
- (A.) 16 (B.) 13 (C.) 15 (D.) 14
- (88.) Find the number of triangles in the given figure



- (A.) 12 (B.) 14 (C.) 15 (D.) 13
- (89.) Find the number of squares in the given figure



- (A.) 13 (B.) 14 (C.) 15 (D.) 16
- (90.) How many rectangles in the given figure





A Vision of Victory

VV ACADEMY

➤ RPF ➤ RRB GROUP - D ➤ POSTAL ➤ SI/CONSTABLE

Address : Near Chuttugunta Signals, Eluru Road, VJA 2. Cell : 9985525552, 8977525552


www.vvacademy.com



- (A.) 6 (B.) 9 (C.) 12 (D.) 18

(91.) Which of the following will complete the figure in question mark?

Question figure:

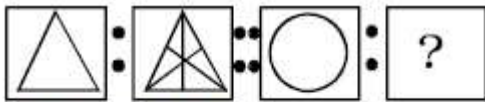


Answer figure:

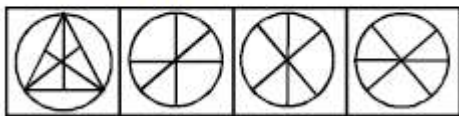


- (A.) A (B.) B (C.) C (D.) D

(92.) Which of the following will complete the figure in question mark?



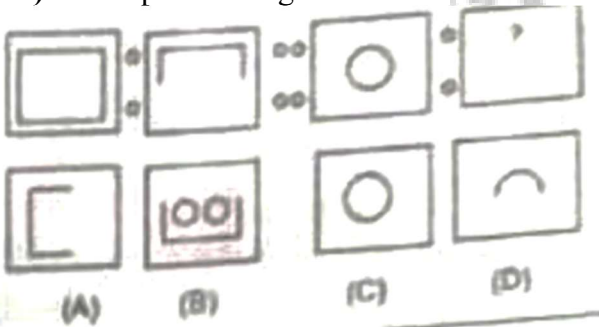
Answer Figures :



- (1) (2) (3) (4)

- (A.) A (B.) B (C.) C (D.) D

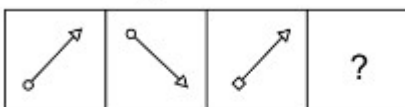
(93.) Complete the figure series



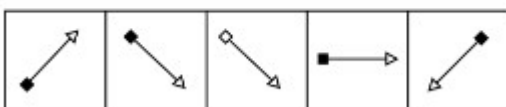
- (A.) A (B.) B (C.) C (D.) D

(94.) Complete the figure series

Problem Figures



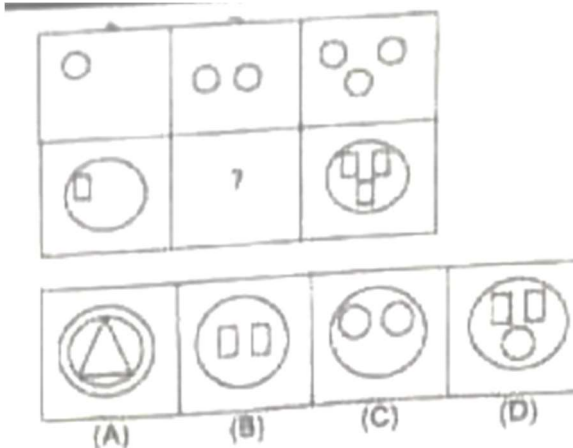
Answer Figures



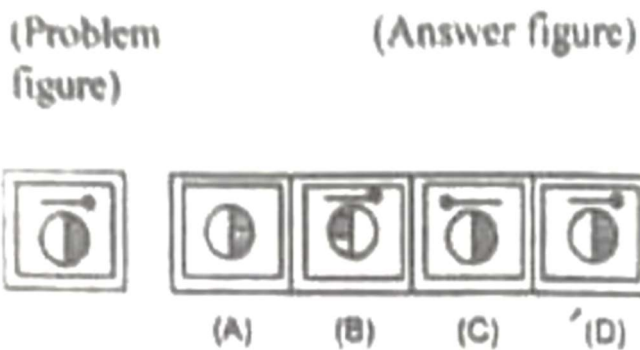
- (a) (b) (c) (d) (e)



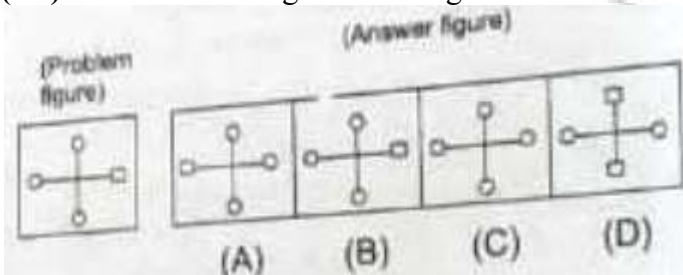
- (A.) A (B.) B (C.) C (D.) D
- (95.) Complete the figure series



- (A.) A (B.) B (C.) C (D.) D
- (96.) Find out amongst answer figures which is similar to the problem figures



- (A.) A (B.) B (C.) C (D.) D
- (97.) Find out amongst answer figures which is similar to the problem figures



- (A.) A (B.) B (C.) C (D.) D
- (98.) Find out amongst answer figures which is similar to the problem figures

A Vision of Victory

www.vvacademy.com

VV ACADEMY

➤ RPF ➤ RRB GROUP - D ➤ POSTAL ➤ SI/CONSTABLE

Address : Near Chuttugunta Signals, Eluru Road, VJA 2. Cell : 9985525552, 8977525552

(Problem figure)

(Answer figure)



- (A.) A (B.) B (C.) C (D.) D

(99.) Find out amongst answer figures which is similar to the problem figures

(Problem figure)

(Answer figure)

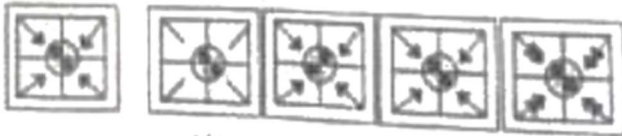


- (A.) A (B.) B (C.) C (D.) D

(100.) Find out amongst answer figures which is similar to the problem figures

(Problem figure)

(Answer figure)



- (A.) A (B.) B (C.) C (D.) D



ODISHA CIRCLE-PA/SA EXAM -2023

ANSWER

(1.)	A	(2.)	C	(3.)	D	(4.)	D	(5.)	A
(6.)	A	(7.)	B	(8.)	B	(9.)	C	(10.)	B
(11.)	D	(12.)	C	(13.)	B	(14.)		(15.)	D
(16.)	B	(17.)	C	(18.)	D	(19.)	C	(20.)	D
(21.)	C	(22.)	A	(23.)	A	(24.)	A	(25.)	B
(26.)	A	(27.)	C	(28.)	C	(29.)	B	(30.)	B
(31.)	A	(32.)	D	(33.)	B	(34.)		(35.)	C
(36.)	A	(37.)	D	(38.)	B	(39.)	D	(40.)	B
(41.)	D	(42.)	D	(43.)	D	(44.)	A	(45.)	C
(46.)	A	(47.)	C	(48.)	B	(49.)	B	(50.)	C
(51.)	C	(52.)	C	(53.)	D	(54.)	C	(55.)	D
(56.)	C	(57.)	B	(58.)	A	(59.)	D	(60.)	C
(61.)	B	(62.)	B	(63.)	C	(64.)	D	(65.)	C
(66.)	A	(67.)	C	(68.)	B	(69.)	A	(70.)	C
(71.)	B	(72.)	B	(73.)	D	(74.)	A	(75.)	D
(76.)	B	(77.)	D	(78.)	C	(79.)	A	(80.)	C
(81.)	A	(82.)	D	(83.)	B	(84.)	D	(85.)	D
(86.)	A	(87.)	A	(88.)	C	(89.)	C	(90.)	D
(91.)	D	(92.)	C	(93.)	D	(94.)	B	(95.)	B
(96.)	D	(97.)	B	(98.)	C	(99.)	B	(100.)	C

