



MADHYA PRADESH CIRCLE-PA/SA EXAM -2023

- (1.) Following two statements be read carefully, and choose the correct option given below.
Statement I: Post Box facility is available in all Post Offices.
Statement: Post Box facility is available free of cost.
- (A.) Both statements are correct
(B.) Both statements are incorrect
(C.) Statement I is incorrect and Statement II is correct
(D.) Statement I is correct and Statement II is Incorrect
- (2.) Generally, stamps should be affixed at which place of the address side of an envelope.
(A.) Left hand top corner (B.) Right hand top corner
(C.) Left hand bottom corner (D.) Right hand bottom corner
- (3.) Post Offices are divided into how many classes?
(A.) Two (B.) Three (C.) Four (D.) Five
- (4.) Any person wishing to use a franking machine shall apply to which of the following authority?
(A.) Post Master of HO (B.) Head of the Postal Sub Division
(C.) Head of the Postal Division (D.) Head of the Postal Region
- (5.) The Head Quarters of Gujrat Postal Circle is located in which of the following city?
(A.) Surat (B.) Vadodara
(C.) Gandhinagar (D.) Ahmadabad
- (6.) Which section of Customs Act 1962 empowers Custom Department to prohibit import of certain goods?
(A.) Section 10 (B.) Section 11 (C.) Section 12 (D.) Section 13
- (7.) The Asian Pacific Postal Union, a restricted union has its headquarters in which city?
(A.) New Delhi (B.) Tehran (C.) Colombo (D.) Bangkok
- (8.) What is the maximum number of International Reply Coupons that can be sold to an individual at a time?
(A.) One (B.) Ten
(C.) Hundred (D.) No maximum limit
- (9.) Printed papers services in the foreign posts generally correspond to which service of inland post?
(A.) Book Packet (B.) Registered newspaper
(C.) Periodicals (D.) Small packets
- (10.) The use of Inland letter cards for addressing communication to foreign countries is permissible to which group of countries?
(A.) Bhutan, Bangladesh and Nepal (B.) Sri Lanka, Maldives and Myanmar
(C.) Pakistan, Afghanistan and Iran (D.) Thailand, Lao and Vietnam
- (11.) "Custom Declaration Forms" are used in which of the following activity?
(A.) POSB operations (B.) Philately activities
(C.) PLI/RPLI operations (D.) International article booking
- (12.) An Aerogram should not weigh more than how many grams?
(A.) Three grams (B.) Four grams
(C.) Five grams (D.) Six grams
- (13.) Examination and assessment of custom duty on Inward foreign articles is performed in which office?
(A.) Custom House Office (B.) Foreign Post Office.
(C.) General Post Office (D.) Import/Export Office



- (14.) For the purpose of fixing surcharges and combine charges on International articles countries are divided into how many groups?
(A.) Four (B.) Five (C.) Six (D.) Seven
- (15.) For the purpose of surcharge international articles are divided into how many groups?
(A.) Two (B.) Three (C.) Four (D.) Five
- (16.) The full form of UPU is?
(A.) United Postal Union (B.) Universal Postal Union
(C.) United States Postal Union (D.) University Postal Union
- (17.) Which of the following term is used in Finacle?
(A.) HFINBPT (B.) SAP (C.) IPVS (D.) DPMS
- (18.) In reference with the IT Modernization project, the term "FSI" refers to?
(A.) Financial Services Institute (B.) Financial System Institute
(C.) Financial System Integrator (D.) None of the above
- (19.) IT Modernization project has been divided into how many segments?
(A.) Eight (B.) Nine (C.) Ten (D.) Eleven
- (20.) In term "T-Code", alphabet T represents which of the following?
(A.) Table (B.) Transaction
(C.) Technology (D.) None of the above
- (21.) MAC binding is commonly used with reference to which segment of IT Modernization project?
(A.) NI (B.) CM (C.) CSI (D.) None
- (22.) Terms "NSP-1 and NSP-2 are associated with which of the following?
(A.) Network connectivity (B.) Finacle updates
(C.) SAP updates (D.) ATM cash management
- (23.) EMV chip is used in which of the item?
(A.) BI Tools (B.) RICT Device
(C.) ATM Card (D.) None of the above
- (24.) "Delivery Postman Management System" (DPMS) is associated with which one of the following?
(A.) CSI (B.) CM (C.) RH (D.) FSI
- (25.) Word CBS is associated with which segment of IT Modernization project?
(A.) FSI (B.) CSI (C.) RH (D.) MOH
- (26.) Training of staff for new technology has planned under which segment of IT Modernization project?
(A.) RH (B.) MOH (C.) CM (D.) NI
- (27.) How many types of Insurance schemes are offered under Rural Postal Life Insurance (RPLI)?
(A.) 6 (B.) 7 (C.) 8 (D.) 9
- (28.) Philatelic Deposit Account (PDA) account can be open with a minimum deposit of how much amount?
(A.) Rs 1000 (B.) Rs 800 (C.) Rs 400 (D.) Rs 200
- (29.) In which year Rural Postal Life Insurance (RPL) was introduced?
(A.) 1991 (B.) 1992 (C.) 1994 (D.) 1995
- (30.) Deen Dayal SPARSH Yojna is related to which. Segment/activity of India Post?
(A.) Stamps (B.) Insurance (C.) Banking (D.) Mail
- (31.) What is the maximum Insurance cover under Pradhan Mantri Suraksha Bima Yojna (PMSBY)?
(A.) 10Lakh (B.) 8Lakh (C.) 5Lakh (D.) 2Lakh
- (32.) In which year India Post Payments Bank (IPPB) was formally launched by Prime Minister of India?
(A.) 2018 (B.) 2019 (C.) 2020 (D.) 2021



- (33.) The annual interest rate applicable on Post Office Savings Account (POSA) for fourth quarter of FY 2022-23 is?
(A.) 4.0% (B.) 5.5% (C.) 5.8% (D.) 6.6%
- (34.) In which year Department of Posts has started JanSuraksha Schemes in all CBS Post Offices?
(A.) 2011 (B.) 2012 (C.) 2013 (D.) 2015
- (35.) "Warehousing Service" is one of the features of which services offered by India Post?
(A.) Speed Post (B.) Media Post
(C.) Logistics Post (D.) Direct Post
- (36.) The maximum weight limit for an international speed posts article is
(A.) 35 kg (B.) 50 kg (C.) 70 kg (D.) 75 kg
- (37.) Which of the following term is not associated with "Philately"?
(A.) Special cover (B.) First day cover
(C.) National Saving Certificates (D.) Miniature sheets
- (38.) Which among following is not a special feature of Postal Life Insurance (PLI)?
(A.) Income tax rebate (B.) Loan facility
(C.) Nomination (D.) Low Bonus
- (39.) Postal Life Insurance (PLI) Introduced in which year?
(A.) 1884 (B.) 1894 (C.) 1904 (D.) 1914
- (40.) Registration is not compulsory on which of the following case?
(A.) Any insured article (B.) Any value payable article
(C.) Any article bearing the word "Registered" (D.) Any article with weight less than 4 kilograms
- (41.) A letter should not weigh more than how many kilograms (Kgs)?
(A.) One Kg (B.) Two Kgs (C.) Three Kgs (D.) Four Kgs
- (42.) Deduction/ Non deduction of TDS in SCSS accounts has been clarifies by which SB Order?
(A.) 58 Order 17/2021 (B.) SB Order 27/2021
(C.) SB Order 37/2021 (D.) SB Order 47/2021
- (43.) PM CARES for Children Scheme 2021" was introduced vide which SB Order?
(A.) SB Order 23/2021 (B.) SB Order 33/2021
(C.) SB Order 43/2021 (D.) SB Order 53/2021
- (44.) The movement of S.O. slip is from?
(A.) Head Post Office to Sub Post Office (B.) Sub Post Office to Branch Post Office
(C.) Sub Post Office to Head Post Office (D.) Branch Post Office to Sub Post Office
- (45.) What is the maximum limit for loose cash remittance between account office and its subordinate offices through departmental employee?
(A.) Rs 5Lakh (B.) Rs 10Lakh (C.) Rs 15Lakh (D.) Rs 20Lakh
- (46.) Which one of the following is not part/branch/department of a Head Post Office?
(A.) Mail Branch. (B.) Delivery Branch
(C.) Sorting Branch (D.) Loan Branch
- (47.) Which one is not part/department of Sorting Mail office?
(A.) Mail (B.) Sorting
(C.) Registration (D.) Philately
- (48.) Metal Tokens are used by which category of official?
(A.) Selected RMS Official (B.) Circle Office Official
(C.) Regional Office Official (D.) Postal Division Official
- (49.) Mail department of Sorting Mail Office is head by which authority?
(A.) Head Sorting Assistant (B.) Sorting Assistant



- (C.) Registration Sorting Assistant (D.) Parcel Sorting Assistant
- (50.) For what purpose the Trial Notes are used in International Mail transmission?
 (A.) To determine the most favourable route (B.) To determine the minimum postage
 (C.) To find out the missing articles (D.) To calculate the custom charge
- (51.) Which one of the following state does not share its boundary with Assam?
 (A.) Mizoram (B.) Nagaland (C.) Manipur (D.) Sikkim
- (52.) Which one of the following river originates from Himalayas?
 (A.) Narmada (B.) Tapti (C.) Ravi (D.) Kaveri
- (53.) Who is the present Governor of Bihar?
 (A.) Dr. C.VAnanda Bose (B.) ProfGaneshi Lal
 (C.) Sh.Phagu Chauhan (D.) Sh.Mangubhai C. Patel.
- (54.) Municipal Corporation is associated with which administrative set up?
 (A.) Rural area local bodies (B.) Hilly area administrative bodies
 (C.) Tribal area administrative bodies (D.) Urban area local bodies
- (55.) During Indian freedom struggle in which year the famous Non Cooperation movement started?
 (A.) 1918 (B.) 1921 (C.) 1925 (D.) 1930
- (56.) Which one of the following was associated with "Bhoodan Movement"?
 (A.) Bhagat Singh (B.) Subhash Chandra Bose.
 (C.) Vinoba Bhawe (D.) Mangal Pande
- (57.) Madhubani" style is famous for which of the following activity?
 (A.) Temple architecture (B.) Classical music
 (C.) Indian painting (D.) Classical dance
- (58.) Famous classical dance "Kathak has its roots in which Indian state?
 (A.) Kerala (B.) Tamil Nadu
 (C.) Uttar Pradesh (D.) Manipur
- (59.) The total geographical area of Bihar approximately?
 (A.) 94.163 Sq KM (B.) 84,163 Sq KM
 (C.) 74,163 Sq KM (D.) 64,163 Sq KM
- (60.) Personal commitment to work hard and do one's very best is associated with which of the following?
 (A.) Confidentiality (B.) Empathy
 (C.) Work ethics (D.) Impartiality
- (61.) In final exam of class XI there are 50 students, 20% students failed. How many students passed to class XII?
 (A.) 20 (B.) 30 (C.) 40 (D.) 50
- (62.) Mr.Amit has bought an item for Rs. 500 and sells it for Rs. 700. Calculate the profit percentage?
 (A.) 30 (B.) 35 (C.) 40 (D.) 45
- (63.) Ms.Radha bought a cycle for Rs. 5000. For how much rupees should she sell it so as to gain 10%?
 (A.) Rs. 5600 (B.) Rs. 5550 (C.) Rs. 5525 (D.) Rs. 5500
- (64.) How much time will it take for an amount of Rs. 500 to yield Rs. 25 as interest at 5 % per annum of simple interest?
 (A.) 1 year (B.) 2 years (C.) 3 years (D.) 4 years
- (65.) Mr. Ajay has invested an amount of Rs. 9000 for 5 years with a simple interest of 5% per annum. What will be interest amount?
 (A.) Rs.2000 (B.) Rs.2150 (C.) Rs.2250 (D.) Rs.2350
- (66.) The individual weight (in kgs) of 10 players of a team are 54, 55, 56, 57, 58, 59, 60, 61, 62 and 63. Calculate the average weight (in kgs)?



- (A.) 56.5 (B.) 57.5 (C.) 58.5 (D.) 59.5
- (67.) The mean weight of a group of five boys is 56 kg. The individual weights (in kg) of four of them are 52, 57, 55 and 60. Find the weight (in kg) of the fifth boy?
- (A.) 54 (B.) 55 (C.) 56 (D.) 57
- (68.) Aman and Rakesh together can do a task in 15 days, which Amit alone can do the same task 20 days. In how many days Rakesh alone can do it?
- (A.) 60 (B.) 50 (C.) 40 (D.) 30
- (69.) A can do a bit of work in 10 days, which B alone can do in 15 days. In how many days both cooperating can do it?
- (A.) 5 (B.) 6 (C.) 7 (D.) 8
- (70.) A person crosses 800 meter bridge in 8 minutes. What is his speed in meter per minutes?
- (A.) 8 (B.) 80 (C.) 100 (D.) 800
- (71.) A marine ship covers a certain distance at a speed of 300 kmph in 7 hours. To cover the same distance in 4 hours, it must travel at a speed (kmph) of?
- (A.) 520 (B.) 525 (C.) 530 (D.) 535
- (72.) The salary of 9 workers is Rs. 27,000. What will be the salary of 4 workers?
- (A.) Rs. 4000 (B.) Rs. 9000 (C.) Rs. 12000 (D.) Rs. 15000
- (73.) What will be final answer of following:-
 $5(10+15 \div 5 \times 4 - 2 \times 2)$
- (A.) 80 (B.) 85 (C.) 90 (D.) 95
- (74.) Solve the following:
 $20+20 \times 20 \div 20$
- (A.) 30 (B.) 40 (C.) 50 (D.) 60
- (75.) In a class of 60 students, 30% are girls. The number of boys in the class?
- (A.) 18 (B.) 30 (C.) 42 (D.) 45
- (76.) 5 buses carry 250 passengers. How many passengers can be carried by 6 such buses?
- (A.) 300 (B.) 350 (C.) 400 (D.) 450
- (77.) Calculate the final value of 40% of 60?
- (A.) 50 (B.) 40 (C.) 32 (D.) 24
- (78.) A cricketer has average score of 80 runs in eight Innings. Find out how many runs are to be scored by him in the ninth inning to raise the average score to 81?
- (A.) 89 (B.) 88 (C.) 87 (D.) 86
- (79.) A man completes a journey in 5 hours. He travels first half of the journey at the rate of 13 km/hr and second half at the rate of 15 km/hr. Find the total Journey in km?
- (A.) 89.6 (B.) 79.6 (C.) 69.6 (D.) 59.6
- (80.) A shopkeeper bought 300 apples and 200 mangoes. He found 15% apples and 25% mangoes were rotten. Find the percentage of fruits in good condition?
- (A.) 85% (B.) 84% (C.) 82% (D.) 81%
- (81.) Look at this series: Z2, ?, X8, W16, V32, ?
 What number should fill the blank?
- (A.) Y3 (B.) Y4 (C.) U3 (D.) U4
- (82.) Look at this series: IV, VI, VIII, X, ?, XIV, What number should fill the blank?
- (A.) XI (B.) XII (C.) XIII (D.) XV
- (83.) Ball is to Cricket as Shuttlecock is to?
- (A.) Football (B.) Badminton (C.) Hockey (D.) Kabaddi
- (84.) Look at this series: 3, 1, (1/3), (1/9), What number should come next?



A Vision of Victory

V V ACADEMY

➤ RPF ➤ RRB GROUP - D ➤ POSTAL ➤ SI/CONSTABLE

Address : Near Chuttugunta Signals, Eluru Road, VJA 2. Cell : 9985525552, 8977525552

www.vvacademy.com



(85.) What will be the next number?
4, 10, 5, 11, 6, 12...?

- (A.) 1/12 (B.) 1/27 (C.) 1/49 (D.) 1/81

- (A.) 13 (B.) 10 (C.) 7 (D.) 5

(86.) Look at this series: 49, 49, 37, 37, 25, 25,
What number should come next?

- (A.) 13 (B.) 14 (C.) 15 (D.) 16

(87.) Which word does NOT belong with the others?

- (A.) Second (B.) Hour (C.) Meter (D.) Minute

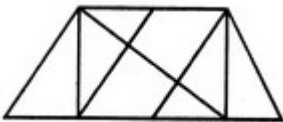
(88.) KCD, LEF, MGH, ?_, OKL

- (A.) NJI (B.) PU (C.) PJI (D.) NIJ

(89.) BMM, DOO, FQQ, __, JUU


- (A.) GTT (B.) GSS (C.) HSS (D.) HTT

(90.) Find the number of triangles in the given figure.




- (A.) 8 (B.) 10 (C.) 12 (D.) 14

(91.) How many rectangles are there in the figure given below?



- (A.) 16 (B.) 18 (C.) 20 (D.) 22

(92.) Identify the figure that completes the pattern.



(X)



(1)



(2)



(3)



(4)

- (A.) 1 (B.) 2 (C.) 3 (D.) 4

(93.) Select the alternative which represents three out of the five alternative figures which when fitted into each other would form a complete square.



(1)



(2)



(3)



(4)



(5)

- (A.) 124 (B.) 345 (C.) 123 (D.) 135

(94.) Choose the alternative which is closely resembles the mirror image of the given combination.

MALAYALAM

- (1) MALAYALAM (2) MAJAYAJAM
(3) MALAYALAM (4) MAGAYAGAM



A Vision of Victory

V V ACADEMY

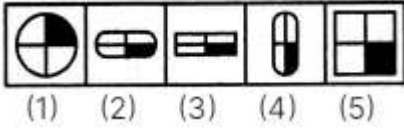
➤ RPF ➤ RRB GROUP - D ➤ POSTAL ➤ SI/CONSTABLE

Address : Near Chuttugunta Signals, Eluru Road, VJA 2. Cell : 9985525552, 8977525552

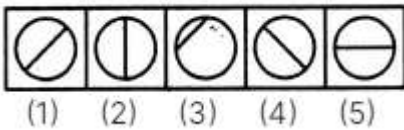
www.vvacademy.com



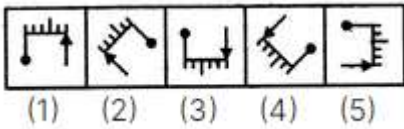
(A.) 1 (B.) 2 (C.) 3 (D.) 4
 (95.) Choose the figure which is different from the rest.



(A.) 1 (B.) 2 (C.) 3 (D.) 4
 (96.) Choose the figure which is different from the rest



(A.) 1 (B.) 2 (C.) 3 (D.) 4
 (97.) Choose the figure which is different from the rest



(A.) 1 (B.) 2 (C.) 3 (D.) 5
 (98.) Count the number of triangles and squares in the given figure.

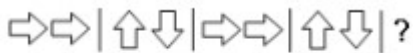


(A.) 24 triangles and 3 rectangles (B.) 28 triangles and 3 rectangles
 (C.) 24 triangles and 5 rectangles (D.) 28 triangles and 5 rectangles
 (99.) Complete the series



(A.) 1 (B.) 2 (C.) 3 (D.) 4

(100.) Complete the series



(A.) 1 (B.) 2 (C.) 3 (D.) 4

**MADHYA PRADESH CIRCLE-PA/SA EXAM -2023****ANSWER**

(1.)	B	(2.)	B	(3.)	B	(4.)	C	(5.)	D
(6.)	B	(7.)	D	(8.)	B	(9.)	A	(10.)	A
(11.)	D	(12.)	A	(13.)	B	(14.)	B	(15.)	A
(16.)	B	(17.)	A	(18.)	C	(19.)		(20.)	B
(21.)	A	(22.)	A	(23.)		(24.)	A	(25.)	A
(26.)	C	(27.)	A	(28.)	D	(29.)	D	(30.)	A
(31.)	D	(32.)	A	(33.)	A	(34.)	D	(35.)	C
(36.)	A	(37.)	C	(38.)	D	(39.)	A	(40.)	D
(41.)	B	(42.)	C	(43.)	B	(44.)	A	(45.)	A
(46.)	D	(47.)	D	(48.)	A	(49.)	A	(50.)	A
(51.)	D	(52.)	C	(53.)		(54.)	D	(55.)	
(56.)	C	(57.)	C	(58.)	C	(59.)	A	(60.)	C
(61.)	C	(62.)	C	(63.)	D	(64.)	A	(65.)	C
(66.)	C	(67.)	C	(68.)	A	(69.)	B	(70.)	C
(71.)	B	(72.)	C	(73.)	C	(74.)	B	(75.)	C
(76.)	A	(77.)	D	(78.)	A	(79.)	C	(80.)	D
(81.)	B	(82.)	B	(83.)	B	(84.)	B	(85.)	C
(86.)	A	(87.)	C	(88.)	D	(89.)	C	(90.)	D
(91.)	B	(92.)	D	(93.)	D	(94.)	B	(95.)	A
(96.)	C	(97.)	A	(98.)	D	(99.)	A	(100.)	B