



JHARKAND CIRCLE-PA/SA EXAM -2023

- (1.) Who is the Secretary of Postal Service Board (PSB)?
(A.) Director General (Posts) (B.) Secretary (Posts)
(C.) A senior staff officer of the Directorate (D.) Minister of Communications
- (2.) Machine franking articles posted in letter boxes shall be treated as:
(A.) Postage paid (B.) Half postage paid
(C.) Unpaid (D.) None of the above
- (3.) Which of the following articles cannot be posted in the letter boxes:
(A.) Letters: (B.) Postcards
(C.) Inland Letter Cards (D.) Registered letters
- (4.) In the event of breach of any condition of the License, the license of Automatic Franking machine In India will be forthwith cancelled by:
(A.) Head of Circle (B.) Postmaster of Post Office
(C.) Head of Division (D.) Postmaster of Head Post Office
- (5.) Any person who desires to avail himself of the facility of having his mail delivered through a post box should submit an application in writing to the?
(A.) Postmaster concerned (B.) Head of the Division
(C.) Head of the Circle (D.) Head of the Region
- (6.) Money order become void after
(A.) Last date of the following month (B.) Last date of 2nd following month
(C.) One year (D.) Last date of the following year
- (7.) Which one the following class of articles are exempted from Postage Charges:
(A.) Blind literature packets upto 7 kg (B.) Book packets upto 3 kg
(C.) Book packets containing periodicals (D.) Pattern and sample packets
- (8.) A postal article reposted after having been opened or reposted is treated as
(A.) An unclaimed article
(B.) An article to be redirected
(C.) An article posted for the first time and charge with the postage accordingly
(D.) An article to be sent to its destination
- (9.) The manufacture and use of fictitious postage) stamps for any purpose whatsoever is prohibited, and is an offence punishable under which Section of the Indian Penal Code:
(A.) 262-A (B.) 263-A (C.) 264-A (D.) 265-A
- (10.) Which of following country is not the member of Asia Pacific Postal Union (APPU)?
(A.) India (B.) Israel
(C.) Pakistan (D.) New Zealand
- (11.) Which of the following is not required in address foreign destination?
(A.) Delivery zone number or postal code number (B.) Name of post office of delivery
(C.) Name of continent (D.) Name of country
- (12.) The sum of length, width & depth of Foreign Letter Post should not exceed:
(A.) 500 mm (B.) 700 mm (C.) 900 mm (D.) 1000 mm
- (13.) Which of following can be transmitted at Printed Paper rate?
(A.) Papers obtained by means of a typewriter of any type
(B.) Copies obtained by means of stamps with or without moveable type
(C.) Musical scores in manuscripts
(D.) Film and sound or video recording



- (14.) Which of the following is not prohibited to include in all type of Foreign articles:
 (A.) Explosive substance (B.) Radio Active substance
 (C.) Drugs & Medicines (D.) Deleterious substance
- (15.) Length of foreign parcel should not exceed:
 (A.) 100 meter (B.) 1.05 meters (C.) 1.15 meters (D.) 1.25 meters
- (16.) Maximum weight of small packets should not exceed.....
 (A.) 1 kg (B.) 2 kg (C.) 3 kg (D.) 4 kg
- (17.) The phrase 'Par Avion' means:
 (A.) Transmission by bird (B.) By Air Mail
 (C.) By surface (D.) Pigeon Post
- (18.) What's the penalty for breach of conditions for Postcards to foreign countries?
 (A.) Will treated as printed papers and postage is taxed accordingly
 (B.) Will be treated as parcel and postage is taxed accordingly
 (C.) Will be treated as letters and postage is taxed accordingly
 (D.) None of the above
- (19.) While sending Literature for Blind packet through Foreign Post, it should bear the inscription at the right-hand corner
 (A.) Aerogrammes (B.) Cecogrammes
 (C.) Speed post (D.) Air Parcel
- (20.) What is the period for which IT Modernization Project 2.0 has been approved?
 (A.) 5 years (B.) 6 years (C.) 7 years (D.) 8 years
- (21.) Which one of the following is not a component of IT Modernization project 2012?
 (A.) CSI (B.) CBS
 (C.) Project arrow (D.) DARPAN
- (22.) How many digits are the GL (General Ledger) code used in SAP:
 (A.) 13 digits (B.) 10 digits (C.) 9 digits (D.) 8 digits
- (23.) Which of the following modules can work on offline mode:
 (A.) SAP (B.) POS (C.) Finacle (D.) McCamish
- (24.) Which one of the following devices is not the part of RICT Device provided to Branch Post Offices:
 (A.) Finger Print Scanner (B.) Thermal Printer
 (C.) Iris Scanner (D.) Camera
- (25.) Which of the following committee is not the part of which IT Modernization Project 2.0?
 (A.) Steering Committee (B.) Project Implementation Committee (PIC)
 (C.) Project Evaluation Committee (PEC) (D.) Project Management Committee (PMC)
- (26.) SOL ID of Post Office is related to which module:
 (A.) DPMS (B.) Finacle (C.) HRMS (D.) McCamish
- (27.) PMA is used in Post Office for following work:
 (A.) Booking of articles (B.) PLI related work
 (C.) Savings bank related work (D.) Delivery of articles
- (28.) Cases in which registration is not compulsory
 (A.) Any parcel exceeding 4 kilograms in weight
 (B.) Any Insured article
 (C.) Letters
 (D.) Any parcel addressed to a place for which a customs declaration is required
- (29.) What is maximum amount of insurance on domestic speed post consignment?
 (A.) Rs 50,000/- (B.) Rs 1,00,000/-



- (C.) Rs 2,00,000/- (D.) Rs 5,00,000/-
- (30.) What is the maximum weight limit for domestic speed post?
(A.) 2 kg (B.) 20 kg (C.) 35 kg (D.) 40 kg
- (31.) A PLI or RPLI policy is treated as lapsed when:
(A.) Policy has not completed 3 years and 6 months premium has not been paid
(B.) Policy has completed 3 years and 12 months premium has not been paid
(C.) A and B both
(D.) None of the above
- (32.) Number of minimum quantity of articles to be posted at a time under Bill Mail Service is:
(A.) 2,500 (B.) 4,000 (C.) 5,000 (D.) 10,000
- (33.) If a walk-in customer books speed post articles of Rs 5000/- amount in a single day. What is the applicable rate of discount?
(A.) 5% (B.) 10% (C.) 12.5% (D.) No discount
- (34.) What are the registration charges on Blind Literature upto 7 kg weight?
(A.) Nil (B.) Rs 1/- (C.) Rs 7/- (D.) Rs 14/
- (35.) Minimum deposit required to open Philatelic Deposit Account (PDA) is:
(A.) Nil (B.) Rs 50/- (C.) Rs 100/- (D.) Rs 200/-
- (36.) In context of Sukanya Samridhi Account (SSA) which of the following is incorrect:
(A.) Account can be opened by the guardian in the name of girl child below the age of 10 years
(B.) Only one account can be opened in India either: In Post Office or in any bank in the name of a girl child
(C.) Deposits qualify for deduction under section 80C of Income Tax Act
(D.) Maximum deposit can be made up to Rs. 2.50 lakh in a financial year
- (37.) Printing of advertisement in pass books is an example of:
(A.) Media post (B.) Direct post
(C.) Retail post (D.) Logistic post
- (38.) Post Office Savings account is treated as silent account if no deposit/withdrawal is taken place in:
(A.) Last 6 months (B.) Last 2 Financial years
(C.) Last 3 Financial years (D.) Last 5 Financial years
- (39.) Postal Life Insurance services are being provided through which module
(A.) Finacle (B.) Core Banking Solution
(C.) McCamish (D.) None of the above
- (40.) Recently launched service by department passbook' is related to:
(A.) Postal Life Insurance (PLI) (B.) Speed Post
(C.) Post Office Savings Bank (POSB) (D.) Online money transfer
- (41.) Beat Instruction register is kept in which department:
(A.) Sub accounts department (B.) Savings bank department
(C.) Cash department (D.) Delivery department
- (42.) A nominal roll of the clerical staff is maintained in which form?
(A.) MS 11 (B.) MS 12 (C.) MS 13 (D.) MS 14
- (43.) If any change is to be made in Memorandum of Distribution of Work, which one is true
(A.) It can't be changed (B.) Postmaster can change
(C.) Can be changed with the approval of Divisional Head (D.) None of the above
- (44.) An attendance register is maintained in the form of
(A.) S37 (B.) S38 (C.) S39 (D.) S40
- (45.) As per SB order 25/2022 small savings accounts are freezed which are matured but not closed after:



- (A.) 2 years (B.) 3 years (C.) 4 years (D.) 7 years
- (46.) A mail office can redirect any article or deliver any article to the addressee on the authority of:
 (A.) Director General (B.) Head of Circle
 (C.) None of the above (D.) Both A & B
- (47.) All the Post Offices (other than Branch Post Offices) are termed as:
 (A.) District Bag Offices (B.) Unit Bag Offices
 (C.) Central Bag Offices (D.) Circle Bag Offices
- (48.) Head sorting assistant submits the dally report to superintendent through record officer in the form of:
 (A.) MS 81 (B.) MS 82 (C.) MS 83 (D.) MS 84
- (49.) Mail office is authorized for:
 (A.) Savings bank related work (B.) IPPB related work
 (C.) Delivery of electronic money orders (D.) Sale of postage stamps and stationery
- (50.) Mail abstract in mail offices is maintained in the form of:
 (A.) M-43 (B.) P-43 (C.) M-44 (D.) P-44
- (51.) The YarlungZangbo River, in India, is known as
 (A.) Ganga (B.) Indus
 (C.) Brahmaputra (D.) Mahanadi
- (52.) The Red cliff line is boundary between:
 (A.) India and Pakistan (B.) India and China
 (C.) India and Myanmar (D.) India and Afghanistan
- (53.) Right to life and personal liberty comes under which article?
 (A.) Article 19 (B.) Article 21 (C.) Article 23 (D.) Article 17
- (54.) How many articles are there in Indian Constitution?
 (A.) 380 (B.) 415 (C.) 470 (D.) 450
- (55.) National Youth Day is celebrated on the birth anniversary of which personality?
 (A.) Bhagat Singh (B.) Swami Vivekanand
 (C.) Mahatma Gandhi. (D.) Sardar Vallabhbhai Patel
- (56.) National Game of India is
 (A.) Hockey (B.) Cricket (C.) Wrestling (D.) Kho kho
- (57.) First President of Indian National Congress?
 (A.) George Yule (B.) Dadabhal Naoroji
 (C.) Womesh Chandra Banerjee (D.) Romesh Chunder Dutt
- (58.) Who built Humayun's Tomb in Delhi?
 (A.) Babur (B.) Akbar (C.) Haji Begum (D.) Humayun
- (59.) Gandhi's Salt Satyagraha is also known as?
 (A.) Non-Cooperation Movement (B.) Civil Disobedience Movement
 (C.) Champaran Satyagraha (D.) Quit India Movement
- (60.) Which value is important to become successful in your professional career.
 (A.) Appearance (B.) Attendance
 (C.) Attitude (D.) Respect
- (61.) Simplify this $25 \div 5 + 3 \times 60 - (17 \times 200 \div 40)$
 (A.) 100 (B.) 110 (C.) 120 (D.) 200
- (62.) Simplify this $(6+4) \div 2 - 2 + 6 \times 4$
 (A.) 23 (B.) 25 (C.) 27 (D.) 29
- (63.) Simplify this $20 \times (10-6) \div 5$
 (A.) 15 (B.) 16 (C.) 17 (D.) 18



- (64.) Ravi's salary is 40% more than Sachin's salary. How much percentage is Sachin's salary less than Ravi's salary?
(A.) 71.43% (B.) 28.57% (C.) 40% (D.) 60%
- (65.) What is the value of 75% of 480+ 48% of 750?
(A.) 630 (B.) 360 (C.) 270 (D.) 720
- (66.) A person sold a stove for Rs. 423 and incurred a loss of 6%. At what price would it be sold so as to earn a profit of 8%?
(A.) Rs. 550 (B.) Rs. 500 (C.) Rs. 490 (D.) Rs. 486
- (67.) A fruit seller buys lemons at 2 for a rupee and sells then at 5 lemons for three rupees. His gain percent is
(A.) 10% (B.) 15% (C.) 20% (D.) 25%
- (68.) If selling price of 40 articles is equal to cost price of 50 articles, the loss or gain percent is
(A.) 25% loss (B.) 20% loss (C.) 25% gain (D.) 20% gain
- (69.) Sam borrowed some money from his friend at simple Interest of 6% per annum. He returned his friend Rs. 15600. After how much time did Sam return the money if he borrowed Rs. 12000?
(A.) 8 years (B.) 2.5 years (C.) 5 years (D.) 3.5 years
- (70.) Priya invested some money in a bank at rate of 6% per annum. At simple interest, after 9 years, she got Rs. 8470. How much did she invest?
(A.) Rs. 5250 (B.) Rs. 6550 (C.) Rs. 6400. (D.) Rs. 5500
- (71.) Average age of 7 family members is 75 years. But average age of 6 of them is 74 years 6 months.. What is the age of the 7th family member?
(A.) 75.5 (B.) 78 (C.) 68 (D.) 80
- (72.) The average of first five multiples of 9 is?
(A.) 20 (B.) 27 (C.) 28 (D.) 30
- (73.) Average age of 5 people is 42 years. Another group has 8 people who have average age of 81 years. When both groups are mixed what is average age of all people?
(A.) 64 years (B.) 66 years (C.) 61.5 years (D.) 70 years
- (74.) P can do a job in 15 days. In how many days can P and Q together complete the job if Q is twice as fast as P?
(A.) 3 days (B.) 5 days (C.) 2 days (D.) 6 days
- (75.) A takes twice as much time as B or thrice as much time as C to finish a piece of work; working together they can finish the work in 2 days. B can do the work alone in
(A.) 12 days (B.) 4 days (C.) 8 days (D.) 6 days
- (76.) A man goes to Delhi from Lucknow at a speed of 4 km/hr and returns to Lucknow at speed of 6 km/hr. what is his average speed of the entire journey?
(A.) 4.8 km/hr (B.) 5 km/hr (C.) 4.2 km/hr (D.) 5.6 km/hr
- (77.) Rohit covers one-fourth of the total distance at 20 km/hr, one-fourth at 10 km/hr and rest of his journey at 80 km/hr. find Rohit's average speed for the whole distance?
(A.) 22.85 km/hr (B.) 25.15 km/hr (C.) 50 km/hr (D.) 40 km/hr
- (78.) Surendra covers a distance by cycle at 18 km/hr. He returns to the starting point in a bus at a speed of 45 km/hr. Find the average speed for the entire Journey.
(A.) 27.39 km/hr (B.) 25.71 km/hr (C.) 27 km/hr (D.) 31.5 km/hr
- (79.) Excluding stoppages, the speed of a bus is 54 kmph and Including stoppages, it is 45 kmph. For how many minutes does the bus stop per hour?
(A.) 9 (B.) 10 (C.) 12 (D.) 20
- (80.) A worker makes a toy in every 2 h. If he works for 80 h, then how many toys will he make?



A Vision of Victory

www.vvacademy.com

VV ACADEMY

➤ RPF ➤ RRB GROUP - D ➤ POSTAL ➤ SI/CONSTABLE



Address : Near Chuttugunta Signals, Eluru Road, VJA 2. Cell : 9985525552, 8977525552

(A.) 40 (B.) 54 (C.) 45 (D.) 39
(81.) In questions from (81 to 95), the mathematical numbers are given according to a pattern. Find the pattern and then select the missing number from the answer options:

19 25 49 ? 121

(A.) 100 (B.) 91 (C.) 64 (D.) 81

(82.) 4 7 12 19 28?

(A.) 49 (B.) 36 (C.) 39 (D.) 30

(83.) 10 100 200 310 ?

(A.) 430 (B.) 420 (C.) 410 (D.) 400

(84.) 12 24 72 144 432?

(A.) 864 (B.) 728 (C.) 852 (D.) 1296

(85.) 8 28 116 584?

(A.) 1752 (B.) 3504 (C.) 3508 (D.) 3502

(86.) 6144 384 48 12?

(A.) 2 (B.) 3 (C.) 4 (D.) 6

(87.) 9 17 33 65?

(A.) 117 (B.) 119 (C.) 129 (D.) 99

(88.) 50 43 36 29?

(A.) 21 (B.) 22 (C.) 23 (D.) 24

(89.) 0 15 27 36 ? 45

(A.) 42 (B.) 43 (C.) 40 (D.) 41

(90.) 37 23 95 ?

(A.) 62 (B.) 128 (C.) 575 (D.) 479

(91.) 10 14 28 32 64 68 ?

(A.) 136 (B.) 134 (C.) 28 (D.) 32

(92.) 7 26 63 124 215 ?

(A.) 343 (B.) 342 (C.) 316 (D.) 516

(93.) 34 45 56 67 ?

(A.) 73 (B.) 78 (C.) 80 (D.) 83

(94.) 14 27 16 125 36 ?

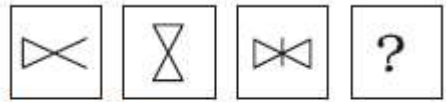
(A.) 343 (B.) 520 (C.) 473 (D.) 579

(95.) 6 13 28 59 122 ?

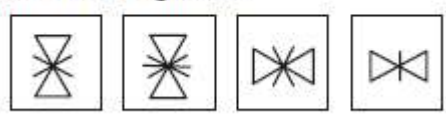
(A.) 247 (B.) 248 (C.) 249 (D.) 250

(96.) Discover the pattern and then pick up the missing picture from the answer options:

Question Figures :



Answer Figures :



(1) (2) (3) (4)

(A.) A (B.) B (C.) C (D.) D

(97.) Discover the pattern and then pick up the missing picture from the answer options:



A Vision of Victory

V V ACADEMY

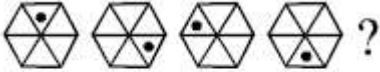
➤ RPF ➤ RRB GROUP - D ➤ POSTAL ➤ SI/CONSTABLE

www.vvacademy.com

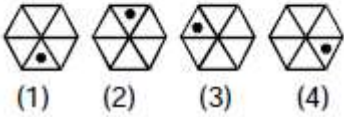
Address : Near Chuttugunta Signals, Eluru Road, VJA 2. Cell : 9985525552, 8977525552



Question Figures :

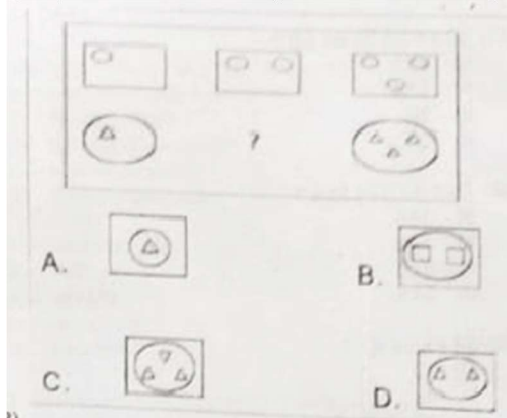


Answer Figures :



- (A.) A (B.) B (C.) C (D.) D

(98.) Discover the pattern and then pick up the missing picture from the answer options:



- (A.) A (B.) B (C.) C (D.) D

(99.) Discover the pattern and then pick up the missing picture from the answer options:



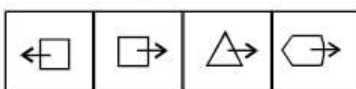
- (A.) A (B.) B (C.) C (D.) D

(100.) Discover the pattern and then pick up the missing picture from the answer options:

Question Figures :



Answer Figures :



- (1) (2) (3) (4)
(A.) A (B.) B (C.) C (D.) D



JHARKAND CIRCLE-PA/SA EXAM -2023

ANSWER

(1.)	C	(2.)	C	(3.)	D	(4.)	A	(5.)	A
(6.)	A	(7.)	A	(8.)	C	(9.)	B	(10.)	B
(11.)	C	(12.)	C	(13.)	C	(14.)	C	(15.)	B
(16.)		(17.)	B	(18.)	C	(19.)	B	(20.)	D
(21.)	C	(22.)	B	(23.)	B	(24.)	C	(25.)	B
(26.)	B	(27.)	D	(28.)	C	(29.)	B	(30.)	C
(31.)	C	(32.)	C	(33.)	A	(34.)	A	(35.)	D
(36.)	D	(37.)	A	(38.)	C	(39.)	C	(40.)	C
(41.)	D	(42.)	B	(43.)	C	(44.)	A	(45.)	B
(46.)	D	(47.)	B	(48.)	C	(49.)	D	(50.)	A
(51.)	C	(52.)	A	(53.)	B	(54.)	C	(55.)	B
(56.)	A	(57.)	C	(58.)	C	(59.)	B	(60.)	C
(61.)	A	(62.)	C	(63.)	B	(64.)	B	(65.)	D
(66.)	D	(67.)	C	(68.)	C	(69.)	C	(70.)	D
(71.)	B	(72.)	B	(73.)	B	(74.)	B	(75.)	D
(76.)	A	(77.)	A	(78.)	B	(79.)	B	(80.)	A
(81.)	D	(82.)	C	(83.)	A	(84.)		(85.)	C
(86.)	D	(87.)	C	(88.)	B	(89.)	A	(90.)	D
(91.)	A	(92.)	B	(93.)	B	(94.)	A	(95.)	C
(96.)	A	(97.)	D	(98.)	D	(99.)	C	(100.)	B



KARNATAKA CIRCLE-PA/SA EXAM -2023

- (1.) Franked articles can be posted in not more than as specified in the license.
 - (A.) One office
 - (B.) Two offices
 - (C.) Three offices
 - (D.) Four offices
- (2.) What is the purpose for "Window Delivery Ticket"?
 - (A.) For Identification of the Licensee of the Franking Machine
 - (B.) For identification of the Licensee's Representative of the Franking Machine
 - (C.) For identification of the License of the Franking Machine
 - (D.) None of the above
- (3.) Business Reply Service can be permitted by
 - (A.) Head of the Circle
 - (B.) Head of the Region
 - (C.) Head of the Division
 - (D.) Head of the office
- (4.) Maximum weight for a pattern or sample packet will be
 - (A.) 1kg
 - (B.) 2kgs
 - (C.) 3kgs
 - (D.) 5kgs
- (5.) Number of days within the renewal of RNP should be completed by the Divisional Office from the date of receipt of application
 - (A.) 10 days
 - (B.) 12 days
 - (C.) 15 days
 - (D.) 30 days
- (6.) Post Cards can be registered
 - (A.) True
 - (B.) False
 - (C.) Partially True
 - (D.) Partially False
- (7.) Articles addressed "Poste Restante except value payable articles are detained in the office of delivery for a period not exceeding
 - (A.) Two months
 - (B.) One month
 - (C.) 15 days
 - (D.) 7 days
- (8.) Correspondence for personnel of Indian Armed Forces serving outside India should be
 - (A.) Prepaid with the rates applicable to that foreign country
 - (B.) Prepaid with inland rates
 - (C.) Exempt from postal charges
 - (D.) None of the above
- (9.) Penalty for breach of conditions in respect of "Blind Literature addressed to a foreign country is
 - (A.) Will be forwarded and charged on delivery to the addressee with letter or parcel inland postage
 - (B.) Will be returned and charged on delivery to the sender with letter or parcel inland postage
 - (C.) Will be forwarded and charged on delivery to the addressee with letter or parcel foreign postage
 - (D.) Will be returned and charged on delivery to the sender with letter or parcel foreign postage
- (10.) The weight of a letter card should not exceed
 - (A.) One gram
 - (B.) Two grams
 - (C.) Three grams
 - (D.) Four grams
- (11.) Head Quarters of Universal Postal Union is situated at
 - (A.) Berne
 - (B.) Geneva
 - (C.) Denmark
 - (D.) Bangkok
- (12.) In the Foreign Post the term "Letter Post" applies to the following classes of postal articles
 - (A.) Printed Papers & Small Packets
 - (B.) Parcels & Money Orders
 - (C.) Business Parcels & VPMOS
 - (D.) None of the above
- (13.) Free redirection by Air within India is permissible for the following foreign inward articles only
 - (A.) Printed Papers
 - (B.) News Papers
 - (C.) Aerogrammes
 - (D.) Small Packets
- (14.) The sum of the length, width and depth of a foreign letter should not exceed



- (A.) 900 mm (B.) 500 mm (C.) 1000 mm (D.) 600 mm
- (15.) What is the maximum weight of printed papers containing printed books and pamphlets that can be sent to a foreign country?
 (A.) 2kgs (B.) 1kgs (C.) 5kgs (D.) 3kgs
- (16.) What is the minimum weight of a "Bulk Bag"?
 (A.) 1kg (B.) 2kgs (C.) 3kgs (D.) 5kgs
- (17.) For the purpose of surcharges, the articles are broadly divided into two groups which are commonly known as
 (A.) LA & AB (B.) LB & A.O (C.) LC&A.O (D.) LC&A.B
- (18.) The length of a foreign parcel should not exceed
 (A.) 2.05 meters (B.) 3.00 meters (C.) 1.05 meters (D.) 1.50 meters
- (19.) The maximum and minimum size of privately manufactured Post Card should be
 (A.) 10 x 7 cms and 15 x 14 cms (B.) 9 x 14 cms and 10.5 x 14.8 cms
 (C.) 10 x 9 cms and 15 x 12.5 cms (D.) 10 x 7 cms and 15 x 10.5 cms
- (20.) Which is correct related to enquiry Fee for a VP article
 (A.) Once paid will not be refunded at any cost
 (B.) No enquiry fee for a VP article
 (C.) Will be refunded where the complaint was found to be well-grounded
 (D.) None of the above
- (21.) DPMS stands for?
 (A.) Date Post Management System (B.) Delivery & Postman Management System
 (C.) Direct Post Management System (D.) Delivery & Postal Management System
- (22.) GL Code means?
 (A.) Grams/Liter Code (B.) General Ledger Code
 (C.) Global Digital Line Code (D.) Global Ledger Code
- (23.) RS stands for?
 (A.) Rural Hardware System Integrator (B.) Rural Software System Integrator
 (C.) Rural System Integration (D.) Rural System Integrator
- (24.) POC means
 (A.) Proof of Concept (B.) Proof of Computer
 (C.) Proof of Online Certificate (D.) None of the above
- (25.) What is CIS?
 (A.) Core Insurance System (B.) Core Integration Solution
 (C.) Core Integration System (D.) Core Insurance Solution
- (26.) SSP denotes
 (A.) Single System Organization (B.) Single Sign-On
 (C.) Single Security Organization (D.) Single Service-On
- (27.) What is SSS in SAP?
 (A.) Staff Segregating System (B.) Small Savings System
 (C.) Secured Security System (D.) Staff Scheduling System
- (28.) What is MDM?
 (A.) Mobile Dynamic Memory (B.) Mobile Direct Memory
 (C.) Mobile Device Management (D.) Mobile Device Memory
- (29.) Facility ID of a Post Office consists of
 (A.) 13 digits (B.) 10 digits (C.) 9 digits (D.) 8 digits
- (30.) In the Profit Centre ID (In the CSI system rolled out in Post Offices), the 3 digit denotes,



- (A.) Circle (B.) Region (C.) HO (D.) SO
- (31.) Bonus for WLA Policy of PLI for the financial year 2022-23 which is applicable from 01.04.2022 is
 (A.) Rs. 52/- per thousand of sum assured (B.) Rs. 76/- per thousand of sum assured
 (C.) Rs. 48/- per thousand of sum assured (D.) Rs. 60/- per thousand of sum assured
- (32.) What is the additional fee to be charged for availing COD facility for the amount up to Rs. 6500/- to recovered from the addressee?
 (A.) 1% of the COD value recovered or Rs. 50/- whichever is more
 (B.) 1% of the COD value recovered or Rs. 100/- whichever is more
 (C.) 1.6% of the COD value recovered
 (D.) 2% of the COD value recovered
- (33.) What is discount rate applicable to a corporate customer who gives monthly speed post revenue of Rs. 50 lakhs?
 (A.) 10% (B.) 20% (C.) 30% (D.) 40%
- (34.) What is the URL of POSB Internet Banking?
 (A.) epostbank.indiapost.gov.in (B.) ebanking.indiapost.ippb.gov.in
 (C.) eposbbank.indiapost.gov.in (D.) ebanking.indiapost.gov.in
- (35.) What is the fee for cancellation or change of nomination in POSB?
 (A.) Rs.100/- (B.) Rs.20/-
 (C.) Rs.50/- (D.) Free of Cost
- (36.) Surrender facility is available afteryears in case of WLA, EA, CWLA and YS policies.
 (A.) 3 years (B.) 5 years (C.) 1 year (D.) 4 years
- (37.) What is the minimum quantity of articles that has to be posted at a time under Bill Mall Service?
 (A.) 1000 articles. (B.) 5000 articles
 (C.) 10000 articles (D.) 3000 articles
- (38.) What is space available for media post advertisement in a Meghdoot Post Card?
 (A.) 3 cm x 6.5 cm (B.) 9 cm x 6 cm
 (C.) 6 cm x 3 cm (D.) 9 cm x 6.5 cm
- (39.) What is the minimum quantity of My-Stamps Sheets mandatory for Corporate Customers?
 (A.) 1000 (B.) 3000 (C.) 5000 (D.) 10000
- (40.) Proposal for issue of Commemorative Stamps may be sent by
 (A.) Any citizen of India (B.) Chief Postmaster General
 (C.) Postmaster General (D.) Reputed Organization/ Institution
- (41.) A Bulk Customer is eligible for BNPL facility if he provides Rs..... worth of speed post business in a calendar month.
 (A.) 5000 (B.) 10000 (C.) 15000 (D.) 25000
- (42.) What is the preservation period of Postmaster's Order Book?
 (A.) 3 years (B.) 18 months (C.) 5 years (D.) Permanent
- (43.) Form MS-14(a) is used for preparing.
 (A.) MO Paid Returns (B.) Cash Certificate Returns
 (C.) Enumeration Returns (D.) Statistical Memorandum
- (44.) What is the maximum limit of remittance through Departmental MMS with MTS In addition to the Driver for conveyance of cash in cash bags enclosed in account bags?
 (A.) 10lakhs (B.) 5lakhs (C.) 20lakhs (D.) 2lakhs
- (45.) menu in Finacle is used by SBCO for making adjustments in the balances and interest in the accounts of SBA type vide 58 Order 09/2022.
 (A.) HTCTM (B.) HIARM (C.) HIAMR (D.) HIATM



- (46.) One mobile number can be linked with a maximum of CIFS in Finacle
(A.) 1 (B.) 5 (C.) 10 (D.) No limit
- (47.) Each set of a RMS section is supplied with POST
(A.) Record Box (B.) Work Paper (C.) Portfolio (D.) Cash Box
- (48.) A Head Sorting Assistant is required to submit a dally report to the Superintendent RMS through Record Officer in Form,
(A.) MS-84 (B.) MS-73 (C.) MS-74 (D.) MS-83
- (49.) Mail Abstract is divided into two parts viz.,
(A.) Receipts & Dispatches (B.) Mails & Bags
(C.) Inward & Outward (D.) Usual & Unusual mails
- (50.) An advice which is enclosed in every mail bag furnishing the details to the office of destination is known as
(A.) Mail List (B.) Transit Mail List
(C.) Manifest (D.) Letter Bill
- (51.) The only zone in the country which produces gold and is also rich in iron is
(A.) Southern Zone (B.) Northern Zone
(C.) North Easter Zone (D.) Western Zone
- (52.) The percentage of earth surface covered by India is
(A.) 3.4 (B.) 4.4 (C.) 5.4 (D.) 2.4
- (53.) The members of the Panchayat are
(A.) Nominated by the district officer
(B.) The electorates of the respective territorial constituencies
(C.) Nominated by local self-government minister of the state
(D.) Nominated by the block development organization
- (54.) The residuary powers can be exercised by the Parliament of India
(A.) At all times
(B.) Only during national emergency
(C.) During national emergency as well as constitutional emergency as well in a state
(D.) None of the above
- (55.) Entomology is the science that studies
(A.) Behavior of human beings (B.) Insects
(C.) The origin and history of technical and scientific terms (D.) The formation of rocks
- (56.) Garampani Sanctuary is situated in
(A.) Assam (B.) Gujarat
(C.) West Bengal (D.) Sikkim
- (57.) The treaty of Srirangapatna was signed between Tipu Sultan and
(A.) Robert Clive (B.) Dalhousie
(C.) Warren Hastings (D.) Cornwallis
- (58.) The title given by the British Government to Mahatma Gandhi which he surrendered during the non-cooperation movement was
(A.) Hind Keasri (B.) Kaiser-e-Hind
(C.) Ral Bahadur (D.) Rt. Honorable
- (59.) Ethics means
(A.) Moral Judgments (B.) Determinants of what is wrong or right
(C.) Standards governing a Profession (D.) All of the above
- (60.) What does Corporate Social Responsibility mean?



- (A.) The responsibility of an organization to use its resources solely to increase profits
(B.) The responsibility of an organization to fulfill its economic, social and environmental obligations to all of its stakeholders
(C.) The responsibility of an organization to donate any excess profits to charities and community organizations
(D.) The responsibility of an organization to protect the environment at all costs
- (61.) The average weight of 8 persons increases by 2.5 kg when a new person comes in a place of one of them weighing 65 kg. What is the weight of new person?
(A.) 73 kg (B.) 76 kg (C.) 78 kg (D.) 85 kg
- (62.) The average age of father, mother and their child 3 year ago was 27 years. The average age of mother and the child 5 years ago was 20 years. The present age of the father is
(A.) 35 years (B.) 40 years (C.) 50 years (D.) 55 years
- (63.) The average marks of three batches of 55, 60 and 45 students respectively is 50, 55, 60. The average marks of all student is
(A.) 54.68 (B.) 55.45 (C.) 56 (D.) 57
- (64.) A can do a work in 18 days and B can do the same work in 15 days. B worked for 10 days and left the job. In how many days, A alone can finish the remaining work.
(A.) 8 days (B.) 5 days (C.) 4 days (D.) 6 days
- (65.) A alone can do a work in 6 days and B alone in 8 days. A and B undertook to do it for Rs.3200/- with the help of C, they completed the work in 3 days. How much is to be paid to C?
(A.) Rs.600 (B.) Rs.400 (C.) Rs.375 (D.) Rs.625
- (66.) Anaeroplane covers a certain distance in 5 hours at a speed of 240 kmph to cover the distance in 1 hour 40 minutes, it must travel at a speed of
(A.) 600kmph. (B.) 660kmph (C.) 680kmph (D.) 720kmph
- (67.) Excluding stoppages, the speed of a Train is 54kmph and including stoppages it is 45 kmph. For how many minutes the trains stop per hour?
(A.) 10 minutes (B.) 9 minutes (C.) 8 minutes (D.) 7 minutes
- (68.) A person travelled a distance in 9 hours. He travelled partly on foot at 4 km/hr and partly on bicycle at 9 km/hr. The distance travelled on foot is
(A.) 14kms (B.) 17kms (C.) 15kms (D.) 16kms
- (69.) The annual rent for a house is Rs. 48,000/-. The rent for 5 months would be.
(A.) Rs. 20,000/- (B.) Rs. 18,000/-
(C.) Rs. 24,000/- (D.) Rs. 22,000/-
- (70.) The cost of 9 litres of Petrol is Rs.918/-. 6 litres of Petrol would cost
(A.) Rs. 518/- (B.) Rs.612/- (C.) Rs.618/- (D.) Rs.660/-
- (71.) A boy has Rs. 480 in the denominations of one- rupee notes, five-rupee notes and ten-rupee notes. The number of notes of each denomination is equal. What is the total number of notes that he has?
(A.) 45 (B.) 65 (C.) 90 (D.) 75
- (72.) If $a-b=3$ and $a^2 + b^2 = 29$, find the value of ab
(A.) 14 (B.) 12 (C.) 15 (D.) 10
- (73.) Two students appeared at an examination. One of them secured 9 marks more than the other and his marks was 56% of the sum of their marks. The marks obtained by them are:
(A.) 39, 30 (B.) 41, 32 (C.) 42, 33 (D.) 43, 34
- (74.) A fruit seller has some apples. He sold 40% the apples and still has 420 apples. Originally, he had:
(A.) 588 apples (B.) 700 apples (C.) 672 apples (D.) 600 apples
- (75.) A person buys a cycle for Rs. 1400 and sells it at a loss of 15%. What is the selling price of cycle?



- (A.) Rs. 1090 (B.) Rs. 1190 (C.) Rs. 1160 (D.) Rs. 1203
- (76.) Person bought 6 items for Rs. 5 and sold at 5 times for Rs. 6. His gain percentage is
(A.) 44% (B.) 33 1/3% (C.) 30% (D.) 35%
- (77.) If a plot is sold at Rs. 18,700/-, the owner loses 15%. At what price must the plot be sold in order to gain 15%?
(A.) Rs. 21,000/- (B.) Rs. 22,500/-
(C.) Rs. 25,800/- (D.) Rs. 25,300/-
- (78.) A sum of money at simple interest amounts to Rs. 815/- In 3 years and Rs. 854/- In 4 years. The sum of amount is Rs.
(A.) Rs. 650/- (B.) Rs. 698/ (C.) Rs. 700/- (D.) Rs. 670/-
- (79.) Ramu took a loan of Rs. 1200/- with simple interest for as many years as the rate of interest. If he paid Rs. 432/- as interest at the end of loan period, the rate of interest was
(A.) 6 (B.) 3.6 (C.) 12 (D.) 7.5
- (80.) What will be the ratio of simple interest earned by certain amount at the same rate of interest for 6 years and that of 9 years?
(A.) 1:3 (B.) 1:4 (C.) 2:3 (D.) 3:9
- (81.) Complete the series 1, 6, 13, 22, 33, ?
(A.) 46 (B.) 48 (C.) 49 (D.) 51
- (82.) Complete the series 7, 26, 63, 124, 215, 342, ?
(A.) 393 (B.) 511 (C.) 413 (D.) 453
- (83.) Window is to pane as book is to
(A.) Novel (B.) Glass (C.) Cover (D.) Page
- (84.) Exercise is to gym as eating is to
(A.) Food (B.) Dieting (C.) Fitness (D.) Restaurant
- (85.) Pen is to poet as needle is to
(A.) Thread (B.) Button (C.) Sewing (D.) Tailor
- (86.) ELFA, GLHA, ILIA, _____, MLNA
(A.) OLPA (B.) KLMA (C.) LLMA (D.) KLLA
- (87.) DEF, DEF2, DE2F2, _____, D2E2F3
(A.) DEF3 (B.) D3EF3 (C.) D2E3F (D.) D2E2F2
- (88.) A, B, C, D and E are sitting on a bench. A is sitting next to B, C is sitting next to D, D is not sitting with E who is on the left end of the bench. C is on the second position from the right. A is to the right of B and E. A and C are sitting together. In which position A is sitting?
(A.) Between B and D (B.) Between B and C
(C.) Between E and D (D.) Between C and E
- (89.) Roshini is older than Darsh. Hari is older than Roshini. Darsh is older than Hari. If the first two statements are true, the third statement is
(A.) True (B.) False
(C.) Uncertain (D.) Partially true
- (90.) Nipun runs faster than Naseer. Joy runs faster than Nipun. Naseer runs faster than Joy. If the first two statements are true, the third statement is
(A.) True (B.) False
(C.) Uncertain (D.) Partially true
- (91.) Here are some words translated from an artificial language.
gorbiflur means fan belt
pixngorbl means ceiling fan



A Vision of Victory

V V ACADEMY

➤ RPF ➤ RRB GROUP - D ➤ POSTAL ➤ SI/CONSTABLE

Address : Near Chuttugunta Signals, Eluru Road, VJA 2. Cell : 9985525552, 8977525552

www.vvacademy.com



arthtusi means tile roof

Which word could mean "ceiling tile"?

- (A.) gorbitusi (B.) flurgorbl (C.) arthflur (D.) pixnarth

(92.) COBBLER: SHOE

- (A.) Jockey: horse (B.) Contractor: building
(C.) Mason: stone (D.) Potter: paint

(93.) Arrange the words given below in a meaningful sequence.

1. Police 2. Punishment 3. Crime 4. Judge 5. Judgment

- (A.) 3, 1, 2, 4, 5 (B.) 1, 2, 4, 3, 5 (C.) 5, 4, 3, 2, 1 (D.) 3, 1, 4, 5, 2

(94.) Solve Q NO: 94 to 97 based on the below facts:

Six friends are sitting in a circle and are facing the centre of the circle. Deepak is between Prakash and Rishi. Uma is between Mukesh and Lalit. Prakash and Mukesh are opposite to each other

Who is sitting right to Prakash?

- (A.) Mukesh (B.) Deepak (C.) Rishi (D.) Lalit

(95.) Who is just right to Rishi?

- (A.) Deepak (B.) Lalit (C.) Prakash (D.) Uma

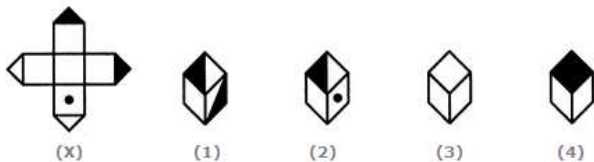
(96.) Who are the neighbours of Mukesh?

- (A.) Prakash and Deepak (B.) Deepak and Uma
(C.) Uma and Rishi (D.) Lalit and Uma

(97.) Who is sitting opposite to Uma?

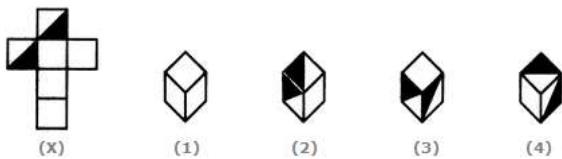
- (A.) Prakash (B.) Deepak (C.) Rishi (D.) Lalit

(98.) Choose the box formed from the given sheet of paper (x)



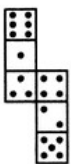
- (A.) 2 and 3 only (B.) 1 and 2 only
(C.) 1 and 4 only (D.) 2 and 4 only

(99.) Choose the box formed from the given sheet of paper (x)



- (A.) 3 and 4 only (B.) 1 and 4 only
(C.) 2 and 3 only (D.) 1 and 2 only

(100.) How many dots lie opposite to the face having three dots, when the below figure is folded to form a cube?



- (A.) 6 (B.) 5 (C.) 4 (D.) 2

**KARNATAKA CIRCLE-PA/SA EXAM -2023****ANSWER**

(1.)	B	(2.)	B	(3.)	C	(4.)	B	(5.)	C
(6.)	A	(7.)	B	(8.)	B	(9.)	B	(10.)	
(11.)	A	(12.)	A	(13.)	C	(14.)	A	(15.)	C
(16.)	D	(17.)	C	(18.)	C	(19.)	B	(20.)	C
(21.)	B	(22.)	B	(23.)	D	(24.)	A	(25.)	D
(26.)	B	(27.)	D	(28.)	C	(29.)	A	(30.)	B
(31.)	B	(32.)	C	(33.)	B	(34.)	D	(35.)	C
(36.)	A	(37.)	B	(38.)	D	(39.)	C	(40.)	A
(41.)	B	(42.)	A	(43.)	D	(44.)	B	(45.)	C
(46.)	B	(47.)	C	(48.)	D	(49.)	B	(50.)	D
(51.)	A	(52.)	D	(53.)	B	(54.)	A	(55.)	B
(56.)	A	(57.)	D	(58.)	B	(59.)	D	(60.)	B
(61.)	D	(62.)	B	(63.)	A	(64.)	D	(65.)	B
(66.)	D	(67.)	A	(68.)		(69.)	A	(70.)	B
(71.)	C	(72.)	D	(73.)	C	(74.)	B	(75.)	B
(76.)	A	(77.)	D	(78.)	B	(79.)	A	(80.)	C
(81.)	A	(82.)	B	(83.)	D	(84.)	D	(85.)	D
(86.)	D	(87.)	D	(88.)	B	(89.)	B	(90.)	B
(91.)	D	(92.)	B	(93.)	D	(94.)	D	(95.)	A
(96.)	C	(97.)	B	(98.)	A	(99.)	B	(100.)	A