



CHATTISGARH CIRCLE-PA/SA EXAM -2023

- (1.) Franking machine license is issued by
(A.) Head of the circle (B.) Head of the division
(C.) DG posts (D.) Any of these
- (2.) Using for the payment of postage or postal fees. With intent to cause loss to the Central Government, of a stamp that has already been used for that or any other purpose, is an offence under?
(A.) Indian Post Office Act 1898 (B.) Post Office Guide Part-1
(C.) Indian Penal Code (D.) The Code of Criminal Procedure, 1973
- (3.) Every letter, packet or parcel has to be stamped with the date stamps of at least post offices?
(A.) Four (B.) One (C.) Two (D.) Three
- (4.) Which among the following are correct?
(A.) Precious stones, Jewellery, articles of gold or silver can be sent by the Inland Post, only insured
(B.) Coins, currency or Bank Notes, can be sent by the Inland Post, only insured
(C.) Machine franked articles should not be posted in letter boxes
(D.) All the above
- (5.) A parcel weighing abovekilograms in weight will be delivered only at the post office window?
(A.) 20 Kg (B.) 10 Kg (C.) 5 Kg (D.) 2 Kg
- (6.) Articles addressed to the officers and other ranks of Defense Services units and formations on which postage due will be?
(A.) Delivered and amount due will be recovered from the concerned officer
(B.) Returned to senders as undeliverable
(C.) Such articles will not be allowed to be booked in any post office
(D.) None of the above
- (7.) A value-payable postal article marked "Poste Restante is kept in the post office to which it is addressed for a period ofdays only?
(A.) 7 days (B.) 15 days (C.) 30 days (D.) 60 days
- (8.) What is the period for preferring complaints, regarding miscarriage, loss or destruction of postal orders?
(A.) Six months from the last day of the month of Issue
(B.) Twelve months from the last day of the month of issue
(C.) Three months from the last day of the month of issue
(D.) One month from the last day of the month of Issue
- (9.) Under the "All up" scheme which class of articles are given air transmission within the limits of India, wherever such a conveyance is available?
(A.) Speed Post Articles (B.) All Second Class Articles
(C.) Parcels (D.) All First Class Mails
- (10.) Letter posted insufficiently prepaid is charged on delivery with?
(A.) Double the amount of the deficiency
(B.) Normal amount of deficiency
(C.) Double the postage
(D.) Insufficiently prepaid letter will not be transmitted
- (11.) The concession of free redirection of first-class mails whether surcharged or non-surcharged, received from the foreign countries is applicable to which class of mails?
(A.) Printed Papers (B.) Newspapers:



- (C.) Small packets (D.) Aerogrammes
- (12.) Unpaid and In-sufficiently paid articles of correspondence received from abroad must be marked for taxation only at the office of exchange. All such article will, however, generally, be received from the country of origin with an impression of which stamp?
 (A.) T Stamp (B.) 'U' Stamp (C.) 'H' Stamp (D.) Y Stamp
- (13.) Categories of Foreign postal articles are:
 (A.) Letter post & Parcel post (B.) Airmail & Sea mail
 (C.) Registration post & Insured post (D.) Ordinary mail and Special mail
- (14.) India joined the APPU in the year
 (A.) 1970 (B.) 1975 (C.) 1978 (D.) 1973
- (15.) Mark the correct option in relation to FOREIGN POST- redirected correspondence:
 (A.) Surface mail items received from any country for delivery in India may be redirected to any place within India.
 (B.) First class mail surcharge or un-surcharged are eligible for free redirection by air within India.
 (C.) Surface mail received for delivery in India from any country not applying reduced charges for India may be redirected to another country by the surface mail without any charge for the redirection.
 (D.) All of the above are correct.
- (16.) In reference to PO guide part II, mark incorrect option related to Postcard
 (A.) Should not be folded, cut or altered and should be sent unenclosed
 (B.) In case of breach of the conditions postcards are treated as letter and postage will be taxed accordingly.
 (C.) Unpaid and insufficiently paid postcards are forwarded to their destination and are taxed.
 (D.) The left hand half of the front (address side) should be reserved for the address of the recipient, postage stamps or franking Impressions.
- (17.) The Printed Paper service in the foreign post corresponds to the..... Service in the inland post with some variations in the conditions.
 (A.) Pattern and sample packet (B.) Registered News paper
 (C.) Book packet service. (D.) None of these
- (18.) The customs control is primarily exercised at-
 (A.) The point of entry in the country (B.) The point of exit from the country
 (C.) Foreign post office (D.) All the above
- (19.) Complaints about the assessment of customs duty are dealt with only by.
 (A.) The postal authorities (B.) The customs authorities:
 (C.) The foreign exchange (D.) The department of external affairs
- (20.) As per method of address of foreign article when postage is prepaid in cash for posting of registered newspaper then which words to be written on the letter?
 (A.) Book Now Pay Latter (B.) Postage paid in Cash not to be taxed
 (C.) Postage paid Port Paye (D.) Postage paid at Post Office
- (21.) An aerogramme should not weigh more than?
 (A.) 3gms (B.) 5gms
 (C.) 10gms (D.) None of the above
- (22.) A pack containing which of the following Items should be labeled green?
 (A.) Fragile Objects (B.) Live Bees
 (C.) Medicines (D.) Fatty substances that don't liquefy
- (23.) Under IT Modernization Project, Post Offices have been interconnected using which type of networks?



- (A.) Metropolitan Area Network (MAN) (B.) Wireless Local Area Network (WLAN)
(C.) Wide Area Network (WAN) (D.) Personal Area Network (PAN)
- (24.) Which among the following is not an objective of the IT Modernization Project 2012 of Department of Posts?
(A.) Improvement of the Look and Feel of all the Post Offices across the country
(B.) Modernization and computerization of all non-computerized Post offices in the country Including Branch Post offices in rural area, mall offices, administrative and other offices
(C.) Creation of Communication Infrastructure Rural Information and Technology (Rural ICT)
(D.) Development of scalable, integrated and modular software covering all operations of the Department of Posts
- (25.) Which committee approved the IT Modernization project of Department of posts in November 2012?
(A.) Cabinet Committee on Economic affairs (CCEA)
(B.) Cabinet Committee on Parliamentary affairs (CCPA)
(C.) Cabinet Committee on Accommodation (CCA)
(D.) Cabinet Committee on Security (CCS)
- (26.) DRC stands for
(A.) Data recovery centre (B.) Disaster recovery centre
(C.) Data recording centre (D.) Disaster receiving centre
- (27.) Which of the following is true in case of the network Integrator?
(A.) It has three network providers - Primary, Secondary & Tertiary ie NSP1, NSP2 & NSP3
(B.) it has only one network NSP1
(C.) It has two networks NSP1 & NSP2
(D.) The number of network providers vary from One till Five
- (28.) Which amongst the various aspects of the IT modernization project was totally implemented first?
(A.) Financial services integrator (FSI) (B.) Core system integrator (CSI)
(C.) Data centre (D.) DARPAN
- (29.) DARPAN stands for
(A.) Digital advancement of rural post office for a new India
(B.) Drastic advancement of rural post office for a new India
(C.) Diplomatic advancement of regional post office for a new India
(D.) None of the above
- (30.) The full form of 'DPMS' is:
(A.) Delivery and Postman Management System (B.) Delivered Postal Mail Scheme
(C.) Delay in Postal Mail System (D.) Data of Postal Mail System
- (31.) Each departmental post office is called a SOL (service out let) in-
(A.) CSI (B.) Finacle
(C.) CSI and Finacle (D.) None of these
- (32.) What is toll free enquiry helpline number of India Post?
(A.) 1800-250-8686 (B.) 1800-450-6868
(C.) 1800-266-6868 (D.) 1800-250-7676
- (33.) What is the compensation for loss, pilferage or damage of domestic Speed Post article?
(A.) Rs 100 maximum (B.) India Post is not responsible hence no compensation
(C.) Speed Post charges (D.) Double the Speed Post charges or Rs 1,000.whichever is less
- (34.) What is the mode of remittance to the sender in case of amount recovered from addressee on delivery of COD articles by post?
(A.) e-MO (B.) Google Pay



- (C.) e-payment (D.) POSB account credit
- (35.) What is maximum amount up to which a domestic speed post article can be insured?
(A.) Rs 10,000 (B.) Rs 20,000
(C.) Rs 50,000 (D.) Rs 1, 00, 000
- (36.) Postage or tariff for the parcel shall be determined with the reference to weight that is:
(A.) Gross weight only
(B.) Volumetric weight only
(C.) Gross weight or volumetric weight whichever less
(D.) Gross weight or volumetric weight whichever is more
- (37.) Three category of mails will be considered as First Class mails. Find the Odd One Out-
(A.) Inland letter card (B.) Periodicals
(C.) Postcards (D.) Letters
- (38.) A speed post bar code has how many characters?
(A.) 11 (B.) 9 (C.) 12 (D.) 13
- (39.) What is the discount amount for corporate customer who is paying monthly Rs. 6Lakhs for booking speed post articles?
(A.) 60,000 (B.) 90,000 (C.) 1, 20,000 (D.) 1, 50,000
- (40.) Which of the following customs form is used for International Speed post articles having value of 200 SDR?
(A.) No custom forms are required (B.) CN22
(C.) CN23 (D.) P850
- (41.) What is the charge for Proof of delivery (POD) in Speed post services?
(A.) Rs. 3 (B.) Rs 10 Including GST
(C.) Rs 15+ GST (D.) Rs 10+ GST
- (42.) What is the maximum weight allowed in case of Business Parcel?
(A.) 10 Kg (B.) 20 Kg (C.) 30 Kg (D.) 35 Kg
- (43.) Mark the correct option
(A.) A nominal roll is a record of Postal Assistant actually at work in a post office on any given day maintained in for MS-12
(B.) The nominal roll should be written up by the postmaster
(C.) A nominal roll on similar lines may also be maintained for postman and village postman in offices where their strength is more than 25
(D.) All the above
- (44.) An article bearing "OIGS" addressed to the officer of Central Govt Service bearing his name & designation is delivered to:-
(A.) Name (B.) Designation
(C.) In-charge of the office (D.) None of these
- (45.) When a remittance is made to a S.O. through a special carrier, in which document a remark should be written for the Information of the S.P.M., as to how the money has been sent?
(A.) In S.O. Slip (B.) in S.O. Dally Account
(C.) In Registered List (D.) In Head Office summary
- (46.) The duties of Head postman is
(A.) To convey cash from and to the treasury or town SOS
(B.) To take out for delivery article that has been returned by other postman as unclaimed or refused
(C.) To work in the place of any postman who is temporarily absent
(D.) All the above



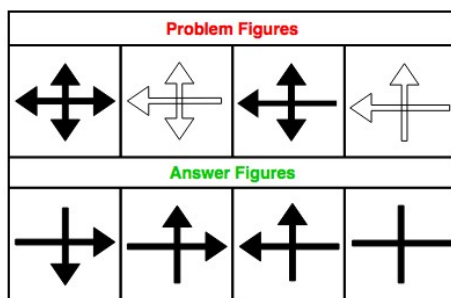
- (47.) What is the SB (Saving Bank) claim sanction limit for HSG-II SPM for a claim with legal evidence?
 (A.) 50000 (B.) 100000 (C.) No limit (D.) 500000
- (48.) The operation in AMPC which is performed at the point where mails are received and machinable articles are separated into machinable and non-machinable mails is called.....
 (A.) Handling (B.) Culling (C.) Sorting (D.) Registering
- (49.) A mail office may redirect any article or intercept or deliver any article to the addressee
 (A.) With permission of the Divisional Head (B.) With the permission of the In-charge
 (C.) On the authority of the DG or Head of the Circle (D.) None of these
- (50.) In case of transfer of bags from one set of mail office to another, will be indicated in the accompanying mail list as?
 (A.) 'L' bag (B.) 'M' bag (C.) 'A' bag (D.) 'C' bag
- (51.) The forest in Sundarban is called
 (A.) Scrub jungle (B.) Mangrove
 (C.) Deciduous forest (D.) Tundra
- (52.) Red soil is normally found in India in which regions?
 (A.) Eastern Region only (B.) Southern Region only
 (C.) Eastern & Southern part of the Deccan Plateau (D.) None of these
- (53.) Which is not an All India Service?
 (A.) Indian Administration Service (B.) Indian Police Service
 (C.) Indian Foreign Service (D.) Indian Forest Service
- (54.) The Drafting of the Constitution was completed on:
 (A.) 26th January, 1950 (B.) 26th December, 1949
 (C.) 26th November, 1949 (D.) 30th November, 1949
- (55.) Human Development index was formulated by:
 (A.) ASEAN (B.) IBRD (C.) UNDP (D.) UNCTAD
- (56.) Which one of the following National Park/Sanctuary is not in Rajasthan?
 (A.) Sariska National Park (B.) Sambar Wildlife Sanctuary
 (C.) Rajaji National Park (D.) Ranthambore National Park
- (57.) Which of the following folk/tribal dances is associated with Karnataka?
 (A.) Yakshagana (B.) Veedhi
 (C.) Jatra (D.) Jhora
- (58.) Who founded the association 'Naujawan Bharat Sabha' to help foster revolution against the British Raj by gathering together worker and peasant youth in 1928?
 (A.) ChandraShekhar Azad (B.) SuryaSen
 (C.) Bhagat Singh (D.) V.D.Savarkar
- (59.) 'A' threatened to commit suicide if his wife did not execute a sale deed in favour of his brother. The wife executed the sale deed. This transaction is
 (A.) Voidable due to undue influence. (B.) Voidable due to coercion.
 (C.) Void being immoral. (D.) Void being forbidden by law.
- (60.) Who is liable for necessaries supplied to a minor?
 (A.) The guardian of the minor (B.) The minor
 (C.) His property (D.) None of the above
- (61.) Evaluate: $(((125 \times (33 \div 11) + 2) \times 34) \div 493) \times 1/2$
 (A.) 13 (B.) 14 (C.) 26 (D.) 28
- (62.) Evaluate: $3 \times 7 + 4 - 6 \div 3 - 7 + 45 \div 5 \times 4 + 49$
 (A.) 101 (B.) 103 (C.) 99 (D.) 35



- (63.) Evaluate: $(4+2-16/4+3)+\{(1+8 \times 7)/19\} \times [(3+5-4)+(17-9 \times 4)]$
 (A.) 40 (B.) -225 (C.) 40 (D.) 335
- (64.) The salary of a worker is Rs 2000. It is first Increased by 10% and then decreased by 10%. What is the net change in his salary?
 (A.) 10 (B.) 20 (C.) 40 (D.) 80
- (65.) Evaluate: 40% of ? = 240
 (A.) 60 (B.) 6000 (C.) 860 (D.) 600
- (66.) Anil's monthly Income is 30% more than Ashok's. Ashok's monthly Income is 10% less than Manoj's. If the difference between the monthly income of Anil and Manoj is Rs 1360, what is the monthly Income of Ashok?
 (A.) Rs 8100 (B.) Rs 10430
 (C.) Rs 9000 (D.) None of these
- (67.) A person purchases 8 pens for Rs 10 and sells 10 pens for Rs 8. How much profit or loss does he make?
 (A.) 30% gain (B.) 30% loss. (C.) 36% gain (D.) 36% loss
- (68.) By selling an article for Rs 384, a trader gains 20%. Find the cost price of article.
 (A.) 160 (B.) 240 (C.) 320 (D.) 480
- (69.) A sum of Rs 26000 was lent out in two parts in such a way that the Interest on one part at 10% for 5 years is equal to that on the other part at 9% for 6 years. The sum lent out at 10% is,
 (A.) 12500 (B.) 13500 (C.) 26000 (D.) 39000
- (70.) At what rate percent of simple interest will a sum of money double itself in 12 years?
 (A.) 84% (B.) $81\frac{1}{3}\%$ (C.) 8% (D.) 94%
- (71.) The average age of a group of 15 students is 10 years. When 5 more students joined the group, the average got increased by 1 year. The average age of the newly joined students is
 (A.) 18 years (B.) 16 years (C.) 14 years (D.) 12 years
- (72.) A batch of 60 students made an average score of 50 marks and another batch of 40 students made it only 45. What is the overall average score?
 (A.) 49 (B.) 48 (C.) 47 (D.) 46
- (73.) Find the average of all the numbers between 6 and 34 which are divisible by 5.
 (A.) 18 (B.) 20 (C.) 24 (D.) 30
- (74.) P and Q working together can complete certain work in 6 days. Q alone can do it in 8 days. In how many days P alone could finish the same work?
 (A.) 12 days (B.) 16 days (C.) 18 days (D.) 24 days
- (75.) If 3 men or 5 women can reap a field in 143 days, how long will 5 men and 6 women take to reap it?
 (A.) 10 days (B.) 12 days (C.) 15 days (D.) 18 days
- (76.) A farmer travelled a distance of 61 km In 9 hours. He travelled partly on foot @ 4 km/hr. The distance travelled on foot is:
 (A.) 14 km (B.) 15 km (C.) 16 km (D.) 17 km
- (77.) A person crosses a 600 m long street in 5 minutes. What is his speed in km per hour?
 (A.) 3.6 (B.) 7.2 (C.) 8.4 (D.) 10
- (78.) The distance between two cities A and B is 330 Km. a train starts from A at 8 a.m. and travel towards B at 60 km/hr. Another train starts from B at 9a.m and travels towards A at 75 km/hr. At what time do they meet?
 (A.) 10 am (B.) 11am (C.) 12 pm (D.) 1 pm
- (79.) If 7metres of a uniform iron rod weighs 20 kg then what will be the weight of 7.7 metres of the same rod?



- (A.) 20 kg (B.) 21 kg (C.) 22 kg (D.) 23 kg
- (80.) If in a hostel, food is available for 45 days for 50 students. For how many days will this food be sufficient for 75 students?
- (A.) 25 days (B.) 28 days (C.) 30 days (D.) 40 days
- (81.) There is certain relation between two given words on one side of :: and one word is given on the other side of while other word is to be found from the given alternatives, having the same relation with this word as the given pair of words bear. Choose the best alternative.
- Leather: Cobbler:: Wood: ?
- (A.) Furniture: (B.) Cottage (C.) Carpenter (D.) Mason
- (82.) Catalogue is related to library books in the same way index is related to,
- (A.) Chapters (B.) Books (C.) Preface (D.) Contents
- (83.) Choose the word which is different from the rest.
- (A.) Japan (B.) India
(C.) Sri Lanka (D.) New Zealand
- (84.) Select the number that will come next in the following sequence:
4, 6, 12, 14, 28, 30, (...)
- (A.) 32 (B.) 64 (C.) 62 (D.) 60
- (85.) What will be the next term in BKS, DJT, FIU, HHV. (...)
- (A.) IJX (B.) IGX (C.) JGW (D.) IGU
- (86.) If in a certain code, SWITCH is written as TVJSDG, which word would be written as CQFZE?
- (A.) BARED (B.) BRAED (C.) BREA (D.) BRADE
- (87.) Introducing a man to her husband, a woman said his brother's father is the only son of my grandfather. How is the woman related to this man?
- (A.) Mother (B.) Aunt (C.) Sister (D.) Daughter
- (88.) Sudheesh walked 10 metres towards south. He turned left and walked 20 metres and then moved to his right. Then he turned right and walked 20 metres. Finally he turned right and moved a distance of 10 metres. How far and in which direction is he from the starting point?
- (A.) 10 m north (B.) 20 m south (C.) 20 m north (D.) 10 m south
- (89.) Below is given a number series
185729843627518943659
How many instances are there in which an even number is followed by two odd numbers?
- (A.) Ni (B.) One (C.) Two (D.) Three
- (90.) The following question consists of some Problem Figures followed by other figures marked 1, 2, 3, 4 called the Answer Figures. Find out the correct answer figure that should come next in the sequence of problem figures.



- (A.) 1 (B.) 2 (C.) 3 (D.) 4



A Vision of Victory

VV ACADEMY

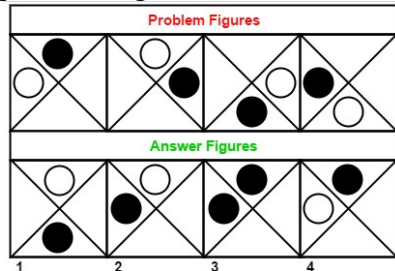
➤ RPF ➤ RRB GROUP - D ➤ POSTAL ➤ SI/CONSTABLE

Address : Near Chuttugunta Signals, Eluru Road, VJA 2. Cell : 9985525552, 8977525552

www.vvacademy.com



(91.) The following question consists of some Problem Figures followed by other figures marked 1, 2, 3, 4 called the Answer Figures. Find out the correct answer figure that should come next in the sequence of problem figures.



- (A.) 1 (B.) 2 (C.) 3 (D.) 4

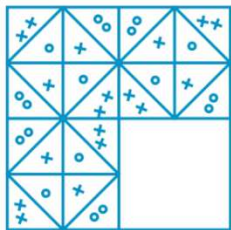
(92.) How many triangles in the figure?



- (A.) 8 (B.) 9 (C.) 10 (D.) None

(93.) In the following question, which answer figure will complete the question figure?

Question figure:




Answer figure:



- (A.) 1 (B.) 2 (C.) 3 (D.) 4

(94.) In the following question, which answer figure will complete the question figure?

Question figure:



Answer figure:



- (A.) 1 (B.) 2 (C.) 3 (D.) 4

(95.) Which of the answer figure in the following includes the question figure?



A Vision of Victory

VV ACADEMY

➤ RPF ➤ RRB GROUP - D ➤ POSTAL ➤ SI/CONSTABLE

www.vvacademy.com

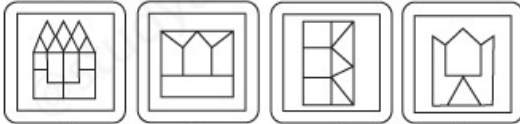


Address : Near Chuttugunta Signals, Eluru Road, VJA 2. Cell : 9985525552, 8977525552

Question figure:



Answer figures:



- (1) (2) (3) (4)
- (A.) 1 (B.) 2 (C.) 3 (D.) 4

(96.) From the given answer figures, find that answer figure which will replace the question mark in the question figure.



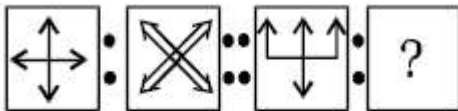
Answer Figures



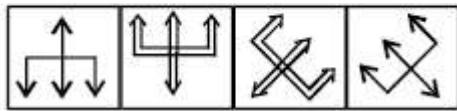
- (A) (B) (C) (D)
- (A.) 1 (B.) 2 (C.) 3 (D.) 4

(97.) From the given answer figures, find that answer figure which will replace the question mark in the question figure.

Question Figures :



Answer Figures :



- (1) (2) (3) (4)
- (A.) 1 (B.) 2 (C.) 3 (D.) 4

(98.) Select a suitable figure from the four alternatives that would complete the figure matrix.



A Vision of Victory

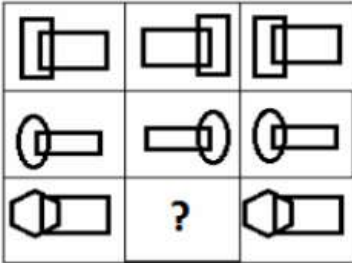
V V ACADEMY

➤ RPF ➤ RRB GROUP - D ➤ POSTAL ➤ SI/CONSTABLE

Address : Near Chuttugunta Signals, Eluru Road, VJA 2. Cell : 9985525552, 8977525552

www.vvacademy.com

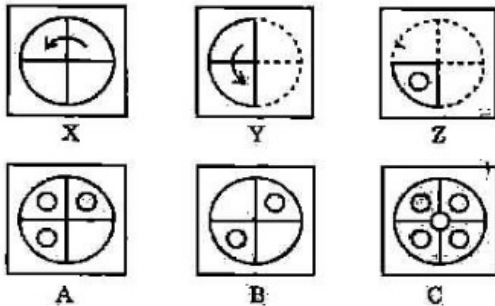




(A) (B) (C) (D)

(A.) 1 (B.) 2 (C.) 3 (D.) 4

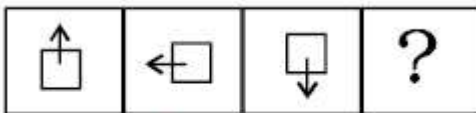
(99.) Following question consists of a set of three figures X, Y and Z showing a sequence of folding of a piece of paper. Fig (2) shows the manner in which the folded paper has been cut. These three figures are followed by four answer figures from which you have to choose a figure which would most closely resemble the unfolded form fig. (Z).



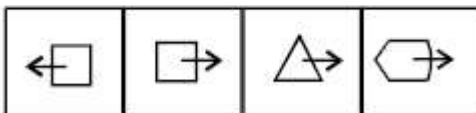
(A.) Fig. A (B.) Fig. B (C.) Fig. C (D.) Fig. D

(100.) From the given answer figures, find that answer figure which will replace the question mark in the question figure.

Question Figures :



Answer Figures :



(1) (2) (3) (4)
(A.) 1 (B.) 2 (C.) 3 (D.) 4

**CHATTISGARH CIRCLE-PA/SA EXAM -2023****ANSWER**

(1.)	B	(2.)	C	(3.)	C	(4.)	D	(5.)	B
(6.)	B	(7.)	A	(8.)	B	(9.)	D	(10.)	A
(11.)	D	(12.)	A	(13.)	A	(14.)	D	(15.)	D
(16.)	D	(17.)	C	(18.)	D	(19.)	B	(20.)	C
(21.)	A	(22.)	C	(23.)	C	(24.)	A	(25.)	A
(26.)	B	(27.)	C	(28.)	C	(29.)	A	(30.)	A
(31.)	B	(32.)	C	(33.)	D	(34.)	C	(35.)	D
(36.)	D	(37.)	B	(38.)	D	(39.)	B	(40.)	B
(41.)	D	(42.)	B	(43.)	D	(44.)	B	(45.)	A
(46.)	D	(47.)	C	(48.)	B	(49.)	C	(50.)	A
(51.)	B	(52.)	C	(53.)	C	(54.)	C	(55.)	C
(56.)	C	(57.)	A	(58.)	C	(59.)	B	(60.)	C
(61.)	A	(62.)	A	(63.)	A	(64.)	B	(65.)	D
(66.)	D	(67.)	D	(68.)	C	(69.)	B	(70.)	B
(71.)	C	(72.)	B	(73.)	B	(74.)	D	(75.)	C
(76.)	C	(77.)	B	(78.)	B	(79.)	C	(80.)	C
(81.)	C	(82.)	D	(83.)	B	(84.)	D	(85.)	C
(86.)	C	(87.)	C	(88.)	B	(89.)	D	(90.)	C
(91.)	D	(92.)	C	(93.)	A	(94.)	D	(95.)	A
(96.)	C	(97.)	C	(98.)	A	(99.)	D	(100.)	B