



BIHAR CIRCLE-PA/SA EXAM -2023

- (1.) The Head Quarters of Tamil Nadu Postal Circle is located in which of the following city?
(A.) Coimbatore (B.) Salem (C.) Chennai (D.) Madurai
- (2.) The working hours of Night Post Offices are generally fixed by which of the following authority?
(A.) Head of the Division (B.) Head of the Region
(C.) Head of the Circle (D.) None of the above
- (3.) Every letter, packet or parcel has to be stamped with the date stamps of at least how many post offices?
(A.) Two (B.) Three (C.) Four (D.) Five
- (4.) Generally, stamps should be affixed at which place of the address side of an envelope.
(A.) Left hand top corner (B.) Right hand top corner
(C.) Left hand bottom corner (D.) Right hand bottom corner
- (5.) Following two statements be read carefully and choose the correct option given below.
Statement I: Post Box facilities are available in all Post Offices.
Statement II: Post Box facilities are available free of cost.
(A.) Both statements are correct
(B.) Both statements are incorrect
(C.) Statement I is incorrect and Statements II is correct
(D.) Statement I is correct and Statements II is Incorrect
- (6.) Which office is responsible for the final disposal of undelivered articles?
(A.) Head Post Office (B.) Mail Office.
(C.) Postal Store Depot (D.) None of the above
- (7.) For the purpose of fixing surcharges and combined charges on International articles countries are divided into how many groups?
(A.) Four (B.) Five (C.) Six (D.) Seven
- (8.) An Aerogram should not weigh more than how many grams?
(A.) Three grams (B.) Four grams
(C.) Five grams (D.) Six grams
- (9.) "Custom Declaration Forms" are used in which of the following activity?
(A.) POSB operations (B.) Philately activities
(C.) PLI/RPLI operations (D.) International article booking
- (10.) The use of inland letter cards for addressing communication to foreign countries is permissible to which group of countries?
(A.) Bhutan, Bangladesh and Nepal (B.) Sri Lanka, Maldives and Myanmar
(C.) Pakistan, Afghanistan and Iran (D.) None of the above
- (11.) Printed Paper services in the foreign posts generally correspond to which service of inland post?
(A.) Book Packet. (B.) Registered newspaper
(C.) Periodicals (D.) Small packets
- (12.) What is the maximum number of International Reply Coupons that can be sold to an individual at a time?
(A.) Five (B.) Ten (C.) Twenty (D.) Thirty
- (13.) Which section of Customs Act 1962 empowers Custom Department to prohibit import of certain goods?
(A.) Section 10 (B.) Section 11 (C.) Section 12 (D.) Section 13
- (14.) In which year India joined Asian Pacific Postal Union (APPU)?



- (A.) 1970 (B.) 1971 (C.) 1972 (D.) 1973
- (15.) For the purpose of surcharge international articles are divided into how many groups?
 (A.) Two (B.) Three (C.) Four (D.) Five
- (16.) Examination and assessment of custom duty on Inward foreign articles is performed in which office?
 (A.) Custom House Office (B.) Foreign Post Office
 (C.) General Post Office (D.) None of the above
- (17.) With respect to international speed post custom forms have nomenclature as
 (A.) CN-22 and CN-23 (B.) CN-50 and CN-51
 (C.) CN-75 and CN-76 (D.) CN-88 and CN-89
- (18.) The Arab Postal Union, a restricted union has its headquarters in which city?
 (A.) Dubai (B.) Sana (C.) Muskat (D.) Cairo
- (19.) Under IT Modernization Project, Data Recovery Centre facility is establish in which city?
 (A.) Mysore (B.) Bangalore
 (C.) Navi Mumbai (D.) Chennai
- (20.) Word WAN (Wide Area Network) relates to which segment of IT Moderations project?
 (A.) NI (B.) RH (C.) CM (D.) MOH
- (21.) "DARPAN" associated with which of the following?
 (A.) General Post Offices (B.) Head Post Offices
 (C.) Rural Post Offices (D.) Mail Offices
- (22.) "EMV" chip is used in which of the item?
 (A.) ATM card (B.) RICT Device
 (C.) Bar code scanner (D.) None of the above
- (23.) Terms "NSP-1 and NSP-2 are associated with which of the following?
 (A.) Network connectivity (B.) Finacle updates
 (C.) SAP updates (D.) BI Tools
- (24.) MAC binding is commonly used with reference to which segment of IT Modernization project?
 (A.) CM (B.) CSI
 (C.) FSI (D.) None of the above
- (25.) In term "T-Code", alphabet T represents which of the following?
 (A.) Transaction (B.) Transfer (C.) Technology (D.) Table
- (26.) IT Modernization project has been divided into how many segments?
 (A.) Five (B.) Six (C.) Seven (D.) Eight
- (27.) In reference with the IT Modernization project, the term PMU refers to?
 (A.) Project Management Unit (B.) Power Management Unit
 (C.) Pressure Measuring Unit (D.) None of the above
- (28.) Term "HFINRPT" is used in which of the following platform?
 (A.) Finacle (B.) Macmish (C.) SAP (D.) DPMS
- (29.) Postal Life Insurance (PLI) introduced in which year?
 (A.) 1864 (B.) 1874 (C.) 1884 (D.) 1894
- (30.) The maximum weight limit for transmission of Pattern or sample packets through post office is how many Kilograms?
 (A.) One Kilogram (B.) Two Kilograms
 (C.) Three Kilograms (D.) Four Kilograms
- (31.) Which among following is not a special feature of Postal Life Insurance (PLI)?
 (A.) Income tax rebate (B.) Loan facility
 (C.) Nomination (D.) Low Bonus



- (32.) Which of the following term is not associated with "Philately"?
- (A.) Special cover (B.) First day cover
(C.) National Saving Certificates (D.) Miniature sheets
- (33.) In which year Rural Postal Life Insurance (RPLI) was introduced?
- (A.) 1992 (B.) 1993 (C.) 1994 (D.) 1995
- (34.) How many types of insurance schemes are offered under Rural Postal Life Insurance (RPLI)?
- (A.) 2 (B.) 4 (C.) 6 (D.) 8
- (35.) From which year Department of Posts has offered Internet Banking to POSB customers?
- (A.) 2016 (B.) 2017 (C.) 2018 (D.) 2019
- (36.) "Warehousing Service" is one of the features of which services offered by India Post?
- (A.) Speed Post (B.) Media Post
(C.) Logistics Post (D.) Direct Posts
- (37.) The annual interest rate applicable on Sukanya Samridhi Scheme Account (SSA) for fourth quarter of FY 2022-23 is?
- (A.) 6.9% (B.) 7.1% (C.) 7.4% (D.) 7.6%
- (38.) In which year India Post Payments Bank (IPPB) was formally launched by Prime Minister of India?
- (A.) 2018 (B.) 2019 (C.) 2020 (D.) 2021
- (39.) What is the maximum insurance cover (in Rs.) under Pradhan Mantri Suraksha Bima Yojna (PMSBY)?
- (A.) 10Lakh (B.) 8Lakh (C.) 5Lakh (D.) 2Lakh
- (40.) Deen Dayal SPARSH Yojna is related to which segment/activity of India Post?
- (A.) Mail (B.) Insurance
(C.) Banking (D.) None of the above
- (41.) Philatelic Deposit Account (PDA) account can be open with a minimum deposit of how much amount?
- (A.) Rs. 100 (B.) Rs. 200 (C.) Rs. 300 (D.) Rs. 400
- (42.) Which one of the following is not part/branch/department of a Head Post Office?
- (A.) Mail Branch (B.) Delivery Branch
(C.) Sorting Branch (D.) Loan Branch
- (43.) What is the maximum limit for loose cash remittance between account office and its departmental subordinate offices through employee?
- (A.) Rs. 5Lakh (B.) Rs. 10Lakh (C.) Rs. 15Lakh (D.) Rs. 20Lakh
- (44.) The movement of S.O.slip is from?
- (A.) Sub Post Office to Branch Post Office (B.) Sub Post Office to Head Post Office
(C.) Sub Post Office to Sub Post Office (D.) None of the above
- (45.) "PM CARES for children Scheme 2021 were introduced vide which SB Order?
- (A.) SB Order 23/2021 (B.) SB Order 33/2021
(C.) SB Order 43/2021 (D.) SB Order 53/2021
- (46.) Deduction/Non deduction of TDS in SCSS accounts has been clarified by which SB Order?
- (A.) SB Order 27/2021 (B.) SB Order 37/2021
(C.) SB Order 47/2021 (D.) SB Order 57/2021
- (47.) For what purpose the "Trial Notes" are used in International Mail transmission?
- (A.) To determine the most favourable route (B.) To determine the minimum postage
(C.) To find out the missing articles (D.) To calculate the custom charge
- (48.) Mail department of Sorting Mail Office is head by which authority?
- (A.) Head Sorting Assistant (B.) Sorting Assistant



- (C.) Registration Sorting Assistant (D.) Parcel Sorting Assistant
- (49.) Metal Tokens are used by which category of official?
(A.) Selected RMS Official (B.) Circle Office Official
(C.) Regional Office Official (D.) Postal Division Official
- (50.) Which one is not part/department of Sorting Mail Office?
(A.) Mail sorting (B.) Registration
(C.) Philately (D.) None
- (51.) Which one of the following state does not share its boundary with Assam?
(A.) Mizoram (B.) Nagaland (C.) Manipur (D.) Sikkim
- (52.) Which one of the following river originates from Himalayas?
(A.) Narmada (B.) Tapti (C.) Ravi (D.) Kaveri
- (53.) Who is the present Governor of Bihar?
(A.) Dr. C.V Ananda Bose (B.) Prof Ganeshi Lal
(C.) Sh. Phagu Chauhan (D.) Sh. Mangubhai C. Patel.
- (54.) Municipal Corporation is associated with which administrative set up?
(A.) Rural area local bodies (B.) Hilly area administrative bodies
(C.) Tribal area administrative bodies (D.) Urban area local bodies
- (55.) During Indian freedom struggle in which year the famous Non Cooperation movement started?
(A.) 1918 (B.) 1921 (C.) 1925 (D.) 1930
- (56.) Which one of the following was associated with "Bhoodan Movement"?
(A.) Bhagat Singh (B.) Subhash Chandra Bose.
(C.) Vinoba Bhave (D.) Mangal Pande
- (57.) Madhubani" style is famous for which of the following activity?
(A.) Temple architecture (B.) Classical music
(C.) Indian painting (D.) Classical dance
- (58.) Famous classical dance "Kathak has its roots in which Indian state?
(A.) Kerala (B.) Tamil Nadu
(C.) Uttar Pradesh (D.) Manipur
- (59.) The total geographical area of Bihar approximately?
(A.) 94,163 Sq KM (B.) 84,163 Sq KM
(C.) 74,163 Sq KM (D.) 64,163 Sq KM
- (60.) Personal commitment to work hard and do one's very best is associated with which of the following?
(A.) Confidentiality (B.) Empathy
(C.) Work ethics (D.) Impartiality
- (61.) In final exam of class XI there are 50 students, 20% students failed. How many students passed to class XII?
(A.) 20 (B.) 30 (C.) 40 (D.) 50
- (62.) Mr. Amit has bought an item for Rs. 500 and sells it for Rs. 700. Calculate the profit percentage?
(A.) 30 (B.) 35 (C.) 40 (D.) 45
- (63.) Ms. Radha bought a cycle for Rs. 5000. For how much rupees should she sell it so as to gain 10%?
(A.) Rs. 5600 (B.) Rs. 5550 (C.) Rs. 5525 (D.) Rs. 5500
- (64.) How much time will it take for an amount of Rs. 500 to yield Rs. 25 as interest at 5 % per annum of simple interest?
(A.) 1 year (B.) 2 years (C.) 3 years (D.) 4 years
- (65.) Mr. Ajay has invested an amount of Rs. 9000 for 5 years with a simple interest of 5% per annum. What will be interest amount?



- (A.) Rs.2000 (B.) Rs.2150 (C.) Rs.2250 (D.) Rs.2350
- (66.) The individual weight (in kgs) of 10 players of a team are 54, 55, 56, 57, 58, 59, 60, 61, 62 and 63. Calculate the average weight (in kgs)?
 (A.) 56.5 (B.) 57.5 (C.) 58.5 (D.) 59.5
- (67.) The mean weight of a group of five boys is 56 kg. The individual weights (in kg) of four of them are 52, 57, 55 and 60. Find the weight (in kg) of the fifth boy?
 (A.) 54 (B.) 55 (C.) 56 (D.) 57
- (68.) Aman and Rakesh together can do a task in 15 days, which Amit alone can do the same task in 20 days. In how many days Rakesh alone can do it?
 (A.) 60 (B.) 50 (C.) 40 (D.) 30
- (69.) A can do a bit of work in 10 days, which B alone can do in 15 days. In how many days both cooperating can do it?
 (A.) 5 (B.) 6 (C.) 7 (D.) 8
- (70.) A person crosses 800 meter bridge in 8 minutes. What is his speed in meter per minutes?
 (A.) 8 (B.) 80 (C.) 100 (D.) 800
- (71.) A marine ship covers a certain distance at a speed of 300kmph in 7 hours. To cover the same distance in 4 hours, it must travel at a speed (kmph) of?
 (A.) 520 (B.) 525 (C.) 530 (D.) 535
- (72.) The salary of 9 workers is Rs. 27,000. What will be the salary of 4 workers?
 (A.) Rs. 4000 (B.) Rs. 9000 (C.) Rs. 12000 (D.) Rs. 15000
- (73.) What will be final answer of following:-
 $5(10+15 \div 5 \times 4 - 2 \times 2)$
 (A.) 80 (B.) 85 (C.) 90 (D.) 95
- (74.) Solve the following:
 $20+20 \times 20 \div 20$
 (A.) 30 (B.) 40 (C.) 50 (D.) 60
- (75.) In a class of 60 students, 30% are girls. The number of boys in the class?
 (A.) 18 (B.) 30 (C.) 42 (D.) 45
- (76.) 5 buses carry 250 passengers. How many passengers can be carried by 6 such buses?
 (A.) 300 (B.) 350 (C.) 400 (D.) 450
- (77.) Calculate the final value of 40% of 60?
 (A.) 50 (B.) 40 (C.) 32 (D.) 24
- (78.) A cricketer has average score of 80 runs in eight Innings. Find out how many runs are to be scored by him in the ninth inning to raise the average score to 81?
 (A.) 89 (B.) 88 (C.) 87 (D.) 86
- (79.) A man completes a journey in 5 hours. He travels first half of the journey at the rate of 13 km/hr and second half at the rate of 15 km/hr. Find the total Journey in km?
 (A.) 89.6 (B.) 79.6 (C.) 69.6 (D.) 59.6
- (80.) A shopkeeper bought 300 apples and 200 mangoes. He found 15% apples and 25% mangoes were rotten. Find the percentage of fruits in good condition?
 (A.) 85% (B.) 84% (C.) 82% (D.) 81%
- (81.) Which word does NOT belong with the others?
 (A.) Second (B.) Hour (C.) Meter (D.) Minute
- (82.) KCD, LEF, MGH, ___, OKL
 (A.) NJI (B.) PU (C.) PJI (D.) NIJ
- (83.) BMM, DOO, FQQ, ___, JUU



A Vision of Victory

V V ACADEMY

➤ RPF ➤ RRB GROUP - D ➤ POSTAL ➤ SI/CONSTABLE

Address : Near Chuttugunta Signals, Eluru Road, VJA 2. Cell : 9985525552, 8977525552

www.vvacademy.com



(A.) GTT (B.) GSS (C.) HSS (D.) HTT
 (84.) What will be the next number?
 4, 10, 5, 11, 6, 12...?

(A.) 13 (B.) 10 (C.) 7 (D.) 5
 (85.) Look at this series: 49, 49, 37, 37, 25, 25,
 What number should come next?

(A.) 13 (B.) 14 (C.) 15 (D.) 16
 (86.) Choose the alternative which is closely resembles the mirror image of the given combination.

MALAYALAM

- (1) MALAYALAM (2) MAJAYAJAM
 (3) MAJAYAJAM (4) MAGAYAGAM

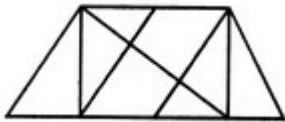
(A.) 1 (B.) 2 (C.) 3 (D.) 4
 (87.) Look at this series: Z2, ?, X8, W16, V32, ?
 What number should fill the blank?

(A.) Y3 (B.) Y4 (C.) U3 (D.) U4
 (88.) Look at this series: IV, VI, VIII, X, ?, XIV, What number should fill the blank?


(A.) XI (B.) XII (C.) XIII (D.) XV
 (89.) Ball is to Cricket as Shuttlecock is to?

(A.) Football (B.) Badminton (C.) Hockey (D.) Kabaddi
 (90.) Look at this series: 3, 1, (1/3), (1/9), What number should come next?

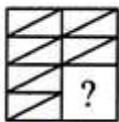
(A.) 1/12 (B.) 1/27 (C.) 1/49 (D.) 1/81
 (91.) Find the number of triangles in the given figure.



(A.) 8 (B.) 10 (C.) 12 (D.) 14
 (92.) How many rectangles are there in the figure given below?



(A.) 16 (B.) 18 (C.) 20 (D.) 22
 (93.) Identify the figure that completes the pattern.



(X)

(1)

(2)

(3)

(4)

(A.) 1 (B.) 2 (C.) 3 (D.) 4
 (94.) Select the alternative which represents three out of the five alternative figures which when fitted into each other would form a complete square.



A Vision of Victory


V V ACADEMY

➤ RPF ➤ RRB GROUP - D ➤ POSTAL ➤ SI/CONSTABLE

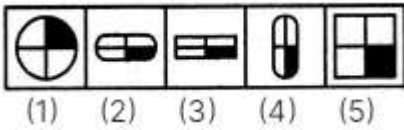
Address : Near Chuttugunta Signals, Eluru Road, VJA 2. Cell : 9985525552, 8977525552



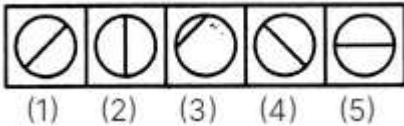
www.vvacademy.com



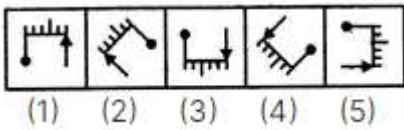
- (95.) Choose the figure which is different from the rest.
- (A.) 124 (B.) 345 (C.) 123 (D.) 135



- (96.) Choose the figure which is different from the rest
- (A.) 1 (B.) 2 (C.) 3 (D.) 4



- (97.) Choose the figure which is different from the rest
- (A.) 1 (B.) 2 (C.) 3 (D.) 4



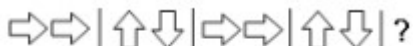
- (98.) Count the number of triangles and squares in the given figure.
- (A.) 1 (B.) 2 (C.) 3 (D.) 5



- (99.) Fill the series
- (A.) 24 triangles and 3 rectangles (B.) 28 triangles and 3 rectangles
- (C.) 24 triangles and 5 rectangles (D.) 28 triangles and 5 rectangles



- (100.) Fill the series
- (A.) 1 (B.) 2 (C.) 3 (D.) 4



- (A.) 1 (B.) 2 (C.) 3 (D.) 4

**BIHAR CIRCLE-PA/SA EXAM -2023****ANSWER**

(1.)	C	(2.)	D	(3.)	A	(4.)	B	(5.)	B
(6.)	D	(7.)	B	(8.)	A	(9.)	D	(10.)	A
(11.)	A	(12.)	B	(13.)	B	(14.)	D	(15.)	A
(16.)	B	(17.)	A	(18.)	D	(19.)		(20.)	A
(21.)	C	(22.)	A	(23.)	A	(24.)	D	(25.)	A
(26.)	D	(27.)	A	(28.)	A	(29.)	C	(30.)	B
(31.)	D	(32.)	C	(33.)	D	(34.)	C	(35.)	C
(36.)	C	(37.)	D	(38.)	A	(39.)	D	(40.)	D
(41.)	B	(42.)	D	(43.)	A	(44.)	D	(45.)	B
(46.)	B	(47.)	A	(48.)	A	(49.)	A	(50.)	D
(51.)	D	(52.)	C	(53.)		(54.)	D	(55.)	
(56.)	C	(57.)	C	(58.)	C	(59.)	A	(60.)	C
(61.)	C	(62.)	C	(63.)	D	(64.)	A	(65.)	C
(66.)	C	(67.)	C	(68.)	A	(69.)	B	(70.)	C
(71.)	B	(72.)	C	(73.)	C	(74.)	B	(75.)	C
(76.)	A	(77.)	D	(78.)	A	(79.)	C	(80.)	D
(81.)	C	(82.)	D	(83.)	C	(84.)	C	(85.)	A
(86.)	B	(87.)	B	(88.)	B	(89.)	B	(90.)	B
(91.)	D	(92.)	B	(93.)	D	(94.)	D	(95.)	A
(96.)	C	(97.)	A	(98.)	D	(99.)	A	(100.)	B