



**ASSAM CIRCLE-PA/SA EXAM -2023**

- (1.) Post offices are divided into how many classes?  
 (A.) One (B.) Two (C.) Three (D.) Four
- (2.) Night Post Office working can be extended up to 8.30 PM and also kept open on Sundays under the orders of the  
 (A.) Director General Posts  
 (B.) Head of the Circle  
 (C.) Director of Postal Services  
 (D.) Senior Superintendent/Superintendent of Post Offices
- (3.) Articles addressed to person who are dead will be treated  
 (A.) Deposited (B.) Un-disposed  
 (C.) Un-claimed (D.) Delivered
- (4.) A traveller may not use the "post restante" service for more than  
 (A.) One month (B.) Two months  
 (C.) 15 days (D.) Three months
- (5.) The facility of pre-payment of postage in cash is available at selected offices to firms or business establishment who posts not less than  
 (A.) 100 articles at a time. (B.) 200 articles at a time.  
 (C.) 500 articles at a time. (D.) 1000 articles at a time.
- (6.) Subject to the provisions, a value-payable article marked "Post Restante" is kept in the post office to which it is addressed for a period of:  
 (A.) 07 days only (B.) 30 days only  
 (C.) One year only (D.) Unlimited days
- (7.) How the matter relating to information regarding any postal transaction requested by any Government officer, is disposed of?  
 (A.) The Postmaster will refer the matter to the Head of the Circle for order  
 (B.) The Postmaster will refer the matter to the Inspector Posts for order  
 (C.) The Postmaster will refer the matter to Head Postmaster for order  
 (D.) The Postmaster will supply the information to the Government servant
- (8.) A postcard of private manufacture of more than prescribed size and thickness was found in delivery office. The article will be.....  
 (A.) Taxed with double the amount.  
 (B.) Returned to office of posting  
 (C.) Taxed with single the amount  
 (D.) Treated as letter and difference between minimum postage payable on a letter and postage already paid was charged.
- (9.) Foreign parcels posted in Branch Offices cannot be insured for more than:  
 (A.) Rs.500 (B.) Rs.600 (C.) Rs.1000 (D.) Rs.5000
- (10.) Postal articles exchanged in foreign post are broadly divided into..... categories?  
 (A.) One (B.) Two (C.) Three (D.) Four
- (11.) According to PO Guide Part-II, which of the following is correct:  
 (A.) Undeliverable correspondence is returned to the country of origin and delivered to the sender on payment of charges due, if any.  
 (B.) Postcards which do not bear the address of the sender are not returned  
 (C.) Both (A) & (B)  
 (D.) None of the above



- (12.) As per Post Office Guide Part-II, letters should not exceed..... in weight  
(A.) 5kgs (B.) 3kgs (C.) 4kgs (D.) 2kgs
- (13.) In the foreign post of the term "Letter Post" applies to which of the following postal articles:  
(A.) Letters (B.) Post cards  
(C.) Aerogramme (D.) All of the above
- (14.) The general maximum limit of weight for a foreign parcel is:  
(A.) 10 kilogram (B.) 15 kilogram (C.) 20 kilogram (D.) No limit
- (15.) With reference to foreign parcels which of the following is incorrect:  
(A.) The length should not exceed 1.05metre  
(B.) The sum of the length and the greatest circumference measured in a direction other than the length should not exceed 2metres.  
(C.) A parcel should have a surface measuring not less than 90 mm x 140 mm  
(D.) The general maximum limit of weight is 10kgs.
- (16.) Insufficiently paid outward foreign article can be taxed only be  
(A.) Office of posting (B.) RMS office  
(C.) Office of foreign exchange (D.) Country of destination
- (17.) An Aerogramme should not exceed 110 x 220 mm when folded and should not weigh more than?  
(A.) 2 grams (B.) 3 grams (C.) 5 grams (D.) 6 grams
- (18.) The period of detention of undelivered articles addressed to foreign countries is governed by the internal regulations of the:  
(A.) Country of origin (B.) Country of destination  
(C.) Both (A) & (B) (D.) None of the above
- (19.) With reference to MNOP, what 'KPI' represents?  
(A.) Key Performance Indicator (B.) Key Postal Information  
(C.) Key Performance Incentive (D.) Key Project Indicator
- (20.) The term 'WAN' in IT modernization project of Department of Posts refers to:  
(A.) Wrong Account Number (B.) Wide Area Network  
(C.) Wide Average Network (D.) Wide Area Number
- (21.) "CBS stands for  
(A.) Civil Banking Solution (B.) Central Banking Service  
(C.) Core Banking Solution (D.) Core Banker's Service
- (22.) The term 'DRC in IT modernization project of Department of Posts refers to:  
(A.) Date Recovery Centre (B.) Data Reserve Centre  
(C.) Disaster Recovery Centre (D.) Digital Reserve Centre
- (23.) For what abbreviation "CSI" stands for  
(A.) Core System Integrator (B.) Central System Integrator  
(C.) Core Solution Inventor (D.) Central Service Inventor
- (24.) Which of the following stream of IT modernization project computerized SB and PLI operations of Department through one platform?  
(A.) FSI (B.) CSI (C.) MOH (D.) DCF
- (25.) What is the expansion of terminology "IPVS"?  
(A.) India Post Vision System (B.) India Parcel Visibility System  
(C.) India Post Virtual System (D.) India Post Visibility System
- (26.) Disaster Recovery Centre is located at,  
(A.) Chennai (B.) Mumbai (C.) Mysore (D.) Bangalore
- (27.) The letter 'A' standing from left in the term 'DARPAN' refers to:



- (A.) Advancement (B.) Assessment  
(C.) Achievement (D.) Annual
- (28.) "NI" with reference to IT modernization stands for:  
(A.) Negative Indicator (B.) Network Inclusion  
(C.) National Information (D.) Network Integrator
- (29.) Speed Post receipts have:  
(A.) 11-digit alphanumeric code (B.) 14-digit numeric code  
(C.) 12-digit numeric code (D.) 13-digit alphanumeric code
- (30.) Which of the product/services have not been launched by "IPPB"  
(A.) Unified Payment Interface (B.) Domestic Money Transfer  
(C.) Virtual Debit Card (D.) Issue of Printed Passbook
- (31.) What is the maximum weight and Insurance of a Speed Post consignment?  
(A.) 35 kg and Rs. 1lakh (B.) 20 kg and Rs. 1lakh  
(C.) 35 kg and Rs. 10000 (D.) 20 kg and Rs. 10000
- (32.) What is the maximum weight limit of a book packet containing periodicals?  
(A.) Not more than 4 kg (B.) Not more than 5 kg  
(C.) Not more than 7 kg (D.) Not more than 10 kg
- (33.) Under which of the following categories of business, sale of Rakhi Envelopes comes:  
(A.) Direct Post (B.) Media Post  
(C.) Business Post (D.) Retail Post
- (34.) Registration charges for foreign letter's?  
(A.) Rs.25 (B.) Rs.50 (C.) Rs.70 (D.) Rs.100
- (35.) Compensation for loss of Speed Post article is equal to:  
(A.) Speed Post charges or Rs. 1000 whichever is less  
(B.) Double the Speed Post charges or Rs. 1000 whichever is less  
(C.) Triple the Speed Post charges  
(D.) No compensation
- (36.) CN22 form is to be attached to foreign articles if the value is less than?  
(A.) SDR 100 (B.) SDR 200 (C.) SDR 300 (D.) SDR 500
- (37.) In PL schemes "Endowment Assurance is otherwise termed as:  
(A.) Suraksha (B.) Sumangal (C.) Suvidha (D.) Santosh
- (38.) In case SB account balance not raised to Rs. 500/- at the end of financial year, how much amount will be deducted as account maintenance fee?  
(A.) Rs. 100.00 (B.) Rs. 50.00 (C.) Rs. 20.00 (D.) Rs. 10.00
- (39.) Nanyatha is related to:  
(A.) Online letter box painting (B.) Input device  
(C.) A software for letter clearance from letter boxes (D.) Rural network device
- (40.) If there is breach of condition in a single post card of Rs.0.50 posted in letter box how much amount should be taxed.  
(A.) Rs.9 (B.) Rs.4.50  
(C.) Returned to sender or RLO (D.) No fees
- (41.) What is "AEPS"  
(A.) Aadhar Enabled Pension System (B.) Aadhar Enabled Payment System  
(C.) Aadhar Enabled Private System (D.) Aadhar Enclosed Payment Service
- (42.) When a registered article of the letter mail or a parcel is received in the office of delivery in a damaged condition, a notice will be sent by the Postmaster of that office to the addressee requesting him to attend the



post Office within how many days in the case of foreign article to take delivery of it either personally or through an agent.

- (A.) 2 days (B.) 7 days (C.) 10 days (D.) 15 days
- (43.) The round and oblong MO stamps and Insurance seal should be kept in custody of
  - (A.) Sub Account PA (B.) Money Order PA
  - (C.) Postmaster (D.) None of the above
- (44.) Disposal of surplus funds at sub-office may be disposed by among the following ways:
  - (A.) By remittances to the treasury or bank in the case of sub-offices situated at treasury or bank stations
  - (B.) By remittance to another sub office
  - (C.) Both (A) & (B)
  - (D.) None of the above
- (45.) Any parcel found in a letter box will be treated and charged as
  - (A.) Unregistered parcel (B.) Registered parcel
  - (C.) Insured parcel (D.) None of the above
- (46.) As per SB order 26/2022 dated 30.12.2022 the rate of interest effective from 01.01.2023 In respect of 1 year Time Deposit account is:
  - (A.) 6.6% (B.) 6.7% (C.) 6.8% (D.) 6.9%
- (47.) Transit bags must always be closed and sealed in the presence of:
  - (A.) The IRM/Asst.Suptd. of RMS (B.) The Head Sorting Assistant/Mail Guard/ Mail Agent
  - (C.) The senior most MTS of the set (D.) None of the above
- (48.) The preservation period of work papers of RMS offices and Section is:
  - (A.) 06 months (B.) 12 months (C.) 18 months (D.) 24 months
- (49.) Daily report of HSA must be submitted to
  - (A.) Head Record Office only (B.) Superintendent RMS through Record Officer
  - (C.) Sorting Assistant (D.) Inspector
- (50.) Complaints relating to loss or damage to a registered or insured article where a claim for compensation is made should be preferred within:
  - (A.) 03 months from the date of posting of the article
  - (B.) 06 months from the date of posting of the article
  - (C.) 09 months from the date of posting of the article
  - (D.) 12 months from the date of posting of the article
- (51.) It is important to have a good .....to be successful in your career
  - (A.) Appearance (B.) Attendance
  - (C.) Attitude (D.) Respect
- (52.) When was the "Quit India" movement launched by Mahatma Gandhi?
  - (A.) 1946 AD (B.) 1939 AD (C.) 1942 AD (D.) 1940 AD
- (53.) Which of the following states does not share a boundary with Myanmar?
  - (A.) Arunachal Pradesh (B.) Manipur
  - (C.) Nagaland (D.) Assam
- (54.) The member of the Rajya Sabha are elected by
  - (A.) The people
  - (B.) Lok Sabha
  - (C.) Elected members of the Legislative Assembly of the States
  - (D.) Elected members of the Legislative Council of the States
- (55.) Which of the following is "not" a fundamental duty of a Citizen?
  - (A.) Respect for the Constitution (B.) Respect for the National Flag



- (C.) Respect for the National Anthem (D.) Respect for the Government
- (56.) "Martyr's Day" is celebrated every year on  
 (A.) 30th January (B.) 31 January  
 (C.) 28th January (D.) 29 January
- (57.) "Ethics" is the science of  
 (A.) Truth (B.) Beauty (C.) Conduct (D.) Mind
- (58.) 1024 kilo byte is equal to  
 (A.) 1 (one) terabyte (B.) 1 (one) megabyte  
 (C.) 1 (one) gigabyte (D.) 1 (one) hexa byte
- (59.) Which Indian Academy is promoting dance, drama and music?  
 (A.) Sahitya Academy (B.) Lalita Kala Academy  
 (C.) National Theatre Academy (D.) Sangeet Natak Academy
- (60.) The Jakhm dam is located in which State?  
 (A.) Madhya Pradesh (B.) Gujarat  
 (C.) Rajasthan (D.) Uttar Pradesh
- (61.)  $3640 \div 14 \times 16 + 340 = ?$   
 (A.) 0.70 (B.) 4500 (C.) 4480 (D.) 4600
- (62.) If 6 books weigh 1260 kgs. How many books will weigh 3150 kgs?  
 (A.) 12 (B.) 18 (C.) 15 (D.) 20
- (63.)  $107 \times 107 + 93 \times 93 = ?$   
 (A.) 19578 (B.) 19418 (C.) 20098 (D.) 21908
- (64.) If loss is  $\frac{1}{3}$  of S.P., the loss percentage is:  
 (A.)  $16 \frac{2}{3}\%$  (B.) 20% (C.) 25% (D.)  $33 \frac{1}{3}\%$
- (65.)  $9\% \text{ of } ? = 63$   
 (A.) 75 (B.) 70 (C.) 60 (D.) 65
- (66.)  $3 + 33 + 333 + 3.33 = ?$   
 (A.) 362.3 (B.) 372.33 (C.) 702.33 (D.) 702
- (67.) The average of five consecutive numbers is 4. The largest of these number is:  
 (A.) 06 (B.) 07 (C.) 05 (D.) 08
- (68.)  $(3080 + 6160) \div 28 = ?$   
 (A.) 320 (B.) 440 (C.) 330 (D.) 340
- (69.)  $5005 - 5000 \div 10 = ?$   
 (A.) 4505 (B.) 450.5 (C.) 4515 (D.) 5405
- (70.) What is 15 percent of Rs.34?  
 (A.) Rs.3.40 (B.) Rs.3.75 (C.) Rs.4.50 (D.) Rs.5.10
- (71.) 'A' does a work in 10 days and 'B' does the same work in 15 days. In how many days they together will do the same work?  
 (A.) 5 days (B.) 6 days (C.) 8 days (D.) 9 days
- (72.) How many minutes does Aditya take to cover a distance of 2 km, if he runs at a speed of 20 km/hr?  
 (A.) 5 minutes (B.) 6 minutes (C.) 3 minutes (D.) 9 minutes
- (73.) If weight of 8 identical articles is 4.8 kgs, what will be weight of 11 such articles?  
 (A.) 6.6kgs (B.) 6.2kgs (C.) 6.4kgs (D.) 6.0kgs
- (74.) 'A' and 'B' together can complete a piece of work in 4 days. If A alone can complete the same work in 12 days, in how many days can 'B' alone complete that work?  
 (A.) 8 days (B.) 7 days (C.) 6 days (D.) 9 days
- (75.)  $28\% \text{ of } 450 + 45\% \text{ of } 280 = ?$



A Vision of Victory

www.vvacademy.com

# VV ACADEMY


➤ RPF ➤ RRB GROUP - D ➤ POSTAL ➤ SI/CONSTABLE



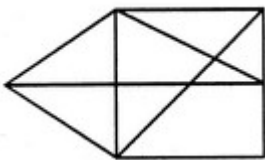
Address : Near Chuttugunta Signals, Eluru Road, VJA 2. Cell : 9985525552, 8977525552

- (76.) The average of 11 results is 60. If the average of first six results is 58 and that of the last six is 63, find the sixth result.  
 (A.) 258 (B.) 254 (C.) 256 (D.) 252
- (77.) Find S.P, If CP- Rs. 56.25 and gain is 20%  
 (A.) 86 (B.) 76 (C.) 56 (D.) 66
- (78.) The average of 25 results is 18. The average of first twelve of them is 14 and that of last twelve is 17. Find the thirteenth result.  
 (A.) Rs.67.50 (B.) Rs.72.40 (C.) Rs.65.80 (D.) Rs.70.20
- (79.) The average of 25 results is 18. The average of first twelve of them is 14 and that of last twelve is 17. Find the thirteenth result.  
 (A.) 74 (B.) 78 (C.) 72 (D.) 76
- (80.) A sum of money at simple interest amounts to Rs.815 in 3 years and to Rs.854 in 4 years. The sum is:  
 (A.) Rs.650 (B.) Rs.690 (C.) Rs.698 (D.) Rs.700
- (81.) If a sum of money at simple interest double in 6 years, it will become 4 times in  
 (A.) 12 years (B.) 14 years (C.) 16 years (D.) 18 years

(81.) How many rectangles in the given figure



- (A.) 6 (B.) 9 (C.) 12 (D.) 18
- (82.) Find the number of triangles in the given figure



- (A.) 12 (B.) 14 (C.) 15 (D.) 13
- (83.) Find out the answer figures that best fit in the question figure to complete a triangle.



(A) (B) (C) (D)

- (A.) A (B.) B (C.) C (D.) D
- (84.) Find the number of triangles in the given figure



- (A.) 28 (B.) 12 (C.) 13 (D.) 25
- (85.) Find out amongst answer figures which is similar to the problem figure



A Vision of Victory

**V V ACADEMY**

➤ RPF ➤ RRB GROUP - D ➤ POSTAL ➤ SI/CONSTABLE

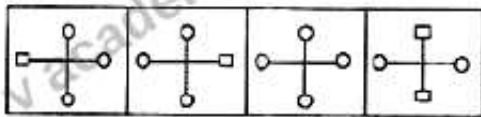
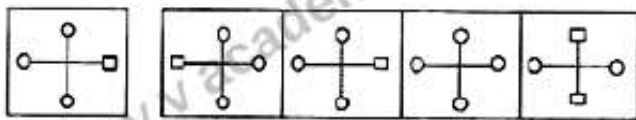
Address : Near Chuttugunta Signals, Eluru Road, VJA 2. Cell : 9985525552, 8977525552

www.vvacademy.com



(Problem figure)

(Answer figure)



(A) (B) (C) (D)

(A.) A (B.) B (C.) C (D.) D

(86.) Find out amongst answer figures which is similar to the problem figure



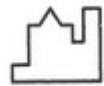
(x)



(1)



(2)



(3)



(4)

(A.) 1 (B.) 2 (C.) 3 (D.) 4

(87.) Find out mirror image of the problem figure from answer figures

(Problem figure)

(Answer figure)

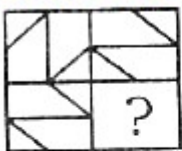


(A) (B) (C) (D)

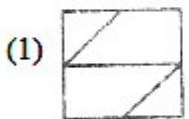
(A.) A (B.) B (C.) C (D.) D

(88.) Which of the following will complete the figure in question mark?

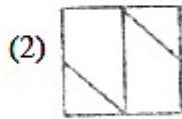
Question figure



Answer figures



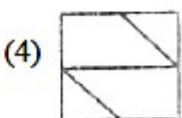
(1)



(2)



(3)



(4)

(A.) 1 (B.) 2 (C.) 3 (D.) 4



A Vision of Victory

www.vvacademy.com

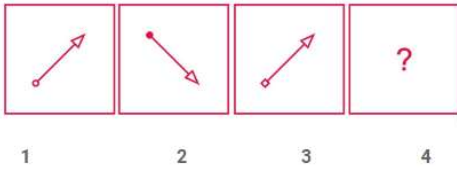
# VV ACADEMY

➤ RPF ➤ RRB GROUP - D ➤ POSTAL ➤ SI/CONSTABLE

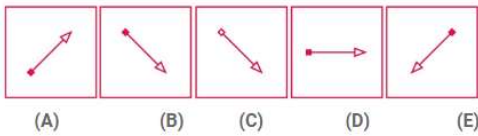


Address : Near Chuttugunta Signals, Eluru Road, VJA 2. Cell : 9985525552, 8977525552

(89.) Complete the figure series



Answer Figures

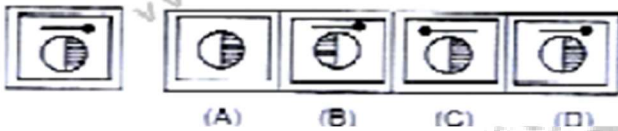


- (A.) A                      (B.) B                      (C.) C                      (D.) D

(90.) Find out amongst answer figures which are similar to the problem figure

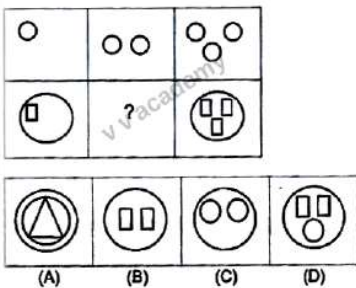
(Problem figure)

(Answer figure)



- (A.) A                      (B.) B                      (C.) C                      (D.) D

(91.) Complete the figure series

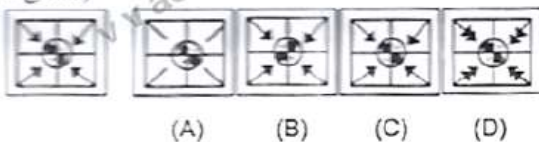


- (A.) A                      (B.) B                      (C.) C                      (D.) D

(92.) Find out amongst answer figures which is similar to the problem figure

(Problem figure)

(Answer figure)



- (A.) A                      (B.) B                      (C.) C                      (D.) D

(93.) Which of the following will complete the figure in question mark?





A Vision of Victory

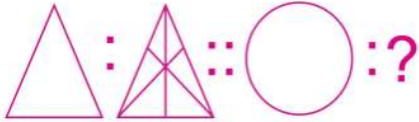
**V V ACADEMY**

➤ RPF ➤ RRB GROUP - D ➤ POSTAL ➤ SI/CONSTABLE

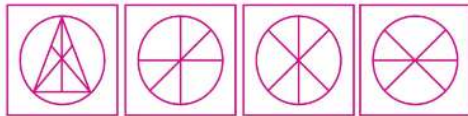
Address : Near Chuttugunta Signals, Eluru Road, VJA 2. Cell : 9985525552, 8977525552

www.vvacademy.com





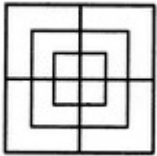
Answer Figures



(A) (B) (C) (D)

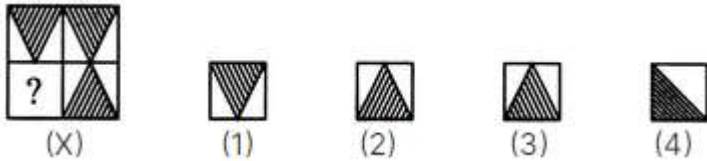
(A.) A (B.) B (C.) C (D.) D

(94.) Find the number of squares in the given figure



(A.) 13 (B.) 14 (C.) 15 (D.) 16

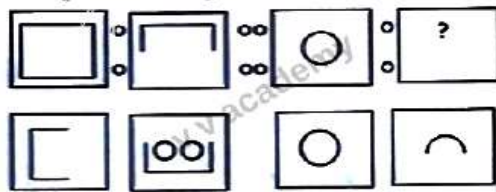
(95.) Complete the pattern in problem figure amongst the option given in answer figure



(X) (1) (2) (3) (4)

(A.) A (B.) B (C.) C (D.) D

(96.) Complete the figure series

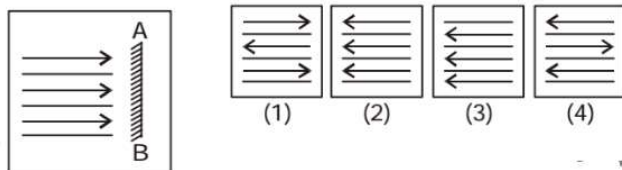


(A) (B) (C) (D)

(A.) A (B.) B (C.) C (D.) D

(97.) Find out mirror image of the problem figure from answer figures

Question Figure : Answer Figures :



(A.) 1 (B.) 2 (C.) 3 (D.) 4

(98.) Find the number of triangles in the given figure



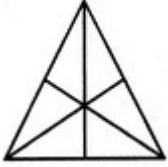
A Vision of Victory

www.vvacademy.com

# V V ACADEMY

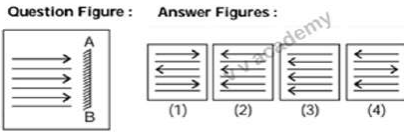
➤ RPF ➤ RRB GROUP - D ➤ POSTAL ➤ SI/CONSTABLE

Address : Near Chuttugunta Signals, Eluru Road, VJA 2. Cell : 9985525552, 8977525552

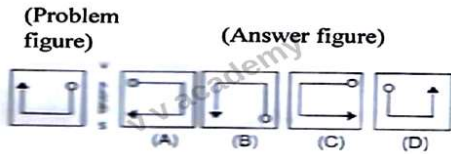
- (A.) 16                      (B.) 13                      (C.) 15                      (D.) 14

(99.) Find out amongst answer figures which is similar to the problem figure




- (A.) A                      (B.) B                      (C.) C                      (D.) D

(100.) Find out mirror image of the problem figure from answer figures



- (A.) A                      (B.) B                      (C.) C                      (D.) D





**ASSAM CIRCLE-PA/SA EXAM -2023**

**ANSWER**

(1.)	C	(2.)	A	(3.)	C	(4.)	D	(5.)	C
(6.)	A	(7.)	A	(8.)	D	(9.)	B	(10.)	B
(11.)	C	(12.)	D	(13.)	D	(14.)	C	(15.)	D
(16.)	D	(17.)	B	(18.)	B	(19.)	A	(20.)	B
(21.)	C	(22.)	C	(23.)	A	(24.)	A	(25.)	D
(26.)	C	(27.)	A	(28.)	D	(29.)	D	(30.)	D
(31.)	A	(32.)	B	(33.)	D	(34.)	C	(35.)	B
(36.)	C	(37.)	D	(38.)	B	(39.)	C	(40.)	B
(41.)	B	(42.)	D	(43.)	C	(44.)	C	(45.)	B
(46.)	A	(47.)	B	(48.)	C	(49.)	B	(50.)	A
(51.)	C	(52.)	C	(53.)	D	(54.)	C	(55.)	D
(56.)	A	(57.)	C	(58.)	B	(59.)	D	(60.)	C
(61.)	B	(62.)	C	(63.)	C	(64.)	C	(65.)	B
(66.)	B	(67.)	A	(68.)	C	(69.)	A	(70.)	D
(71.)	B	(72.)	B	(73.)	A	(74.)	C	(75.)	D
(76.)	D	(77.)	A	(78.)	B	(79.)	C	(80.)	D
(81.)	D	(82.)	C	(83.)	A	(84.)	A	(85.)	B
(86.)	C	(87.)	D	(88.)	C	(89.)	B	(90.)	D
(91.)	B	(92.)	C	(93.)	C	(94.)	C	(95.)	D
(96.)	D	(97.)	B	(98.)	A	(99.)	B	(100.)	D