



WEST BENGAL CIRCLE-PA/SA EXAM -2022

- (1.) Maximum Sum assured in RPLI Children Policy is
(A.) 10Lakh (B.) 1Lakh (C.) 3Lakh (D.) 5Lakh
- (2.) A 'Gram Priya' RPLI policy will mature in
(A.) 10 Years (B.) 20 Years (C.) 15 Years (D.) 45 Years
- (3.) A 'Suraksha' PLI policy holder can avail loan facility only after
(A.) 3 Years (B.) 4 Years (C.) 5 Years (D.) 1 Year
- (4.) For a local direct post article weighing 30g what will be the tariff rate
(A.) Rs 1.50 (B.) Rs 2.50 (C.) Rs 2.00 (D.) Rs 3.00
- (5.) In IMT services in post Offices the followings are allowed.
(A.) Inward personal remittances can be received
(B.) Outward personal remittances can be sent
(C.) Inward remittance for a registered company can be received
(D.) All the above
- (6.) Minimum amount for opening a post office Time Deposit account is
(A.) Rs. 100.00 (B.) Rs. 500.00
(C.) Rs. 1000.00 (D.) Rs. 10.00
- (7.) Total face value of stamps available in one My Stamp sheet is
(A.) Rs. 60.00 (B.) Rs. 120.00 (C.) Rs.300.00 (D.) Rs. 90.00
- (8.) What is 'PBE' in Export of Commercial items through Postal Channel?
(A.) Postal Bill of Export (B.) Post Board for Exchange
(C.) Postal Ballot Exchange (D.) Parcel Bill of Export
- (9.) In Project 2.0 of Department of Posts has been approved for the period.
(A.) 2021 to 2026 (B.) 2022 to 2030
(C.) 2020 to 2025 (D.) 2021 to 2024
- (10.) The core Insurance solution provides for
(A.) Automatic transfer of MIS interest to SB account.
(B.) Payment of PLI/RPLI premium at any post office.
(C.) Selling of third party Insurance schemes at BOS
(D.) ATM cards for all the Insurance Policy Holders.
- (11.) Employee Self Service Portal (ESS) is part of
(A.) Core Banking Solution (B.) Core System Integrator Solution
(C.) India Post Visibility System (D.) Financial System Integrator Solution
- (12.) The Disaster Recovery Centre (DRC) is located at
(A.) CEPT Chennai (B.) NICBhuvanewar
(C.) DAKC Mumbai (D.) CEPTMysuru
- (13.) The IT modernization project 1.0 was approved in the year
(A.) 2016 (B.) 2019 (C.) 2015 (D.) 2012
- (14.) The POSB functions at the CBS post Officers are carried out in
(A.) Finacle Application (B.) Mcamish Application
(C.) E.R.P application (D.) Sanchay Post Application
- (15.) The Delivery operations at the departmental post officers are carried out in
(A.) IPVS Module (B.) DPMS Module
(C.) RICT (D.) F&A Module
- (16.) The objective of 'DARPAN' Project is to
(A.) Induct technology and modernize all RMS officers



- (B.) Induct technology and modernize all HO's
- (C.) Induct technology and modernize all Administrative officers
- (D.) Induct technology and modernize all BO's
- (17.) C.E.P.T stands for
 - (A.) Central Entity for Postal Training
 - (B.) Centre for education and Professional Training
 - (C.) Central enterprise for Postal Transformation
 - (D.) Centre for Excellence in Postal Technology.
- (18.) The real time delivery information is captured in which of the following software.
 - (A.) Postman Mobile Application
 - (B.) India Post Visibility System
 - (C.) Point of Sale
 - (D.) Nanyatha
- (19.) A foreign blind literature article should not exceed more than kg
 - (A.) 5
 - (B.) 6
 - (C.) 7
 - (D.) 8
- (20.) For a Foreign article containing export items which are more than 100 year old require antiquity clearance from department for transmission.
 - (A.) Cutoms
 - (B.) Archeological
 - (C.) Income Tax
 - (D.) Medical
- (21.) The general maximum limit of weight for a foreign parcel is.....kgs
 - (A.) 30
 - (B.) 35
 - (C.) 20
 - (D.) 25
- (22.) In foreign articles... is the term used for 'acknowledgment' as used in inlandposts
 - (A.) Advice of delivery
 - (B.) Avis De reception
 - (C.) a & b above
 - (D.) None of the above
- (23.) An foreign article superscribed as will contain Blind literature
 - (A.) Nanogrammes
 - (B.) Kangrammes
 - (C.) Cecogrammes
 - (D.) None of the above
- (24.) In foreign post..... system is in place for despatch/receipt of special bags of printed papers to foreign countries
 - (A.) Bulk bag
 - (B.) Axis
 - (C.) Red bag
 - (D.) Blue bag
- (25.) The manufacture and use of fictitious postage stamps, for any purpose is an Once punishable under section..... of the Indian Penal code.
 - (A.) 200-A
 - (B.) 263-A
 - (C.) 363-A
 - (D.) 300-A
- (26.) Coin, bullion, precious stones, jewellery, articles of gold or silver and currency or Bank Notes, can be sent by...
 - (A.) Registered post
 - (B.) Insured post
 - (C.) Both a & b above
 - (D.) None of the above
- (27.) articles should not be posted in the letter boxes
 - (A.) Inland letter cards
 - (B.) Inland packets
 - (C.) Inland Book post
 - (D.) Machine franked
- (28.) Which of the following articles bearing the post Box number are not delivered through postbox.
 - (A.) Postage due articles
 - (B.) Aerogramme
 - (C.) Fully paid registered newspapers
 - (D.) Post cards
- (29.) The system of delivery of Postal articles in a bag to a renter i.e. post Bag facility, is available at
 - (A.) All post offices
 - (B.) All Delivery post offices
 - (C.) Selected post offices only
 - (D.) Selected city post offices only
- (30.) article is kept in the post office to which it is addressed for a period not exceeding one month.
 - (A.) Registered
 - (B.) Poste Restante
 - (C.) Value Payable Parcel
 - (D.) None of the above



- (31.) Complaints relating to loss or damage to a registered or insured article where a claim for compensation is made must be made within from the date of posting of the article.
- (A.) Three months (B.) Two months
(C.) One month (D.) 15 Days
- (32.) Blind literature packets are treated as articles of
- (A.) First class mail (B.) Second class mail
(C.) Seasonal mail (D.) All the above
- (33.) Who is competent to permit Business Reply Services.....
- (A.) Head of the Division (B.) Head Postmasters
(C.) Head postman (D.) All the above
- (34.) An unpaid article posted as book packet found to contain a personal communication will be charged.....
- (A.) At Letter rate (B.) At Double the rate for book packet
(C.) Will not be transmitted (D.) At Rs. 1.00
- (35.) Facilitates transmission of articles across countries
- (A.) CPU (B.) APU (C.) OPU (D.) UPU
- (36.) If a surface foreign article is not paid before TA for redirection by air and requests for inland air transmission, it will be subject to tax equal to
- (A.) Difference in postage (B.) Double the postage half the postage
(C.) Half the postage (D.) None of the above
- (37.) Undeliverable foreign mails will normally be returned by
- (A.) Surface (B.) Air
(C.) Will not be returned at all (D.) Will be destroyed at RLO
- (38.) 'Printed Paper' service in foreign post corresponds to service in inland post with some variations in conditions.
- (A.) Letter (B.) Post cards
(C.) Book packet (D.) None of the above
- (39.) Maximum weight up to which a business parcels can be booked is
- (A.) 45kg (B.) 35kg (C.) 25kg (D.) 50kg
- (40.) An international Tracked packet can be booked up to a maximum weight of
- (A.) 2kg (B.) 4 kg (C.) 20 kg (D.) 35 kg
- (41.) Request for recall of inward foreign article from a foreign sender will be received in the
- (A.) Office of exchange (B.) Destination post office
(C.) Airmail sorting office (D.) All the above
- (42.) APPU was established in 1962 with its head quarters at
- (A.) New Delhi (B.) Manila (C.) Tokyo (D.) Singapore
- (43.) If a parcel mail article is received missent, a note of the irregularity should be made on the with which it was received.
- (A.) Parcel list (B.) Delivery slip (C.) Mail list (D.) Set slip
- (44.) In CRC operation the details of services/type of articles that are handled in the CRC is available in
- (A.) Service master (B.) Beat master
(C.) Mail Agency Master (D.) Due Mail List
- (45.) Except on the authority of the Director General or the Head of the circle, a mail office may not-
- (A.) Redirect any article (B.) Intercept any article
(C.) Deliver any article to the addressee (D.) All the above



- (46.) In PM CARES for children scheme, 2021 account initial deposit contribution shall be made only from
- (A.) PM-CARES fund (B.) Depositors own fund
(C.) CM-CARES fund (D.) School fund
- (47.) TDS exemption is applicable to a SCSS account holder only if the account is seeded with
- (A.) 15G/15H (B.) ACG-6 (C.) 16G/16H (D.) 14G/14H
- (48.) MS-94 in post office is.....
- (A.) Complaints and suggestions book (B.) Postman book
(C.) BO journal (D.) Error book
- (49.) article is kept in the post office to which it is addressed for a period not exceeding one month.
- (A.) Postal authority (B.) Customs authority
(C.) Tax authority (D.) Booking office
- (50.) Yearly village returns will be taken during the first fourteen days of the month of in each year.
- (A.) January (B.) February (C.) March (D.) April
- (51.) Simplify
- (A.) 36 (B.) 38 (C.) 45 (D.) 54
- (52.) Simplify: $25^2 + 35^2 + 45^2 + 55^2$
- (A.) 6900 (B.) 9600 (C.) 5500 (D.) 7525
- (53.) Mr. X buys a pen for Rs 100 and sells it to Mr. Y for a profit of 25%. Mr. Y sells it at a loss of 20% to Mr. Z. What is the cost price of the pen for Mr. Z?
- (A.) 100 Rs (B.) 112.25 Rs (C.) 132.25 Rs (D.) 80 Rs
- (54.) In a queue there are X number of people. Mr Anand stands 15th in the queue from both front as well as from the back of the queue. What is the value of X?
- (A.) 28 (B.) 29 (C.) 30 (D.) 31
- (55.) The average weight of a group of 5 students in a class is 45 Kg. If 1 more student who has a weight of 75 Kg joins the group. What is the new average Weight of the group?
- (A.) 55 (B.) 50 (C.) 65 (D.) 60
- (56.) A sum of Rs. 12000 is lent out at 5% per annum simple interest for 5 years. What will be the amount after 5 years?
- (A.) Rs. 30000 (B.) Rs. 18000 (C.) Rs. 15000 (D.) Rs. 20000
- (57.) Arun can type 10 pages in 5 minutes. Aravind can type 5 pages in 10 minutes. Working together, how many pages can they type in 30 minutes?
- (A.) 75 (B.) 85 (C.) 80 (D.) 70
- (58.) Which among the following digits when divided by 7 leaves 0 as the remainder.
- (A.) 31026 (B.) 54147 (C.) 56421 (D.) 45682
- (59.) The Postman Mr X left the post office and walked 20 kilometers to the north. He then turned to his left and walked for another 15 minutes covering a distance of 15 kilometers. He then again turned to his left and walked for 20 minutes covering a distance of 20 kilometers. How far is Mr X from his Post office?
- (A.) 20 Km (B.) $20\sqrt{2}$ Km (C.) 15 Km (D.) $15\sqrt{2}$ Km
- (60.) Which among the following digits when divided by 3 leaves 0 as the remainder.
- (A.) 112233445 (B.) 987456311 (C.) 121231234 (D.) 123456789
- (61.) Which among the following is not a Himalayan river?
- (A.) Ganga (B.) Godavari
(C.) Brahmaputra (D.) Indus
- (62.) A landmass which is surrounded by water on three sides is known as?
- (A.) Island (B.) Gulf (C.) Plateau (D.) Peninsula



- (63.) Which among the following option is considered as the 'Three organs of the Government'
(A.) Legislature-Executive-Prime minister (B.) Legislature-Executive-President
(C.) Legislature-Judiciary-Executive (D.) Judiciary-Bureaucracy-Governor
- (64.) Which among the article of the constitution contain the "Right to Life and Personal Liberty"?
(A.) Article 21 (B.) Article 14 (C.) Article 19 (D.) Article 25
- (65.) The FIFA world cup Football 2022 is hosted by which among the following country?
(A.) Brazil (B.) Australia (C.) Germany (D.) Qatar
- (66.) Who among the following is the First Communication Minister of India?
(A.) Sardar Vallabhai Patel (B.) Bhimrao Ramji Ambedkar
(C.) Jawaharlal Nehru (D.) Rafi Ahmed Kidwai
- (67.) Which among the following is not a classical language?
(A.) Hindi (B.) Malayalam (C.) Tamil (D.) Sanskrit
- (68.) The Quit India movement started in the year
(A.) 1940 (B.) 1941 (C.) 1942 (D.) 1943
- (69.) Ethics is the science of
(A.) Beauty (B.) Mind (C.) Truth (D.) Conduct
- (70.) Which among the following is best describes 'ethics'
(A.) Always following the law.
(B.) Always doing what is good for oneself
(C.) Standards of what is and what can be good conduct
(D.) Always following societal Norms
- (71.) Mr X took a loan of Rs 2000 with simple interest for as many years as the rate of interest. If he paid Rs 500 as the interest at the end of the loan period. What was the rate of interest.
(A.) 10 (B.) 7.5 (C.) 5 (D.) 2.5
- (72.) Solve for x: $3x+70-2x=7x\div 10$
(A.) 9 (B.) 8 (C.) 7 (D.) 10
- (73.) Which among the following is the smallest prime number?
(A.) 0 (B.) 1 (C.) 2 (D.) 3
- (74.) The average of the first 10 whole numbers is....
(A.) 5 (B.) 5.5 (C.) 4 (D.) 4.5
- (75.) Which of the following fraction is largest?
(A.) $2\frac{1}{2}$ (B.) $3\frac{2}{3}$ (C.) $\frac{11}{4}$ (D.) $\frac{4}{11}$
- (76.) The Square root of 29241 is
(A.) 261 (B.) 271 (C.) 161 (D.) 171
- (77.) If 22% of x=30% of y, the y, x is equal to:
(A.) 15:11 (B.) 11:15 (C.) 17:16 (D.) 15:14
- (78.) A train of length 350m crosses a bridge of length 250m in 20 seconds. What is the Speed of the train (in km/h)?
(A.) 72 (B.) 95 (C.) 108 (D.) 88
- (79.) Rohan can complete a task in 12 days by working 10 hours a day. How many hours a day should he work to complete the task in 8 days.
(A.) 15 (B.) 12 (C.) 14 (D.) 16
- (80.) Simplify: (25% of 25+ 35% of 35 + 45% of 45+55% of 55)
(A.) 69 (B.) 96 (C.) 55 (D.) 75.25
- (81.) Find the letter cluster that can replace the question mark (?) in the given series. FRM, HSL, JTK, LUJ?



A Vision of Victory

www.vvacademy.com

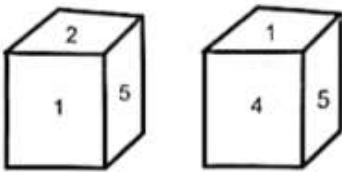
VV ACADEMY

➤ RPF ➤ RRB GROUP - D ➤ POSTAL ➤ SI/CONSTABLE

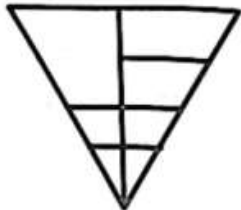


Address : Near Chuttugunta Signals, Eluru Road, VJA 2. Cell : 9985525552, 8977525552

- (A.) NVI (B.) MVJ (C.) NUK (D.) NTH
- (82.) Find the number that can replace the question mark (?) in the following series. 45, 48, 53, 60, 71, 84, 101?
- (A.) 120 (B.) 132 (C.) 116 (D.) 114
- (83.) In a certain code language 'SECTION' is written as 'PHZQLRK'. How will 'HOSTELS' be written in that language?
- (A.) FSPQHIQ (B.) ERPQHIP (C.) EQPSHIP (D.) ERPRGIP
- (84.) A cube is made by folding the given sheet. In the cube so formed, which letter would be on the face opposite to the one showing "S"?



- (A.) AA (B.) K (C.) L (D.) X
- (85.) How many Triangles are there in the given figure?



- (A.) 11 (B.) 12 (C.) 13 (D.) 14
- (86.) Two different positions of the same dice are shown. Find the number opposite to the face having 4.
- (A.) 6 (B.) 3 (C.) 2 (D.) 1
- (87.) In a day how many times does the Hour and minutes hand of a clock form a 180 degree straight line?
- (A.) 11 (B.) 12 (C.) 22 (D.) 24
- (88.) If the following changes are made in the signs and numbers. Which equations would be correct?

Interchanges:

Signs:- and ÷

Numbers: 5 and 15

- (A.) $4 \times 30 - 5 \div 15 + 14 = 21$ (B.) $4 \times 30 - 15 \div 5 + 12 = 27$
- (C.) $4 \times 30 - 15 \div 5 + 12 = 21$ (D.) $12 \times 30 - 15 \div 5 + 4 = 37$
- (89.) In a post office there are 100 staff. 70 of them like tea, 40 of them like coffee and 30 of them like both tea and coffee. How many of the staff like neither tea nor coffee?
- (A.) 10 (B.) 20 (C.) 30 (D.) 40
- (90.) Three of the following four words are a like in a certain way and one is different. Pick the odd word out.
- (A.) Bag (B.) Suitcase (C.) Purse (D.) Carpet
- (91.) Which two signs should be inter changed in the following equation to make it correct?
 $24 \div 2 + 13 - 74 \times 2 = 24$
- (A.) + and x (B.) - and x (C.) x and ÷ (D.) - and ÷
- (92.) Today is Sunday, after 69 days it will be
- (A.) Wednesday (B.) Tuesday (C.) Sunday (D.) Monday
- (93.) Look at this series: XXIV, XX, _____, XII, VIII, What number should fill the blank?
- (A.) XXII (B.) XIII (C.) XVI (D.) IV



(94.) Three of the following four words are alike in a certain way and one is different. Pick the odd word out.

- (A.) Photocopier
- (B.) Microwave
- (C.) Scanner
- (D.) Printer

(95.) In each question below are given two statements followed by two conclusions numbered 1 and 2. You have to take the given two statements to be true even if they seem to be at variance from commonly known facts. Read the conclusion and then decide which of the given conclusions logically follows from the two given statements, disregarding commonly known facts.

Give answer:

- a. If only conclusion 1 follows
- b. If only conclusion 2 follows
- c. If either 1 or 2 follows
- d. If neither 1 nor 2 follows

Statement: No bat is a ball. No ball is a wicket

Conclusions:

- 1.) No bat is a wicket
- 2.) All wickets are bats

Give answer:

- (A.) only conclusion 1 follows
- (B.) only conclusion 2 follows
- (C.) either 1 or 2 follows
- (D.) neither 1 nor 2 follows

(96.) Statement: All apples are red in color. No red colored things are cheap.

Conclusions:

- All apples are cheap
- Red colored apples are not cheap

Give answer:

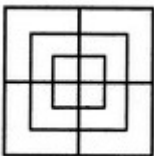
- (A.) one conclusion 1 follows
- (B.) only conclusion 2 follows
- (C.) either 1 or 2 follows
- (D.) neither 1 nor 2 follows

(97.) Select the combination of letters that when sequentially placed in the gaps of the given letter series will complete the series.

g _ km _ skm _ gkm _ skm g g k _ ps _ m

- (A.) gspgkm
- (B.) gpgpmk
- (C.) gpgskm
- (D.) gpgpkm

(98.) How many squares are there in the given figure?



- (A.) 12
- (B.) 13
- (C.) 14
- (D.) 15

(99.) How many triangles are there in the figure given below?



A Vision of Victory

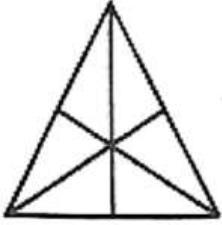
VV ACADEMY

➤ RPF ➤ RRB GROUP - D ➤ POSTAL ➤ SI/CONSTABLE

www.vvacademy.com



Address : Near Chuttugunta Signals, Eluru Road, VJA 2. Cell : 9985525552, 8977525552



- (A.) 16 (B.) 13 (C.) 9 (D.) 7

(100.) Choose the alternative which closely resembles the mirror image of the given combination.

MAGAZINE

- (1) MAGAZINE (2) ENIZAGAM
 (3) MAZAGINE (4) ENIZAGAM

- (A.) 4 (B.) 2 (C.) 3 (D.) 1

WEST BENGAL CIRCLE-PA/SA EXAM -2022

ANSWER

(1.)	B	(2.)	A	(3.)	B	(4.)	B	(5.)	A
(6.)	C	(7.)	A	(8.)	A	(9.)	B	(10.)	B
(11.)	B	(12.)	D	(13.)	D	(14.)	A	(15.)	B
(16.)	D	(17.)	D	(18.)	A	(19.)	C	(20.)	B
(21.)	C	(22.)	C	(23.)	C	(24.)	A	(25.)	B
(26.)	B	(27.)	D	(28.)	A	(29.)	B	(30.)	B
(31.)	A	(32.)	B	(33.)	A	(34.)	A	(35.)	D
(36.)	A	(37.)	A	(38.)	C	(39.)	B	(40.)	A
(41.)	A	(42.)	B	(43.)	A	(44.)	A	(45.)	D
(46.)	A	(47.)	A	(48.)	A	(49.)	B	(50.)	B
(51.)	C	(52.)	A	(53.)	A	(54.)	B	(55.)	B
(56.)	C	(57.)	A	(58.)	D	(59.)	C	(60.)	D
(61.)	B	(62.)	D	(63.)	C	(64.)	A	(65.)	D
(66.)	D	(67.)	A	(68.)	C	(69.)	D	(70.)	C
(71.)	C	(72.)	D	(73.)	C	(74.)	D	(75.)	B
(76.)	D	(77.)	B	(78.)	C	(79.)	A	(80.)	A
(81.)	A	(82.)	A	(83.)	B	(84.)	D	(85.)	C
(86.)	C	(87.)	C	(88.)	C	(89.)	B	(90.)	D
(91.)	C	(92.)	C	(93.)	C	(94.)	B	(95.)	D
(96.)	B	(97.)	B	(98.)	D	(99.)	A	(100.)	A