



- (14.) Which of the words given in option cannot be formed by using letters of the word - DEPARTMENT?
 (A.) ENTER (B.) TEMPER (C.) PERMIT (D.) RENTED
- (15.) A man is performing Yoga with his hand down and legs up, His face is towards the west. In which direction will his left hand be?
 (A.) North (B.) South (C.) East (D.) West
- (16.) McCamish application is developed by which IT based company?
 (A.) TCS (B.) Wipro (C.) Infosys (D.) SAP
- (17.) Which portal is used for CSI ID management including CSI ID password set/reset, role assignments to employees, ID enable/disable etc.?
 (A.) SAP (B.) POS (C.) IM (D.) PMA
- (18.) Data Centre of India Posts is located in -
 (A.) Delhi (B.) Mumbai (C.) Chennai (D.) Kolkata
- (19.) What is the meaning of PMA?
 (A.) Postman Mobile App (B.) Postmaster Mobile App
 (C.) Prime Minister App (D.) None of the above
- (20.) What is true in respect of ATMs of Post Office?
 (A.) Only POSB ATM cards are accepted (B.) Cards of all Banks are accepted
 (C.) ATMs in Post Offices are now closed (D.) None of the above
- (21.) In Post Office saving Bank schemes online banking
 (A.) Has been started (B.) Will be started next year
 (C.) There is no such proposal to start online banking (D.) It is not possible as of now
- (22.) DLC in Pension means
 (A.) Digital Life Certificate (B.) Direct lease connection
 (C.) Digital Leave Certificate (D.) DoLittle changes
- (23.) What is WAN in Internet?
 (A.) Wide American Network (B.) Wide Area Nomenclature
 (C.) Wide Area Network (D.) Without Area Network
- (24.) DARPAN is related to
 (A.) Branch Post Offices (B.) Head Post Offices
 (C.) Sub post Offices (D.) Mail offices
- (25.) Which services are available in IPPB mobile app?
 i.) NEFT ii.) RTGS iii.) IMPS iv.) Mobile recharge
 (A.) (i) and (ii) only (B.) (i), (ii) and (iii) only
 (C.) (i) and (iv) only (D.) All are available
- (26.) Directions (26-30): Anita, Mahima, Rajan, Lata and Deepti are five cousins. Anita is twice as old as Mahima. Rajan is half the age of Mahima. Anita is half the age of Deepti and Rajan is twice the age of Lata. Please answer following questions on the basis of above information.
 Who is the eldest?
 (A.) Deepti (B.) Lata
 (C.) Anita (D.) None of these
- (27.) Who is the youngest?
 (A.) Rajan (B.) Mahima
 (C.) Deepti (D.) None of these
- (28.) If Mahima is 16 years old, then what is the age of Lata?
 (A.) 14 years (B.) 7 years (C.) 5 years (D.) 4 years
- (29.) Anita is younger than



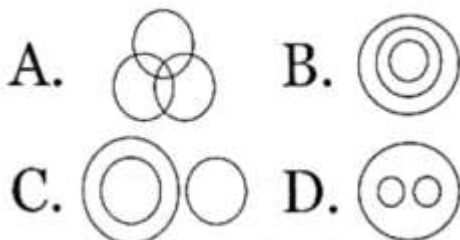
- (A.) Rajan (B.) Mahima
 (C.) Deepti (D.) None of these
- (30.) Which of the following pairs of persons are of the same age?
 (A.) Mahima and Lata (B.) Anita and Mahima
 (C.) Mahima and Rajan (D.) None of these
- (31.) Which of the following is not a feature of speed post service?
 (A.) Free pickup (B.) Delivery information on SMS
 (C.) Mandatory insurance (D.) Cash on delivery
- (32.) Which of the following is not prohibited to transmit through speed post?
 (A.) Any indecent or obscene printing, photograph, book or card
 (B.) Any explosive, inflammable, dangerous goods
 (C.) Any living creature
 (D.) Gold coins having value less than Rs. 20,000.00
- (33.) Choose correct alternative
 An account becomes silent when no transaction has been done in the last..... complete financial year
 (A.) 1 (one) (B.) 2 (two) (C.) 3 (three) (D.) 4 (four)
- (34.) What is the minimum amount that may be deposited in a year in 'Sukanya Samriddhi Yojna' account?
 (A.) Rs. 100 (B.) Rs. 250 (C.) Rs. 500 (D.) Rs. 1000
- (35.) What is not correct in respect of Postal Life Insurance?
 (A.) It is an oldest insurer India
 (B.) It is first scheme which covered females also in 1894
 (C.) Its premium can only be deposited either in cash or through pay recovery
 (D.) It covers employees of Central and State Government, defence personnel and professionals.
- (36.) AML in financial transaction is-
 (A.) Anti Money Laundering (B.) Anti Mobile Lobby
 (C.) Anti Money Lobby (D.) None of the above
- (37.) Aadhaar Enrollment and updation services are available in-
 (A.) Head Post Offices only
 (B.) Head Post Offices and Sub post offices only
 (C.) Head post offices, sub post offices and Branch post Offices (limited way)
 (D.) None of the above
- (38.) What is correct for printing of Commemorative Stamps?
 (A.) Printed in limited numbers only
 (B.) Can be re-printed after one year of first printing in unlimited numbers POS
 (C.) Can be re-printed after two years of first printing in unlimited numbers
 (D.) No limit on printing
- (39.) What is tagline of India Post Payment Bank?
 (A.) 'Har Ghar, Dak Ghar' (B.) 'Dak seva, Jan seva'
 (C.) 'Apka Bank, Apke Dwar' (D.) 'Khyal Aapka'
- (40.) Post Office Passport seva Kendras are run by postal Department in Post Offices in collaboration with which ministry?
 (A.) Finance (B.) Commerce
 (C.) Home affairs (D.) External Affairs
- (41.) Philatelic Bureaux are opened at some locations to sell which type of stamps?
 (A.) Commemorative stamps (B.) Definitive stamps



- (C.) Revenue stamps (D.) Rakhi envelopes
- (42.) Machine franked articles can be posted by
(A.) Dropping in any letter box
(B.) Dropping in letter box where it is assigned to do so
(C.) Dropping in hired post boxes
(D.) Handing over at assigned post office counter in denomination wise bundles.
- (43.) The manner to write proper postal address on a letter is defined in
(A.) P.O. Guide part I (B.) P.O. Guide part II
(C.) Postal Manual Vol. VII (D.) Postal Manual vol. VIII
- (44.) The letters written with C/o 56 APO are meant to be delivered to
(A.) Army and Air Force personnel (B.) Army, Air Force and Naval ships
(C.) Army, Air Force and Civilians (D.) Personnel on Naval ships only
- (45.) A registered article can be detained in post TA office on a written requested for how many days?
(A.) 3 days (B.) 5 days (C.) 7 days (D.) 15 days
- (46.) Returned Letter Office (RLO) handles
(A.) All refused articles (B.) Articles with incomplete or illegible addresses
(C.) High value parcels (D.) High value money orders
- (47.) Registration is compulsory for a parcel having weight of-
(A.) 1kg (B.) 2kg (C.) 3kg (D.) 4 kg
- (48.) Which is correct about duties of postman?
(A.) Deliver articles without obtaining dues on them
(B.) To deliver an article by extending his beat
(C.) Not bound to give change
(D.) All above are correct
- (49.) The Head Quarter of Andhra Pradesh Circle is situated in-
(A.) Hyderabad (B.) Vijayawada
(C.) Vishakhapatnam (D.) Amravati
- (50.) What is true in respect of Night Post Offices?
(A.) Work exclusively in night
(B.) Working hours are extended upto 08.30 pm and also works on Sundays
(C.) Also work on 2nd October, 26th January and 15th August
(D.) None of the above
- (51.) Full form of PMJJBY is
(A.) Pradhan Mantri Jan Jeevan Bima Yojna (B.) Pradhan Mantri Jeevan Jyoti Bima Yojna
(C.) Pradhan Mantri Jeevan Jagriti Bima Yojna (D.) Pradhan Mantri Jan Jagriti Bima Yojna
- (52.) To cover a distance of 315 km in 2.8 hours, what should be the average speed of the bus?
(A.) 31.25 m/s (B.) 62.50 m/s (C.) 56.25 m/s (D.) 332.50 m/s
- (53.) A train takes 50 minutes to cover a certain distance at a speed of 54 km/hour. If the speed is increased by 25%, then how long will it take to cover three fourth of the same distance?
(A.) 25 min (B.) 35 min (C.) 40 min (D.) 30 min
- (54.) The average weight of 21 employees was recorded as 64 kg. If the weight of chairman was added, the average weight increased by 1 kg. What was the weight of the chairman?
(A.) 86 kg (B.) 64 kg (C.) 72 kg (D.) 98kg
- (55.) What is 5% of 50% of 500?
(A.) 25 (B.) 12.5 (C.) 1.25 (D.) 6.25



- (56.) The simple interest on a certain sum for 8 months at 4% per annum is Rs. 129 less than the simple interest on the same sum for 15 months at 5% per annum. What is the sum?
 (A.) 2400 (B.) 3600 (C.) 2900 (D.) 2529
- (57.) Two lots of tomatoes with equal quantity, one costing Rs. 10 per kg and the other costing Rs. 15 per kg, are mixed together and whole lot is sold at Rs. 15 per kg. What is the profit/loss percentage?
 (A.) 20% loss (B.) 20% profit (C.) 10% profit (D.) 10% loss
- (58.) Two trains start moving at the same time towards each other at speed 107 km/hr and 116 km/hr respectively. If the trains meet in 13 hours, how apart were the trains when journey started?
 (A.) 2787 km (B.) 2676 km (C.) 2899 km (D.) 2921km
- (59.) An article is sold for Rs 300 at a profit of 20% had it been sold for Rs 235, the loss percentage would have been..
 (A.) 5% (B.) 3% (C.) 16% (D.) 6%
- (60.) Average of the marks of 132 students of a school is 40. If the average of the marks of the passed student is 42 and the average of the marks of the failed students is 20, then how many students passed the exam?
 (A.) 118 (B.) 120 (C.) 116 (D.) 122
- (61.) Vishal and Shirish walk in opposite directions at the rate of 3km/h respectively. How far will they be from each other after 2 hour?
 (A.) 8 km (B.) 2 km (C.) 6 km (D.) 10 km
- (62.) Choose correct alternative that will continue the same pattern and replace the question mark 1, 5, 13, 25, 41, ?
 (A.) 57 (B.) 51 (C.) 63 (D.) 61
- (63.) Choose correct alternative that will continue the same pattern and replace the question mark $11\frac{1}{9}$, $12\frac{1}{2}$, $14\frac{2}{7}$, $16\frac{2}{3}$, ?
 (A.) $8\frac{1}{3}$ (B.) $19\frac{1}{2}$ (C.) 20 (D.) $22\frac{1}{2}$
- (64.) Choose the correct alternative to establish same relationship between the pair of word as exists between "Disease; Pathology"
 Planet:
 (A.) Astrology (B.) Geology
 (C.) Astronomy (D.) Palaeontology
- (65.) If SYSTEM is coded as SYSMET and NEARER as AENRER, then FRACTION will be coded as:
 (A.) NOITFRAC (B.) FRACNOIT (C.) CARFNOIT (D.) CARFTION
- (66.) You go North, turn right, then right again and then go to the left. In which direction are you now from starting point?
 (A.) North (B.) South (C.) East (D.) West
- (67.) Following three words are related in some way. The relationship among the words in the question can best be represented by one of the four diagrams (A), (B), (C) and (D) given below, choose the correct answer-
 Indoor Games, Chess, Table Tennis



- (A.) A (B.) B (C.) C (D.) D



A Vision of Victory

V V ACADEMY

➤ RPF ➤ RRB GROUP - D ➤ POSTAL ➤ SI/CONSTABLE

Address : Near Chuttugunta Signals, Eluru Road, VJA 2. Cell : 9985525552, 8977525552

www.vvacademy.com



(68.) Directions (68-69): In each of the following questions, arrange the given words in a meaningful sequence and then choose the most appropriate sequence from amongst the alternative provided below each question-

1 Honey 2 Flower 3 Bee 4 Wax

- (A.) 2,1,4,3 (B.) 2,3,1,4 (C.) 1,3,4,2 (D.) 4,3,2,1

(69.) 1-Leaf 2 Fruit 3 Stem 4 Root 5Flower

- (A.) 4,3,1,2,5 (B.) 3,4,5,1,2 (C.) 4,1,3,5,2 (D.) 4,3,1,5,2

(70.) Which of the following collections of letters will look the same in mirror?


- (A.) OSMIHOM (B.) VHRTRVH (C.) HIMOSTA (D.) AOVIVOA

(71.) Choose the correct mirror figure of the given figure



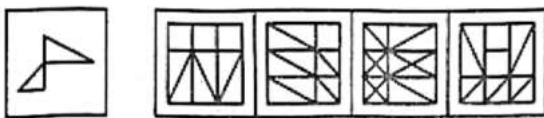
- (A.) A (B.) B (C.) C (D.) D

(72.) Choose the correct alternative which replace question mark in given figure to complete the pattern



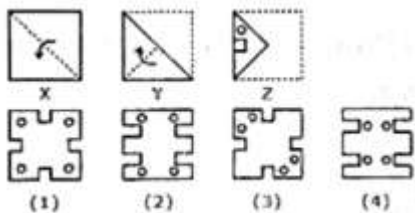
- (A.) A (B.) B (C.) C (D.) D

(73.) Which figure given in the alternatives embeds following image?



- (A.) A (B.) B (C.) C (D.) D

(74.) Given is a set of three figures marked X, Y and Z showing sequence of folding a piece of paper. Figure - Z shows the manner in which the folded paper has been cut. Choose the correct image in given alternatives which shows the unfolded form of paper



- (A.) 1 (B.) 2 (C.) 3 (D.) 4

(75.) 'Cardiology' is related to 'Heart' in the same way as 'Ophthalmology' is related to

- (A.) Soil (B.) Body (C.) Man (D.) Eyes

(76.) Who was Chairman of the Indian Constitution's Drafting Committee?

- (A.) Dr. B.R.Ambedkar (B.) Dr.Rajendra Prasad



- (77.) (C.) Maulana Abdul Kalam Azad (D.) C. Rajagopalachari
 "Har Ghar Tiranga Abhiyan" is related to which year?
 (A.) 1947 (B.) 1950 (C.) 2021 (D.) 2022
- (78.) Who is one of the candidate in Indian Vice Presidential election to be held in the year 2022?
 (A.) Mr.Subramanyam Swamy (B.) Mr.Jagdip Dhankad
 (C.) Mr. M.Venkaiahnaidu (D.) Mrs. JayaJaitley
- (79.) What is the full form of UPI?
 (A.) Uniform Payment Interface (B.) Unified Payment Interface
 (C.) Unique payment Interface (D.) Union payment Interface
- (80.) When "Quit India Movement" was started?
 (A.) August 1940 (B.) October 1940
 (C.) August 1942 (D.) October 1942
- (81.) Rihand Dam is located in which district of UP?
 (A.) Mirzapur (B.) Sonbhadra (C.) Yajurveda (D.) Atharveda
- (82.) Which is the oldest Veda?
 (A.) Rigveda (B.) Samveda (C.) Yajurveda (D.) Atharveda
- (83.) On which lake is the India's only floating post office located?
 (A.) Dal Lake (B.) Chilka Lake
 (C.) Loktak Lake (D.) Wular Lake
- (84.) Who appoints the Advocate General of the State?
 (A.) The president of India (B.) Chief Justice of High Court
 (C.) Governor of the state (D.) Chief Minister of the state
- (85.) In which state 'Bihu' festival is celebrated?
 (A.) West Bengal (B.) Maharashtra
 (C.) Tamil Nadu (D.) Assam
- (86.) Metal Token in RMS is a token given to the officials...
 (A.) Who perform duties in a Mail Van or platform
 (B.) To withdraw cash from a Head Post Office
 (C.) To withdraw cash from a nationalized bank
 (D.) To bear canteen expenses
- (87.) Diagram of a sorting case is approved by whom
 (A.) Assistant Superintendent of RMS (B.) Superintendent of RMS
 (C.) Set in-charge of RMS (D.) Staff working in Set
- (88.) What is the full form of HSA in RMS?
 (A.) High Service Assistant (B.) Head Saving Assistant
 (C.) Head Sorting Assistant (D.) High speed Arrangement
- (89.) Portfolio in RMS is related to
 (A.) A type of bag, having tools and materials to do the work (B.) Money investment in share market
 (C.) A type of software (D.) A type of vehicle
- (90.) National Sorting Hub and Intra Circle Hub was related to sorting of-
 (A.) Registered letters (B.) Speed posts
 (C.) Parcels (D.) Ordinary Letters
- (91.) $45\% \text{ of } 260 + 130\% \text{ of } 180 =$
 (A.) 341 (B.) 351 (C.) 531 (D.) 331
- (92.) What is the value of the following expression?
 (A.) 78 (B.) 2 (C.) 62 (D.) 18



- (93.) There are 1240 employees in an organization out of which, 25% are promoted. How many such employees are there who got promotion?
 (A.) 398 (B.) 345 (C.) 310 (D.) 372
- (94.) Vinod losses 20% of his money. After spending 25% of the remainder, he has Rs. 480 left. What is the amount of money he originally had?
 (A.) 600 (B.) 720 (C.) 800 (D.) 840
- (95.) Shivam buys a pen for Rs. 500 and sells it for Rs. 300. What is the loss percent in this deal?
 (A.) 600 (B.) 720 (C.) 800 (D.) 840
- (96.) Mahendra buys 5 tables and 9 chairs for Rs. 15400. He sells the tables at 10% profit and chairs at 20% profit. If his total profit on selling all the tables and chairs is Rs. 2080, what is the cost price of 3 chairs?
 (A.) 1890 (B.) 1740 (C.) 1800 (D.) 1860
- (97.) Manish deposits an amount of Rs. 65800 to obtain a simple interest at the rate of 14% per annum for 4 years. What total amount will Manish get at the end of 4 years?
 (A.) 102648 (B.) 115246 (C.) 125578 (D.) 110324
- (98.) Simple Interest for the sum of Rs. 1230 for 2 year is Rs. 10 more than the simple interest on Rs. 1130 for the same duration. What is the rate of interest?
 (A.) 5% (B.) 6% (C.) 8% (D.) 2%
- (99.) If 12 men can finish a work in 20 days, then the number of days required to complete the same work by 15 men is
 (A.) 19 (B.) 16 (C.) 13 (D.) 18
- (100.) Priyanka has done one third of a work in 30 days Manisha completes the of the work in 60 dyas. In how many days can they together do the work?
 (A.) 15 days (B.) 10 days (C.) 30 days (D.) 45 days

UTTAR PRADESH CIRCLE-PA/SA EXAM -2022

ANSWER

(1.)	D	(2.)	A	(3.)	A	(4.)	B	(5.)	B
(6.)	D	(7.)	D	(8.)	A	(9.)	B	(10.)	B
(11.)	A	(12.)	B	(13.)	D	(14.)	C	(15.)	A
(16.)	C	(17.)	C	(18.)	B	(19.)	A	(20.)	B
(21.)	A	(22.)	A	(23.)	C	(24.)	A	(25.)	D
(26.)	A	(27.)	D	(28.)	D	(29.)	C	(30.)	D
(31.)	C	(32.)	D	(33.)	C	(34.)	B	(35.)	C
(36.)	A	(37.)	C	(38.)	A	(39.)	C	(40.)	D
(41.)	A	(42.)	D	(43.)	A	(44.)	A	(45.)	C
(46.)	B	(47.)	D	(48.)	C	(49.)	B	(50.)	B
(51.)	B	(52.)	A	(53.)	D	(54.)	A	(55.)	B
(56.)	B	(57.)	B	(58.)	C	(59.)	D	(60.)	B
(61.)	D	(62.)	D	(63.)	C	(64.)	C	(65.)	C
(66.)	C	(67.)	D	(68.)	B	(69.)	D	(70.)	D
(71.)	C	(72.)	D	(73.)	C	(74.)		(75.)	D
(76.)	A	(77.)	D	(78.)	B	(79.)	B	(80.)	C
(81.)	B	(82.)	A	(83.)	A	(84.)	C	(85.)	D
(86.)	A	(87.)	B	(88.)	C	(89.)	A	(90.)	B
(91.)	B	(92.)	D	(93.)	C	(94.)	C	(95.)	B
(96.)	C	(97.)	A	(98.)	A	(99.)	B	(100.)	D