



RAJASTHAN CIRCLE-PA/SA EXAM -2022

- (1.) Which among the following is incorrect expansion?
 i.) SSO-Single Sign On
 ii.) DPMS-Delivery Postman Management System
 iii.) CBS-Core Banking Software
 iv.) RSI-Rural System Integrator
 (A.) Only (i) and (ii) (B.) Only (i), (ii) and (iv)
 (C.) Only (iii) (D.) Only (iv)
- (2.) The full form of 'DPMS' is:
 (A.) Delivery and Postman Management System (B.) Delivered Postal Mail Scheme
 (C.) Delay in Postal mail System (D.) Data of Postal Mail System
- (3.) What is meaning of 'IPVS'? (with reverence to CSI)
 (A.) India Post Visibility System (B.) IP Virtual Server
 (C.) India Post Vertical Scheme (D.) India Post Vehicle System
- (4.) What is toll free enquiry helpline number of India post?
 (A.) 1800-260-8686 (B.) 1800-450-6868
 (C.) 1800-266-6868 (D.) 1800-250-7676
- (5.) IT Modernization Project of Department of Posts has how many segments?
 (A.) 04 (B.) 06 (C.) 08 (D.) 10
- (6.) Postal Life Insurance (PLI) services are being provided through?
 (A.) Core System Integrator (CSI)
 (B.) Digital Advancement of Rural Post Office for A New India (DARPAN)
 (C.) Core Insurance Solution (CIS)
 (D.) All the above
- (7.) Which is incorrect option in connection with opening of account of Senior Citizens' Savings Scheme?
 (A.) The whole amount of deposit in a joint account shall be attributable to the first account holder only
 (B.) The successor or legal heir of a deceased serving personnel shall also be eligible to deposit the terminal benefits of such deceased personnel under this scheme.
 (C.) An individual may open an account in individual capacity, or jointly with spouse.
 (D.) Both the spouse can open single account and joint accounts with each other
- (8.) Which of the following statements are correct?
 The image proposed on a Customized My Stamp by the Institute/Organization shall not contain or imply or suggest any of the following:-
 (i.) Anything illegal, offensive, insulting or immoral
 (ii.) Anything dishonest, deceptive, or unpatriotic
 (iii.) Any religious or political content
 (A.) (i) and (ii) only (B.) (iii) only
 (C.) (ii) only (D.) (i), (ii) and (iii) only
- (9.) What is the periodicity of payment of Anticipated Endowment Assurance of 20 year policy?
 (A.) 6 years, 9 years, 12 years & 15 years (B.) 8 years, 12 years, 16 years & 20 years
 (C.) 4 years, 8 years, 12 years & 16 years (D.) 5 years, 10 years, 15 years & 20 years
- (10.) What is the fee for transfer of Monthly Income Scheme Account from one post office to another post office?
 (A.) Rs. 50+ GST (B.) Rs. 100+ GST
 (C.) Rs. 200 + GST (D.) Rs. 500+ GST



- (11.) What is the maximum weight of Book Pattern?
(A.) 1kg (B.) 2kg (C.) 5kg (D.) 10 kg
- (12.) What is the maximum weight of Blind Literature packets?
(A.) 10 kg (B.) 7 kg (C.) 5kg (D.) 2kg
- (13.) Which among the following is correct with regard to Business Parcel service?
(A.) Business Parcel is available throughout the country
(B.) Maximum weight of Business Parcel is 35 kg
(C.) Maximum length shall not exceed 150 centimeters in anyone dimensions or 300 centimeters for length and greatest circumference measured in a direction other than the length.
(D.) All the above are correct.
- (14.) Which among the following is the official twitter account of Department of Posts?
(A.) @India Post (B.) @India Post Office
(C.) @Post Office. IN (D.) India Post has no official twitter account
- (15.) Speed Post provides express and time-bound delivery of letters and parcels weighing up to _kg in India?
(A.) 10 kg (B.) 20 kg (C.) 30 kg (D.) 35 kg
- (16.) What is the Proof of Delivery charges per speed post article, if required, which is in addition to speed post charges?
(A.) Rs. 5 per article (B.) Rs. 10 per article
(C.) Rs. 20 per article (D.) Rs. 25 per article
- (17.) What is preservation period of Nominal Roll?
(A.) 1 year (B.) Permanent (C.) 3 years (D.) 10 years
- (18.) Who is the authority competent to extend the working hours of post offices and keep them open on Sundays also?
(A.) Secretary (Posts) (B.) Head of the Division
(C.) Head of the circle (D.) Director General (Posts)
- (19.) Whenever a voucher is wanting, a remark should be written by the subaccount assistant on the daily account and a note of the irregularity should also be made in
(A.) Order Book (B.) Treasurer
(C.) Error Book (D.) HO cash Book
- (20.) What is the minimum amount for opening Post Office Savings Account?
(A.) 50 (B.) 100 (C.) 200 (D.) 500
- (21.) Under Section 80 TTA of the Income Tax Act, from all savings Bank Accounts, interest up to earned in a Financial Year is exempted from taxable Income?
(A.) Rs 10000 (B.) Rs 150000 (C.) Rs 40000 (D.) Rs 50000
- (22.) The insurance seals used in a mail office must always remain in whose possession and who will be held answerable if any improper use is made of it?
(A.) Sorting Assistant (B.) Head Record Officer
(C.) Head Sorting Assistant (D.) Sub Record Officer
- (23.) The form M-42 for Transit Sections and M-43 for Mail Offices is used
(A.) To prepare error report (B.) To prepare mail abstract
(C.) To prepare report of missent bags (D.) To Prepare metal token stock
- (24.) Who among the following is/are authorized to order a Sorting Assistant to attend the Record Office for practice sorting during his rest-time?
(A.) Superintendent (B.) Inspector
(C.) Record Officer (D.) All the above



- (25.) How much test checks of credits and debits in each bill shall be checked by another senior and experience official in the office of account? (Related with foreign mails)
- (A.) 5% (B.) 10% (C.) 20% (D.) 25%
- (26.) If the detention to mails due to breaches or accidents is likely to exceed hours, it should be reported at once to the superintendent and the Record Office.
- (A.) 3 hours (B.) 6 hours (C.) 9 hours (D.) 12 hours
- (27.) Any parcel found in a letter box will be treated and charged as a
- (A.) Ordinary parcel (B.) Ordinary letter
(C.) Registered Parcel (D.) Registered letter
- (28.) Which cannot be used for payment of postage charges?
- (A.) Postage Stamp (B.) Cash
(C.) Revenue Stamp (D.) Franking Impression
- (29.) Which can be delivered through post box /post bags..?
- (A.) Fully prepaid unregistered articles (B.) Insufficient paid unregd. articles
(C.) Taxed articles (D.) None of the above
- (30.) Which of the following is first class mail?
- (A.) Blind Literature (B.) Registered Newspaper
(C.) Post card (D.) All of the above
- (31.) In which Post Offices articles can be insured?
- (A.) Branch Post Offices (B.) Sub Post Offices
(C.) Head Post Offices (D.) All Post Offices
- (32.) In which case(s) registration is compulsory?
- (A.) Any parcel exceeding 4 kg (B.) Any insured article
(C.) Any VP article (D.) All the above
- (33.) What is the maximum weight limit of a letter?
- (A.) 2kg (B.) 5 kg (C.) 10 kg (D.) 15kg
- (34.) Suggestion and complaints book is available at
- (A.) Head Post Offices only (B.) Branch Post Offices only
(C.) All Post Offices (D.) Sub post offices
- (35.) A parcel weighing above.....kilograms in weight will be delivered only at the post office window?
- (A.) 20 kg (B.) 10 kg (C.) 5 kg (D.) 2 kg
- (36.) Addressee of an article is not bound to pay the amount due on it to the Post Office if he does not want to take delivery of it. In such a case, what remark will be written by the Postman across the cover?
- (A.) Unclaimed (B.) Refused (C.) Not Known (D.) Not willing
- (37.) Categories of Foreign postal articles are:
- (A.) Letter post & Parcel post (B.) Airmail & Sea mail
(C.) Registration post & Insured post (D.) Ordinary mail and special mail
- (38.) The fees for the special services of Registration, acknowledgements (Advice of Delivery), Insurance Fee etc. are
- (A.) Divided in nine zones (B.) Reviewed by UPU every six month
(C.) Based on distance of destination country (D.) Uniform for all destinations
- (39.) In the foreign post the term "Letter Post applies to the following classes of Postal Articles:
- (A.) Printed papers (B.) Post cards
(C.) Registered News Papers (D.) All of the above
- (40.) Mark incorrect option related to Postcard:
- (A.) Should not be folded, cut or altered and should be sent unenclosed



- (B.) Breach of the conditions may be treated as letter and postage will be taxed accordingly.
(C.) Unpaid and insufficiently paid postcards are forwarded taxed with double the deficiency.
(D.) The amount is recovered from sender after the delivery.
- (41.) India Joined the AOPU (APPU) in the year
(A.) 1970 (B.) 1973 (C.) 1978 (D.) 1975
- (42.) Which of the following foreign article is not eligible for re-direction in India by air?
(A.) Letters (B.) Small packets
(C.) Aerogrammes (D.) Postcards
- (43.) A pack containing which of the following items should be labeled green?
(A.) Fragile Objects (B.) Live Bees
(C.) Medicines (D.) Fatty substances that don't liquefy
- (44.) Which of the following indication is permitted on contents of a small packet in foreign post?
(A.) Registration numbers of goods (B.) Trade marks
(C.) Address of sender (D.) All of the above
- (45.) Complaints about the assessment of customs duty are dealt with only by
(A.) The postal authorities (B.) The customs authorities
(C.) The foreign exchange (D.) The department of external affairs
- (46.) The minimum weight of a bag in Bulk Bag (M Bag) System is
(A.) 2kg (B.) 3kg (C.) 4 kg (D.) 5kg
- (47.) DARPAN refers to:
(A.) Digital Advancement of Rural Post for a New India
(B.) Digital Advancement of Rural Post Office for a New India
(C.) Digital Achievement of Rural Post Office for a New India
(D.) Digital Awareness of Rural Post for a New India
- (48.) What is the name of the project that aimed at the supply of required equipment like smart phones to postmen staff of Post Offices?
(A.) Project Arrow
(B.) Mail Network Optimization Project (MNOP)
(C.) Mail Operations Hardware (MOH)
(D.) Parcel Network Optimization Project (PNOP)
- (49.) The NSP in (NI category) IT Modernization project the word "P" stands for
(A.) Postal (B.) Ping (C.) Process (D.) Provider
- (50.) At present who is the vendor for cash Management and Cash Loading in Post office ATMs?
(A.) TCS (B.) AGS (C.) Infosys (D.) Ricoh
- (51.) A man on tour travels first 160 km at 64 km/h and the next 160 km at 80 km/h. The average speed for the first 320 km of the tour is:
(A.) 35.55 km/h (B.) 36 km/h (C.) 71.11 km/h (D.) 71 km/h
- (52.) If seven persons can build a house in 30 days, how long will it take three persons to build the same house, provided that they all work at the same rate?
(A.) 100 days (B.) 70 days (C.) 30 days (D.) 210 days
- (53.) A distance of I centimeter on a map represents 100 kilometers on the ground. If two cities are 3400 km apart on the ground, then their distance on the map will be?
(A.) 34centimetres (B.) 32centimetres
(C.) 16 and half centimeters (D.) 30 and a half centimeters
- (54.) A person sold a radio at a loss of 5% Had he sold it for Rs. 210 more, he would have gained 25% For what value should he sell it in order to gain 35%?



A Vision of Victory

www.vvacademy.com

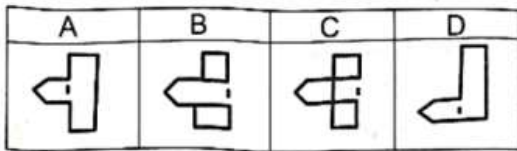
VV ACADEMY

➤ RPF ➤ RRB GROUP - D ➤ POSTAL ➤ SI/CONSTABLE

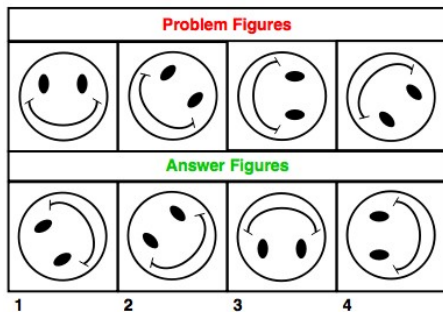


Address : Near Chuttugunta Signals, Eluru Road, VJA 2. Cell : 9985525552, 8977525552

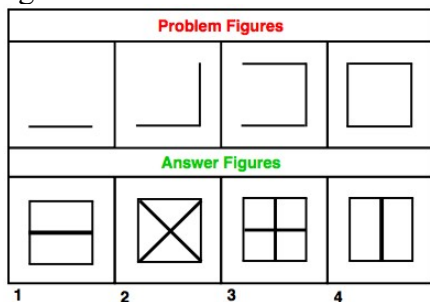
- (55.) (A.) 645 (B.) 954 (C.) 654 (D.) 945
 23% of 8040 + 42% of 545 = ?% of 3000
- (56.) (A.) 56.17 (B.) 63.54 (C.) 71.04 (D.) 69.27
 $\frac{1}{10} - \left[2\frac{1}{2} - \left\{ \frac{5}{6} - \left(\frac{2}{5} + \frac{3}{10} - \frac{4}{15} \right) \right\} \right]$
- (57.) (A.) 4 (B.) 6 (C.) 2 (D.) 8
 In the following question, which pattern will the given sheet resemble when it is folded at the dotted line? (Sheet is transparent)



- (58.) (A.) D (B.) A (C.) B (D.) C
 The following question consists of some problem figures followed by other figures marked 1,2,3,4 called the answer figures. Find out the correct answer figure that should come next in the sequence of problem figures.



- (59.) (A.) 1 (B.) 2 (C.) 3 (D.) 4
 The following question consists of some problem figures followed by other figures marked 1,2,3,4 called the answer figures, find out the correct answer figure that should come next in the sequence of problem figures.



- (60.) (A.) 1 (B.) 2 (C.) 3 (D.) 4
 The following question consists of some problem figures followed by other figures marked 1,2,3,4 called the answer figures. Find out the correct answer figure that should come next in the sequence of problem figures.



A Vision of Victory

www.vvacademy.com

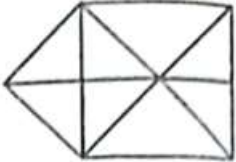
VV ACADEMY

➤ RPF ➤ RRB GROUP - D ➤ POSTAL ➤ SI/CONSTABLE

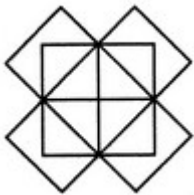


Address : Near Chuttugunta Signals, Eluru Road, VJA 2. Cell : 9985525552, 8977525552

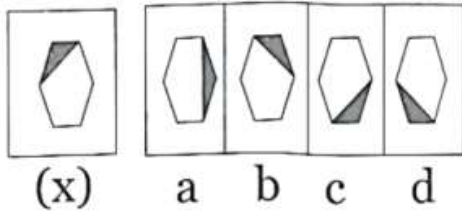
- (64.) How many triangles are in the sketch?
- (A.) 1 (B.) 2 (C.) 3 (D.) 4



- (65.) How many rectangles does the following figure have?
- (A.) 18 (B.) 17 (C.) 16 (D.) 15



- (66.) In the following question, choose the correct mirror - image of the figure (X) from among the four alternatives (a), (b), (c) and (d) given along with it.



- (67.) Doctor is related to Patient in the same way Lawyer is related to
- (A.) Customer (B.) Accused (C.) Magistrate (D.) Client

- (68.) Moon is related to Satellite in the same way Earth is related to
- (A.) Sun (B.) Planet
(C.) Solar System (D.) Asteroid

- (69.) In the following question, four words are given, out of which three are alike in some manner and one is different. Choose the odd one out.

(A.) Arrow (B.) Missile (C.) Sword (D.) Bullet

- (70.) In the following question, a number series is given with one term missing. Choose the correct alternative that will continue the same pattern and fill in the blank space.

2, 6, 11, 17, (), 32

(A.) 22 (B.) 23 (C.) 24 (D.) 28

- (71.) In the following question, a number series is given with one term missing. Choose the correct alternative that will continue the same pattern and fill in the blank space. 1, 8, 27, 64, 125, 216, ()

(A.) 354 (B.) 343 (C.) 392 (D.) 245

- (72.) If PLANE is coded as OKZMD in a certain language, how will TRAIN be coded?

(A.) SQZHM (B.) UQBHO (C.) SQZJM (D.) USBJM

- (73.) Pointing to a photograph, a man tells his friend, 'She is the daughter of the only son of my father's wife'. How is the girl in the photograph related to the man?

(A.) Daughter (B.) Niece (C.) Mother (D.) Sister

- (74.) Kishore walks 10 km towards north. Then he walked 6 km towards south. Then he walks 3 km towards east. How far and in which direction is he with reference to his starting point?



- (A.) 7 km east (B.) 5 km west
 (C.) 5 km north east (D.) 7 km west
- (75.) How many 7s immediately preceded by 6 but not immediately followed by 4 are there in the following series?
 74276436753578437672406743
 (A.) 1 (B.) 2 (C.) 4 (D.) 6
- (76.) You are returning from school, On the way, you find a sealed envelope in a street, fully addressed with unused stamps on it. You would:
 (A.) Leave it there as it was and walk away.
 (B.) Remove the stamps and destroy the envelope.
 (C.) Open the envelope, find out who has dropped it by mistake, and send it to him if possible.
 (D.) Post it at the nearest letter box.
- (77.) Who gave the title of "Sardar" to Ballabh Bhai Patel ?
 (A.) Mahatma Gandhi (B.) Vinoba Bhave
 (C.) Women of Bardoli (D.) Peasants of Gujrat
- (78.) Raja Ram Mohan Roy was the founder of:
 (A.) Brahma Samaj (B.) Prathan Samaj
 (C.) Ram Krishna Mission (D.) Arya Samaj
- (79.) Which one of the following is not correctly matched?
 (A.) Darjeeling-West Bengal (B.) Mount Abu-Rajasthan
 (C.) Kodaikanal - Tamil Nadu (D.) Shimla-Uttar Pradesh
- (80.) Limestone is a raw material used by which industry?
 (A.) Aluminium (B.) Fertilizers
 (C.) Cement (D.) Petrochemicals
- (81.) The Judges of the Supreme Court retire at the age of:
 (A.) 60 years (B.) 65 years (C.) 62 years (D.) 58 years
- (82.) How many members can be nominated to both the Houses of the Parliament by the Houses of the Parliament by the President?
 (A.) 14 (B.) 16 (C.) 10 (D.) 12
- (83.) Neeraj Chopra is related to which sport?
 (A.) Discusthrow (B.) Javelinthrow
 (C.) Shot put (D.) Hammerthrow
- (84.) Human Development index is formulated by:
 (A.) ASEAN (B.) IBRD (C.) UNDP (D.) UNCTAD
- (85.) A, while filling up the insurance application form, states his age as 25 believing it to be true. His actual age was 27. The Life Insurance Corporation issued a policy in his favour charging a lower premium than what it should have charged if the actual age had been given. This is a case of
 (A.) Fraud (B.) Misrepresentation
 (C.) Undue influence (D.) Mistake of fact
- (86.) A cheque is always payable on:
 (A.) The date mentioned therein (B.) Demand
 (C.) 3 days after presentation (D.) Within 24 hrs of presentation
- (87.) The value of $14 \div ((5 \text{ of } 2-3) \times 4 (7-2))$ is:
 (A.) 40 (B.) 10 (C.) 1/10 (D.) 14/19
- (88.) $36.934 - 48 + 17.449 = ?$
 (A.) 6.833 (B.) 8.633



- (89.) (C.) 6.283 (D.) None of these
40% of? =240
(A.) 60 (B.) 6000 (C.) 960 (D.) 600
- (90.) If the price of a book is first decreased by 25% and then increased by 20%, then the net change in the price will be:
(A.) No change (B.) 5% increase
(C.) 5% decrease (D.) 10% decrease
- (91.) A person bought an article for Rs. 240. For how much should he sell it so as to lose 20%?
(A.) 120 (B.) 180 (C.) 240 (D.) 192
- (92.) A man buys a cycle for Rs. 1400 and sells it at a loss of 15%. What is the selling price of the cycle?
(A.) 1090 (B.) 1160 (C.) 1190 (D.) 1202
- (93.) Kabir paid Rs. 9600 as interest on a loan he took 5 years ago at 16% rate of simple interest. What was the amount he took as taken?
(A.) 16400 (B.) 12000 (C.) 12500 (D.) 18000
- (94.) At what rate percent on simple interest will Rs. 750 amount to Rs. 900 in 5 years?
(A.) 5% (B.) 3 1/2% (C.) 4% (D.) 5 1/2%
- (95.) Rs. 8000 amounts to Rs. 9200 in 3 years at simple interest. If the interest rate is increased by 3%, to how much would it amount?
(A.) 9400 (B.) 9600 (C.) 9720 (D.) 9920
- (96.) The average age of a group of 15 students is 10 years. When 5 more students joined the group, the average got increased by 1 year. The average age of the new students is:
(A.) 18 year (B.) 16 year (C.) 14 year (D.) 12 year
- (97.) The average of first 46 natural number is:
(A.) 23 (B.) 23.5 (C.) 24 (D.) 25
- (98.) Ram, Rajan & Ranjan can do a certain work in 6, 12 & 24 days respectively. In what time will they altogether do it?
(A.) 6/7 days (B.) 12/7 days (C.) 24/7 days (D.) 48/7 days
- (99.) P & Q working together can complete a certain work in 6 days. Q alone can do it in 8 days. In how many days P alone could finish the same work?
(A.) 12 days (B.) 16 days (C.) 18 days (D.) 24 days
- (100.) How many km/h does a man walk who passes through a street 600 m long in 5 minutes?
(A.) 9/5 km/h (B.) 18/5km/h (C.) 27/5km/h (D.) 36/5km/h



RAJASTHAN CIRCLE-PA/SA EXAM -2022

ANSWER

(1.)	B	(2.)	A	(3.)	A	(4.)	C	(5.)	C
(6.)	D	(7.)	B	(8.)	D	(9.)	B	(10.)	B
(11.)	C	(12.)	B	(13.)	D	(14.)	B	(15.)	D
(16.)	B	(17.)	B	(18.)	D	(19.)	C	(20.)	D
(21.)	A	(22.)	C	(23.)	B	(24.)	D	(25.)	C
(26.)	B	(27.)	C	(28.)	C	(29.)	A	(30.)	C
(31.)	D	(32.)	D	(33.)	A	(34.)	C	(35.)	B
(36.)	B	(37.)	A	(38.)	D	(39.)	D	(40.)	D
(41.)	B	(42.)	B	(43.)	C	(44.)	D	(45.)	B
(46.)	D	(47.)	B	(48.)	C	(49.)	D	(50.)	B
(51.)	C	(52.)	B	(53.)	A	(54.)	D	(55.)	D
(56.)	C	(57.)	D	(58.)	C	(59.)	A	(60.)	A
(61.)	A	(62.)	C	(63.)	D	(64.)	B	(65.)	D
(66.)	B	(67.)	D	(68.)	B	(69.)	C	(70.)	C
(71.)	B	(72.)	A	(73.)	A	(74.)	C	(75.)	B
(76.)	D	(77.)	A	(78.)	A	(79.)	D	(80.)	C
(81.)	B	(82.)	D	(83.)	B	(84.)	C	(85.)	B
(86.)	B	(87.)	A	(88.)	D	(89.)	D	(90.)	D
(91.)	D	(92.)	C	(93.)	B	(94.)	C	(95.)	D
(96.)	C	(97.)	B	(98.)	C	(99.)	D	(100.)	D