



ODISHA CIRCLE-PA/SA EXAM -2022

- (1.) Which of the following city is the Headquarter of Haryana Circle?
(A.) Ambala
(C.) Kurukhetra
- (2.) So far as the public is concerned, there is no difference in the character of service rendered by:
(A.) SO and HO
(C.) BO and HO
(B.) SO and BO
(D.) BO, SO and HO
- (3.) According to clause 8 of PO Guide Part-I, which of the following is not observed as Post Office holidays?
(A.) Independence Day
(C.) Mahavir Jayanti
(B.) BuddhaPurnima
(D.) Christmas Eve
- (4.) At which Philately Bureau, overseas orders are executed?
(A.) Bangalore GPO
(C.) Bombay GPO
(B.) New Delhi GPO
(D.) Cuttack GPO
- (5.) According to PO Guide Part-I, which of the following is correct:
(A.) Entries in the Franking Machine ledger should be checked once in a month
(B.) The franked articles bearing previous dates will not be treated as un-paid article
(C.) Machine franked articles can be posted at more than two offices specified by SPO in the licence
(D.) Machine Franked articles posted in letter boxes shall not be treated as unpaid articles
- (6.) The Version 2 models of RMFS machines were approved to which of the following Original Equipment Manufacturers (OEMs)?
(A.) M/s. Neo Post India Pvt. Ltd.
(C.) M/s Frama Systems India Pvt. Ltd.
(B.) M/s Pitney Bowes India pvt. Ltd
(D.) All of the above
- (7.) The facility of pre-payment of postage in cash is available at selected Gazetted and HSG Post offices to firms or business establishment who posts not less than
(A.) 100 articles at a time
(C.) 500 articles at a time
(B.) 200 articles at a time
(D.) 1000 articles at a time
- (8.) An article insured for any sum not exceeding Rs. ___ will be delivered in the ordinary manner.
(A.) 1000
(B.) 200
(C.) 100
(D.) 500
- (9.) According to PO Guide Part-I, which of the following is incorrect:
(A.) Articles on which customs duty to be recovered is in excess of Rs. 50 are ordinarily delivered at the post office window.
(B.) The payment of a money order will ordinarily be made at the address of the payee on signing the money order and acknowledgement.
(C.) Small packets received from foreign countries are charged on delivery, a delivery fee at prescribed rate.
(D.) None of the above
- (10.) Which of the following superscription fall under the head "Poste Restante"?
(A.) To be kept till called for
(C.) Articles addressed "Post Office"
(B.) To await arrival
(D.) All of the above
- (11.) According to PO Guide Part-II, which of the following is incorrect?
(A.) Postal articles exchanged in foreign post are broadly divided into two categories
(B.) Exchange of money orders, postal orders and cash on delivery items are governed by bilateral agreements.
(C.) Freedom of delivery is guaranteed throughout the territory of the Universal Postal Union
(D.) None of the above



- (12.) India joined the APPU in:
(A.) 1961 (B.) 1971 (C.) 1973 (D.) 1981
- (13.) Which of the following is not a member of the APPU?
(A.) Australia (B.) Russia (C.) Japan (D.) Thailand
- (14.) In the foreign post the term "Letter Post" applies to which of the following postal articles:
(A.) Letters (B.) Post Cards
(C.) Aerogramme (D.) All of the above
- (15.) In connection with foreign post, articles addressed Post Restante except VP are detained in the office of delivery for a period not exceeding:
(A.) 7 days (B.) 15 days (C.) 1 month (D.) 3 month
- (16.) According to PO Guide Part-II, which of the following is correct:
(A.) Undeliverable correspondence is returned to the country of origin and delivered to the sender on payment of charges due, if any.
(B.) Postcards which do not bear the address of the sender are not returned
(C.) Both A & B
(D.) None of the above
- (17.) The green customs label (C-1) is intended for articles valued less than Rs. _____ and is to be pasted on the article.
(A.) Rs. 3000 (B.) Rs. 3400 (C.) Rs. 3500 (D.) Rs. 5000
- (18.) In foreign letter post items, a letter should have a surface measuring not less than:
(A.) 90x140mm (tolerance 1 mm) (B.) 90x140 mm (tolerance 2 mm)
(C.) 120x235 mm (tolerance 1 mm) (D.) 120x235 mm (tolerance 2 mm)
- (19.) The reply paid postcard service is not available in the foreign post except for which inland rates apply.
(A.) Bhutan, Pakistan and Nepal (B.) Bangladesh, Sri Lanka and Nepal
(C.) Bhutan and Bangladesh (D.) Bhutan, Bangladesh and Nepal
- (20.) In foreign post, printed papers containing only books and pamphlets may be sent up to:
(A.) 10 kg (B.) 5kg (C.) 3kg (D.) 1kg
- (21.) The term 'WAN' in IT modernization project of Department of Posts refers to:
(A.) Wide Area Network (B.) World Area Network
(C.) Wide Area Node (D.) Wide Average Network
- (22.) The term 'Rict' in IT modernization project of Department of Posts refers to:
(A.) Rural information and communication Technique
(B.) Regional Information and Communication Technology
(C.) Rural India Communication Technology
(D.) Rural Information and Communication Technology
- (23.) The letter 'O' in the term 'MOH' in connection with IT modernization project refers to:
(A.) Office (B.) Operation
(C.) Of (D.) Organization
- (24.) The letter 'N' in the term 'MNOP' in connection with IT modernization project refers to:
(A.) Number (B.) Network (C.) National (D.) Node
- (25.) Through how many different segments, IT modernization project is being implemented?
(A.) 04 (B.) 08 (C.) 10 (D.) 12
- (26.) With reference to MNOP, what KPI represents?
(A.) Key Performance Indicator (B.) Key Postal service



- (C.) Key Performance Incentive (D.) Key Project Indicator
- (27.) Full form of 'ERP'
 (A.) Enterprise Resource Planning (B.) Excellent Resource Processing
 (C.) Enterprise Resource Processing (D.) Enterprise Reserve Process
- (28.) The letter 'U' in the term 'UIDAI' refers to:
 (A.) Unique (B.) Up (C.) Upkeep (D.) User
- (29.) The letter 'S' in the term 'ECMS' refers to:
 (A.) Server (B.) System (C.) SAP (D.) Save
- (30.) The letter 'D' in the term 'DPMS' refers to:
 (A.) Delivery (B.) Day (C.) Dual (D.) Double
- (31.) What is the registration fee of registered newspaper?
 (A.) Nil (B.) Rs. 17 (C.) Rs. 50 (D.) Rs. 100
- (32.) The weight of an unregistered parcel should not exceed :
 (A.) 2kg (B.) 3kg (C.) 4 kg (D.) 5kg
- (33.) In connection with Post Office savings Account (SB), which of the following is not correct?
 (A.) Only one account can be opened by an individual as single account
 (B.) Conversion of single to Joint account or BD vice versa is not allowed
 (C.) Nomination is not mandatory at the time of opening, of account
 (D.) Minors above 10 years can open account in his own name
- (34.) The interest on SSA account shall be calculated for the calendar month on the lowest balance in the account between the close of the
 (A.) 10th day and the end of the month (B.) 05th day and the end of the month
 (C.) 10th day and 15th of the month (D.) 05th day and 15th of the month
- (35.) What is the minimum amount for opening TD account?
 (A.) Rs. 100/- (B.) Rs. 200/- (C.) Rs.500/- (D.) Rs.1000/-
- (36.) What is the minimum and maximum age at entry of spouses in Joint Life Assurance (Yugal Suraksha)?
 (A.) 18-45 years (B.) 21-55 years (C.) 21-45 years (D.) 18-50 years
- (37.) What is the last declared bonus of PLI whole Life Assurance (Suraksha) per Rs. 1000.00 sum assured per year?
 (A.) Rs.72/- (B.) Rs. 74/- (C.) Rs. 76/- (D.) Rs. 78/-
- (38.) Rural Postal Life Insurance was introduced in for rural people of India.
 (A.) 24.03.1991 (B.) 24.03.1993 (C.) 24.03.1995 (D.) 01.02.1884
- (39.) Deen Dayal SPARSH Yojana is a scholarship scheme to award children in the class category of standard VI to IX what is the full form of 'SPARSH'?
 (A.) Scholarship for Promotion of Aptitude & Research in stamps as a Hobby
 (B.) Scholarship for Practice, Aptitude & Research in stamps as a Hobby
 (C.) Scholarship for practice, Aptitude & Research in Stamps as a Hobby
 (D.) Students Promotion of Aptitude & Research in stamps as a Hobby
- (40.) Which service provides complete mailing solution right from mail preparation to mail delivery?
 (A.) Business Post (B.) Direct Post
 (C.) Bill Mail (D.) Logistic Post
- (41.) Which of the following is automated in Finacle?
 (A.) Cheque book issuance fee (B.) Cheque dishonour fee
 (C.) Both A & B (D.) Neither A nor B



- (42.) According to SB Order No. 03/2021, no BPM shall accept cash transaction for more than in an account in a day
(A.) Rs. 20000/- (B.) Rs. 25000/-
(C.) Rs. 50000/- (D.) Rs. 100000/-
- (43.) Form Ms-11 is:
(A.) Memorandum of Distribution of work (B.) Nominal Roll
(C.) Attendance Register (D.) Village Sorting List
- (44.) Which rule of Postal Manual Volume - VI (Part- III) states "Supervision of subordinate offices by Postmaster"?
(A.) Rule-1 (B.) Rule-2 (C.) Rule-3 (D.) Rule-4
- (45.) Who is personally responsible for correctness of S.O account?
(A.) Sub Postmaster (B.) Postal Assistant
(C.) Treasurer (D.) Accountant
- (46.) For the purpose of distribution of work and responsibility, each set of a sorting mail office is divided into departments.
(A.) 2 (B.) 3 (C.) 4 (D.) 5
- (47.) Which of the following contains records of the system Administrator/Supervisor and RS as working in the CRC?
(A.) Set Master (B.) Staff Profile
(C.) Service Master (D.) Mail Agency Master
- (48.) Memorandum of Distribution of work is issued by superintendent when more than official work in an office or section
(A.) 1 (B.) 2 (C.) 5 (D.) 10
- (49.) In Foreign post, complaints received from a member of public after a period of counting from the day following the date of posting, need not be entertained.
(A.) 03 months (B.) 06 months (C.) 1 year (D.) 2 year
- (50.) The post office which exchange mails with foreign countries is known as:
(A.) Sub-Foreign post Office (B.) Office of Exchange
(C.) Office of exchange of transit (D.) None of the above
- (51.) Which is the best planned city in India?
(A.) Coimbatore (B.) New Delhi (C.) Chandigarh (D.) Salem
- (52.) South-west monsoon reaches Assam in:
(A.) End of September (B.) Mid-October
(C.) November (D.) Mid-September
- (53.) Which part of the Indian Constitution deals with Fundamental Rights?
(A.) Part I (B.) Part II (C.) Part III (D.) Part IV
- (54.) The President of India is elected by the numbers of an electoral college which does not include:
(A.) The elected members of the Rajya Sabha
(B.) The elected members of the Lok Sabha
(C.) The elected members of the State Assemblies
(D.) The elected members of the state Legislative Councils
- (55.) Which of the following teams is the winner of Ranji Trophy 2022?
(A.) Mumbai (B.) Saurashtra
(C.) Bengal (D.) Madhya Pradesh
- (56.) Krishna Nagar is associated with which sports?
(A.) High Jump (B.) Boxing (C.) Shooting (D.) Badminton



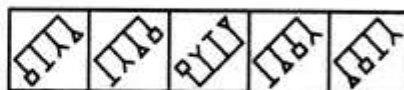
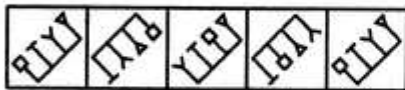
- (57.) What are the colours of Lord Jagannath's Chariot (Nandighosh)?
 (A.) Green and Red (B.) Yellow and Black
 (C.) Red and Yellow (D.) Red and Black
- (58.) 'Madhubani', a style of folk paintings, is EB popular in which state?
 (A.) Bihar (B.) Rajasthan
 (C.) Odisha (D.) Uttar Pradesh
- (59.) You are working as PA in a double handed SO. On that day, the regular SPM is on CL on office arrangement. You received an email from Division Office for immediate reply at the closing hour. What will you do?
 (A.) Mark the email as unread and remain silent
 (B.) Intimate the fact to the regular SPM for necessary action on tomorrow.
 (C.) Delete the email and get prepared to reply DO as mail not received
 (D.) Attend the email and try to send the reply as per records available
- (60.) On the first day of joining, at a new office, due to traffic jam Shyaam reached 20 mm late by public transport. His boss welcomed him and said nothing about late coming. What will Shyaam do from next day?
 (A.) He will purchase personal vehicle to come office
 (B.) He will start early to avoid traffic rush and reach office timely
 (C.) He will come as usual late to office till the warning of his boss
 (D.) He will request for transfer to nearer office
- (61.) Find the value of $63 - (-3) - (-2 - 8 - 4)$
 (A.) 21 (B.) 63 (C.) 105 (D.) 102
- (62.) Find the value of $56 \div \left[\frac{1}{3} \{ 15 + 12 - (9 + 6 - \overline{5 + 7}) \} \right]$
 (A.) 12 (B.) 4032 (C.) 7 (D.) 448
- (63.) Find the value of $22 - [23 - \{24 - (27 - 25 - 30)\}]$
 (A.) -7 (B.) 7 (C.) -8 (D.) -9
- (64.) If 10% of x is the same as 20% of y, then x:y is equal to :
 (A.) 2:1 (B.) 1:2 (C.) 20:1 (D.) 1:10
- (65.) If 20% of A is added to 20% of B, the answer is 40% of B. What percentage of A is B?
 (A.) 200 (B.) 100 (C.) 50 (D.) 20
- (66.) If X % of X is 16, then find the value of X?
 (A.) 60 (B.) 40 (C.) 30 (D.) 20
- (67.) If marked price of a box is 10 and a discount of 10% is allowed then what should be the sale price?
 (A.) 10 (B.) 9 (C.) 11 (D.) 0
- (68.) 12 copies of a book were sold for Rs. 1800, thereby gaining cost price of 6 books. The cost price of a copy is:
 (A.) 120 (B.) 110 (C.) 100 (D.) 300
- (69.) A sum of money becomes twice in 10 years at simple interest. What is rate of interest per annum?
 (A.) 5% (B.) 10% (C.) 8% (D.) 7.5%
- (70.) A certain sum doubles in 8 years at simple interest. The same sum will become four times in
 (A.) 16 years (B.) 20 years (C.) 32 years (D.) 24 years
- (71.) The average age of a committee of eight members is 50 years. A member aged 60 years retired and his place was taken by another member aged 36 years. What is the average age of the present committee?
 (A.) 47 (B.) 48 (C.) 45 (D.) 55
- (72.) The average of first five multiples of 9 is:
 (A.) 20 (B.) 27 (C.) 28 (D.) 30



- (73.) The average weight of A, B and C is 43 kg. If the average weight of A and B is 42 kg and that of B and C 36 kg, then the weight of B is:
 (A.) 27 kg (B.) 30 kg (C.) 21 kg (D.) 22 kg
- (74.) A and B can do a work in 15 days and B alone in 20 days. In how many days A can alone complete the work?
 (A.) 60 (B.) 45 (C.) 40 (D.) 30
- (75.) If 10 men can do a piece of work 12 days, then time taken by 12 men do the same piece of work will be:
 (A.) 12 (B.) 10 (C.) 9 (D.) 8
- (76.) In what time will train 100 m long cross an electric pole, if its speed be 180 km/h?
 (A.) 5s (B.) 4s (C.) 3s (D.) 2s
- (77.) A man covers half of its journey at 6 km/h and the remaining at 3 km/h. His average speed is:
 (A.) 9 km/h (B.) 4.5km/h (C.) 4 km/h (D.) 3 km/h
- (78.) A motorcycle is moving at a speed of 25kmph and its speed is increased by 7 kmph at the end of each hour. How much time it will take to cover a distance of 225 km?
 (A.) 6hr (B.) 7hr (C.) 5.5 hr (D.) 6.5 hr
- (79.) 20 chocolates cost Rs. 320 Find the cost of 35 such chocolates.
 (A.) 500 (B.) 560 (C.) 640 (D.) 700
- (80.) Travelling 900 km by rail costs Rs 280. What would be the fare for a journey of 360 km when a person travels by the same class?
 (A.) Rs.112 (B.) Rs. 140 (C.) Rs. 180 (D.) Rs. 450
- (81.) Select a figure from amongst the Answer Figures which will continue the same series as established by the five problem Figures.

Problem Figures:

Answer Figures:



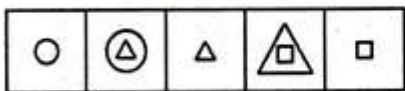
(A) (B) (C) (D) (E) (1) (2) (3) (4) (5)

- (A.) 1 (B.) 2 (C.) 3 (D.) 5

- (82.) Select a figure from amongst the Answer Figures which will continue the same series as established by the five problem figures.

Problem Figures:

Answer Figures:



(A) (B) (C) (D) (E) (1) (2) (3) (4) (5)

- (A.) 1 (B.) 2 (C.) 5 (D.) 4

- (83.) Select a figure from amongst the Answer Figures which will continue the same series as established by the five problem figures.



A Vision of Victory

VV ACADEMY

RPF > RRB GROUP - D > POSTAL > SI/CONSTABLE

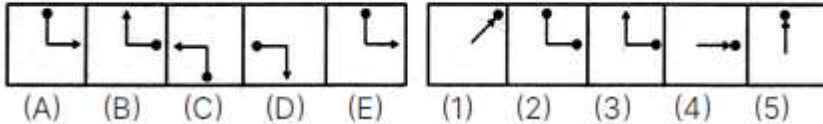
Address : Near Chuttugunta Signals, Eluru Road, VJA 2. Cell : 9985525552, 8977525552

www.vvacademy.com



Problem Figures:

Answer Figures:

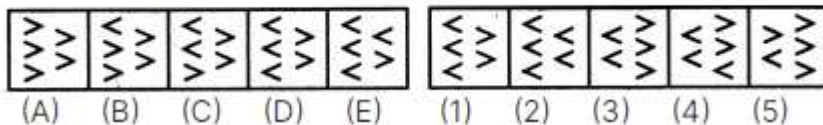


- (A.) 5 (B.) 2 (C.) 3 (D.) 4

(84.) Select a figure from amongst the Answer Figures which will continue the same series as established by the five problem figures.

Problem Figures:

Answer Figures:

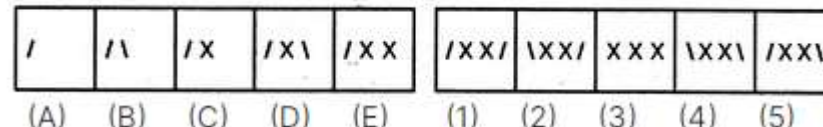


- (A.) 2 (B.) 1 (C.) 5 (D.) 4

(85.) Select a figure from amongst the Answer Figures which will continue the same series as established by the five problem figures.

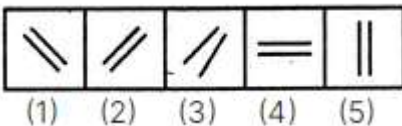
Problem Figures:

Answer Figures:



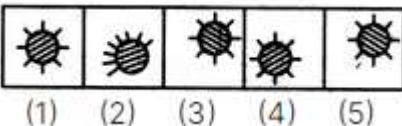
- (A.) 2 (B.) 4 (C.) 5 (D.) 3

(86.) Choose the figure which is different from the rest



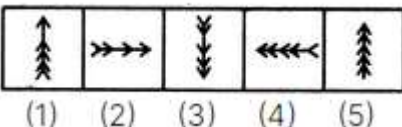
- (A.) 2 (B.) 3 (C.) 5 (D.) 4

(87.) Choose the figure which is different from the rest



- (A.) 2 (B.) 4 (C.) 5 (D.) 3

(88.) Choose the figure which is different from the rest



- (A.) 5 (B.) 4 (C.) 3 (D.) 2

(89.) Choose the figure which is different from the rest



A Vision of Victory

V V ACADEMY

➤ RPF ➤ RRB GROUP - D ➤ POSTAL ➤ SI/CONSTABLE

www.vvacademy.com

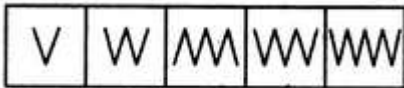
Address : Near Chuttugunta Signals, Eluru Road, VJA 2. Cell : 9985525552, 8977525552




(1) (2) (3) (4) (5)

(A.) 3 (B.) 2 (C.) 1 (D.) 5

(90.) Choose the figure which is different from the rest



(1) (2) (3) (4) (5)

(A.) 1 (B.) 2 (C.) 3 (D.) 5

(91.) Choose the alternative which is closely resembles the water-image of the given combination.

NUCLEAR

- (1) NUCLEAR
- (2) RUCLEAV
- (3) RUCLEAV
- (4) RUCLEAV

(A.) 1 (B.) 2 (C.) 3 (D.) 4

(92.) Choose the alternative which is closely resembles the water-image of the given Combination

DISC

- (1) CSID
- (2) CSID
- (3) DISC
- (4) DISC

(A.) 4 (B.) 3 (C.) 2 (D.) 1

(93.) Choose the alternative which is closely resembles the water-image of the given Combination

A1M3b

- (1) A1M3b
- (2) A1M3b
- (3) A1M3b
- (4) A1M3b

(A.) 3 (B.) 4 (C.) 1 (D.) 2

(94.) Choose the alternative which is closely resembles the water image of the given combination.

FAMILY

- (1) FAMILY
- (2) FAMILY
- (3) FAMILY
- (4) FAMILY

(A.) 3 (B.) 2 (C.) 4 (D.) 1

(95.) Choose the alternative which is closely resembles the water-image of the given combination

bridge

- (1) bridge
- (2) bridge
- (3) bridge
- (4) bridge

(A.) 1 (B.) 2 (C.) 3 (D.) 4

(96.) Group the given figures into three classes using each figure only once



A Vision of Victory

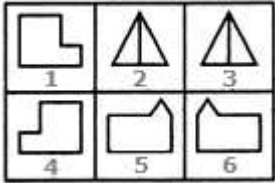
V V ACADEMY

➤ RPF ➤ RRB GROUP - D ➤ POSTAL ➤ SI/CONSTABLE

Address : Near Chuttugunta Signals, Eluru Road, VJA 2. Cell : 9985525552, 8977525552

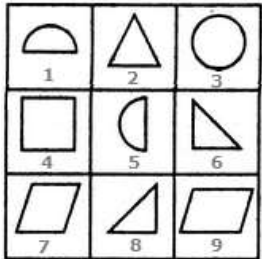
www.vvacademy.com





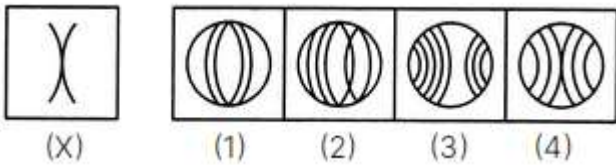
- (A.) 1,4:2,3:5,6 (B.) 1,5:2,6:4,3 (C.) 1,6:2,3:4,5 (D.) 1,2:3,6:4,5

(97.) Group the given figures into three classes using each figure only once



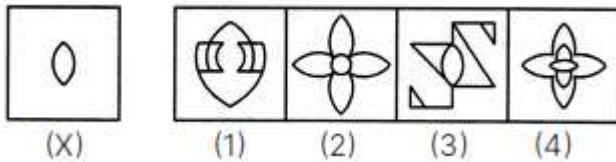
- (A.) 1,3,5; 2,6,9; 4,7,8 (B.) 2,3,4,5,6,8; 9,1,7
(C.) 1,3,5; 2,6,8; 4,7,9 (D.) 3,2,4; 6,5,8; 7,9,1

(98.) Find out the alternative figure which contains figure (X) as its part



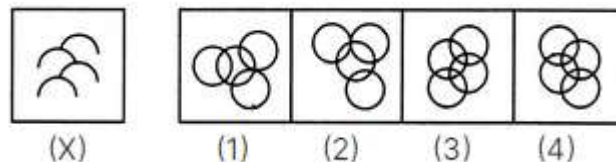
- (A.) 1 (B.) 2 (C.) 3 (D.) 4

(99.) Find out the alternative figure which contains figure (X) as its part



- (A.) 4 (B.) 3 (C.) 1 (D.) 2

(100.) Find out the alternative figure which contains figure (X) as its part



- (A.) 1 (B.) 2 (C.) 4 (D.) 3



ODISHA CIRCLE-PA/SA EXAM -2022

ANSWER

| | | | | | | | | | |
|-------|---|-------|---|-------|---|-------|---|--------|---|
| (1.) | A | (2.) | A | (3.) | D | (4.) | C | (5.) | A |
| (6.) | D | (7.) | C | (8.) | D | (9.) | D | (10.) | D |
| (11.) | D | (12.) | C | (13.) | B | (14.) | D | (15.) | C |
| (16.) | C | (17.) | B | (18.) | B | (19.) | D | (20.) | B |
| (21.) | A | (22.) | D | (23.) | B | (24.) | B | (25.) | B |
| (26.) | A | (27.) | A | (28.) | A | (29.) | B | (30.) | A |
| (31.) | A | (32.) | C | (33.) | C | (34.) | B | (35.) | D |
| (36.) | C | (37.) | C | (38.) | C | (39.) | A | (40.) | A |
| (41.) | C | (42.) | C | (43.) | A | (44.) | A | (45.) | A |
| (46.) | C | (47.) | B | (48.) | A | (49.) | C | (50.) | B |
| (51.) | C | (52.) | D | (53.) | C | (54.) | D | (55.) | D |
| (56.) | D | (57.) | C | (58.) | A | (59.) | D | (60.) | B |
| (61.) | A | (62.) | C | (63.) | D | (64.) | A | (65.) | B |
| (66.) | B | (67.) | B | (68.) | C | (69.) | B | (70.) | D |
| (71.) | A | (72.) | B | (73.) | A | (74.) | A | (75.) | B |
| (76.) | D | (77.) | C | (78.) | C | (79.) | B | (80.) | A |
| (81.) | B | (82.) | D | (83.) | C | (84.) | A | (85.) | C |
| (86.) | B | (87.) | A | (88.) | D | (89.) | A | (90.) | C |
| (91.) | D | (92.) | B | (93.) | A | (94.) | C | (95.) | B |
| (96.) | A | (97.) | C | (98.) | D | (99.) | B | (100.) | D |

