



KARNATAKA CIRCLE-PA/SA EXAM -2022

- (1.) Inward foreign parcels addressed "Poste restante" except value payable parcels are detained in the office of delivery for a period not exceeding.
- (A.) Three months (B.) One month
(C.) One week (D.) Two weeks
- (2.) Mark correct option related to inward foreign registered articles:
- (A.) The delivery of registered article and the exact manner in which the Advice of Delivery form is completed in the office of destination depends upon the internal regulations in the country of origin.
(B.) The sender of a registered article may not obtain an advice of delivery
(C.) The advice of delivery charge shall not be represented on the item with the other charges. POS
(D.) Inward foreign registered articles are delivered like inland registered articles after collection of dues, if any, like customs duty, customs clearance fee and any other postage charges.
- (3.) With reference to foreign post the terms 'A.O' means
- (A.) Accounts office of the foreign country
(B.) Other subjects
(C.) Administrative office of the foreign country
(D.) None of these
- (4.) If an unpaid or under paid registered article under foreign post is tendered at the counter:
- (A.) It cannot be registered and refused
(B.) It can be registered with a note that the deficiency would be collected from addressee
(C.) It has to be handed over to the postmaster for his disposal
(D.) It can be registered with double postage charges
- (5.) The general maximum limit of weight for a foreign parcel is
- (A.) 25 kg (B.) 30 kg (C.) 10 kg (D.) 20 kg
- (6.) When an insured foreign parcel is redirected from one country to another:
- (A.) No additional insurance fee is to be levied
(B.) Half of the original insurance fee is to levied for such transmissions
(C.) A fresh insurance fee become payable for each such transmission
(D.) Double of the original insurance fee is to levied for such transmissions
- (7.) All Communications concerning customs Duty levied and other treatment of postal articles arising out of the functions of the customs department should be addressed only to the
- (A.) Customs Authorities
(B.) Head of Circle
(C.) Head of Postal Division
(D.) Supervision of Office of Exchange
- (8.) The max weight of an Airmail letter should not exceed
- (A.) 4 kg (B.) 2kg (C.) 5kg (D.) 1kg
- (9.) Foreign Postcards not complying with prescribed conditions are treated as _____ and postage taxed accordingly.
- (A.) Parcel (B.) Letters
(C.) M Bag (D.) Printed Papers
- (10.) Which of the following can be transmitted at printed papers rate?
- (A.) Copies obtained by means of stamps with or without moveable type
(B.) Films and sound or video recordings
(C.) Films and sound or video recordings



- (D.) Manuscripts of works or top newspapers
- (11.) Department of posts has digitized the finance and accounts and human resource management functions under core system Integrator (CSI) segment, using which platform?
- (A.) Finacle (B.) Server space
(C.) SAP (D.) McCamish
- (12.) What is name of the project that aims at the supply of required hardware like smart phones to postmen staff of post offices?
- (A.) Mail Operations Hardware (MOH) (B.) Project Arrow
(C.) CSI (D.) Mail Network Optimization Project (MNOP)
- (13.) HDMS in CSI refers to:
- (A.) Help Desk Monitoring Setup (B.) Help Desk Management System
(C.) Hard Duty Management System (D.) Heavy Desk Management Setup
- (14.) Under which segment of the IT Modernization Project, the Business Intelligence (BI) is provided?
- (A.) FSI (B.) NI (C.) CIS (D.) CSI
- (15.) In DARPAN, the 'DA' refers to:
- (A.) Digital Advancement (B.) Digital Awareness
(C.) Digital Achievement (D.) Digital Award
- (16.) Under IT Modernization Project 2012 in Core System Integrator Segment the 'SSO' refers to:
- (A.) Single Sign Operations (B.) Systematic Sign Operations
(C.) Single Sign On (D.) Single Sign Off
- (17.) Which among the following is correctly matched?
- (A.) CIF-Customer Information File (B.) DCT-Direct Counter Transfer
(C.) AEPS-Aadhar Enabled Payment Series (D.) FSI-Financial System Information
- (18.) IT Modernization Project includes providing Central Server based integrated, modular and scalable solutions for all the operations of Department of Posts including?
- i.) Mails ii.) Human Resource iii.) Banking iv.) Insurance v.) Finance and Accounts
- (A.) i, ii, and iv only (B.) i, ii, iii and v only
(C.) i, iii, iv and v only (D.) i, ii, iii, iv and v
- (19.) Expand DCF in terms of IT Modernization Project?
- (A.) Disaster Centre Facility (B.) Data Centre Facility
(C.) Data Centre Facilitation (D.) Data Control Forum
- (20.) Under IT Modernization Project, Post Offices have been interconnected using which type of networks?
- (A.) Metropolitan Area Network (MAN) (B.) Wireless Local Area Network (WLAN)
(C.) Wide Area Network (WAN) (D.) Personal Area Network (PAN)
- (21.) Department of Posts offers a unique advertisement concept to help the Indian Corporate and the Government organizations to reach potential customers through
- (A.) Logistic post (B.) Speed Post
(C.) Media Post (D.) Direct Post
- (22.) Which of the following is incorrect in connection with fee (without tax) to be charged for services mentioned hereunder?
- (A.) Transfer of account-Rs 100 (B.) Pledging of account-Rs 100
(C.) Issue of duplicate pass book-Rs 50 (D.) Charges on dishonour of cheque - Rs 50
- (23.) Mark incorrect in connection Electronic Money Order:
- (A.) The remitter of a money order which has not been paid may direct that the amount be paid to some person other than the payee named in the order



- (B.) The change of payee's name will be made on payment of a second commission equal to the first
- (C.) The remitter of a money order which has not been paid may stop payment and require that the money be repaid to himself
- (D.) The change of payee's address will be made on payment of a second commission not equal to the first.
- (24.) What is the Maximum value of Insurance for speed post consignments can be done?
(A.) Rs. 100000 (B.) Rs. 50000 (C.) Rs. 25000 (D.) Rs. 10000
- (25.) Which is correct about how to address an envelope?
(A.) Address block of addressee shall have minimum gap of 45 mm from top
(B.) Address of the addressee shall be written on front side and sender's address on back side on an envelope
(C.) Stamps or Frank impressions shall be affixed in maximum area of 87 mm
(D.) The sender's logo size should not exceed 20 x 55 mm in size
- (26.) What is fee for issue statement regarding Time Deposit Account?
(A.) Rs 20+ GST (B.) Rs 50+ GST
(C.) Rs 100+ GST (D.) Rs 10+ GST
- (27.) What is the amount of RD Loan withdrawal with reference to deposits?
(A.) Not Exceeding of 60% of Deposits (B.) Not Exceeding of 80% of Deposits
(C.) Not Exceeding of 50% of Deposits (D.) Not Exceeding of 40% of Deposits
- (28.) What is the upper age limit for Anticipated Endowment Assurance policy?
(A.) 48 years (B.) 45 years (C.) 50 years (D.) 55 years
- (29.) Any one taking RPLI policies worth or more than Rs 25,000/- (sum assured) with non- TA standard proof of age shall not be beyond?
(A.) 40 years (B.) 45 years (C.) 35 years (D.) 50 years
- (30.) Who among the following can sent a proposal for issue of commemorative postage stamps?
(A.) Only Members of Parliament (B.) Any foreign dignitary
(C.) Any higher official/foreign ambassadors in India (D.) Any citizen of India
- (31.) How to effect delivery of insured articles addressed to minors?
(A.) Should not be delivered
(B.) Should always be delivered to minor in the presence of the person in whose care he may be living
(C.) Should be delivered normally
(D.) Should be delivered as it is delivered to the illiterate person
- (32.) Themust, from time to time, examine the registers (Ms-85) and visit book (Ms-85) and visit books (Ms-86) of the village postmen attached to his office.
(A.) Postmaster (B.) Head Record Officer
(C.) Inspector Post (D.) Head of Postal Division
- (33.) In the Sub Offices, for remittance through special carriers, the cash should be counted by the S.P.M. and a receipt for the sum should be given in SAP and in the _____
(A.) Carrier's book or dairy (B.) In Treasurer's cash book
(C.) In Sub Office Daily Account (D.) In Special cash receipt list
- (34.) Acceptance of cheque in Branch Post Offices for Account opening and subsequent Deposits has been restored vide SB order No?
(A.) SB ORDER No.21/2020 (B.) SB ORDER No. 23/2020
(C.) SB ORDER No. 22/2020 (D.) SB ORDER No. 24/2020
- (35.) As per SB Order 12/2021, which among the following operations of Joint B type account is not followed to be carried out by either of the joint depositors or survivor in case of?
(A.) Account Closure (B.) Issued of duplicate passbook



- (C.) Transfer of account (D.) Transfer of account to Branch Post Offices
- (36.) The cage TB addressed to the Mail office of Terminal Station is to be opened at the terminal station personally by.....
- (A.) The Mail Agent (B.) The Mail Guard
(C.) The Head Sorting Assistant (D.) The Head Record Officer
- (37.) Which among the following is Incorrect?
- (A.) Transfer bags must always be closed in the presence of the Head Sorting Assistant/Head Mail Guard/Mail Agent
(B.) The Head Sorting Assistant is immediately and specially answerable for the correct performance of the work done in the sorting department.
(C.) The mail bags addressed to the office should be opened by the Head Sorting Assistant himself.
(D.) The branch office bags addressed to the mail office should be opened by the Head Sorting Assistant himself
- (38.) In case of transfer of bags from one section or email office to another, will be indicated in the accompanying mail list as?
- (A.) 'L' bag (B.) 'M' bag to (C.) 'B' bag (D.) 'E' bag
- (39.) Which among the following is correct in connection with international mails?
- (A.) All first class mails whether surcharged or Un-surcharged i.e. letters, aerogramme and postcards, are eligible for the free redirection by air within India.
(B.) All articles for dispatch abroad should be sorted according to the inward sorting list
(C.) Postage stamps on all articles posted for dispatch abroad will not be impressed
(D.) The international postcards shall not be of a size larger than 104 mm X 144 mm
- (40.) The facility of "Advice of embarkation charge" is
- (A.) Provided by Indian Post Offices
(B.) Not Provided by Indian Post Offices
(C.) Provided by Indian Post Offices on request
(D.) Provided by Indian Post Offices on payment of prescribed fee
- (41.) A registered letter of which delivery has been taken can be re-posted only under the conditions prescribed for the posting of registered articles for the first time, fresh charge equal to.....will be made on account of postage if the article has not been opened.
- (A.) Postage (B.) Registration fee
(C.) Nil (D.) Double postage
- (42.) In post offices, articles, addressed to deceased persons are ordinarily dealt with in the same manner as
- (A.) Mis-sent (B.) Redirected
(C.) Unclaimed (D.) Refused articles
- (43.) A system of identity cards has been introduced by the Post Office for the benefit of tourists, traveling representatives of firms and other members of the public who experience difficulty in establishing their identity in connection with.....transactions.
- (A.) Postal (B.) Foreign Trade
(C.) Business (D.) Tender
- (44.) Instruction regarding change of residence remains valid for how much period?
- (A.) One month (B.) Three months
(C.) Six months (D.) One year
- (45.) Which among the following charges is not exempted to Blind Literature packets?
- (A.) Registration fee (B.) Fee for acknowledgement
(C.) Fee for attested copy of receipt (D.) Airmail charge



- (46.) What are the cases in which registration is compulsory?
(A.) Any registered article which is re-posted before delivery
(B.) Any article bearing the word 'registered'
(C.) Any value-payable article
(D.) Any parcel addressed to a place for which a customs declaration is required
- (47.) Who is not entitled to use service stamps on official postal articles sent by them?
(A.) The controller of Emigrant Labour
(B.) The secretary, Medical Council of India
(C.) Government officials including those who are on leave
(D.) The Secretary, Dental Council of India
- (48.) Which of the under mentioned articles transmission by the Inland post is prohibited?
i.) Any sharp instrument not properly protected
ii.) Any explosive, inflammable, dangerous substance
iii.) Any filthy, noxious or deleterious substance
iv.) Ticket, proposal or advertisement relating to a lottery
(A.) (i), (iii), (iv) are only prohibited
(B.) (i), (ii), (iv) are only prohibited
(C.) (ii), (iii), (iv) are only prohibited
(D.) All (i), (ii), (iii), (iv) are prohibited
- (49.) The weight of an un-registered parcel should not exceed
(A.) 2000 grams (B.) 3000 grams (C.) 3500 grams (D.) 4000 grams
- (50.) Window delivery ticket is.
(A.) Daily docket
(B.) The receipt given to post box holder
(C.) Identification of franking machine licensee's representative
(D.) Discount for bulk posting of franked articles
- (51.) $1170 \div 26 + (785 - 423 + ?) = 440$ solve it
(A.) 37 (B.) 33 (C.) 38 (D.) 43
- (52.) What will come in place of question mark (?) in the following question?
 $7474 \div 474? = x \times 25$
(A.) 468.84 (B.) 462.48 (C.) 488.84 (D.) 484.36
- (53.) If the height of a triangle is decreased by 40% and its base is increased by 10%, what will be the effect on its area?
(A.) 16% decrease (B.) 16% increase
(C.) No change (D.) 8% decrease
- (54.) What is 15% of (25% of 1600)?
(A.) 15 (B.) 20 (C.) 40 (D.) 60
- (55.) In an examination, there are three papers and a candidate has to get 35% of the total to pass. In one paper, Himesh gets 62 out of 150 and in the second 35 out of 150. How much must Himesh get, out of 180, in the third paper to just qualify for a pass?
(A.) 70 (B.) 71 (C.) 60.5 (D.) 68
- (56.) Successive discount of 10%, 12% and 15% amount to a single discount of?
(A.) 32.68% (B.) 35.28% (C.) 26.68% (D.) 36.68%
- (57.) The cost price of an article is 64% of the art market price. Calculate the gain percent after allowing discount of 12%.
(A.) 32.5% (B.) 35% (C.) 37.5% (D.) 48%
- (58.) Gaurav sold a book at a profit of 7%. Had he sold it for Rs. 75 more, 22% would have been gained. Find the cost price.



- (A.) Rs. 450 (B.) Rs. 500 (C.) Rs. 550 (D.) Rs. 600
- (59.) The simple interest on a certain sum for 3 years at 12% per annum is Rs. 280.08%. What is the principal amount?
- (A.) Rs. 771 (B.) Rs. 777.76 (C.) Rs. 788.08 (D.) Rs. 778
- (60.) If the annual rate of simple interest increases from 10% to 12%, a man's yearly income increases by Rs. 1250. What is his principal amount?
- (A.) Rs. 62500 (B.) Rs. 50000 (C.) Rs. 56000 (D.) Rs. 52000
- (61.) A sum of money will double itself in 16 years at simple interest at an yearly rate of _____
- (A.) $8\frac{1}{2}\%$ (B.) 7.5% (C.) 6% (D.) 6.5%
- (62.) The average marks of Rajesh in four subjects are 76. If he obtained 86 marks in the 5th subject then what is the new average?
- (A.) 78 (B.) 76 (C.) 74 (D.) 77
- (63.) The average age of a group of 10 students is 15 years. When 5 more students joined the group, the average age rose by 2 years. What is the average age (in years) of the new students?
- (A.) 18 years (B.) 19 years (C.) 20 years (D.) 21 years
- (64.) The average of 7 consecutive numbers is 20. The largest of these numbers is _____
- (A.) 20 (B.) 22 (C.) 23 (D.) 35
- (65.) A can do a work in 6 days. B takes 12 days. C takes as long as A and B would take working together. How long will it take B and C to complete the work together?
- (A.) 4 days (B.) 3 days (C.) 5 days (D.) 4.5 days
- (66.) A can do a work in 15 days and B in 20 days, if they work on it together for 4 days then the fraction of the work that is left is
- (A.) $\frac{1}{4}$ (B.) $\frac{1}{10}$ (C.) $\frac{7}{15}$ (D.) $\frac{8}{15}$
- (67.) Supposing that telegraph poles on a railroad are 50 meters apart, how many poles will be passed by a train car in 4 hours if the speed of the train is 45 km an hour?
- (A.) 3601 poles (B.) 3600 poles (C.) 3505 poles (D.) 1800 poles
- (68.) With a uniform speed a car covers a certain distance in 8 hours. Had the speed been increased by 4 km/hr, the same distance could have been covered in 7 hours. What is the distance covered?
- (A.) 420 km (B.) 480 km
(C.) 640 km (D.) Cannot be determined
- (69.) If cost of 15 eggs is Rs.75, then find out the cost of 4 dozen eggs.
- (A.) Rs. 240 (B.) Rs. 300 (C.) Rs. 150 (D.) Rs. 185
- (70.) If 6 oil tankers can be filled by a pipe in 4 hours, how long does the pipe take to fill 4 such oil tankers?
- (A.) 4 Hours (B.) 5 Hours (C.) 3 Hours (D.) 6 Hours
- (71.) There is a certain relation between two words given on one side of :: and one word given on the side of: while another word is to be found from the given alternatives, having the same relation with this word as the given pair of words bear, choose the correct alternative.
Breeze: Cyclone:: Drizzle: ?
- (A.) Earthquake (B.) Storm (C.) Flood (D.) Downpour
- (72.) Select the pair which has the same TA relationship as the original pair of words
Infection: Illness
- (A.) Satisfaction: Appetite (B.) Rehearsal: Performance
(C.) Applause: Audience (D.) Antidote: Disease
- (73.) Mirror is related to reflection in the same way Water is related to _____
- (A.) Conduction (B.) Dispersion (C.) Immersion (D.) Retraction
- (74.) Choose the correct alternative that will continue the same pattern and fill in the blank spaces.



A Vision of Victory

www.vvacademy.com

V V ACADEMY

➤ RPF ➤ RRB GROUP - D ➤ POSTAL ➤ SI/CONSTABLE



Address : Near Chuttugunta Signals, Eluru Road, VJA 2. Cell : 9985525552, 8977525552

6, 24, 12, (...), 18, 8, 24

- (A.) 4 (B.) 8 (C.) 16 (D.) 6

(75.) One term in the number is wrong. Find out the wrong term.

325, 259, 202, 160, 127, 105, 94

- (A.) 202 (B.) 94 (C.) 127 (D.) 105

(76.) If BATCH is coded as ABSDG, how is FORSAKE coded in that code?

- (A.) ABDGS (B.) EPQTZLD (C.) EQPZLTD (D.) GDSBA

(77.) Abhishek ranks thirteenth in a class of thirty- one. What is his rank from the last?

- (A.) 16 (B.) 17 (C.) 18 (D.) 19

(78.) Arrange the given words in a meaningful sequence and choose the most appropriate alternatives

1.) Police 2.) Punishment 3.) Crime 4.) Justice 5.) Judgement

- (A.) 1, 2, 3, 4, 5 (B.) 3, 1, 4, 5, 2 (C.) 3, 1, 2, 4, 5 (D.) 5, 4, 3, 2, 1

(79.) A number series is given with one term missing. Choose the correct alternative that will continue the same pattern and fill in the blank spaces.

2, 7, 14, 23,....., 47

- (A.) 38 (B.) 34 (C.) 28 (D.) 31

(80.) Look at this series: 21, 9, 21, 11, 21, 13, 21,.... what number should come next?

- (A.) 14 (B.) 21 (C.) 15 (D.) 23

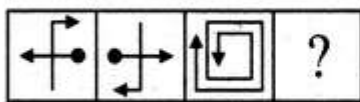
(81.) Which of the answer figures will replace the question mark in the problem figure?



- (A.) A (B.) B (C.) C (D.) D

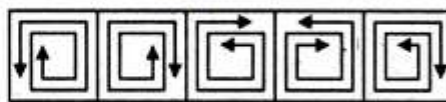
(82.) Select a suitable figure from the Answer figures that would replace the question mark(?)

Problem Figures:



- (A) (B) (C) (D)

Answer Figures:

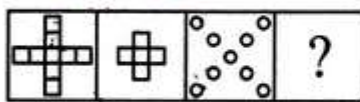


- (1) (2) (3) (4) (5)

- (A.) 1 (B.) 2 (C.) 3 (D.) 4

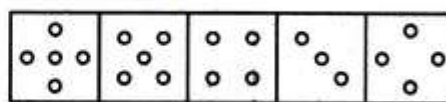
(83.) Select a suitable figure from the Answer figures that would replace the question mark(?)

Problem Figures:



- (A) (B) (C) (D)

Answer Figures:




- (1) (2) (3) (4) (5)

- (A.) 2 (B.) 3 (C.) 4 (D.) 1

(84.) Group the given figures into three classes using each figure only once

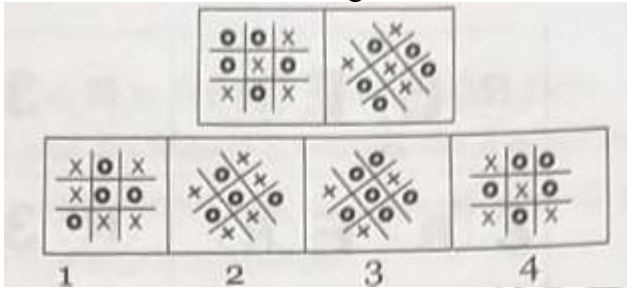


A Vision of Victory
VV ACADEMY
 > RPF > RRB GROUP - D > POSTAL > SI/CONSTABLE
 Address : Near Chuttugunta Signals, Eluru Road, VJA 2. Cell : 9985525552, 8977525552


- (A.) 1, 5, 7; 2, 4, 6; 3,9,8 (B.) 1,5,7; 2,4,8; 3,6,9
 (C.) 1,4,7; 2,5,8; 3,6,9 (D.) 1,7,9; 3,5,8; 2,4,6

(85.) There are two problem figures, followed by answer figures. Two problem figures have common features; select a suitable figure from the Answer Figures which has the same



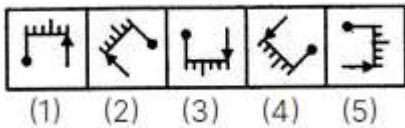
- (A.) 3 (B.) 2 (C.) 4 (D.) 1

(86.) Find the minimum number of straight lines required to make the given figure?



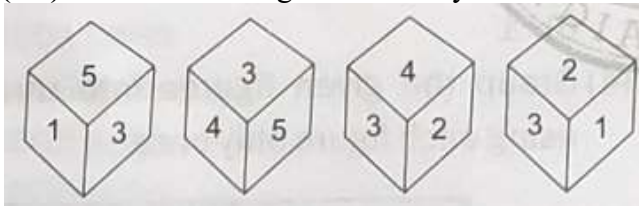
- (A.) 13 (B.) 15 (C.) 17 (D.) 14

(87.) Choose the figure which is different from the rest.



- (A.) 1 (B.) 2 (C.) 3 (D.) 4

(88.) Observe the figures carefully and find the number opposite to 4 on dice?



- (A.) 1 (B.) 2 (C.) 5 (D.) 6

(89.) Find the number of square in the given figure.



A Vision of Victory

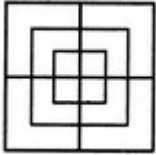
www.vvacademy.com

V V ACADEMY

➤ RPF ➤ RRB GROUP - D ➤ POSTAL ➤ SI/CONSTABLE

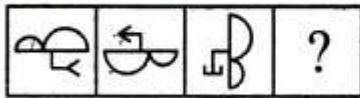


Address : Near Chuttugunta Signals, Eluru Road, VJA 2. Cell : 9985525552, 8977525552



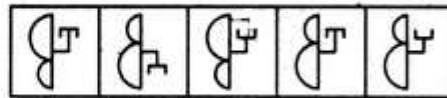
- (A.) 8 squares (B.) 12 squares (C.) 15 squares (D.) 18 squares
- (90.)** Select a suitable figure from the Answer figures that would replace (?)

Problem Figures:



(A) (B) (C) (D)

Answer Figures:



(1) (2) (3) (4) (5)

- (A.) 1 (B.) 2 (C.) 3 (D.) 4
- (91.)** Which of the following was the former name of India Point?
- (A.) Pygmalion Point (B.) Cape Camorin
(C.) Greek Point (D.) Guhar Moti
- (92.)** Which of the following river does not originate in Indian territory?
- (A.) Mahanadi (B.) Ganga
(C.) Brahmaputra (D.) Narmada
- (93.)** Which of the following provision needs a special majority in Parliament?
- (A.) Change in Fundamental Rights (B.) Creation of New States
(C.) Abolition of Legislative Councils in State (D.) rules and Procedures in Parliament
- (94.)** How many members of upper house (Rajya Sabha) can be nominated by President of India?
- (A.) Eight (B.) Ten (C.) Twelve (D.) Fifteen
- (95.)** World Tourism Day is celebrated on _
- (A.) 12th September (B.) 27th September
(C.) 25th September (D.) 29th September
- (96.)** Which of the following pairs (State-date of formation) is correctly matched?
- (A.) Mizoram-25 June, 1986 (B.) Telangana-15 August, 2014
(C.) Chhattisgarh-20 November, 2000 (D.) Haryana-1 November 1966
- (97.)** The paintings and sculptures of Ajanta and Ellora Caves give us the teachings of
- (A.) Guru Nanak (B.) Jesus Christ
(C.) Lord Buddha (D.) Swami Vivekananda
- (98.)** Sattriya is a classical dance form of which State?
- (A.) Assam (B.) Manipur
(C.) Uttar Pradesh (D.) Andhra Pradesh
- (99.)** Which Indian mass movement began with the famous 'Dandi March' of Mahatma Gandhiji?
- (A.) Khilafat Movement (B.) Non-co-operation Movement
(C.) Civil Disobedience Movement (D.) Quit India Movement
- (100.)** Ethics deals with the standards of:
- (A.) Beauty (B.) Goodness (C.) Truth (D.) Fact



KARNATAKA CIRCLE-PA/SA EXAM -2022

ANSWER

(1.)	B	(2.)	D	(3.)	D	(4.)	A	(5.)	D
(6.)	C	(7.)	A	(8.)	C	(9.)	B	(10.)	D
(11.)	C	(12.)	A	(13.)	B	(14.)	D	(15.)	A
(16.)	C	(17.)	A	(18.)	D	(19.)	B	(20.)	C
(21.)	C	(22.)	D	(23.)	D	(24.)	A	(25.)	B
(26.)	A	(27.)	C	(28.)	B	(29.)	B	(30.)	D
(31.)	B	(32.)	A	(33.)	A	(34.)	C	(35.)	D
(36.)	C	(37.)	D	(38.)	A	(39.)	A	(40.)	B
(41.)	C	(42.)	B	(43.)	A	(44.)	B	(45.)	D
(46.)	B	(47.)	C	(48.)	D	(49.)	D	(50.)	C
(51.)	B	(52.)	C	(53.)	A	(54.)	D	(55.)	B
(56.)	A	(57.)	C	(58.)	B	(59.)	D	(60.)	A
(61.)	C	(62.)	A	(63.)	D	(64.)	C	(65.)	B
(66.)	D	(67.)	A	(68.)	B	(69.)	A	(70.)	C
(71.)	D	(72.)	B	(73.)	D	(74.)	C	(75.)	A
(76.)	B	(77.)	D	(78.)	B	(79.)	B	(80.)	C
(81.)	D	(82.)	B	(83.)	A	(84.)	B	(85.)	C
(86.)	D	(87.)	A	(88.)	A	(89.)	C	(90.)	D
(91.)	A	(92.)	C	(93.)	A	(94.)	C	(95.)	B
(96.)	D	(97.)	C	(98.)	A	(99.)	C	(100.)	B