



JHARKAND CIRCLE-PA/SA EXAM -2022

- (1.) It modernization project has how many different silos?
(A.) 5 (B.) 6 (C.) 8 (D.) 7
- (2.) ATM stands for
(A.) Automated tailoring machine (B.) Automated teller machine
(C.) Automate Telecast machine (D.) Automated telepathy machine
- (3.) Which of the following is true in case of Network Integrator?
(A.) It has three network providers Primary, Secondary & tertiary i.e NSP-I, NSP-II & NSP-III
(B.) It has only one Network i.e NSP-I
(C.) It has two networks i.e NSP-I & NSP-II
(D.) None of the above
- (4.) EMS means
(A.) Electronic mail service (B.) Express mail service
(C.) Enabled mail service (D.) None of these
- (5.) If an article is refused it will be kept in post office for
(A.) 7 days (B.) Return to sender immediately
(C.) 30 days (D.) 3 months
- (6.) Memorandum of distribution of work (MS-11) is issued by:-
(A.) Head Post Master (B.) Inspector of Posts
(C.) HOC (D.) Divisional Supdt.
- (7.) Preservation period of Nominal Roll in general
(A.) 10 years (B.) 20 years (C.) 30 years (D.) Permanent
- (8.) MO becomes void
(A.) At the beginning of the month following the month of its issue.
(B.) At the end of the month of issue
(C.) At the end of the month following the month of its issue
(D.) None of these
- (9.) Article except VP addressed as "Postrestante" are detained in the PO of delivery for the period not exceeding
(A.) Seven days (B.) One month
(C.) Fifteen days (D.) Three months
- (10.) Maximum weight Limit of a foreign parcel is
(A.) 30 kg (B.) 10 kg (C.) 15 kg (D.) 20 kg
- (11.) Who fixes the working hours of Night post office?
(A.) SSPO (B.) DG posts
(C.) Minister of Communication (D.) HOC
- (12.) Live mail survey is carried out in selected delivery post office in each division.
(A.) Yearly (B.) Monthly
(C.) Half yearly (D.) Once in two years
- (13.) CELC stands for
(A.) Child Enrolment Life Client (B.) Child enrolment Life certificate
(C.) Certificate for Enrolment for life of child (D.) None of the above
- (14.) The maximum weight limit of pattern and sample packets is
(A.) 04 kg (B.) 20 kg (C.) 02 kg (D.) 05kg
- (15.) VP article can be booked up to maximum rupees?



- (A.) 2000 (B.) 5000 (C.) 20000 (D.) No limit
- (16.) First class mails are
 (A.) Letters, Book packets and letter card (B.) Letters, Letter cards, and registered news paper
 (C.) Letters, postcards and letter cards (D.) Letters, Blind literature packets and letter cards
- (17.) International register article compensation is
 (A.) 30 SDR (B.) 20 SDR (C.) 40 SDR (D.) 10 SDR
- (18.) NBMS means
 (A.) National Business Management System (B.) National Bill Mail Service
 (C.) Notional Board of Management System (D.) None of these
- (19.) NEFT/RTGS/facility for POSB Accounts Holders is introduced in the SB order
 (A.) 08/2022 (B.) 05/2022 (C.) 06/2022 (D.) 04/2022
- (20.) The abbreviation 'UPU' stands for
 (A.) United Postal Union (B.) Universal Postal Union
 (C.) United Pacific Union (D.) None of these
- (21.) BO, Daily Account is also known as:-
 (A.) ACG-17 (B.) ACG-22 A (C.) ACG-24 (D.) ACG-27
- (22.) PPF Account is opened with minimum amount of Rs.
 (A.) 100 (B.) 200 (C.) 500 (D.) 1000
- (23.) How many scans are mandatory for NTD sorting
 (A.) 4 (B.) 6 (C.) 8 (D.) 12
- (24.) Territorial money order should be prepared when the number of money order exceed
 (A.) Three (B.) Six (C.) Ten (D.) Twenty Five
- (25.) Maximum weight of unregistered parcel in kg?
 (A.) 2kg (B.) 4 kg (C.) 5kg (D.) 10 kg
- (26.) Switch is installed between which two components?
 (A.) Computer and ups (B.) Computer and router
 (C.) Router and printer (D.) Printer and computer
- (27.) DARPAN stands for
 (A.) Digital advancement of rural post office for a new India.
 (B.) Drastic advancement of rural post office for a new India.
 (C.) Diplomatic advancement of regional post office for a new India.
 (D.) None of the above
- (28.) For Yugal Suraksha (Joint Life Assurance) term period
 (A.) Minimum 5 years maximum 20 years (B.) Minimum 5 years maximum 10 years
 (C.) Minimum 10 years maximum 15 years (D.) Minimum 10 years maximum 20 years
- (29.) The nomination can be made in PLI:-
 (A.) Maximum for one person (B.) Maximum for two persons
 (C.) Maximum for three persons (D.) Maximum for five persons
- (30.) Identify wrong term on Loan of the Policy
 (A.) EA policies loan can be availed after 3 years
 (B.) WLA policies loan can be availed before 4 years
 (C.) Interest @ 10%p.a calculated on six month basis
 (D.) Interest is payable once in Six months
- (31.) Nomination facility is not available in respect of:
 a.) Minor Account
 b.) Joint Account



Which is correct?

- (A.) Only 1
 - (B.) Only 2
 - (C.) 1 and 2
 - (D.) None of the above
- (32.) What is the GST% in the Registered Articles?
- (A.) No GST
 - (B.) 5
 - (C.) 9
 - (D.) 18
- (33.) Maximum weight of parcel that can be booked at BO is
- (A.) 04 kg
 - (B.) 02 kg
 - (C.) 20 kg
 - (D.) 10 kg
- (34.) "Project arrow" is related with
- (A.) Indian railway
 - (B.) Indian army
 - (C.) Food production
 - (D.) India post
- (35.) What was the change management stream of IT modernization project?
- (A.) Changing the old computers
 - (B.) Changing the products & services of the department
 - (C.) Training, preparing all the employees of the Department including GDS.
 - (D.) Changing all the earlier vendors of the department
- (36.) Read the statement regarding IT project 2.0
- a.) It has cabinet approval with outlay of Rs 5785 crore
 - b.) This amount is to be incurred of a period of 8 years

Which one is correct

- (A.) Only 1
 - (B.) Only 2
 - (C.) 1 and 2
 - (D.) None of above
- (37.) The minimum and maximum sum assured for RPLI is:
- (A.) Minimum of 5000, maximum of 5lakhs
 - (B.) Minimum of 5000, maximum of 10lakhs
 - (C.) Minimum of 10000 maximum of 5lakhs
 - (D.) Minimum of 10000 maximum of 10lakhs
- (38.) In respect of Children policy, the Child age should be
- (A.) 5 to 20 years
 - (B.) 5 to 18 years
 - (C.) 1 to 18 years
 - (D.) 1 to 10 years
- (39.) Match the following, which one is not correct?
- 1.) FSI-Financial System Integrator
 - 2.) CSI-Core System Integrator
 - 3.) DCF-Data Centre facility
 - 4.) NI-Network Integrator
- (A.) 1 and 2
 - (B.) 2 and 3
 - (C.) Only 1
 - (D.) None of the above
- (40.) What is the correct meaning of CBS under IT modernization project?
- (A.) Cloud based service
 - (B.) Core Banking solution
 - (C.) Cloud Banking solution
 - (D.) Cored Based Service
- (41.) Parcel that can be insured for maximums of rupees at branch post office?
- (A.) Rs 600
 - (B.) Rs 1000
 - (C.) Rs 500
 - (D.) Rs.100
- (42.) The weight of Aerogramme should not exceed
- (A.) 3 grams
 - (B.) 5 grams
 - (C.) 7 grams
 - (D.) 2 grams
- (43.) The jurisdiction of Sikkim state comes under which Circle?
- (A.) Assam
 - (B.) West Bengal
 - (C.) Sikkim
 - (D.) North East
- (44.) Mark correct options:-
- (A.) COD means Cash-on-delivery
 - (B.) Under COD system may be exchanged VP parcel
 - (C.) VP letter, Parcel & COD parcel may be insured in accordance with the conditions



- (D.) All of the above are correct
- (45.) What is the minimum number of articles required of prepare an Registered Bundle?
 (A.) 1 or more (B.) 2 or more (C.) 3 or more (D.) 5 or more
- (46.) A minimum quantity of _____ pieces can be accepted under the "Direct Post"
 (A.) 1000 (B.) 500 (C.) 10000 (D.) 5000
- (47.) Amount invested in Kisan Vikas Patra (KVP) doubles in ... months
 (A.) 118 (B.) 120 (C.) 113 (D.) 124
- (48.) Read the following sentence
 1.) Maximum bonus in PLI is in WLA policy
 2.) Minimum bonus in PLI is in AEA
 (A.) Only 1 is correct (B.) Only 2 is correct
 (C.) Both are correct (D.) Both are not correct
- (49.) A letter posted insufficiently prepaid is charged on delivery as follows:
 (A.) Single deficiency (B.) Not to be charged
 (C.) Double the amount of deficiency (D.) None of above
- (50.) Closure is allowed in Sukanya Samriddhi Account after the girl attains the age for the purpose of marriage.
 (A.) 10 years (B.) 15 years (C.) 18 years (D.) 21 years
- (51.) Which is the origin source of Narmada river?
 (A.) Sihawa hills (B.) Western Ghats
 (C.) Chhota Nagpur hills (D.) Amarkantak hills
- (52.) Which of the following is the largest and the deepest ocean of the world?
 (A.) Arctic (B.) Atlantic (C.) Indian (D.) Pacific
- (53.) Which country won the prestigious Thomas cup 2022 award?
 (A.) Indonesia (B.) Malaysia (C.) India (D.) Korea
- (54.) Who won the gold medal in javelin throw in Tokyo Olympic 2020?
 (A.) Neeraj Chopra (B.) TieHuyen
 (C.) JanZeleny (D.) Anderson Peters
- (55.) Which of the following International Tennis tournament held in grass court?
 (A.) French open (B.) US open
 (C.) Wimbledon (D.) Australian open
- (56.) Which of the following is responsible for giving colour to human skin?
 (A.) Melanin (B.) Hemoglobin
 (C.) Luciferin (D.) Flavonoids
- (57.) The capital city ofUkrain?
 (A.) Kyiv (B.) Moldawa (C.) Kharkiv (D.) Luhansk
- (58.) If Rahim moves 20 metres in East direction and then turns to his left and then moves 15 metres and then he turns to his right and moves 15 metres. Now, how far is he from starting point?
 (A.) 45 (B.) 50 (C.) 25 (D.) 40
- (59.) Choose the figure which is different from the rest.



- (A.) 1 (B.) 2 (C.) 3 (D.) 4



A Vision of Victory

V V ACADEMY

➤ RPF ➤ RRB GROUP - D ➤ POSTAL ➤ SI/CONSTABLE

Address : Near Chuttugunta Signals, Eluru Road, VJA 2. Cell : 9985525552, 8977525552

www.vvacademy.com



(60.) A sum of money amounts to Rs. 9800 after 5 years and Rs.12005 after 8 years at the same rate of simple interest. The rate of interest per annum is
 (A.) 9% (B.) 10% (C.) 11% (D.) 12%

(61.) A sum of money at simple interest amounts to Rs. 2240 in 2 years and to Rs. 2600 in 5 years. What is the principle amount?
 (A.) 1000 (B.) 1500 (C.) 2000 (D.) 2500

(62.) Average of five numbers is 27. If one number is excluded the average becomes 25. The excluded number is
 (A.) 35 (B.) 45 (C.) 55 (D.) 65

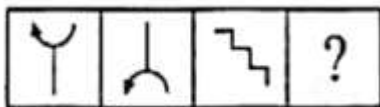
(63.) The average of 50 numbers is 38. If two numbers namely 45 and 55 are discarded, the average of the remaining numbers is:
 (A.) 37.5 (B.) 32.5 (C.) 35 (D.) 36

(64.) Parasnath hills are found in which state?

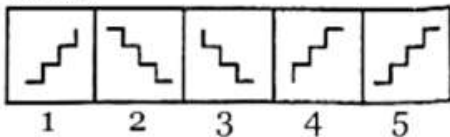
(A.) Tamil Nadu (B.) Karnataka (C.) Jharkhand (D.) Odisha

(65.) Select a suitable figure from the Answer figures that would replace the question mark (?)

Problem Figures:

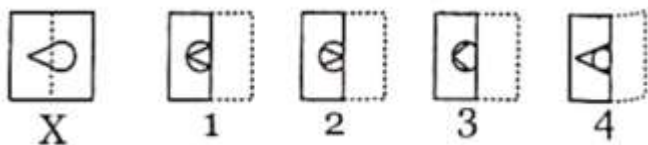


ANSWER



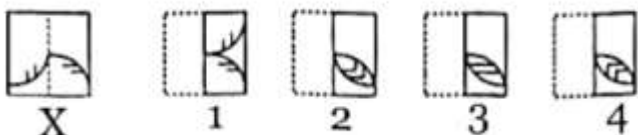
(A.) 1 (B.) 2 (C.) 3 (D.) 4

(66.) Find out from amongst the four alternatives as to how the pattern would appear when the transparent sheet is folded at the dotted line.



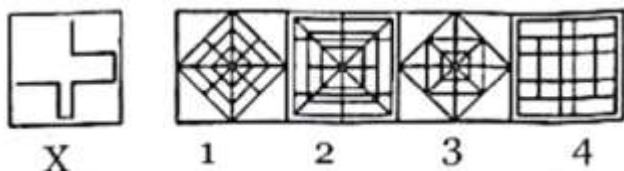
(A.) 1 (B.) 2 (C.) 3 (D.) 4

(67.) Find out from amongst the four alternatives as to how the pattern would appear when the transparent sheet is folded at the dotted line.



(A.) 1 (B.) 2 (C.) 3 (D.) 4

(68.) Find out the alternative figure which contains figure (x) as its part





A Vision of Victory

VV ACADEMY

RPF > RRB GROUP - D > POSTAL > SI/CONSTABLE

Address : Near Chuttugunta Signals, Eluru Road, VJA 2. Cell : 9985525552, 8977525552

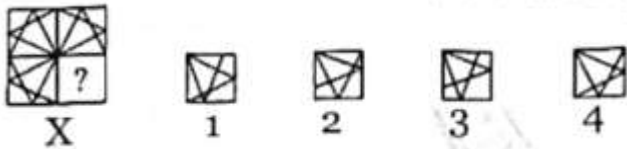
www.vvacademy.com



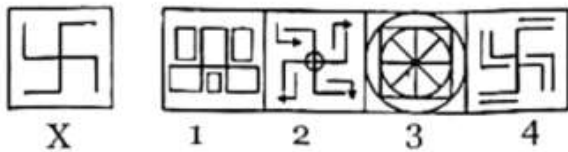
- (69.) Identify the figure that completes the pattern
- (A.) 1 (B.) 2 (C.) 3 (D.) 4



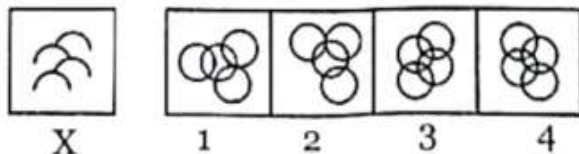
- (70.) Identify the figure that completes the pattern
- (A.) 1 (B.) 2 (C.) 3 (D.) 4



- (71.) $3640 \div 14 \times 16 + 340 = ?$
 (A.) 3500 (B.) 4500 (C.) 1500 (D.) 2500
- (72.) $3034 - (1002 / 20.04) = ?$
 (A.) 2984 (B.) 2983 (C.) 2982 (D.) 2981
- (73.) What is 15 percent of 34=
 (A.) 4.10 (B.) 5.10 (C.) 3.10 (D.) 2.10
- (74.) Out of 450 students of a school, 325 play football, 175 play cricket and 50 neither play football nor cricket. How many students play both football and cricket?
 (A.) 75 (B.) 100 (C.) 125 (D.) 150
- (75.) QAR, RAS, SAT, TAU, ___
 (A.) TAT (B.) UAT (C.) TAS (D.) UAV
- (76.) Find out the alternative figure which contains figure (x) as its part



- (77.) 21 goats eat as much as 15 cows. How many goats eat as much as 35 cows?
 (A.) 38 (B.) 49 (C.) 37 (D.) 41
- (78.) 12 men or 18 women can do a piece of work in 14 days, then how long will 8 men and 16 women take to finish the work?
 (A.) 9 days (B.) 10 days (C.) 12 days (D.) 14 days
- (79.) Find out the alternative figure which contains figure (x) as its part



- (80.) Choose the figure which is different from the rest.
- (A.) 1 (B.) 2 (C.) 3 (D.) 4



A Vision of Victory

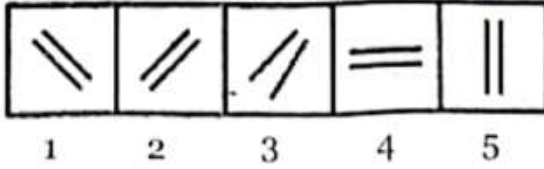
www.vvacademy.com

V V ACADEMY

➤ RPF ➤ RRB GROUP - D ➤ POSTAL ➤ SI/CONSTABLE



Address : Near Chuttugunta Signals, Eluru Road, VJA 2. Cell : 9985525552, 8977525552



- (A.) 1 (B.) 2 (C.) 3 (D.) 4

(81.) Choose the alternative which is closely resembles the water-image of the given combination


FAMILY

- (1) ЯИМІЛΛ (2) ЯИМІΛΛ
 (3) ЯИМІΛΛ (4) ЯИМІΛΛ

- (A.) 1 (B.) 2 (C.) 3 (D.) 4

(82.) Select a suitable figure from the answer figures that would replace the question mark (?)

Problem Figures:




Answer Figures:



- 1 2 3 4 5
 (A.) 1 (B.) 2 (C.) 3 (D.) 4

(83.) Select the alternative which represents three out of the five alternative figures which when fitted into each other would form a complete square.



- (A.) 245 (B.) 235 (C.) 123 (D.) 145

(84.) Choose the alternative which is closely resembles the mirror image of the given combination

EFFECTIVE

- (1) EFFITCEFFE (2) EVITCEFFE
 (3) EFFITCEFFE (4) EVITCEFFE

- (A.) 1 (B.) 2 (C.) 3 (D.) 4

(85.) Select a suitable figure from the four alternatives that would complete the figure matrix



A Vision of Victory

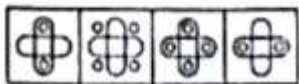

www.vvacademy.com

VV ACADEMY

➤ RPF ➤ RRB GROUP - D ➤ POSTAL ➤ SI/CONSTABLE



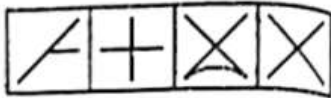
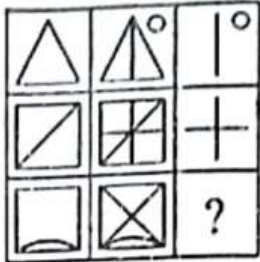
Address : Near Chuttugunta Signals, Eluru Road, VJA 2. Cell : 9985525552, 8977525552



(1) (2) (3) (4)

(A.) 1 (B.) 2 (C.) 3 (D.) 4

(86.) Select a suitable figure from the four alternatives that would complete the figure Matrix



(1) (2) (3) (4)

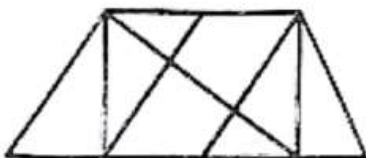
(A.) 1 (B.) 2 (C.) 3 (D.) 4

(87.) Find the number of triangles in the given figure



(A.) 28 (B.) 32 (C.) 36 (D.) 40

(88.) Find the number of triangles in the given figure



(A.) 8 (B.) 10 (C.) 12 (D.) 14

(89.) Evaluate 28% of 450+ 45% of 280

(A.) 232 (B.) 242 (C.) 252 (D.) 262

(90.) P, Q, R subscribe Rs. 50,000 for a business. P subscribes Rs. 4000 more than Q and Q Rs. 5000 more than R. Out of a total profit of Rs. 25,000, what will be P's share?

(A.) Rs 8400 (B.) Rs 10,500 (C.) Rs 13,600 (D.) Rs 14,700



- (91.) A man buys a cycle for Rs. 1400 and sells it at a loss of 15%. What is the selling price of the cycle?
(A.) 1090 (B.) 1160 (C.) 1190 (D.) 1202
- (92.) The average of 11 results is 50. If the average of the first six results is 49 and that of the last six is 52, the sixth no. is
(A.) 50 (B.) 56 (C.) 52 (D.) 48
- (93.) A does a work in 1.0 days and B does the same work in 15 days. In how many days they together will do the same work?
(A.) 5 days (B.) 6 days (C.) 7 days (D.) 8 days
- (94.) A and B can together complete a piece of work in 4 days. If A alone can complete the same work in 12 days, in how many days can B alone complete that work?
(A.) 4 days (B.) 5 days (C.) 6 days (D.) 7 days
- (95.) Sakshi can do a piece of work in 20 days. Tanya is 25% more efficient than Sakshi. The number of days taken by Tanya to do the same piece of work is?
(A.) 15 (B.) 16 (C.) 18 (D.) 25
- (96.) 4 mat-weavers can weave 4 mats in 4 days. At the same rate, how many mats would be woven by 8 mat-weavers in 8 days?
(A.) 16 (B.) 12 (C.) 18 (D.) 14
- (97.) The ratio of Vimal's age and Aruna's age is 3:5 and sum of their ages is 80 years. The ratio of their ages after 10 years will be?
(A.) 2:3 (B.) 1:2 (C.) 3:2 (D.) 3:5
- (98.) Which of the following is the highest trophic level in an ecosystem?
(A.) Omnivores (B.) Carnivores
(C.) Herbivores (D.) Decomposers
- (99.) Who has been elected as president of India recently?
(A.) Kiren Rijju (B.) Yashwant Sinha
(C.) Ramnath Kovind (D.) DMurmu
- (100.) Solve $(12/3 + 16/4)$ of 20
(A.) 12 (B.) 24 (C.) 80 (D.) 160



JHARKAND CIRCLE-PA/SA EXAM -2022

ANSWER

(1.)	C	(2.)	B	(3.)	C	(4.)	B	(5.)	B
(6.)	D	(7.)	D	(8.)	C	(9.)	B	(10.)	D
(11.)	B	(12.)	B	(13.)	A	(14.)	C	(15.)	B
(16.)	C	(17.)	A	(18.)	B	(19.)	A	(20.)	B
(21.)	B	(22.)	C	(23.)	D	(24.)	C	(25.)	B
(26.)	B	(27.)	A	(28.)	A	(29.)	C	(30.)	B
(31.)	D	(32.)	A	(33.)	D	(34.)	D	(35.)	C
(36.)	C	(37.)	D	(38.)	A	(39.)	C	(40.)	B
(41.)	A	(42.)	A	(43.)	B	(44.)	D	(45.)	C
(46.)	A	(47.)	D	(48.)	C	(49.)	C	(50.)	C
(51.)	D	(52.)	D	(53.)	C	(54.)	A	(55.)	C
(56.)	A	(57.)	A	(58.)	A	(59.)	A	(60.)	D
(61.)	C	(62.)	A	(63.)	A	(64.)	C	(65.)	D
(66.)	A	(67.)	D	(68.)	D	(69.)	C	(70.)	D
(71.)	B	(72.)	A	(73.)	B	(74.)	B	(75.)	D
(76.)	A	(77.)	B	(78.)	A	(79.)	C	(80.)	C
(81.)	D	(82.)	B	(83.)	A	(84.)	A	(85.)	B
(86.)	D	(87.)	C	(88.)	D	(89.)	C	(90.)	B
(91.)	C	(92.)	B	(93.)	B	(94.)	C	(95.)	B
(96.)	A	(97.)	A	(98.)	A	(99.)	D	(100.)	D