



### **JAMMU & KASHMIR CIRCLE-PA/SA EXAM -2022**

- (1.) Indian Postal Orders are available in how many denominations?  
(A.) 6 (B.) 5 (C.) 8 (D.) 7
- (2.) Who can authorize prepayment of Postage in cash?  
(A.) DG Post (B.) Secretary post  
(C.) Head of the Circle (D.) Head of the Division
- (3.) Which of the following need not be insured when posted?  
(A.) Coins (B.) Bank Notes  
(C.) Bullion (D.) None of these
- (4.) What are the charges for window delivery of an article?  
(A.) Equal to the postage (B.) Double than postage  
(C.) Rs 10 (D.) No charges
- (5.) Identity cards are issued by which type of post offices?  
(A.) Head post office (B.) Sub post office  
(C.) Branch post office (D.) All post office
- (6.) Post Restante article (except value payable) can be kept in the post office for how much time period?  
(A.) One week (B.) One month  
(C.) One year (D.) One fortnight
- (7.) Redirection charged on which of the following articles?  
(A.) Registered letters (B.) Speed post  
(C.) parcels (D.) None of these
- (8.) What can be the maximum weight of a registered parcel if posted at or addressed to a Branch post office?  
(A.) 4 Kg (B.) 5Kg (C.) 10 Kg (D.) 20 Kg
- (9.) For which of the following articles registration is compulsory?  
(A.) Insured article (B.) Parcels exceeding 4 kg  
(C.) Value payable article (D.) All of these
- (10.) To whom void money orders are paid?  
(A.) In charity (B.) Welfare Fund  
(C.) Credited to CentralGovt (D.) None of these
- (11.) What can be the maximum weight of a letter?  
(A.) 50 gram (B.) 100 gram (C.) 1kg (D.) 2kg
- (12.) What is the system available for despatch/receipt of special bags of printed papers to/from addressees/senders in foreign countries?  
(A.) Special Bag System (B.) Mini Bag System  
(C.) Bulk Bag System (D.) Short Bag System
- (13.) What is the maximum weight limit of a packet of literature for the blind?  
(A.) 4 kg (B.) 5kg (C.) 10 kg (D.) 7 kg
- (14.) What is the maximum weight for an Aerogramme?  
(A.) 5 grams (B.) 6 grams (C.) 8 grams (D.) 10 grams
- (15.) What is the meaning of Avis de reception?  
(A.) Postage prepaid (B.) Postage Unpaid  
(C.) Advice of Delivery (D.) Receipt for Booking
- (16.) What is the maximum limit up to which an international article can be insured in India?  
(A.) Rs 200 (B.) Rs 10000



- (C.) Rs 1000 (D.) No upper limit for Insurance
- (17.) What is the meaning of Ne pasnexpeder in case of foreign parcels?  
(A.) Treat as abandoned (B.) Deliver to another person  
(C.) Send back (D.) Do not redirect
- (18.) What is the meaning of Ne pasnexpeder in case of foreign parcels?  
(A.) By ship (B.) By Airmail  
(C.) By surface mail (D.) None of these
- (19.) Which form is annexed with the articles being exported through parcel post under the system of "Draw back on customs duty"?  
(A.) Form A (B.) Form B (C.) Form C (D.) Form D
- (20.) What is the time limit for submitting complaints and enquiries regarding articles of letter mail and parcel mail in foreign post?  
(A.) One month (B.) One year  
(C.) Six months (D.) No time limit prescribed
- (21.) Memorandum of distribution of work in the post office is submitted by the Postmaster for approval of the Divisional Head in which of the following forms?  
(A.) Form Ms-11 (B.) Form Ms-12  
(C.) Form Ms-53 (D.) Form Ms-88
- (22.) What is the preservation period of the invoices of the articles received from the stores Depot?  
(A.) 111 years (B.) 3 years (C.) 1 year (D.) Permanent
- (23.) So daily account is prepared in which form?  
(A.) ACG-1 (B.) ACG-67 (C.) ACG-36 (D.) ACG-22
- (24.) Treasury passbook is maintained by the sub post office situated at treasury sub-treasury station or having transaction with bank, in which form?  
(A.) ACG-8 (B.) ACG-13 (C.) ACG-14 (D.) ACG-37
- (25.) What is the minimum balance in POSB savings account as per latest orders?  
(A.) Rs 50 (B.) Rs 100 (C.) Rs 500 (D.) Rs 1000
- (26.) Which of the following stamps and seals are supplied to every set in RMS?  
(A.) Date Stamp (B.) Name Stamp  
(C.) Date seal (D.) All of them
- (27.) Which of the following offices does not keep any stock of Bags?  
(A.) District Bag Office (B.) Central Bag Office  
(C.) Circle bag office (D.) Post Office
- (28.) A post office or sorting office or section which exchanges mail with offices in foreign countries is known as what?  
(A.) Office of transit (B.) Foreign Mail section  
(C.) Office of Exchange (D.) Foreign Mail Agency
- (29.) What should be examined when an ordinary parcel is received for despatch to a foreign country?  
(A.) Good Outward condition (B.) Limits of size  
(C.) Limits of weight (D.) All of them
- (30.) Which of the following is maintained to tally the physical stock of bags with the closing balance of bags?  
(A.) Bag Register (B.) Bag Manual  
(C.) Bag Tally (D.) Day Bag Book
- (31.) When was PLI started by Department of Posts?  
(A.) 1st February, 1884 (B.) 1st February, 1885



- (C.) 1st March, 1884 (D.) 1st March, 1885
- (32.) What is the age limit for subscribing pradhan mantri jeevan jyoti beema yojna (PMJJBY)?  
 (A.) 18 to 55 years (B.) 19 to 55 years  
 (C.) 18 to 45 years (D.) 18 to 50 years
- (33.) How many pages are there in SB 5 (a) pass book?  
 (A.) 4 pages (B.) 10 pages (C.) 12 pages (D.) 6 pages
- (34.) Senior citizen savings scheme account can be opened in the multiple of which denomination?  
 (A.) Rs 1000 (B.) Rs 100  
 (C.) Rs 500 (D.) None of these
- (35.) The Anticipated Endowment Assurance in PLI is known as which of the following?  
 (A.) Sumangal (B.) Santosh  
 (C.) Suvidha (D.) None of the above
- (36.) What should be balance in IPPB saving account at the end of the day?  
 (A.) Rs 1Lakh (B.) Rs 2Lakh (C.) No limit (D.) Rs 5Lakh
- (37.) Which of the following services are available in the post offices?  
 (A.) Adhaar updation (B.) Savings Book  
 (C.) PMJJBY (D.) All of these
- (38.) What is the minimum balance for IPPB savings Account?  
 (A.) Rs. 100 (B.) Rs. 500  
 (C.) Rs. 1000 (D.) No minimum Balance
- (39.) Which of the following services are available in any of the Post Offices?  
 (A.) Passport service (B.) Adhaar Enrolment  
 (C.) Common Service Centre (D.) All of these
- (40.) How much fee is charged for transfer of a POSB Account from one post office to another post office?  
 (A.) Rs 100 (B.) Rs 1 (C.) Rs 20 (D.) No fees
- (41.) When was IT modernization project of Department of posts approved by government of India?  
 (A.) November, 2012 (B.) April, 2012  
 (C.) October, 2012 (D.) September, 2012
- (42.) The Primary Data Centre of CBS has been established in which of the following cities?  
 (A.) Navi Mumbai (B.) Mysore  
 (C.) Kolkata (D.) Chennai
- (43.) How many segments are there in It modernization project of Department of Posts?  
 (A.) 6 (B.) 5 (C.) 7 (D.) 8
- (44.) Who is the Vendor of CSI in IT modernization project?  
 (A.) Infosys (B.) ICS  
 (C.) Sify (D.) None of the above
- (45.) 'HRMS' module is a part of which of the following?  
 (A.) Finacle (B.) Mccamish  
 (C.) CSI (D.) None of the above
- (46.) Which software is being used in Core insurance solutions by Department of posts?  
 (A.) Finacle (B.) Mccamish (C.) Oracle (D.) Android
- (47.) Where the central processing centers of PLI have been established?  
 (A.) In each SO (B.) In each HO  
 (C.) In Circle office (D.) In Division Office
- (48.) What is the full form of "QR" in "QR Code"?



- (A.) Quick Ration (B.) Quick Rate  
(C.) Quick Result (D.) Quick Response
- (49.) Which vendor is providing network to Department of Posts?  
(A.) Airtel (B.) Jio (C.) Vodafone (D.) Sify
- (50.) What should be the minimum bandwidth of primary network in any post office?  
(A.) 128 kbps (B.) 256 kbps (C.) 512 kbps (D.) 1 mbps
- (51.) Which latitude passes through almost middle of India?  
(A.) Tropic of capricorn (B.) Equator  
(C.) Tropic of Cancer (D.) None of these
- (52.) When did constituent assembly adopt National Anthem?  
(A.) 20 January 1950 (B.) 21 May 1949  
(C.) 24 January 1950 (D.) 13 November 1949
- (53.) Which of the following cities never experiences vertical rays of the sun during noon?  
(A.) Chennai (B.) Mumbai (C.) Mangalore (D.) New Delhi
- (54.) In which state is the folk painting 'Madhubani' popular?  
(A.) Assam (B.) West Bengal  
(C.) Bihar (D.) Odisha
- (55.) From where did Mahatma Gandhi start his historic Dandi March?  
(A.) Sabarmati Ashram (B.) Dandi  
(C.) Chauri Chaura (D.) Champaran
- (56.) The famous artist 'Bismillah Khan' was associated with which of the following?  
(A.) Gultar (B.) Tabla (C.) Shehnai (D.) Flute
- (57.) When was Reserve Bank of India established?  
(A.) 1st April, 1947 (B.) 1st April, 1935  
(C.) 1st April, 1952 (D.) 1st April, 1937
- (58.) How many times financial emergency under Article 360 of the Indian constitution has been declared in India?  
(A.) Never (B.) 19 times (C.) 21times (D.) Only once
- (59.) The study of phenomenon at very low temperatures is called what?  
(A.) Heat transfer (B.) Morphology  
(C.) Cryogenics (D.) Crystallography
- (60.) The words 'Socialist' and 'Secular' were added to the preamble of the Indian constitution by which constitutional amendment?  
(A.) 84-amendment (B.) 96-amendment  
(C.) 73-amendment (D.) 42-amendment
- (61.) A takes twice as much time as B or thrice as much time as C to finish a piece of work, Working together they can finish the work in 7 days. Working alone in how many days B can finish the same work?  
(A.) 4 days (B.) 8 days (C.) 6 days (D.) 12 days
- (62.) A student multiplied a number by  $\frac{3}{5}$  instead of  $\frac{5}{3}$ . What is the percentage error in the calculation?  
(A.) 54% (B.) 64% (C.) 74% (D.) 44%
- (63.) A man got 10% increase in his salary. If his new salary is Rs. 1,54,000, what is his original salary?  
(A.) Rs. 1,30,000 (B.) Rs. 1,40,000  
(C.) Rs. 1,35,000 (D.) Rs. 1,45,000
- (64.) Juhi sells a washing machine for Rs. 13500 at a loss of 20%, what was the price at which she bought it?  
(A.) Rs. 14875 (B.) Rs. 12875 (C.) Rs. 16875 (D.) Rs. 15875





- (65.) On selling 17 balls at Rs. 720, there is a loss equal to the cost price of 5 balls. What is the cost price of one ball?  
 (A.) Rs 45 (B.) Rs 50 (C.) Rs 55 (D.) Rs 60
- (66.) How much time will it take for an amount of Rs 450 to yield Rs 81 as interest at rate of 4.5% per annum of simple interest?  
 (A.) 3.5 years (B.) 4.5 years (C.) 4 years (D.) 5 years
- (67.) During blood donation camp in a school 60% of the total students donated blood. If the number of students who did not donate blood was 480 find the total number of students in the school:  
 (A.) 1500 (B.) 1400 (C.) 1100 (D.) 1200
- (68.) The cost price of 20 articles is the same as the selling price of X articles. If the profit is 25%, then what is the value of X?  
 (A.) 15 (B.) 25 (C.) 18 (D.) 16
- (69.) If selling price is doubled, the profit triples. What is the profit percent?  
 (A.) 90% (B.) 100% (C.) 105% (D.) 110%
- (70.) The average weight of A, B and C is 45 kg. If the average weight of A and B be 40 kg and that of B and C be 43 kg, then what is the weight of B?  
 (A.) 38 kg (B.) 31kg (C.) 42 kg (D.) 41kg
- (71.) A shopkeeper purchased 200 bulbs for Rs 10 each. However 5 bulbs were fused and had to be thrown away. The remaining was sold at Rs 12 each what is the profit or loss percentage?  
 (A.) 17% loss (B.) 16% loss (C.) 17% profit (D.) 16% profit
- (72.) A can do a certain work in the same time in which B and C together can do it. If A and B together could do it in 10 days and C alone in 50 days, then in how many days B alone can do it?  
 (A.) 15 days (B.) 20 days (C.) 25 days (D.) 30 days
- (73.) If Rs. 782 is divided into three parts in proportion of  $\frac{1}{2}$ ,  $\frac{2}{3}$ ,  $\frac{3}{4}$  then what will be the first part?  
 (A.) 190 (B.) 220 (C.) 204 (D.) 230
- (74.) 4 men and 6 women can complete a work in 8 days, while 3 men and 7 women can complete it in 10 days. In how many days will 10 women complete it?  
 (A.) 30 days (B.) 35 days (C.) 40 days (D.) 45 days
- (75.) What is the value of  $3+6\div 3\times 2$ ?  
 (A.) 7 (B.) 6 (C.) 4 (D.) 1.5
- (76.) What is the value of  $5\times 4-2\times 3+16\div 4$ ?  
 (A.) 10 (B.) 11 (C.) 18 (D.) 34
- (77.) What is the value of  $(3-2\times 7)+(5\times 3+2)$ ?  
 (A.) 8 (B.) 24 (C.) 186 (D.) 536
- (78.) A person crosses 600 meter long street in 5 minutes. What is his speed in kilometre per hour?  
 (A.) 3.6 km/h (B.) 8.4 km/h (C.) 7.2 km/h (D.) 10 km/h
- (79.) Cost of 24 pens is Rs 96. What is the cost of 16 such pens?  
 (A.) Rs 66 (B.) Rs 64 (C.) Rs 62 (D.) Rs 68
- (80.) A man pays Rs 13000 as rent for 4 months. How much does he pay for the whole year, if rent per month remains the same?  
 (A.) Rs 48000 (B.) Rs 39000 (C.) Rs 46000 (D.) Rs 40000
- (81.) Look at the series: 12,11,13,12,14,11,13...what number should come next?  
 (A.) 10 (B.) 16 (C.) 13 (D.) 15
- (82.) Select a suitable figure from the four figures that would complete the figure matrix.



A Vision of Victory

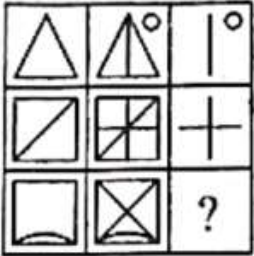
www.vvacademy.com

# VV ACADEMY

➤ RPF ➤ RRB GROUP - D ➤ POSTAL ➤ SI/CONSTABLE

Address : Near Chuttugunta Signals, Eluru Road, VJA 2. Cell : 9985525552, 8977525552

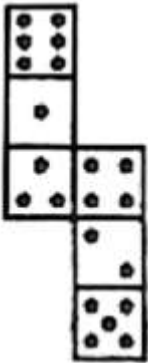




(1) (2) (3) (4)

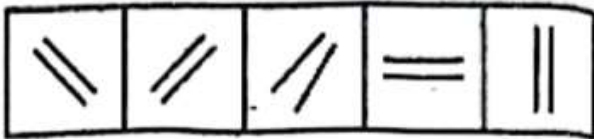
(A.) 1 (B.) 4 (C.) 3 (D.) 2

(83.) How many dots lie opposite to the face having three dots, when the given figure is folded to form a cube?



(A.) 2 (B.) 5 (C.) 4 (D.) 6

(84.) Choose the figure which is different from the rest



(A.) 1 (B.) 3 (C.) 4 (D.) 5

(85.) Choose the figure which is different from the rest



(A.) 2 (B.) 4 (C.) 5 (D.) 3

(86.) Choose the alternative which closely resembles the mirror image of the given combination

TARAIN1014A

(1) AƆ1014IARAT

(2) AƆ1014IARAT

(3) AƆ1014IARAT

(4) AƆ1014IARAT

(A.) 3 (B.) 1 (C.) 2 (D.) 4

(87.) Identify the figure that completes the pattern?



A Vision of Victory

**V V ACADEMY**

➤ RPF ➤ RRB GROUP - D ➤ POSTAL ➤ SI/CONSTABLE

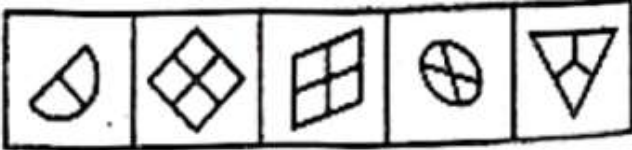
Address : Near Chuttugunta Signals, Eluru Road, VJA 2. Cell : 9985525552, 8977525552

www.vvacademy.com





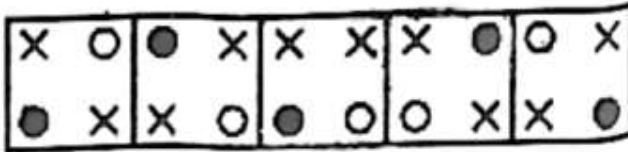
- (88.) Choose the figure which is different from the rest
- (A.) 3                      (B.) 1                      (C.) 2                      (D.) 4



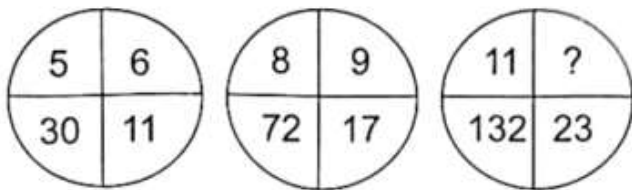
- (89.) Choose the figure which is different from the rest
- (A.) 3                      (B.) 4                      (C.) 2                      (D.) 5



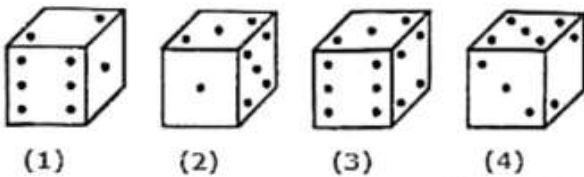
- (90.) Choose the figure which is different from the rest
- (A.) 3                      (B.) 5                      (C.) 1                      (D.) 4



- (91.) What will complete the series given below? SCD, TEF, UGH, ..... WKL
- (A.) IJT                      (B.) VIJ                      (C.) CMN                      (D.) UJI
- (92.) Which number can be placed at the sign of Interrogation (?)?



- (93.) If the total number of dots on opposite faces of a cubical block is always 7, then which of the following is the correct figure?



- (94.) Select a suitable figure from the four alternatives that would complete the figure matrix?
- (A.) 1                      (B.) 4                      (C.) 2                      (D.) 3



A Vision of Victory

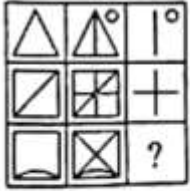
www.vvacademy.com

# VV ACADEMY

➤ RPF ➤ RRB GROUP - D ➤ POSTAL ➤ SI/CONSTABLE

Address : Near Chuttugunta Signals, Eluru Road, VJA 2. Cell : 9985525552, 8977525552

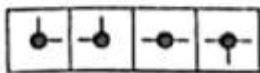
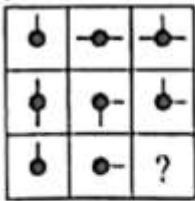




(1) (2) (3) (4)

- (A.) 1 (B.) 4 (C.) 2 (D.) 3

(95.) Select a suitable figure from the four alternatives that would complete the figure matrix?



(1) (2) (3) (4)

- (A.) 1 (B.) 4 (C.) 2 (D.) 3

(96.) If in a certain language MADRAS is coded as NBESBT. How is BOMBAY is coded in that language?

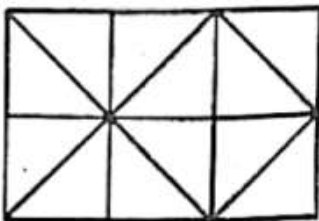
- (A.) CPNCBX (B.) CPNCBZ (C.) CPOCBZ (D.) CQOCBZ

(97.) If number 2 is in bottom, then which number is on top?



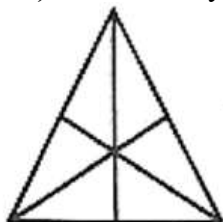
- (A.) 5 (B.) 3 (C.) 1 (D.) 6

(98.) How many squares are there in the figure given below?



- (A.) 6 (B.) 9 (C.) 7 (D.) 10

(99.) How many triangles are there in the figure given below?



- (A.) 16 (B.) 13 (C.) 9 (D.) 7

(100.) Choose the alternative which closely resembles the mirror image of the given combination.



**MAGAZINE**

(1) MAGAZINE

(2) MAGAZINE

(3) MAGAZINE

(4) MAGAZINE

(A.) 4

(B.) 2

(C.) 3

(D.) 1

**JAMMU & KASHMIR CIRCLE-PA/SA EXAM -2022****ANSWER**

(1.)	A	(2.)	C	(3.)	D	(4.)	D	(5.)	A
(6.)	B	(7.)	C	(8.)	C	(9.)	D	(10.)	C
(11.)	D	(12.)	C	(13.)	D	(14.)	A	(15.)	C
(16.)	B	(17.)	D	(18.)	B	(19.)	D	(20.)	B
(21.)	A	(22.)	B	(23.)	D	(24.)	A	(25.)	C
(26.)	D	(27.)	B	(28.)	C	(29.)	D	(30.)	D
(31.)	A	(32.)	D	(33.)	A	(34.)	A	(35.)	A
(36.)	B	(37.)	D	(38.)	D	(39.)	D	(40.)	A
(41.)	A	(42.)	A	(43.)	D	(44.)	B	(45.)	C
(46.)	B	(47.)	B	(48.)	D	(49.)	D	(50.)	C
(51.)	C	(52.)	C	(53.)	D	(54.)	C	(55.)	A
(56.)	C	(57.)	B	(58.)	A	(59.)	C	(60.)	D
(61.)	C	(62.)	B	(63.)	B	(64.)	C	(65.)	D
(66.)	C	(67.)	D	(68.)	D	(69.)	B	(70.)	B
(71.)	C	(72.)	C	(73.)	C	(74.)	C	(75.)	A
(76.)	C	(77.)	B	(78.)	C	(79.)	B	(80.)	B
(81.)	A	(82.)	B	(83.)	D	(84.)	B	(85.)	A
(86.)	D	(87.)	A	(88.)	D	(89.)	C	(90.)	C
(91.)	B	(92.)	B	(93.)	C	(94.)	B	(95.)	A
(96.)	B	(97.)	D	(98.)	B	(99.)	A	(100.)	A