



HARYANA CIRCLE-PA/SA EXAM -2022

- (1.) MAC binding is commonly used with reference to which segment of IT Modernization project?
(A.) CSI (B.) FSI (C.) NI (D.) CM
- (2.) In term "T-Code", alphabet T represents which of the following?
(A.) Transaction (B.) Transfer (C.) Technology (D.) Table
- (3.) IT Modernization project has been divided into how many segments?
(A.) Five (B.) Six (C.) Seven (D.) Eight
- (4.) In reference with the IT Modernization project, the term PMU refers to?
(A.) Project Management Unit (B.) Power Management Unit
(C.) Pressure Measuring Unit (D.) Payment Method Updator
- (5.) Term "HFNRPT" is used in which of the following platform?
(A.) Finacle (B.) Macmish (C.) SAP (D.) DPMS
- (6.) With respect to international speed post custom forms have nomenclature as
(A.) CN-22 and CN-23 (B.) CN-50 and CN-51
(C.) CN-75 and CN-76 (D.) CN-88 and CN-89
- (7.) "Warehousing Service" is one of the feature of which services offered by India post?
(A.) Speed post (B.) Media Post
(C.) Logistics post (D.) Direct posts
- (8.) From which year Department of posts has offered Internet Banking to POSB customers?
(A.) 2016 (B.) 2017 (C.) 2018 (D.) 2019
- (9.) The annual interest rate applicable on Sukanya Samridhi Scheme Account (SSA) for second quarter of FY 2022-23 is?
(A.) 6.9% (B.) 7.1% (C.) 7.4% (D.) 7.6%
- (10.) In which year India Post Payments Bank (IPPB) was formally launched by Prime Minister of India?
(A.) 2014 (B.) 2016 (C.) 2018 (D.) 2020
- (11.) What is the maximum insurance cover (in Rs.) under Pradhan Mantri Suraksha Bima Yojna (PMSBY)?
(A.) 2Lakh (B.) 3Lakh (C.) 4Lakh (D.) 5Lakh
- (12.) Deen Dayal SPARSH Yojna is related to which segment/activity of India post?
(A.) Stamps (B.) Insurance (C.) Banking (D.) Mail
- (13.) In which year Rural Postal Life Insurance (RPLI) was introduced?
(A.) 1884 (B.) 1894 (C.) 1904 (D.) 1995
- (14.) Philatelic Deposit Account (PDA) account can be open with a minimum deposit of how much amount?
(A.) Rs 200 (B.) Rs 500 (C.) Rs 700 (D.) Rs 900
- (15.) How many types of insurance schemes are offered under Rural Postal Life Insurance (RPLI)?
(A.) 2 (B.) 4 (C.) 6 (D.) 8
- (16.) Which one of the following is not part / branch/department of a Head Post Office?
(A.) Mail Branch (B.) Delivery Branch
(C.) Sorting Branch (D.) Loan Branch
- (17.) What is the maximum limit for loose cash remittance between account office and its subordinate offices through departmental employee?
(A.) Rs. 5Lakh (B.) Rs. 10Lakh (C.) Rs. 15Lakh (D.) Rs. 20Lakh
- (18.) The movement of S.O. slip is from?
(A.) Head post Office to Sub Post Office
(B.) Sub Post Office to Branch Post Office



- (C.) Sub post Office to Head Post Office
(D.) Branch Post Office to sub post office
- (19.) "PM CARES for children Scheme 2021" introduced vide SB Order 33/2021 is meant for which category of children?
(A.) Children from Hilly areas
(B.) Children from North East States
(C.) Children from Minority communities
(D.) Children who became orphan during COVID pandemic.
- (20.) Deduction / Non deduction of TDS in SCSS accounts has been clarified by which SB Order?
(A.) SB Order 37/2021 (B.) SB Order 27/2021
(C.) SB Order 17/2021 (D.) SB Order 07/2021
- (21.) Metal Tokens are used by which category of official?
(A.) Selected RMS Official (B.) Circle Office Official Porter
(C.) Regional Office Official. (D.) Postal Division Official
- (22.) Which one is not part/department of Sorting Mail Office?
(A.) Mail (B.) Sorting
(C.) Registration (D.) Philately
- (23.) The Arab Postal union, a restricted union has its headquarters in which city?
(A.) Cairo (B.) Dubai (C.) Muskat (D.) Manama
- (24.) For what purpose the "Trial Notes" are used in International Mail transmission?
(A.) To determine the most favourable route (B.) To determine the minimum postage
(C.) To find out the missing articles (D.) To calculate the custom charge
- (25.) Mail department of sorting Mail Office is head by which authority?
(A.) Head Sorting Assistant (B.) Sorting Assistant
(C.) Registration sorting Assistant (D.) Parcel Sorting Assistant
- (26.) The Head Quarters of Odisha Postal Circle is located in which of the following city?
(A.) Cuttack (B.) Puri
(C.) Bhuvneshwar (D.) Sambalpur
- (27.) The working hours of Night Post Offices are generally fixed by which of the following authority?....
(A.) Head of the Division (B.) Head of the Region
(C.) Head of the Circle (D.) Secretary (posts)
- (28.) Every letter, packet or parcel has to be stamped with the date stamps of at least how many post offices?
(A.) One (B.) Two (C.) Three (D.) Four
- (29.) Generally, stamps should be affixed at which place of the address side of an envelope
(A.) Left hand top corner (B.) Right hand top corner
(C.) Left hand bottom corner (D.) Right hand bottom corner
- (30.) Following two statements be read carefully and choose the correct option given below.
Statement I: Post Box facilities are available in all Post Offices.
Statement II: Post Box facilities are available free of cost
(A.) Both Statements are correct
(B.) Both Statements are incorrect
(C.) Statement I is incorrect and statement II is correct
(D.) Statement I is correct and Statement II is incorrect
- (31.) Which office is responsible for the final disposal of undelivered articles?
(A.) Head Post Offices (B.) Mail Office



- (C.) Returned Letter Office (D.) Postal Store Depot
- (32.) The maximum weight limit for transmission of pattern or sample packets through post office is how many kilograms?
(A.) One Kilogram (B.) Two Kilograms
(C.) Three Kilograms (D.) Four Kilograms
- (33.) Postal Life Insurance (PLI) introduced in which year?
(A.) 1882 (B.) 1883 (C.) 1884 (D.) 1885
- (34.) Which among following is not a special feature of Postal Life Insurance (PLI)?
(A.) Income tax rebate (B.) Loan facility
(C.) Nomination (D.) Low Bonus
- (35.) Which of the following term is not associated with "Philately"?
(A.) Special cover (B.) First day cover
(C.) National saving certificates (D.) Miniature sheets
- (36.) In which year India Joined Asian Pacific Postal Union (APPU)?
(A.) 1970 (B.) 1971 (C.) 1972 (D.) 1973
- (37.) For the purpose of surcharge international articles are divided into how many groups?
(A.) Two (B.) Three (C.) Four (D.) Five
- (38.) For the purpose of fixing surcharges and combined charges on international articles countries are divided into how many groups?
(A.) Four (B.) Five (C.) Six (D.) Seven
- (39.) Examination and assessment of custom duty on inward foreign articles is performed in which office?
(A.) Custom House Office (B.) Foreign Post Office
(C.) General Post Office (D.) Import/Export Office
- (40.) An Arogram should not weigh more than how many grams?
(A.) Three grams (B.) Four grams
(C.) Five grams (D.) Six grams
- (41.) There are two types of custom declaration forms, which one of the following in correct one?
(A.) C-1 and C-2, C-3 (B.) C-1 and C-2, CP-3
(C.) C-1 and CP-2, C-3 (D.) CP-1 and CP-2, CP-3
- (42.) The use of inland letter cards for addressing communication to foreign countries is permissible to which group of countries?
(A.) Bhutan, Bangladesh and Nepal (B.) Sri Lanka, Maldives and Myanmar
(C.) Pakistan, Afghanistan and Iran (D.) Thailand, Lao and Vietnam
- (43.) Printed papers services in the foreign posts generally correspond to which service of inland post?
(A.) Book Packet (B.) Registered newspaper
(C.) Periodicals (D.) Small packets
- (44.) What is the maximum number of International Reply coupons that can be sold to an individual at a time?
(A.) Five (B.) Ten (C.) Twenty (D.) Thirty
- (45.) Which section of Customs Act 1962 empowers custom Department to prohibit import of certain goods?
(A.) Section 11 (B.) Section 21 (C.) Section 31 (D.) Section 41
- (46.) Under IT Modernization Project, Data Centre facility is established in which city?
(A.) Mysuru (B.) Bengaluru
(C.) Navi Mumbai (D.) Chennai
- (47.) Word WAN (Wide Area Network) relates to which segment of IT Moderations project?



A Vision of Victory

www.vvacademy.com

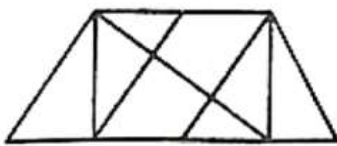
VV ACADEMY

➤ RPF ➤ RRB GROUP - D ➤ POSTAL ➤ SI/CONSTABLE




Address : Near Chuttugunta Signals, Eluru Road, VJA 2. Cell : 9985525552, 8977525552

- (48.) (A.) NI (B.) RH (C.) CM (D.) MOH
 "DARPAN" associated with which of the following?
 (A.) General Post Offices (B.) Head Post Offices
 (C.) Rural Post Offices (D.) Mail Offices
- (49.) EMV chip is used in which of the item?
 (A.) ATM card (B.) RICT Device
 (C.) Barcode scanner (D.) Network Switch
- (50.) Terms "NSP1 and NSP2" are associated with which of the following?
 (A.) Network connectivity (B.) Finacle updates
 (C.) SAP updates (D.) ATM cash management
- (51.) 5 buses carry 250 passengers. How many passengers can be carried by 8 such buses?
 (A.) 300 (B.) 350 (C.) 400 (D.) 450
- (52.) Calculate the final value of 60% of 80?
 (A.) 42 (B.) 48 (C.) 56 (D.) 64
- (53.) A cricketer has a average score of 50 runs in nine innings. Finde out how many runs are to be scored by him in the tenth innings to raise the average score to 52?
 (A.) 60 (B.) 70 (C.) 80 (D.) 90
- (54.) A man completes a journey in 10 hours. He travels first half of the journey at the rate of 21 km/hr and second half at the rate of 24 km/hr. Find the total journey in km?
 (A.) 220 (B.) 224 (C.) 230 (D.) 234
- (55.) A shopkeeper bought 100 oranges and 100 bananas. He found 15% of oranges and 8% of bananas were rotten. Find the percentage of fruits in good condition?
 (A.) 80.5% (B.) 85.5% (C.) 88.5% (D.) 90.5%
- (56.) What will be the next number?
 7, 10, 8, 11, 9, 12,.....?
 (A.) 7 (B.) 10 (C.) 12 (D.) 13
- (57.) Look at this series: 53, 53, 40, 40, 27,27,.... what number should come next?
 (A.) 13 (B.) 14 (C.) 40 (D.) 53
- (58.) Find the number of triangles in the given figure



- (A.) 8 (B.) 10 (C.) 12 (D.) 14
 (59.) How many rectangles are there in the figure given below?



- (A.) 16 (B.) 18 (C.) 20 (D.) 22
 (60.) Identify the figure that completes the pattern.



- (X) (1) (2) (3) (4)

A Vision of Victory


www.vvacademy.com

VV ACADEMY

➤ RPF ➤ RRB GROUP - D ➤ POSTAL ➤ SI/CONSTABLE

Address : Near Chuttugunta Signals, Eluru Road, VJA 2. Cell : 9985525552, 8977525552

(A.) 1 (B.) 2 (C.) 3 (D.) 4
 (61.) Select the alternative which represents three out of the five alternative figures which when fitted into each other would form a complete square.

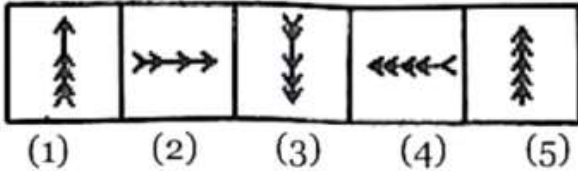


(A.) 124 (B.) 345 (C.) 123 (D.) 135
 (62.) Choose the alternative which is closely resembles the mirror image of the given combination.

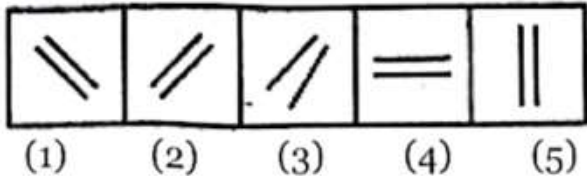
MALAYALAM

- (1) MALAYALAM (2) MAJAYAJAM
 (3) MAJAYAM (4) MAGAYAGAM

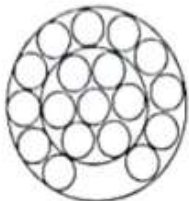
(A.) 1 (B.) 2 (C.) 3 (D.) 4
 (63.) Choose the figure which is different from the rest



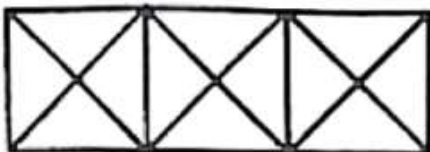
(A.) 1 (B.) 2 (C.) 4 (D.) 5
 (64.) Choose the figure which is different from the rest.



(A.) 1 (B.) 2 (C.) 3 (D.) 5
 (65.) How many circles in the figure?



(A.) 20 (B.) 21 (C.) 22 (D.) 23
 (66.) Count the number of triangles in the given figure.



(A.) 24 triangles (B.) 28 triangles (C.) 32 triangles (D.) 36 triangles
 (67.) Which word does NOT belong with the others?

(A.) Inch (B.) Foot (C.) Gram (D.) Meter
 (68.) SCD, TEF, UGH, _?_WKL



A Vision of Victory

V V ACADEMY

➤ RPF ➤ RRB GROUP - D ➤ POSTAL ➤ SI/CONSTABLE

Address : Near Chuttugunta Signals, Eluru Road, VJA 2. Cell : 9985525552, 8977525552

www.vvacademy.com

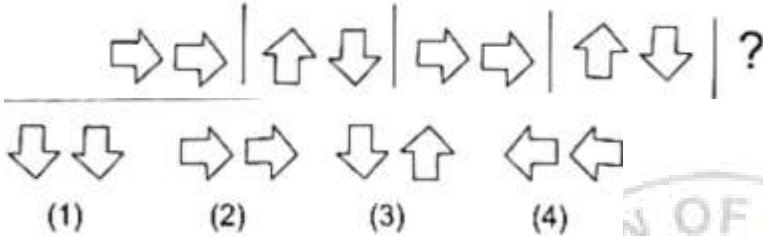


(69.) (A.) VIJ (B.) CNM (C.) UJI (D.) IJT
CMM, EOO, GQQ,_, KUU

(70.) (A.) GRR (B.) GSS (C.) ISS (D.) ITT
Complete the series?



(71.) (A.) 1 (B.) 2 (C.) 3 (D.) 4
Complete the series?



(72.) (A.) 1 (B.) 2 (C.) 3 (D.) 4
Look at this series: F2, _ ? D8, C16, B32
What number should fill the blank?

(A.) G3 (B.) G4 (C.) E3 (D.) E4

(73.) (A.) XVI (B.) XVII (C.) XVIII (D.) XIX
Look at this series: V, VIII, XI, XIV, _ ? _ XX what number should fill the blank?

(74.) (A.) Tailor (B.) Butten (C.) Sewing (D.) Thread
Pen is to poet as needle is to?

(75.) (A.) 1/3 (B.) 1/6 (C.) 1/8 (D.) 1/9
Look at this series 2, 1, (1/2), (1/4), what number should come next?

(76.) (A.) Mizoram (B.) Tripura (C.) Nagaland (D.) Manipur
Which one of the following Indian state does not share its boundary with Myanmar?

(77.) (A.) Jaipur (B.) Ajmer (C.) Nagaland (D.) Kota
Which one of following city is capital of Rajasthan?

(78.) (A.) Sh. Om Birla (B.) Sh.Kapil Sibal
(C.) Sh.Anurag Singh Thakur (D.) Sh.Piyush Goyal
Who is the speaker of present Lok Sabha?

(79.) (A.) Rural area local bodies (B.) Hilly area administrative bodies
(C.) Tribal area administrative bodies (D.) Urban area local bodies
Municipal Corporation is associated with which administrative set up?

(80.) (A.) 1928 (B.) 1930 (C.) 1932 (D.) 1934
During Indian freedom struggle in which year the famous Civil Disobedience movement started?

(81.) (A.) BalGangadhar Tilak (B.) Subhash Chandra Bose
(C.) Jawahar Lal Nehru (D.) Rani Lakshmi Bai
Which one of the following personality was associated with Home Rule League?

(82.) (A.) Punjab (B.) Gujrat (C.) Tamil Nadu (D.) Manipur
Famous classical dance "Bharatnatyam" has its roots in which Indian state?

(83.) Nagara style is famous for which of the following activity?



- (A.) Temple architecture (B.) Classical music
(C.) Indian painting (D.) Classical dance
- (84.) In which year state Haryana came into existence?
(A.) 1966 (B.) 1967 (C.) 1968 (D.) 1969
- (85.) Personal commitment to work hard and do one's very best is associated with which of the following?
(A.) Confidentiality (B.) Empathy
(C.) Work ethics (D.) Impartiality
- (86.) What will be final answer of following:
 $4(10+15 \div 5 \times 4 - 2 \times 2)$
(A.) 70 (B.) 72 (C.) 74 (D.) 76
- (87.) Solve the following:
 $10 \div 10 \times 10 \div 10$
(A.) 10 (B.) 20 (C.) 30 (D.) 40
- (88.) In final exam of class XI there are 50 students, 10% students failed. How many students passed to class XII?
(A.) 35 (B.) 37 (C.) 40 (D.) 45
- (89.) In a class of 50 students, 40% are girls. The number of boys in the class?
(A.) 20 (B.) 25 (C.) 30 (D.) 35
- (90.) Mr. X has bought an item for Rs 500 and sells CA it for Rs 600. Calculate the profit percentage?
(A.) 10 (B.) 20 (C.) 30 (D.) 40
- (91.) A man bought a cycle for Rs. 250. For how much should he sell it so as to gain 10%?
(A.) Rs. 255 (B.) Rs. 265 (C.) Rs.275 (D.) Rs. 285
- (92.) How much time will it take for an amount of Rs 900 to yield Rs 81 as interest at 4.5% per annum of simple interest?
(A.) 1 year (B.) 2 years (C.) 3 years (D.) 4 years
- (93.) Mr. Ajay has invested an amount of Rs 5000 for 5 years with a simple interest of 5% per annum. What will be interest amount?
(A.) Rs. 1000 (B.) Rs. 1250 (C.) Rs. 1500 (D.) Rs. 1750
- (94.) The individual weight (inkgs) of 7 players of a team are as 57, 58,59, 60, 61, 62 and 63. Calculate the average weight (in kgs)?
(A.) 59 (B.) 60 (C.) 61 (D.) 62
- (95.) The mean weight of a group of seven boys is 56 kg. The individual weights (in kg) of six of them are 52, 57, 55, 60, 59 and 55. Find the weight (in kg) of the seventh boy?
(A.) 52 (B.) 53 (C.) 54 (D.) 55
- (96.) A and B together can do a task in 12 days, which A an alone can do the same task 30 days. In how many days B alone can do it?
(A.) 12 (B.) 16 (C.) 20 (D.) 24
- (97.) A can do a bit of work in 4 days, which B alone can do in 6 days. In how many days both cooperating can do it?
(A.) 2.5 (B.) 3 (C.) 3.5 (D.) 4
- (98.) A person crosses 900 meter bridge in 9 minutes. What is his speed in meter per minutes?
(A.) 9 (B.) 90 (C.) 100 (D.) 900
- (99.) An aeroplane covers a certain distance at a speed of 200 kmph in 5 hours. To cover the same distance in 2 hours, it must travel at a speed (kmph) of?
(A.) 300 (B.) 350 (C.) 400 (D.) 500
- (100.) The salary of 6 workers is Rs 12000. What will be the salary of 5 workers?



(A.) Rs. 5000

(B.) Rs. 6000

(C.) Rs. 7000

(D.) Rs. 10000

HARYANA CIRCLE-PA/SA EXAM -2022

ANSWER

(1.)	C	(2.)	A	(3.)	D	(4.)	A	(5.)	A
(6.)	A	(7.)	C	(8.)	C	(9.)	D	(10.)	C
(11.)	A	(12.)	A	(13.)	D	(14.)	A	(15.)	C
(16.)	D	(17.)	A	(18.)	A	(19.)	D	(20.)	A
(21.)	A	(22.)	D	(23.)	A	(24.)	A	(25.)	A
(26.)	C	(27.)	C	(28.)	B	(29.)	B	(30.)	B
(31.)	C	(32.)	B	(33.)	C	(34.)	D	(35.)	C
(36.)	D	(37.)	A	(38.)	B	(39.)	B	(40.)	A
(41.)	B	(42.)	A	(43.)	A	(44.)	B	(45.)	A
(46.)	C	(47.)	A	(48.)	C	(49.)	A	(50.)	A
(51.)	C	(52.)	B	(53.)	B	(54.)	B	(55.)	C
(56.)	B	(57.)	B	(58.)	D	(59.)	B	(60.)	D
(61.)	D	(62.)	B	(63.)	B	(64.)	C	(65.)	B
(66.)	B	(67.)	C	(68.)	A	(69.)	C	(70.)	A
(71.)	B	(72.)	D	(73.)	B	(74.)	A	(75.)	C
(76.)	B	(77.)	A	(78.)	A	(79.)	D	(80.)	B
(81.)	A	(82.)	C	(83.)	A	(84.)	A	(85.)	C
(86.)	B	(87.)	B	(88.)	D	(89.)	C	(90.)	B
(91.)	C	(92.)	B	(93.)	B	(94.)	B	(95.)	C
(96.)	C	(97.)	A	(98.)	C	(99.)	D	(100.)	D