



GUJARATH CIRCLE-PA/SA EXAM -2022

- (1.) Poste Restante article (except value payable) can be detained in post office..
 (A.) 7 days (B.) 5 days
 (C.) 1 month (D.) Cannot be detained
- (2.) How many die has Franking Machine-
 (A.) Value Die (B.) License Die
 (C.) Both A & B (D.) None of these
- (3.) The weight limit of book packet is-
 (A.) 4 kg (B.) 2kg (C.) 20 kg (D.) 5kg
- (4.) Limit to branch office for booking of insured article is ...
 (A.) 100000/- (B.) 20000/- (C.) 600/- (D.) No Limit
- (5.) In which cases registration is compulsory-
 (A.) Any parcel exceed 4 kg (B.) Any Insured Articles
 (C.) Any VP Articles (D.) All the above
- (6.) Stamps which are used for day to day postal mailing purposes and are available in various ascending denominations from 25paise onwards at all post offices
 (A.) Commemorative stamps (B.) Definitive Stamps
 (C.) E-stamps (D.) None of the above
- (7.) How many types of postal life insurance policies (PLI) are available for customers
 (A.) 5 (B.) 4 (C.) 7 (D.) 6
- (8.) APLI or RPLI policy is treated as lapsed when:
 (A.) Policy has not completed 3 years and 6 months premium has not been paid
 (B.) Policy has completed 3 years and 12 months premium has not been paid
 (C.) A and B both
 (D.) None of the above
- (9.) A registered letter is delivered-
 (A.) At the address (B.) To the house
 (C.) To the addressee (D.) To anyone in the house
- (10.) Maximum weight of inland Letter card is
 (A.) 5 Gram (B.) 10 Gram (C.) 2 Kilogram (D.) 5 Kilogram
- (11.) Compensation for International registered parcel booked in India for loss/theft/total damage is.....
 (A.) 30 SDR (B.) 25 SDR (C.) 35 SDR (D.) 40 SDR
- (12.) The Headquarters of Asian Pacific Postal Union is located at
 (A.) China (B.) India (C.) Thailand (D.) America
- (13.) India joined the APPU in the year
 (A.) 1970 (B.) 1975 (C.) 1978 (D.) 1973
- (14.) Foreign Article except VP addressed as "Poste Restante" are detained in the PO of delivery for the period not exceeding
 (A.) 7 days (B.) 1 Month (C.) 15 days (D.) 3 Month
- (15.) The maximum weight of an Airmail letter should not exceed-
 (A.) 4 kg (B.) 5kg (C.) 2kg (D.) 1kg
- (16.) What is Cecogramme
 (A.) Aerogramme (B.) ILC
 (C.) Urozairo (D.) Literature for blind
- (17.) In Foreign post, the terms L.C means
 (A.) Letter card (B.) Letter category



- (C.) Letters and Cards (D.) None of these
- (18.) An aerogramme should not weigh more than-
- (A.) 3 Gram (B.) 5 Gram
- (C.) 10 Gram (D.) None of above
- (19.) Complaints and enquires regarding articles of letter mail and parcel mail in foreign post must be submitted before the lapse of
- (A.) 3 years counting from the day following the day on which the article was posted.
- (B.) 2 years counting from the day following the day on which the article was posted.
- (C.) 1 years counting from the day following the day on which the article was posted.
- (D.) 4 years counting from the day following the day on which the article was posted.
- (20.) Dimensions of Privately manufactured Air Mail Postcards is-
- (A.) Max 100 x 150 mm & min 80 x 140 mm (B.) Max 105 x 148 mm & min 90 x 140 mm
- (C.) Max 150 x 200 mm & min 70 x 140 mm (D.) None of these
- (21.) The 3 applications available in DARPAN CSI are
- (A.) CBS, PLI and Demo booking app (B.) CBS, PLI and DEI App
- (C.) CBS, Del app and Demo booking App (D.) Del apps, Common app and Demo booking
- (22.) The IT Modernization Project of Department of Posts was approved by the Government of India in
- (A.) November 2011 (B.) November 2012
- (C.) November 2013 (D.) November 2010
- (23.) Full form of DARPAN is
- (A.) Digital Advancement of Rural Post Office for A New India
- (B.) Digitized Advancement of Rural Post Office for A New India
- (C.) Digitized Advancement of Rural Post Office for A New India
- (D.) None of these
- (24.) Full form of SAP is
- (A.) Systems Applicable and Products (B.) Systems Applications and Products
- (C.) Systematic Applications and Products (D.) Systems Applications and Production
- (25.) SOL ID of post office is related to which module-
- (A.) DPMS (B.) Finacle (C.) HRMS (D.) McCamish
- (26.) Post Office staff uses which of the following modules to manage delivery of mails and articles in post offices-
- (A.) DPMS (B.) IPVS (C.) HRMS (D.) IRMS
- (27.) PMA is used in post office for following work-
- (A.) Booking of articles (B.) PLI related work
- (C.) Saving Bank related work (D.) Delivery of articles
- (28.) Which one of the following devices is not the part of RICT Device provided to Branch Post Office?
- (A.) Finger Print Scanner (B.) Thermal Printer
- (C.) Iris Scanner (D.) Camera
- (29.) Which one of the following is not a component of IT Modernization Project 2012?
- (A.) CSI (B.) CBS
- (C.) Project Arrow (D.) DARPAN
- (30.) Which of the following modules can work on offline mode?
- (A.) SAP (B.) POS (C.) Finacle (D.) McCamish
- (31.) Parcel Directorate was established
- (A.) 2018 (B.) 2016 (C.) 2015 (D.) 2010
- (32.) Blind literature packet are not exempted from payment of



- (A.) Postage (B.) Registration fee
 (C.) Airmail charges (D.) Fee for Acknowledgement
- (33.) What is the fee in Rs. for registration of letter?
 (A.) 17 (B.) 22
 (C.) 25 (D.) None of these
- (34.) What is maximum limit of insurance of speed post?
 (A.) One lakh rupees (B.) Twenty thousand rupees
 (C.) Thirty thousand rupees (D.) None of these
- (35.) The RD account can be continued after sixty monthly deposits for a further period of up to a maximum of
 (A.) One year (B.) Five years (C.) Three years (D.) Four years
- (36.) The account holders of Senior Citizen savings scheme may extend the account for a further period of years by making an application within a period of year from the date of maturity.
 (A.) 5, 1 (B.) 4, 2 (C.) 3, 1 (D.) 2, 1
- (37.) The Government of India has introduced a pension scheme called the Atal Pension Yojana (APY) with effect from....
 (A.) 1st June, 2014 (B.) 1st June, 2015
 (C.) 1st June, 2016 (D.) 1st June, 2017
- (38.) In Pradhan Mantri Suraksha Bima Yojna (PMSBY), the premium payable is:
 (A.) Rs 330 monthly (B.) Rs 330 annually
 (C.) Rs 12 monthly (D.) Rs 12 annually
- (39.) In Pradhan Mantri Jeevan Jyoti Bima Yojna (PMJJBY), the premium payable is
 (A.) Rs 330 monthly (B.) Rs 330 annually
 (C.) Rs 12 monthly (D.) Rs 12 annually
- (40.) Postal life Insurance scheme started in
 (A.) 01-02-1884 (B.) 01-02-1892
 (C.) 01-02-1882 (D.) None of these
- (41.) PM CARES for children Scheme, started in?
 (A.) 2021 (B.) 2022 (C.) 2020 (D.) 2019
- (42.) Village sorting list in form M-52 will be prepared and supplied to office by
 (A.) Divisional Superintendent (B.) Sub divisional Inspector
 (C.) Sub Post Master (D.) Head Postmaster
- (43.) Suggestions/complaint book (MS-94) will be kept by
 (A.) Head Post Officers (B.) Sub Post Offices
 (C.) RMS Offices (D.) All Post Offices
- (44.) BO sent to its account office-
 (A.) BO slip (B.) SO slip
 (C.) SO Daily Account (D.) BO Daily Account
- (45.) Which office cannot be a cash office?
 (A.) Sub Post Office (B.) Branch Office
 (C.) Head Post Office (D.) General Post Office
- (46.) Each set of a sorting mail office is divided into-
 (A.) Two Departments (B.) Three Departments
 (C.) Four Departments (D.) None of these
- (47.) Transit bags must always be closed and sealed in the presence of
 (A.) The senior most Group D of the set



- (B.) The IRM/Assistant Supdt. of RMS
- (C.) Head Sorting Assistant/Head Mail Guard/Mail agent
- (D.) None of these
- (48.) Parcel sorting case must always be kept locked when the work of the sorting is going on and the key of it must remain during working hours in custody
 - (A.) With the HSA
 - (B.) With the supervisor
 - (C.) With the parcel sorting assistant
 - (D.) None of these
- (49.) Territorial RBS for each state should be prepared when the number of RL exceed...
 - (A.) 3
 - (B.) 6
 - (C.) 10
 - (D.) 5
- (50.) Categories of Foreign Postal Articles are-
 - (A.) Letter Post & Parcel Post
 - (B.) Airmail & Sea Mail
 - (C.) Registry Post & Insurance Post
 - (D.) All of the above
- (51.) How much time is Indian Standard Time (IST) ahead of Greenwich Mean Time (GMT)?
 - (A.) 5 hours and 30 minutes
 - (B.) 4 hours and 30 minutes
 - (C.) 3 hours and 30 minutes
 - (D.) 2 hours and 30 minutes
- (52.) Lipulekh is located in which state?
 - (A.) Rajasthan
 - (B.) Uttarakhand
 - (C.) Maharashtra
 - (D.) Sikkim
- (53.) For becoming the president of India the minimum age is-
 - (A.) 25 years
 - (B.) 30 years
 - (C.) 35 years
 - (D.) 18 years
- (54.) Fundamental Right in Indian Constitution are borrowed from which country?
 - (A.) Australia
 - (B.) Britain
 - (C.) America
 - (D.) Ireland
- (55.) Who is the Minister of State for communications in India?
 - (A.) Shri Ashwini Vaishnav
 - (B.) Shri Ravishankar Prasad
 - (C.) Shri Devusinh Chauhan
 - (D.) Shri Manoj Sinha
- (56.) What is Full form of UIDAI?
 - (A.) Unique Identify Authority of India
 - (B.) Unik Identification Authority of India
 - (C.) Unique Identification Authority of India
 - (D.) Unique Identification Authorized of India
- (57.) Which woman was the first governor of a state in Independent India?
 - (A.) Smt.Sarojini Naidu
 - (B.) Mrs.Sucheta Kriplani
 - (C.) Smt.Indira Gandhi
 - (D.) Mrs. VijayLakshmi Pandit
- (58.) Baul dance is related to which state?
 - (A.) Kerala
 - (B.) Gujarat
 - (C.) Bihar
 - (D.) WestBangal
- (59.) Ethical behavior is a matter of
 - (A.) Juggling standards and business needs
 - (B.) Obeying the rules
 - (C.) Acting on a considered judgment
 - (D.) None of these
- (60.) The word "Ehtics" is derived from-
 - (A.) Eternity
 - (B.) Elementary
 - (C.) Essentiality
 - (D.) Ethos
- (61.) Evaluation the following question using the rules of BODMAS
 $3 \times 6 + 12 \div 4$
 - (A.) 21
 - (B.) 18
 - (C.) 16
 - (D.) 26
- (62.) Evaluation the following question using the rules of BODMAS-
 $\{(45/15-10) \times 1\}$
 - (A.) 9
 - (B.) 7
 - (C.) -7
 - (D.) 16
- (63.) How can half a percent be expressed in a decimal fraction?



- (A.) 0.5 (B.) 0.05 (C.) 0.005 (D.) 5.0
- (64.) If the sale of petrol is decreased by 10% due to increase of 10% in the price of petrol, then by what percent does the income from petrol decrease or increase?
- (A.) 1% (B.) 2% (C.) 3% (D.) 4%
- (65.) In order to sell an article at a profit of 8% by giving 10% discount, the marked price will be increased by
- (A.) 9% (B.) 11% (C.) 18% (D.) 20%
- (66.) The cost of a shirt is Rs. 270 and that getting it at Rs.237.60 What is the discount rate?
- (A.) 10% (B.) 12% (C.) 15% (D.) 20%
- (67.) At what percent per annum interest rate will be a sum of money triple in 20 years?
- (A.) 10% (B.) 15% (C.) 20% (D.) 25%
- (68.) If a sum of money doubles in 7 years, in how many years will it become five times?
- (A.) 38 (B.) 28 (C.) 18 (D.) 8
- (69.) If the average of 39, 48, 51, 63, 75, 83, x and 69 is 60, then what will be the value of x?
- (A.) 50 (B.) 51 (C.) 52 (D.) 53
- (70.) Find the average of 1.11, 0.01, 0.101, 0.001, 0.11?
- (A.) 0.2664 (B.) 0.2554 (C.) 0.1264 (D.) 0.1164
- (71.) Ram can do work in 10 days and Shyam can do the same work in 15 days. In how many days can both together do the work?
- (A.) 6 (B.) 3 (C.) 12 (D.) 1/6
- (72.) Ram and Shyam together can finish a work in 5 days. If Ram alone can do that work in 10 days, then in how many days Shyam alone can do that work?
- (A.) 20 (B.) 40 (C.) 10 (D.) 1/10
- (73.) A 200 meter long train starts from a station at a speed of 90 km/h, in how much time will it cover an electric pole?
- (A.) 16 seconds (B.) 12 seconds (C.) 1/6 second (D.) 8 seconds
- (74.) The speed of a boat in still water is 2 km/h and upstream is 1 km/h. Then what will be the velocity of the current?
- (A.) 1.5km/h (B.) 5.0 km/h (C.) 1.0 km/h (D.) 10 km/h
- (75.) If the price of gram is decreased by 20% then by what percentage should its use be increased so that there is no change in the expenditure?
- (A.) 50% (B.) 25% (C.) 12.5% (D.) 75%
- (76.) The average of four consecutive even numbers is 27. Which is the largest number among them?
- (A.) 28 (B.) 30 (C.) 24 (D.) 26
- (77.) The sum of the squares of two numbers is 68 and the square of their difference is 36. What will be the product of these two numbers?
- (A.) 58 (B.) 104 (C.) 32 (D.) 16
- (78.) What is $\frac{2}{3}$ of half of 369 equal to?
- (A.) 123 (B.) 246 (C.) 542 (D.) 271
- (79.) A car travelling at a speed of 140kmph covers 420 km. How much time will it take to cover 280 km?
- (A.) 2 hours (B.) 3 hours (C.) 4 hours (D.) 6 hours
- (80.) Income of Amir is Rs. 12000 per month and that of Amit is Rs. 191520 per annum. If the monthly expenditure of each of them is Rs. 9960 per month, find the ratio of their saving.
- (A.) 17:50 (B.) 17:25 (C.) 50:17 (D.) 25:17
- (81.) If RUSH is coded as 66, Then how is GIRL coded as?
- (A.) 75 (B.) 64 (C.) 47 (D.) 46

A Vision of Victory

VV ACADEMY

▶ RPF ▶ RRB GROUP - D ▶ POSTAL ▶ SI/CONSTABLE

Address : Near Chuttugunta Signals, Eluru Road, VJA 2. Cell : 9985525552, 8977525552

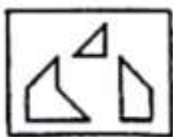
- (82.) Answers in the correct order
 (1) Month, (2) Year (3) Week (4) Day
 (A.) 4,3,1,2 (B.) 3,4,2,1 (C.) 1,2,4,3 (D.) 3,4,1,2
- (83.) A is taller than B. C is taller than D but shorter than E. B is shorter than D and D is taller than A. Who is the tallest?
 (A.) E (B.) C (C.) B (D.) D
- (84.) Seeing a picture, Pushpa said, "This man's wife Lakshmi is the mother of my daughter's aunt." How is pushpa related to Lakshmi?
 (A.) Mother-in-law (B.) Grandmother
 (C.) Mother (D.) Daughter-in-law
- (85.) In the following questions, select the odd word from the given alternatives
 (A.) Mercury (B.) Gold (C.) Silver (D.) Copper
- (86.) As BEGK is related to ADFJ, in the same way PSVY is related to-
 (A.) ORUX (B.) ROUX (C.) LQUT (D.) LOQT
- (87.) How many days will be there between 26 January 2008 to 15 May 2008 (both days inclusive)?
 (A.) 110 (B.) 111 (C.) 112 (D.) 113
- (88.) If there was Monday on 1st January 2012 then it will be on 1st January 2013?
 (A.) Monday (B.) Tuesday (C.) Wednesday (D.) Thursday
- (89.) If DELHI = 25. MUMBAI = 36 and KOLKATA = 49, then the value of CHENNAI is
 (A.) 81 (B.) 16 (C.) 49 (D.) 18
- (90.) Which of the following statements definitely follows from the given conclusions?
 Statements: All dogs are monkeys. No monkey is cat
 Conclusion: Some dog is a cat
 No cat is dog
 All dogs are cats
 None of these
 (A.) Some dog is a cat (B.) No cat is dog
 (C.) All dogs are cats (D.) None of these

(91.) Find the number of triangles in the given figure?



- (A.) 5 (B.) 8 (C.) 9 (D.) 10

(92.) Find out which of the figures (1), (2), (3) and (4) can be formed from the pieces given in figure (X).



- (A.) 1 (B.) 2 (C.) 3 (D.) 4

(93.) Find out which of the figures (1), (2), (3) and (4) can be formed from the pieces given in figure (X)



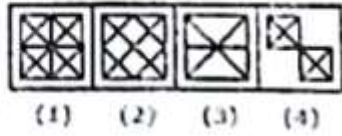
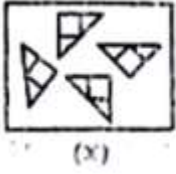
A Vision of Victory

V V ACADEMY

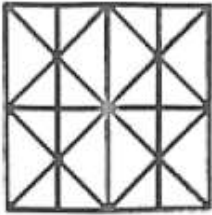
➤ RPF ➤ RRB GROUP - D ➤ POSTAL ➤ SI/CONSTABLE

www.vvacademy.com

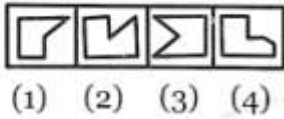
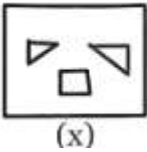
Address : Near Chuttugunta Signals, Eluru Road, VJA 2. Cell : 9985525552, 8977525552

- (A.) 1 (B.) 2 (C.) 3 (D.) 4
- (94.) Find the minimum number of straight lines required to make the given figure.



- (A.) 11 (B.) 14 (C.) 16 (D.) 17
- (95.) Find out which of the figures (1), (2), (3) and (4) can be formed from the pieces given in figure (X)



- (A.) 1 (B.) 2 (C.) 3 (D.) 4
- (96.) If the sum of two numbers is 75 and their difference is 25, then what will be the product of the two numbers?
- (A.) 1350 (B.) 1250 (C.) 1000 (D.) 125
- (97.) A clock shows the time 4: 40 when looked in the mirror. What is the right time?
- (A.) 8:40 (B.) 8:20 (C.) 7:40 (D.) 7:20
- (98.) How many times do the Hour needle and Minute needle overlap each other in 24 hours?
- (A.) 20 (B.) 21 (C.) 22 (D.) 24
- (99.) Select the odd letter/letter-pair from the given alternatives
- (A.) PU (B.) SW (C.) CG (D.) KO
- (100.) Select the odd from the given alternatives
- (A.) 125 (B.) 512 (C.) 1321 (D.) 1728



GUJARATH CIRCLE-PA/SA EXAM -2022

ANSWER

(1.)	C	(2.)	C	(3.)	D	(4.)	C	(5.)	D
(6.)	B	(7.)	D	(8.)	C	(9.)	C	(10.)	A
(11.)	D	(12.)	C	(13.)	D	(14.)	C	(15.)	C
(16.)	D	(17.)	C	(18.)	A	(19.)	C	(20.)	B
(21.)	D	(22.)	B	(23.)	A	(24.)	B	(25.)	B
(26.)	A	(27.)	D	(28.)	C	(29.)	C	(30.)	B
(31.)	A	(32.)	C	(33.)	A	(34.)	A	(35.)	B
(36.)	C	(37.)	B	(38.)	D	(39.)	B	(40.)	A
(41.)	A	(42.)	B	(43.)	D	(44.)	D	(45.)	B
(46.)	C	(47.)	C	(48.)	C	(49.)	C	(50.)	A
(51.)	A	(52.)	B	(53.)	C	(54.)	C	(55.)	C
(56.)	C	(57.)	A	(58.)	D	(59.)	A	(60.)	D
(61.)	A	(62.)	B	(63.)	C	(64.)	A	(65.)	D
(66.)	B	(67.)	A	(68.)	B	(69.)	C	(70.)	A
(71.)	A	(72.)	C	(73.)	D	(74.)	C	(75.)	B
(76.)	B	(77.)	D	(78.)	A	(79.)	A	(80.)	A
(81.)	D	(82.)	A	(83.)	A	(84.)	D	(85.)	A
(86.)	A	(87.)	B	(88.)	C	(89.)	C	(90.)	
(91.)	D	(92.)	A	(93.)	B	(94.)	B	(95.)	A
(96.)	B	(97.)	D	(98.)	C	(99.)	A	(100.)	C