



BIHAR CIRCLE-PA/SA EXAM -2022

- (1.) Terms "NSP1 and NSP2" are associated with which of the following?
 (A.) Network connectivity (B.) Finacle updates
 (C.) SAP updates (D.) ATM cash management
- (2.) EMV chip is used in which of the item?
 (A.) ATM card (B.) RICT Device
 (C.) Barcode scanner (D.) Network switch
- (3.) "Any time anywhere banking" is associated with?
 (A.) CBS (B.) TNF (C.) DCF (D.) RICT
- (4.) Data centre Facility (DCF) started functioning in which year?
 (A.) 2012 (B.) 2013 (C.) 2014 (D.) 2015
- (5.) In it modernization project ATM service are covered under which vertical?
 (A.) CSI (B.) FSI (C.) DCF (D.) RH
- (6.) Which section of customs Act 1962 empowers custom Department to prohibit import of certain goods?
 (A.) Section 11 (B.) Section 21 (C.) Section 31 (D.) Section 41
- (7.) What is the maximum number of international reply coupons that can be sold to an individual at a time?
 (A.) Five (B.) Ten (C.) Twenty (D.) Thirty
- (8.) Printed papers services in the foreign posts generally correspond to which service of inland post?
 (A.) Book Packet (B.) Registered newspaper
 (C.) Periodicals (D.) Small packets
- (9.) The use of inland letter cards for addressing communication to foreign countries is permissible to which group of countries?
 (A.) Bhutan, Bangladesh and Nepal (B.) Sri Lanka, Maldives and Myanmar
 (C.) Pakistan, Afghanistan and Iran (D.) Thailand, Lao and Vietnam
- (10.) There are two types of custom declaration forms, which one of the following in correct one?
 (A.) C-3 and C-1 (B.) CP-1 and CP-2,
 (C.) CN-22 and CN-23, (D.) CN-1 and CN-2
- (11.) An Aerogram should not weigh more than how many grams?
 (A.) Three grams (B.) Four grams
 (C.) Five grams (D.) Six grams
- (12.) Examination and assessment of custom duty on inward foreign articles is performed in which office?
 (A.) Custom House Office (B.) Foreign Post Office
 (C.) General Post Office (D.) Export/Import office
- (13.) For the purpose of fixing surcharges and combined charges on international articles countries are divided into how many group?
 (A.) Four (B.) Five (C.) Six (D.) Seven
- (14.) For the purpose of surcharge international articles are divided into how many groups?
 (A.) Two (B.) Three (C.) Four (D.) Five
- (15.) Asian pacific postal union (APPU) was established in which year?
 (A.) 1960 (B.) 1961 (C.) 1962 (D.) 1963
- (16.) Which among following is not a special feature of Postal Life Insurance (PLI)?
 (A.) Income tax rebate (B.) Loan facility
 (C.) Nomination (D.) Low Bonus



- (17.) Which of the following term is not associated with "philately"?
- (A.) Special cover (B.) First day cover
(C.) National saving certification (D.) Miniature sheet
- (18.) Postal Life Insurance (PLI) introduced in which year?
- (A.) 1882 (B.) 1883 (C.) 1884 (D.) 1885
- (19.) The maximum weight limit for transmission of Blind Literature through post office is how many Kilograms?
- (A.) Five Kilograms (B.) Six Kilograms
(C.) Seven Kilograms (D.) Eight Kilograms
- (20.) A poste Restante article (except value payable) is kept in the post office to which it is addressed for how many days?
- (A.) A period not exceeding ten days (B.) A period not exceeding fifteen days
(C.) A period not exceeding one month (D.) A period not exceeding two months
- (21.) Following two statements be read carefully and choose the correct option given below.
Statement I: Post Box facilities are available in all post Officers.
Statement II: Post Box facilities are available free of cost.
- (A.) Both statements are correct
(B.) Both statements are incorrect
(C.) Statement I is incorrect and statement II is correct
(D.) Statement I is correct and Statement II is incorrect
- (22.) Generally, stamps should be affixed at which place of the address side of an envelope.
- (A.) Left hand top corner (B.) Right hand top corner
(C.) Left hand bottom corner (D.) Right hand bottom corner
- (23.) Following two statements be read carefully and choose the correct option given below.
Statement I: Revenue stamps can be used for payment of postage
Statement II: Postage charges can, also, be paid by means of impressions of a franking machine.
- (A.) Both Statements are correct
(B.) Both Statements are incorrect
(C.) Statement I is incorrect and Statement II is correct
(D.) Statement I is correct and Statement II is incorrect
- (24.) Post Offices are divided into how many classes?
- (A.) Two (B.) Three (C.) Four (D.) Five
- (25.) The head quarters if north east postal circle is located in which of the following city?
- (A.) Kohima (B.) Shilong (C.) Agartala (D.) Imphal
- (26.) Mail department of sorting mail office is head by which authority?
- (A.) Head sorting Assistant (B.) Sorting Assistant
(C.) Registration sorting Assistant (D.) Parcel Sorting Assistant
- (27.) For what purpose the "Trial Notes" are used in international Mail transmission?
- (A.) To determine the mostfavourable route (B.) To determine the minimum postage
(C.) To find out the missing articles (D.) To calculate the custom charge
- (28.) The Arab Postal Union, a restricted union has its headquarters in which city?
- (A.) Cairo (B.) Dubai (C.) Muskat (D.) Manama
- (29.) Which one is not part/department of sorting Mail Office?
- (A.) Mail (B.) Sorting
(C.) Registration (D.) Philately
- (30.) Metal tokens are used by which category of official?



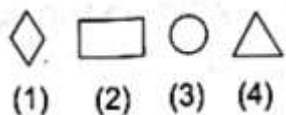
- (A.) Selected RMS Official (B.) Circle Office Official
 (C.) Regional Office Official (D.) Postal Division Official
- (31.) Deduction/Non deduction of TDS in SCSS accounts has been clarified by which SB Order?
 (A.) SB Order 37/2021 (B.) SB Order 27/2021
 (C.) SB Order 17/2021 (D.) SB Order 07/2021
- (32.) "PM CARES" for children scheme 2021 Introduced vide SB order 33/2021 is meant for which category of children?
 (A.) Children from Hilly areas
 (B.) Children from North East States
 (C.) Children from Minority communities
 (D.) Children who became orphan during COVID pandemic.
- (33.) The movements of S.O. slip is from?
 (A.) Head Post Office to Sub Post office (B.) Sub Post Office to Branch Post Office
 (C.) Sub Post Office to Head Post Office (D.) Branch Post Office to Sub Post Office
- (34.) What is the maximum limit for loose cash remittance between account office and its subordinate offices through departmental employee?
 (A.) Rs. 5Lakh (B.) Rs. 10Lakh (C.) Rs. 15Lakh (D.) Rs. 20Lakh
- (35.) Which one of the following is not part/branch/department of a Head Post Office?
 (A.) Mail Branch (B.) Delivery Branch
 (C.) Sorting Branch (D.) Loan Branch
- (36.) How many types of insurance schemes are offered under rural postal Life Insurance (RPLI)?
 (A.) 2 (B.) 4 (C.) 6 (D.) 8
- (37.) Philatelic Deposit Account (PDA) can be open with a minimum deposit of how much amount?
 (A.) Rs. 200 (B.) Rs. 500 (C.) Rs. 700 (D.) Rs. 900
- (38.) In which year Rural Postal Life insurance (RPLI) was introduced?
 (A.) 1884 (B.) 1894 (C.) 1904 (D.) 1995
- (39.) Deen Dayal SPARSH Yojna is related to which segment/activity of India Post?
 (A.) Stamps (B.) Insurance (C.) Banking (D.) Mail
- (40.) What is the maximum insurance cover (in Rs.) under Pradhan Mantri Suraksha Bima Yojna (PMSBY)?
 (A.) 2Lakh (B.) 3Lakh (C.) 4Lakh (D.) 5Lakh
- (41.) In which year India Post Payments Bank (IPPB) was formally launched by Prime Minister of India?
 (A.) 2014 (B.) 2016 (C.) 2018 (D.) 2020
- (42.) The annual interest rate applicable on Public Provident Fund (PPF) for second quarter of FY 2022-23 is?
 (A.) 6.9% (B.) 7.1% (C.) 7.4% (D.) 7.6%
- (43.) From which year Department of posts has offered Mobile Banking services to POSB customers?
 (A.) 2016 (B.) 2017 (C.) 2018 (D.) 2019
- (44.) "Warehousing Services" is one of the feature of which services offered by India Post
 (A.) Speed Post (B.) 2017 (C.) 2018 (D.) 2019
- (45.) Which of the following is not a feature of speed post?
 (A.) Insurance (B.) Compensation
 (C.) Cash on Delivery (D.) Weight limit of 50 kg
- (46.) Term "HFNRPT" is used in which of the following platform?
 (A.) Finacle (B.) Macmish (C.) SAP (D.) DPMS
- (47.) In reference with the IT Modernization project, the term "PMU" refersto ?



- (A.) Project Management Unit (B.) Power Management Unit
(C.) Pressure Measuring Unit (D.) Payment Method Updator
- (48.) IT Modernization project has been divided into how many segments?
(A.) Five (B.) Six (C.) Seven (D.) Eight
- (49.) In term "T-Code", alphabet T represents which of the following?
(A.) Transaction (B.) Transfer (C.) Technology (D.) Table
- (50.) MAC binding is commonly used with reference to which segment of IT Modernization project?
(A.) CSI (B.) FSI (C.) NI (D.) CM
- (51.) The salary of 6 workers is Rs. 12000 what will be the salary of 5 workers?
(A.) Rs. 5000 (B.) Rs. 6000 (C.) Rs. 7000 (D.) Rs. 10000
- (52.) An aero plane covers a certain distance at a speed of 200 kmph in 5 hours. To cover the same distance in 2 hours, it must travel at a speed (kmph) of?
(A.) 300 (B.) 350 (C.) 400 (D.) 500
- (53.) A person crosses 900 meter bridge in 9 minutes. What is his speed in meter per minutes?
(A.) 9 (B.) 90 (C.) 100 (D.) 900
- (54.) A can do a bit of work in 4 days, which B alone can do in 6 days.... in how many days both cooperating can do it?
(A.) 2.5 (B.) 3 (C.) 3.5 (D.) 2.4
- (55.) A and B together can do a task in 12 days, which A alone can do the same task 30 days. In how many days B alone can do it?
(A.) 12 (B.) 16 (C.) 20 (D.) 24
- (56.) The mean weight of a group of seven boys is 56 kg. The individual weights (in kg) of six of them are 52, 57, 55, 60, 59 and 55. Find the weight (in kg) of the seventh boy?
(A.) 52 (B.) 53 (C.) 54 (D.) 55
- (57.) The individual weight (in kgs) of 7 players of a team are as 57, 58, 59, 60, 61, 62 and 63 calculate the average weight (in kgs)?
(A.) 59 (B.) 60 (C.) 61 (D.) 62
- (58.) Mr. Ajay has invested an amount of Rs. 5000 for 5 years with a simple interest of 5% per annum. What will be interest amount?
(A.) Rs. 1000 (B.) Rs. 1250 (C.) Rs. 1500 (D.) Rs. 1750
- (59.) How much time will it take for an amount of \$ 900 to yield \$81 as interest at 4.5% per annum of simple interest?
(A.) 1 year (B.) 2 years (C.) 3 years (D.) 4 years
- (60.) A man bought a cycle for Rs. 250. For how much should he sell it so as to gain 10%?
(A.) Rs. 255 (B.) Rs. 265 (C.) Rs. 275 (D.) Rs. 285
- (61.) Mr. X has bought an item for Rs 500 and sells it for Rs 600. Calculate the profit percentage?
(A.) 10 (B.) 20 (C.) 30 (D.) 40
- (62.) In a class of 50 students, 40% are girls. The number of boys in the class?
(A.) 20 (B.) 25 (C.) 30 (D.) 35
- (63.) In final exam of class IX there are 50 students 10% students failed. How many students passed to class X?
(A.) 20 (B.) 25 (C.) 30 (D.) 45
- (64.) Solve the following:
 $10 \div 10 \times 10 \div 10$
(A.) 10 (B.) 20 (C.) 30 (D.) 40
- (65.) What will be final answer of following: $4(10+15 \div 5 \times 4 - 2 \times 2)$



- (A.) 70 (B.) 72 (C.) 74 (D.) 76
- (66.) Personal commitment to work hard and do one's very best is associated with which of the following?
 (A.) Confidentiality (B.) Empathy
 (C.) Work ethics (D.) Impartiality
- (67.) In which year Mahatma Gandhi paid his first visit to Bihar?
 (A.) 1917 (B.) 1921 (C.) 1923 (D.) 1925
- (68.) Nagara style is famous for which of the following activity?
 (A.) Temple architecture (B.) Classical music
 (C.) Indian painting (D.) Classical dance
- (69.) Famous classical dance "Bharatnatyam" has its roots in which Indian state?
 (A.) Punjab (B.) Gujrat (C.) Tamil Nadu (D.) Manipur
- (70.) Which one of the following personality was associated with Home Rule League?
 (A.) BalGangadhar Tilak (B.) Subhash Chandra Bose
 (C.) Jawahar Lal Nehru (D.) Rani Lakshmi Bai
- (71.) During Indian freedom struggle in which year the famous Civil Disobedience movement started?
 (A.) 1928 (B.) 1930 (C.) 1932 (D.) 1934
- (72.) Municipal Corporation is associated with which administrative set up?
 (A.) Rural area local bodies (B.) Hilly area administrative bodies
 (C.) Tribal area administrative bodies (D.) Urban area local bodies
- (73.) Who is the speaker of present Lok Sabha ?
 (A.) Sh. Om Birla (B.) Sh.Kapil Sibal
 (C.) Sh.Anurag Singh Thakur (D.) Sh.Piyush Goyal
- (74.) Which one of the following river originates TA from Himalayas?
 (A.) Narmada (B.) Tapti (C.) Ravi (D.) Kaveri
- (75.) Which one of the following Indian state does not share its boundary with Myanmar?
 (A.) Mizoram (B.) Tripura (C.) Nagaland (D.) Manipur
- (76.) Look at this series: 2, 1, (1/2), (1/4),... What number should come next?
 (A.) 1/3 (B.) 1/6 (C.) 1/8 (D.) 1/9
- (77.) Pen is to poet as needle is to?
 (A.) Tailor (B.) Buppen (C.) Sewing (D.) Thread
- (78.) Look at this series: V, VIII, XI, XIV, ?, XX, ... what number should fill the blank?
 (A.) XVI (B.) XVII (C.) XVIII (D.) XIX
- (79.) Look at the series: F2, ?, D8, C16, B32,..... What number should fill the blank?
 (A.) G3 (B.) G4 (C.) E3 (D.) E4
- (80.) Complete the series



- (A.) (1) (B.) (2) (C.) (3) (D.) (4)
- (81.) Complete the series





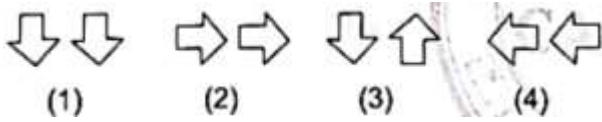
A Vision of Victory

VV ACADEMY


➤ RPF ➤ RRB GROUP - D ➤ POSTAL ➤ SI/CONSTABLE

www.vvacademy.com

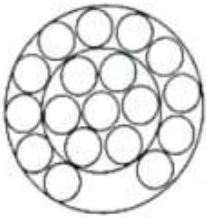
Address : Near Chuttugunta Signals, Eluru Road, VJA 2. Cell : 9985525552, 8977525552

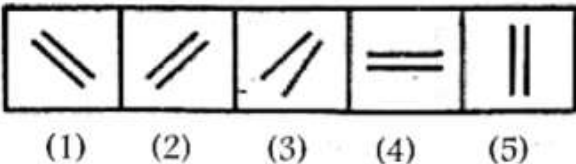
- (1) (A.) (1) (B.) (2) (C.) (3) (D.) (4)
- (82.) CMM, EOO, GQQ, __, KUU
 (A.) GRR (B.) GSS (C.) ISS (D.) ITT
- (83.) SCO, TEF, UGH, __?, WKL
 (A.) VU (B.) CNM (C.) UJI (D.) UT
- (84.) Which word does not belong with the others?
 (A.) Inch (B.) Foot (C.) Gram (D.) Meter
- (85.) Count the number of triangles in the given figure.



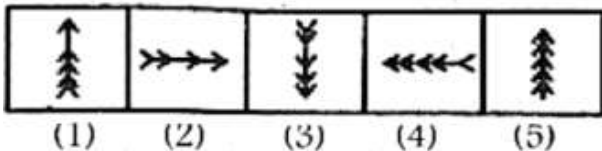
- (A.) 24 triangles (B.) 28 triangles (C.) 32 triangles (D.) 36 triangles
- (86.) How many circles in the figure?



- (A.) 20 (B.) 21 (C.) 22 (D.) 23
- (87.) Choose the figure which is different from the rest.



- (1) (2) (3) (4) (5)
- (A.) 1 (B.) 2 (C.) 3 (D.) 5
- (88.) Choose the figure which is different from the rest



- (1) (2) (3) (4) (5)
- (A.) 1 (B.) 2 (C.) 4 (D.) 5
- (89.) Choose the alternative which is closely resembles the mirror image of the given combination.

MALAYALAM

- (1) MALAYALAM (2) MAJAYAJAM
 (3) MAJAYAJAM (4) MAGAYAGAM

- (A.) 1 (B.) 2 (C.) 3 (D.) 4
- (90.) Select the alternative which represents three out of the five alternative figures which when fitted into each other would form a complete square.



A Vision of Victory

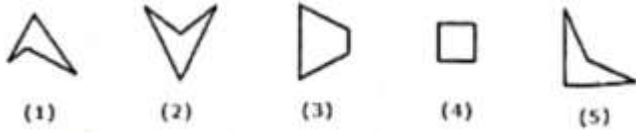
www.vvacademy.com

VV ACADEMY

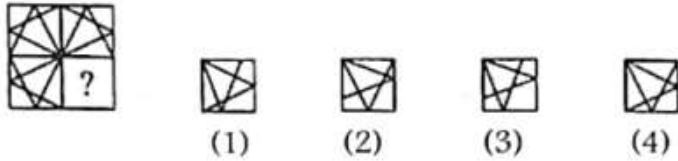
➤ RPF ➤ RRB GROUP - D ➤ POSTAL ➤ SI/CONSTABLE



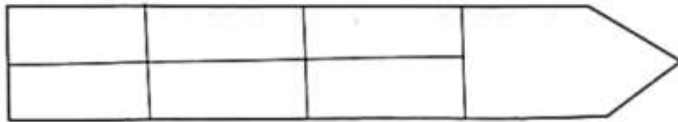
Address : Near Chuttugunta Signals, Eluru Road, VJA 2. Cell : 9985525552, 8977525552



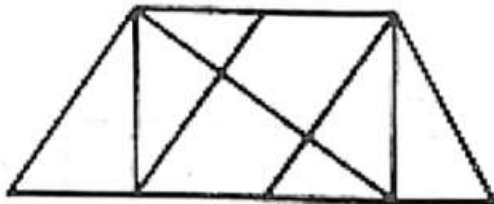
- (91.) Identify the figure that completes the pattern
- (A.) 124 (B.) 345 (C.) 123 (D.) 135



- (92.) How many rectangles are there in the figure given below?
- (A.) 1 (B.) 2 (C.) 3 (D.) 4



- (93.) Find the number of triangles in the given figure
- (A.) 16 (B.) 18 (C.) 20 (D.) 22



- (94.) Look at this series: 53, 53, 40, 40, 27, 27,... what number should come next?
- (A.) 8 (B.) 10 (C.) 12 (D.) 14

- (95.) What will be the next number?
7, 10, 8, 11, 9, 12,.....?
- (A.) 13 (B.) 14 (C.) 40 (D.) 53

- (96.) A shopkeeper bought 100 oranges and 100 bananas. He found 15% of oranges and 8% of bananas were rotten. Find the percentage of fruits in good condition?
- (A.) 7 (B.) 10 (C.) 12 (D.) 13

- (97.) A man completes a journey in 10 hours. He travels first half of the journey at the rate of 21 km/hr and second half at the rate of 24 km/hr. Find the total journey in km?
- (A.) 80.5% (B.) 85.5% (C.) 88.5% (D.) 90.5%

- (98.) A man completes a journey in 10 hours. He travels first half of the journey at the rate of 21 km/hr and second half at the rate of 24 km/hr. Find the total journey in km?
- (A.) 220 (B.) 224 (C.) 230 (D.) 234

- (99.) A cricketer has a average score of 50 runs in nine innings. Find out how many runs are to be scored by him in the tenth innings to raise the average score to 52?
- (A.) 60 (B.) 70 (C.) 80 (D.) 90

- (100.) Calculate the final value of 60% of 80?
- (A.) 42 (B.) 48 (C.) 56 (D.) 64

- (100.) 5 buses carry 250 passengers. How many passengers can be carried by 8 such buses?
- (A.) 300 (B.) 350 (C.) 400 (D.) 450



BIHAR CIRCLE-PA/SA EXAM -2022

ANSWER

(1.)	A	(2.)	A	(3.)	A	(4.)	B	(5.)	B
(6.)	A	(7.)	B	(8.)	A	(9.)	A	(10.)	C
(11.)	A	(12.)	B	(13.)	B	(14.)	A	(15.)	B
(16.)	D	(17.)	C	(18.)	C	(19.)	C	(20.)	C
(21.)	B	(22.)	B	(23.)	C	(24.)	B	(25.)	B
(26.)	A	(27.)	A	(28.)	A	(29.)	D	(30.)	A
(31.)	A	(32.)	D	(33.)	A	(34.)	A	(35.)	D
(36.)	C	(37.)	A	(38.)	D	(39.)	A	(40.)	A
(41.)	C	(42.)	B	(43.)	D	(44.)	C	(45.)	D
(46.)	A	(47.)	A	(48.)	D	(49.)	A	(50.)	C
(51.)	D	(52.)	D	(53.)	C	(54.)	D	(55.)	C
(56.)	C	(57.)	B	(58.)	B	(59.)	B	(60.)	C
(61.)	B	(62.)	C	(63.)	D	(64.)	B	(65.)	B
(66.)	C	(67.)	A	(68.)	A	(69.)	C	(70.)	A
(71.)	B	(72.)	D	(73.)	A	(74.)	C	(75.)	B
(76.)	C	(77.)	A	(78.)	B	(79.)	D	(80.)	B
(81.)	A	(82.)	C	(83.)	A	(84.)	C	(85.)	B
(86.)	A	(87.)	C	(88.)	B	(89.)	B	(90.)	D
(91.)	D	(92.)	B	(93.)	D	(94.)	B	(95.)	B
(96.)	C	(97.)	B	(98.)	B	(99.)	B	(100.)	C