



**TAMILANADU CIRCLE- PA/SA EXAM -2021**

- (1.) Blind Literature packets are not exempted from payment of following fees
  - (A.) Payment of postage
  - (B.) Registration fee
  - (C.) Airmail charges
  - (D.) Fee for acknowledgement
- (2.) Registration is obligatory in the case of
  - (A.) Any parcel exceeding 4 kilograms in weight.
  - (B.) Any insured article
  - (C.) Any registered article reposted after having been delivered
  - (D.) All of the above
- (3.) The purchaser of an Indian Postal Order presenting the order with counterfoil at the Post office of purchase will entail for repayment of
  - (A.) Original value of the order without commission
  - (B.) Original value of the order with commission
  - (C.) Fifty percent value of the order with commission
  - (D.) None of the above
- (4.) Foreign Philatelic Deposit Account Service is available to Foreign Collectors at
  - (A.) Philatelic Bureau located at Chennai
  - (B.) Philatelic Bureau located at Calcutta
  - (C.) Philatelic Bureau located at Mumbai
  - (D.) Philatelic Bureau located at New Delhi
- (5.) Airmail items received from any country for delivery in India
  - (A.) May be redirected to any place within India free of cost
  - (B.) May be redirected to another country by air on payment of air surcharge
  - (C.) Both (A) and (B)
  - (D.) None of the above
- (6.) In case of insured foreign articles containing bank notes or currency notes and gold coins or bullion, the article should be insured for the value of
  - (A.) Actual contents
  - (B.) Min of Rs 10000/-
  - (C.) Fifty percent of the actual contents
  - (D.) None of the above
- (7.) Validity period of instructions received for every change of address is
  - (A.) 3 months
  - (B.) 1 year
  - (C.) 3 years
  - (D.) 6 months
- (8.) Annual fee for Post Box and Post Bag together is
  - (A.) Rs 250/-
  - (B.) Rs 100/-
  - (C.) Rs 150/-
  - (D.) Rs 300/-
- (9.) The manufacture and use of fictitious postage stamps for any purpose whatsoever is prohibited, and is an offence punishable under
  - (A.) Section 263-A of the Indian Penal Code
  - (B.) Section 382 of Indian Penal Code
  - (C.) Section 390 of Indian Penal Code
  - (D.) None of the above
- (10.) Which of the following franked articles to be treated as unpaid
  - (A.) Franked articles bearing previous dates
  - (B.) Franked articles bearing later dates
  - (C.) Posted in the letter box
  - (D.) All of the above
- (11.) Redirection fee for parcels to any place served by Inland Post other than the delivery area of the same Post office or same post town is
  - (A.) One third of the prepaid rate
  - (B.) Half the prepaid rate
  - (C.) No fee
  - (D.) Amount equal to prepaid rate
- (12.) Letters posted as insufficiently prepaid is charged on delivery with
  - (A.) Double the amount of deficiency
  - (B.) Double the amount of postage
  - (C.) Three times the amount of postage
  - (D.) None of the above
- (13.) The general maximum limit of weight for a foreign parcel is



- (A.) 30 kg                      (B.) 25 Kg                      (C.) 15kg                      (D.) 20 Kg
- (14.) The undelivered outward foreign parcel are returned to the sender
- (A.) Free of charge  
(B.) On payment of postage charges for journey of parcel generally equitant to  
(C.) Half of the postage originally paid  
(D.) None of the above
- (15.) If a parcel addressed "Post Restante " is no taken delivery of within seven days following the date of its arrival in the office of delivery, the warehousing charge shall be levied from the
- (A.) Eighth day                      (B.) Fifteenth day  
(C.) Following day of its receipt at office of delivery      (D.) None of the above
- (16.) The Asian Pacific Postal Union was established in the year
- (A.) 1960                      (B.) 1959                      (C.) 1961                      (D.) 1962
- (17.) If any Postal articles found or believed to contain the prohibited items in course of transmission b post, it will be
- (A.) Returned to sender from the point of detection  
(B.) Intercepted and sent to the nearest Customs Collector  
(C.) Neither (a) nor (b)  
(D.) Both (a) and (b)
- (18.) The examination and assessment of duty on inward foreign articles are performed in the
- (A.) Foreign Post offices and Sub- Foreign Post offices  
(B.) Head Post Offices of the destination delivery Post Office  
(C.) Airport TMO  
(D.) None of the above
- (19.) Which of the following is not correct in respect of insurance of Foreign parcels?
- (A.) Foreign parcels addressed to certain countries can be insured for their entire transmission  
(B.) The limit up to which a parcel can be insured varies according to the country of destination  
(C.) Parcels addressed to countries for which insurance service is not available cannot be insured for the inland transit alone  
(D.) None of the above
- (20.) Complaints and enquiries regarding articles of letter mail and parcel mail in the Foreign post must be submitted before the lapse of one year counting from
- (A.) the day of posting  
(B.) the day following the day on which the article was posted  
(C.) the day preceding to the day of posting  
(D.) None of the above
- (21.) The IT Modernization Project of Department of Posts aims at
- (A.) Transforming the Department of Posts operational efficiency  
(B.) Improving service delivery of operational and administrative units  
(C.) Only (A) above  
(D.) Both (A) and (B)
- (22.) The IT Modernization Project is implemented in
- (A.) Five segments                      (B.) Six segments  
(C.) Seven segments                      (D.) Eight segments
- (23.) Disaster Recovery Centre for the IT Modernization Project of DOP is located at
- (A.) Mysore                      (B.) Chennai  
(C.) Navi Mumbai                      (D.) None of the above



- (24.) Intra operable Internet Banking Service has been made functional from  
(A.) 14.12.2018 (B.) 30.12.2016 (C.) 15.10.2019 (D.) 31.12.2019
- (25.) Which of the following stream of IT Modernization Project of Department of Posts aims at to prepare all the employees of the Department including GDS to enable them to function effectively in IT environment?  
(A.) Financial Integrator stream (B.) Core System Integrator stream  
(C.) Change Management Stream (D.) Mail operations Hardware stream
- (26.) The networking of all Post Offices covering the entire country will enable which of the following  
(A.) Tracking and tracing of all kinds of accountable mails and parcels in the country  
(B.) Providing real-time information to facilitate customer feedback  
(C.) Management functions  
(D.) All of the above
- (27.) The Primary Data Centre under the IT Modernization Project of Department of Posts has been functioning at  
(A.) Navi Mumbai since 3rd April 2012 (B.) Mysore since 30.12.2016  
(C.) Chennai since 3rd April 2013 (D.) None of the above
- (28.) Rural ICT Project of the Department of Posts does not envisage supply providing of the following to rural Branch Post Offices  
(A.) Computer hardware and other peripherals (B.) Solar charging device  
(C.) Network connectivity (D.) Iron Cash chest
- (29.) Computerizing the Savings Bank and Postal Life Insurance operations of the Department through one platform comes under the stream of  
(A.) Mail Operations Hardware stream (B.) The Change Management stream  
(C.) Financial System Integrator (D.) None of the above
- (30.) Expansion of CIS with reference to IT Modernization Project of Department of Posts is  
(A.) Core Integration Solutions (B.) Core Insurance Solutions  
(C.) Core Integration Segment (D.) None of the above
- (31.) Which of the following is not correct in respect of 5 year post office Recurring Deposit Account?  
(A.) Any number of accounts can be opened  
(B.) No advance deposit may be made at the time of opening of the account  
(C.) Loan can be repaid in one lump-sum or in equal monthly installments  
(D.) RD Account can be closed prematurely after 3 years from the date of account opening
- (32.) Which of the following are correct in respect of a Sukanya Samriddhi Account (SSA)?  
(A) Minimum amount for opening is Rs 250/-  
(B) Accounts can be closed prematurely after completion of 3 years  
(C) Deposits can be made in lump sum  
(D) Any number of accounts can be opened in the name of a girl child  
(A.) All are correct (B.) Only (A) and (C) are correct  
(C.) Only (B) and (C) are correct (D.) None of the above
- (33.) In which of the following circumstances of request, a remitter of a MO is required to pay any additional charge?  
(A.) Alteration in address or place of payment (B.) Stoppage of payment  
(C.) Alteration of Payee's name (D.) All of the above
- (34.) Survival Benefits that would be payable to an insurant holding 15 years term policy under Anticipated Endowment Assurance (AEA) is  
(A.) 20% each on completion of 6 years, 9 years & 12 years and 40% with accrued bonus on maturity  
(B.) 20% each on completion of 5 years, 10 years and 60% with accrued bonus on maturity



- (C.) 20% each on completion of 4 years, 9 years & 12 years and 40% with accrued bonus on maturity  
(D.) None of the above
- (35.) In which of the following types of Postal Life Insurance Policies, surrender is not permissible  
(A.) Endowment Life Assurance (EA) (B.) Whole Life Assurance (WLA)  
(C.) Joint Life Assurance (Yugal Suraksha) (D.) None of the above
- (36.) Cost of one My Stamp sheet is  
(A.) Rs 60/- (B.) Rs 300/-  
(C.) Rs 5/- (D.) None of the above
- (37.) A minimum quantity of pieces that can be accepted under Direct Post is  
(A.) 1500 (B.) 2000 (C.) 1000 (D.) 500
- (38.) Which of the following is incorrect with respect to Bill Mail Service?  
(A.) May be in the nature of financial statements, bills, monthly account bills  
(B.) Minimum quantity to be posted at a time is 5000  
(C.) Customer is required to handover bill mail fully sorted pin code wise  
(D.) None of the above
- (39.) What would be the premium payable per member per annum for the scheme PMSBY?  
(A.) Rs 24/- (B.) Rs 12/- (C.) Rs 36/- (D.) Rs 48/-
- (40.) Which of the following are eligible criteria for Joining Atal Pension Yojana (APY)?  
(A.) The age of the subscriber should be between 18 - 40 years  
(B.) He / She should have a savings bank account post office savings bank account  
(C.) Both (A) and (B) above  
(D.) None of the above
- (41.) The Rate of interest w.e.f. 01.10.2020 to 31.12.2020 in respect of Public Provident Fund Scheme is  
(A.) 7.6 Annually (B.) 7.4 Annually  
(C.) 4.0 Annually (D.) 7.1 Annually
- (42.) Up to which limit a Sub Postmaster of a Time Scale Sub Post Office can sanction deceased claim in National (Small) Savings Schemes where no nomination exists or no legal evidence is available?  
(A.) Rs 50,000/- (B.) Rs 1, 00,000/-  
(C.) Rs 5, 00,000/- (D.) None of the above
- (43.) Limit of conveyance of cash loose through departmental employee is  
(A.) Rs 20lakh (B.) Rs 5lakh  
(C.) Rs 2lakh (D.) None of the above
- (44.) Which of the following ways by which a SO is ordinarily provided with funds when the cash collections of the office are insufficient to meet its requirements  
(A.) By drawings from Bank authorized (B.) By remittance from another sub Post offices  
(C.) By remittance from the Head Office (D.) All the above
- (45.) Postmaster's order book (Ms-1) is a record, maintained in Head Offices of  
(A.) Unusual occurrences (B.) Examination of Uniforms and Kits  
(C.) Examination of locks in use (D.) All the above
- (46.) Designation of official in charge of a Mails Department of a Sorting Mail Office is  
(A.) Sub Sorting Assistant (B.) Mail Agent  
(C.) Head Sorting Assistant (D.) None of the above
- (47.) The Portfolio will always remain the personal custody of  
(A.) Head Sorting Assistant/Mail Guard (B.) ASRM of the set  
(C.) Sub Sorting Assistant (D.) None of the above
- (48.) Expansion of AMPC is





- (A.) Automatic Mail Packing Centre (B.) Automatic Mail Posting Centre  
 (C.) Auto Matic Parcel Centre (D.) None of the above
- (49.) Which of the following is not an Office of Exchange?  
 (A.) Chennai (B.) Nagpur (C.) Bombay (D.) Calcutta
- (50.) Memorandum of distribution of work is issued when more than -----official(s) work in an office or section  
 (A.) 1 (B.) 2 (C.) 3 (D.) 4
- (51.) Which one of the following type of resource is from iron ore?  
 (A.) Renewable (B.) Biotic  
 (C.) Flow (D.) Non-renewable
- (52.) Which one of the following is arabi crop?  
 (A.) Rice (B.) Millet (C.) Gram (D.) Cotton
- (53.) In which list of Indian Constitution does education come?  
 (A.) State List (B.) Union List  
 (C.) Concurrent List (D.) None of the above
- (54.) What does urbanization mean?  
 (A.) Migration of birds from one country to another (B.) Cutting of trees  
 (C.) Shift of population from rural areas to urban areas (D.) None of the above
- (55.) Which among of the following does not fall under the category of Aimperum Kappiyangal of Tamil literature?  
 (A.) Manimehalai (B.) Kundalakesi  
 (C.) Valayapathi (D.) Tirukkural
- (56.) Which is the Head Quarters of WTO?  
 (A.) Geneva - Switzerland (B.) The Hague  
 (C.) Manila (D.) None of the above
- (57.) The resolution of "Poorna Swaraj" was adopted at which session of the Congress?  
 (A.) Calcutta session of 1929 (B.) Lahore Session of 1929  
 (C.) Karachi session of 1931 (D.) Avadi session of 1927
- (58.) The outbreak of Tinnevely riot in 1908 was in response to the arrest and subsequent conviction of Indian Nationalists namely  
 (A.) Mahatma Gandhi and Jawaharlal Nehru  
 (B.) Subramania Siva and V.O. Chidambaram Pillai  
 (C.) C Rajagopalachari and Sardar Vedharathinam  
 (D.) None of the above
- (59.) \_\_\_\_\_(work ethic) is important because when you are at work you are expected to perform your duties without wasting time or getting paid for doing very little  
 (A.) Loyalty (B.) Organizational skills  
 (C.) Productivity (D.) Respect
- (60.) \_\_\_\_\_are the true reasons for our actions hen we have something to lose or gain as a result.  
 (A.) Motives (B.) Schemes (C.) Plans (D.) Rules
- (61.) Which of the following train is the fastest?  
 (A.) 25 m/sec (B.) 1500 m/min (C.) 90 km/hr (D.) All of these
- (62.) An Aeroplane flies twice as fast as a train which covers 60 miles in 80 minutes. What distance will the Aeroplane cover in 20 minutes?  
 (A.) 30 miles (B.) 35 miles (C.) 40 miles (D.) 50 miles



- (63.) A Train leaves Delhi at 4.10 PM and reaches Aligarh at 7.25 PM. The average speed of the train is 40 km/hr. What is the distance from Delhi to Aligarh?  
 (A.) 120 Km (B.) 130 Km (C.) 135 Km (D.) 140 km
- (64.) Simplify:  $1 - (1 - \{1 - (1 - (1 - 1))\})$   
 (A.) 0 (B.) 1 (C.) 2 (D.) 3
- (65.) 30% of apples of 450 are rotten. How many apples are in good condition?  
 (A.) 125 (B.) 180 (C.) 240 (D.) 315
- (66.) In a recent survey, 40% houses contained two or more people. Of those houses containing only one person, 25% were having only a male. What is the percentage of all houses, which contain exactly one female and no males?  
 (A.) 15 (B.) 40  
 (C.) 75 (D.) None of these
- (67.) A small and medium enterprise imports two components A and B from Taiwan and China respectively and assembles them with other components to form a toy. Component A contributes to 10% of production cost while component B contributes to 20% of production cost. Usually the company sells this toy at 20% above the production cost. Due to increase in the raw material and labour cost in both the countries, component A became 20% costlier and component B became 40% costlier. Owing to these reasons the company increased its selling price by 15%. Considering that cost of other components does not change, what will be the profit percentage if the toy is sold at the new price?  
 (A.) 15.5% (B.) 25.5% (C.) 35.5% (D.) 40%
- (68.) An umbrella marked at Rs 80/- is sold for Rs.68/-. The rate of discount is  
 (A.) 15% (B.) 17% (C.) 18.5% (D.) 20%
- (69.) A dress shop marked down all items as following:
- | Group | Regular Price | Sale price |
|-------|---------------|------------|
| A     | Rs 65/-       | Rs 55/     |
| B     | Rs 60/-       | Rs 50/     |
| C     | Rs70/-        | Rs 60/     |
| D     | Rs 75/-       | Rs 65/     |
- Which group of items was offered at the greatest rate of discount?  
 (A.) A (B.) B (C.) C (D.) D
- (70.) Two stores A and B mark the price of an item identically. A allows 3 successive discounts of 10% each. B allows 10% discount on the list price and a subsequent discount of 19%. Under the circumstances, which of the following is true?  
 (A.) The price of the article is cheaper at A (B.) The price of the article is cheaper at B  
 (C.) The price of the article is same at A and B (D.) The price cannot be determined
- (71.) A box is bought of Rs 75/- and sold at a gain of 8%. Find its selling price.  
 (A.) Rs 81/- (B.) Rs 82/- (C.) Rs 89/- (D.) Rs 86/-
- (72.) A sum was deposited at simple interest at a certain rate for three years. Had it been invested at 1% higher rate, it would have fetched Rs 5100/- more. The sum is  
 (A.) Rs 1.2lakh (B.) Rs 1.25lakh  
 (C.) Rs 1.5lakh (D.) Rs 1.7lakh
- (73.) The interest earned on Rs 15000/- in three years at simple interest is Rs 5400/-. Find the rate of interest per annum.  
 (A.) 11.5% (B.) 12% (C.) 12.5% (D.) 15%



- (74.) The average monthly expenditure of a family is Rs. 2200 during first three months, Rs. 2550 during next four months and Rs. 3120. During last five months of the year. If the total saving during the year was Rs. 1260. What is the average monthly income?  
 (A.) Rs 2200/- (B.) Rs 2250/- (C.) Rs 2805/- (D.) Rs 2075/-
- (75.) Of the three numbers, second is twice the first and is also thrice the third. If the average three numbers is 44, what is the largest number?  
 (A.) 44 (B.) 72 (C.) 48 (D.) 66
- (76.) The average age of A and B is 20 years. If A is replaced by C, the average age becomes 19 years and if B is replaced by C, the average age becomes 21 years. Find the ages of A, B and C.  
 (A.) 20, 22 and 18 (B.) 18, 20 and 22  
 (C.) 19, 20 and 21 (D.) 22, 18 and 20
- (77.) A and B together can complete a piece of work in 15 days and B alone in 20 days. In how many days can A alone complete the work?  
 (A.) 55 days (B.) 60 days (C.) 65 days (D.) 58 days
- (78.) A and B working separately can do a piece of work in 9 and 12 days respectively. If they work for a day alternatively, beginning with 'A', in how many days, the work will be completed?  
 (A.) 10 days (B.) 12 days (C.) 13 days (D.) 11 days
- (79.) 2 men and 3 boys can do a piece of work in 10 days while 3 men and 2 boys can do the same work in 8 days. In how many days can 2 men and 1 boy do the work?  
 (A.) 14 days (B.) 13 days (C.) 12.5 days (D.) 15 days
- (80.) A cyclist covers a distance of 750 m in 2 min 30 sec. What is the speed in Km/hr of the cyclist?  
 (A.) 16 km/hr (B.) 19 km/hr (C.) 17 km/hr (D.) 18 km/hr
- (81.) If A, B and C are to be seated in a row, but C and D cannot be together. Also B cannot be at the third place from the left then which of the following must be definitely false?  
 (A.) A is at the second place (B.) A is at the first place  
 (C.) A is at the third place (D.) A is at the fourth place
- (82.) Rima is taller than Sarika but not taller than Reena. Reena and Tanya are of the same height. Rima is shorter than Anu. Amongst all the girls who is the shortest?  
 (A.) Anu (B.) Sarika  
 (C.) Rima (D.) Reena and Tanya
- (83.) Q types faster than R but not as fast as V. T types faster than R. S types faster than V. Who amongst the five types the fastest?  
 (A.) S (B.) T  
 (C.) V (D.) Incomplete data
- (84.) D said, "A's father is the only brother of my sister's son." How is A's father related to D?  
 (A.) Cousin (B.) Aunt  
 (C.) Nephew (D.) Incomplete data
- (85.) Pointing to a photograph a woman says, "he is the son of the wife of my husband's father. How is the man related to the woman?  
 (A.) Son (B.) Brother in law  
 (C.) Brother (D.) Son in law
- (86.) If MINERAL is written as QRSTUVW and SOUND is written as ABCSD, then how READER be written in the same code  
 (A.) SBFEFS (B.) QDZCDQ (C.) TUDVUT (D.) UTVDTU
- (87.) In a certain code SHORE is coded as QFMPC. Which of the following will be coded as IGMQI  
 (A.) RAZER (B.) GEKOG (C.) KIOSK (D.) PAPER



A Vision of Victory

# V V ACADEMY

➤ RPF ➤ RRB GROUP - D ➤ POSTAL ➤ SI/CONSTABLE

www.vvacademy.com

Address : Near Chuttugunta Signals, Eluru Road, VJA 2. Cell : 9985525552, 8977525552



(88.) In the following questions, rearrange the letters of given word in the alphabetical order. Choose the correct order and select the correct option

SCHOOL

- (A.) CHSOOL      (B.) CHLOOS      (C.) CHLSOO      (D.) CLOOSH

(89.) CURTAIL

- (A.) ACIRLTU      (B.) ACILTUR      (C.) ACILRTU      (D.) ACILRUT


(90.) In the following questions, arrange the given words in a meaningful sequence and then choose the most appropriate order from given four alternatives.

- 1)Cow      2)Ghee      3)Butter      4)Churn      5)Milk  
 (A.) 5, 4, 3, 2, 1      (B.) 3, 4, 2, 1, 5      (C.) 2, 3, 4, 5, 1      (D.) 1, 5, 4, 3, 2

(91.) In the following questions, arrange the given words in a meaningful sequence and then choose the most appropriate order from given four alternatives.

- 1)Sentence      2)Chapter      3) Letter      4)Book      5)Word      6) Paragraph  
 (A.) 3, 2, 1, 6, 5, 4      (B.) 3, 2, 6, 1, 5, 4  
 (C.) 3, 1, 5, 6, 2, 4      (D.) 3, 6, 2, 5, 1, 4

(92.) In each of the following questions, a group of figure is given. Choose the figure from the options which will continue the series.




- (A.) A      (B.) B      (C.) C      (D.) D

(93.) In each of the following questions, a group of figure is given. Choose the figure from the options which will continue the series.



- (A.) A      (B.) B      (C.) C      (D.) D

(94.) In each of the following questions, a group of figure is given. Choose the figure from the options which will continue the series.





A Vision of Victory

**VV ACADEMY**

▶ RPF ▶ RRB GROUP - D ▶ POSTAL ▶ SI/CONSTABLE


Address : Near Chuttugunta Signals, Eluru Road, VJA 2. Cell : 9985525552, 8977525552

www.vvacademy.com



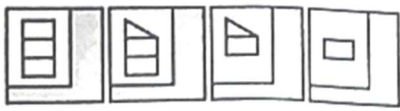
- (A.) A                      (B.) B                      (C.) C                      (D.) D

(95.) In each of the following questions, a group of figure is given. Choose the figure from the options which will continue the series.



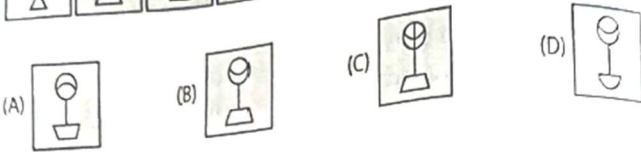
- (A.) A                      (B.) B                      (C.) C                      (D.) D

(96.) In each of the following questions, a group of figure is given. Choose the figure from the options which will continue the series.



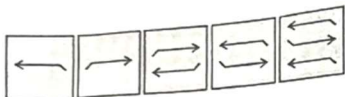
- (A.) A                      (B.) B                      (C.) C                      (D.) D

(97.) In each of the following questions, a group of figure is given. Choose the figure from the options which will continue the series.



- (A.) A                      (B.) B                      (C.) C                      (D.) D

(98.) In each of the following questions, a group of figure is given. Choose the figure from the options which will continue the series.



- (A.) A                      (B.) B                      (C.) C                      (D.) D

(99.) In each of the following questions, a group of figure is given. Choose the figure from the options which will continue the series.



A Vision of Victory


# VV ACADEMY

➤ RPF ➤ RRB GROUP - D ➤ POSTAL ➤ SI/CONSTABLE

Address : Near Chuttugunta Signals, Eluru Road, VJA 2. Cell : 9985525552, 8977525552

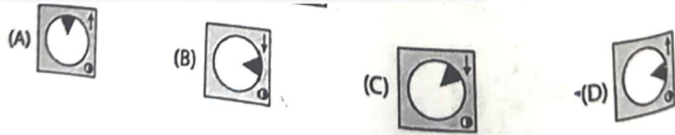
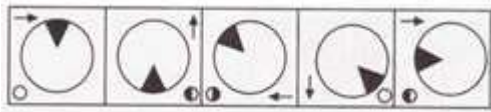


www.vvacademy.com



(A.) A                      (B.) B                      (C.) C                      (D.) D

(100.) In each of the following questions, a group of figure is given. Choose the figure from the options which will continue the series.



(A.) A                      (B.) B                      (C.) C                      (D.) D

**TAMILANADU CIRCLE TAMILANADU CIRCLE- PA/SA EXAM -2021**

**ANSWER**

(1.)	C	(2.)	D	(3.)	A	(4.)	C	(5.)	C
(6.)	A	(7.)	A	(8.)	A	(9.)	A	(10.)	D
(11.)	B	(12.)	A	(13.)	D	(14.)	B	(15.)	A
(16.)	C	(17.)	B	(18.)	A	(19.)	C	(20.)	B
(21.)	D	(22.)	D	(23.)	A	(24.)	A	(25.)	C
(26.)	D	(27.)	D	(28.)	D	(29.)	C	(30.)	B
(31.)	B	(32.)	B	(33.)	C	(34.)	A	(35.)	D
(36.)	B	(37.)	C	(38.)	D	(39.)	B	(40.)	C
(41.)	D	(42.)	A	(43.)	B	(44.)	D	(45.)	D
(46.)	C	(47.)	A	(48.)	D	(49.)	B	(50.)	A
(51.)	D	(52.)	C	(53.)	C	(54.)	C	(55.)	D
(56.)	A	(57.)	B	(58.)	B	(59.)	C	(60.)	A
(61.)	D	(62.)	A	(63.)	B	(64.)	A	(65.)	D
(66.)	D	(67.)	B	(68.)	A	(69.)	B	(70.)	C
(71.)	A	(72.)	D	(73.)	B	(74.)	C	(75.)	B
(76.)	D	(77.)	B	(78.)	A	(79.)	C	(80.)	D
(81.)	B	(82.)	B	(83.)	D	(84.)	C	(85.)	B
(86.)	D	(87.)	C	(88.)	B	(89.)	C	(90.)	D
(91.)	C	(92.)	D	(93.)	C	(94.)	C	(95.)	C
(96.)	C	(97.)	D	(98.)	B	(99.)	B	(100.)	D