



ODISHA CIRCLE- PA/SA EXAM -2021

- (1.) According to PO Guide Part 1. Which of the following is correct?
(A.) Entries in the Franking Machine ledger should be checked once in a month
(B.) The franked articles bearing previous dates will not be treated as un-paid article
(C.) Machine franked articles can be posted at more than two offices specified by SPO in the licence
(D.) Machine Franked articles posted in letter boxes shall not be treated as unpaid articles
- (2.) According to PO Guide Part-1, which of the following is incorrect?
(A.) The franked articles must be tendered at the window of the office for posting
(B.) Each dispatch of articles should be tendered in separate bundles according to the value of frank.
(C.) A separate daily docket should be submitted for each machine possessed by the licensee.
(D.) The Post office shall grant a receipt for any money paid by licensee in form ACG-17
- (3.) The facility of pre-payment of postage in cash is available at selected offices to firms or business establishment who posts not less than
(A.) 100 articles at a time (B.) 200 articles at a time
(C.) 7500 articles at a time (D.) 1000 articles at a time
- (4.) Subject to the provisions, a value payable article marked 'Poste Restante' is kept in the post office to which it is addressed for a period of
(A.) 07 days only (B.) 30 days only
(C.) One year only (D.) Unlimited days
- (5.) Which of the following is incorrect?
(A.) A postal article can be intercepted and redirected while in transit.
(B.) No redirection fee will be recovered from the sender where a parcel has been returned as unclaimed
(C.) A postal article can only be redirected at the post office to which it is addressed
(D.) None of the above
- (6.) Complaints relating to money orders and VP articles should be preferred within
(A.) 03 months from the date of issue or booking
(B.) 06 months from the date of issue or booking
(C.) 09 months from the date of issue or booking
(D.) 12 months from the date of issue or booking
- (7.) Complaints relating to loss or damage to a registered or insured article where a claim for compensation is made should be preferred within
(A.) 03 months from the date of posting of the article
(B.) 06 months from the date of posting of the article
(C.) 09 months from the date of posting of the article
(D.) 12 months from the date of posting of the article
- (8.) A letter should not weigh more than
(A.) 01 kg (B.) 02 Kg (C.) 0.5 Kg (D.) 05 Kg
- (9.) According to PO Guide Part-I, which of the following is incorrect
(A.) Letters, Post cards and letter cards are treated as first class mail
(B.) Articles sent in envelopes which are wholly transparent will be transmitted by post
(C.) A letter posted insufficiently prepaid is charged on delivery with double the amount of deficiency
(D.) Letters may be transmitted by post 1 with or without pre-payment of postage
- (10.) In which of the following registration is obligatory?
(A.) Any registered article which is posted after having been delivered
(B.) Any insured article
(C.) Any value-payable article



- (D.) All of the above
- (11.) The letters A&U in 'APPU' refers to
(A.) Asia & Union (B.) Asia & Universe
(C.) Asian & Union (D.) Asian & Universe
- (12.) APPU was established in
(A.) 1961 (B.) 1971 (C.) 1981 (D.) 1951
- (13.) In the foreign post the term "Letter Post" applies to which of the following postal articles
(A.) Letters (B.) Post Cards
(C.) Aerogramme (D.) All of the above
- (14.) The period of detention of undelivered articles addressed to foreign country is governed by the internal regulations of the
(A.) Country of origin (B.) Country of destination
(C.) Both A & B (D.) None of the above
- (15.) According to PO Guide Part-II. Which of the following is correct?
(A.) Undeliverable correspondence is returned to the country of origin and delivered to the sender on payment of charges due, if any
(B.) Postcards which do not bear the address of the sender are not returned
(C.) Both A&B
(D.) None of the above
- (16.) The "Printed Paper" service in the foreign post corresponds to which of the following service in the inland post
(A.) Speed Post (B.) Registered Post
(C.) Book Packet (D.) Parcel Post
- (17.) According to Clause 77 of PO Guide Part-II, the insurance limit adopted by India is
(A.) 5000 (B.) 10000 (C.) 15000 (D.) 25000
- (18.) With reference to foreign parcels which of the following is incorrect
(A.) The length should not exceed 105metre
(B.) The sum of the length and the greatest circumference measured in a direction other than the length should not exceed 2metres
(C.) A parcel should have a surface measuring not less than 90 mm x 140
(D.) The general maximum limit of weight is 10Kgs
- (19.) Advice of delivery can be obtained for insured parcels addressed to any country to which the service is available except for parcels addressed to
(A.) Great Britain (B.) South Africa
(C.) Canada (D.) New Zealand
- (20.) Money orders from foreign countries that has become void cannot be paid after the expiry of
(A.) 06 months from the date of receipt in India (B.) 05 months from the date of receipt in India
(C.) 02months from the date of receipt in India (D.) 01 month from the date of receipt in India
- (21.) The term FSI in IT modernization project of Department of Posts refers
(A.) Finance System Integrator (B.) Financial Services System Integrator
(C.) Finance and Service Integrator (D.) Finacle Service Integrator
- (22.) The term CSI in IT modernization project of Department of Posts refers to
(A.) Core Service Integrator (B.) Common System Integrator
(C.) Core System Integrator (D.) Common Service Integrator
- (23.) The letter 'A' standing second from left in the term 'DARPAN' refers to
(A.) Advancement (B.) Advance



- (C.) Achievement (D.) Annual
- (24.) The letter 'N' in the term 'PNOP refers to
(A.) Number (B.) Network (C.) National (D.) Node
- (25.) Through how many different segments, IT modernization project is being implemented?
(A.) 05 (B.) 08 (C.) 10 (D.) 12
- (26.) With reference to MNOP, what 'KPI represents?
(A.) Key Performance Indicator (B.) Key Postal service
(C.) Key Performance Incentive (D.) Key Project Indicator
- (27.) Full form of 'CEPT
(A.) Centre for Excellence in Postal Technology (B.) Centre in Excellence of Postal Technology
(C.) Centre of Excellence for Postal Technology (D.) Centre for Excellence on Postal Technology
- (28.) The IT modernization project was approved by Government of India in
(A.) November 2011 (B.) November 2012
(C.) March 2011 (D.) March 2012
- (29.) Which of the following organization is not part of IT modernization project of India Post?
(A.) Infosys (B.) TCS (C.) Sify (D.) Wipro
- (30.) Which of the following stream of IT modernization project digitized all the postal, mails and counter operations of the offices on a single central ser based platform?
(A.) PSI (B.) CSI (C.) MOH (D.) DCF
- (31.) The round and oblong MO stamps and insurance seal should be kept in custody of
(A.) Sub Account PA (B.) Money Order PA
(C.) Postmaster (D.) None of the Above
- (32.) The SPM should check system generated DTR of BOs by invoking which menu in SAP?
(A.) ZFR_DTR_NEW (B.) ZFR_DAY_NEW
(C.) ZFBL3N (D.) FAGLLO3
- (33.) Which of the following T-code is used in connection with supply of postage and other stamps in CSI?
(A.) MIGO (B.) ZFFL3N (C.) H02 (D.) ZFFV 50
- (34.) According to SB order No 36/2020, what is the revised death claim sanction limit of SPM of LSG SO in National (Small) Savings Schemes where no nomination exists or no legal evidence is available?
(A.) 10000 (B.) 25000 (C.) 50000 (D.) 100000
- (35.) Which SB Order supplied specimen of various forms to be used in operation of National (Small) Savings Schemes in Hindi and English
(A.) 35/2020 (B.) 36/2020 (C.) 37/2020 (D.) 38/2020
- (36.) Transit bags must always be closed and sealed in the presence of
(A.) The IRM/ Asst Supdt of RMS (B.) The Head Sorting Assistant Mail Guard/ Mail agent
(C.) The Sr most MTS of the set (D.) None of the above
- (37.) The preservation period of order book of a mail office and a section is
(A.) 12 months (B.) 16 months (C.) 02 Year (D.) 03 Year
- (38.) The Supervisor of CRC is responsible for
(A.) Timely opening of set
(B.) Maintaining master data for the interim dispatch
(C.) Opening bag allocation and closing bag allocation
(D.) All of the above
- (39.) The Post Office which exchanges mails with foreign countries is known as
(A.) Sub-foreign Post Office (B.) Office of Exchange
(C.) Office of exchange of transit (D.) None of the above



- (40.) All record relating to articles received or dispatched by the foreign post should be preserved for a period of
 (A.) 06 Months (B.) 12 Months (C.) 18 Months (D.) 24 Months
- (41.) What is the maximum weight and insurance of a speed post consignment?
 (A.) 35 Kg and Rs. 1Lakh (B.) 20 Kg and Rs 1Lakh
 (C.) 35 Kg and Rs 10000 (D.) 20 Kg and Rs 10000
- (42.) Registered newspaper is published in large numbers at intervals of not more than
 (A.) 365 Days (B.) 180 Days (C.) 31 Days (D.) 30 Days
- (43.) In case SB account balance not raised to Rs.500/- at the end of financial year, how much amount will be deducted Account Maintenance fee?
 (A.) 100.00 (B.) 50.00 (C.) 20.00 (D.) 10.00
- (44.) The interest on PPF account shall be calculated for the calendar month on the lowest balance in the account between the close of the
 (A.) 10th day and the end of the month (B.) 05th day and the end of the month
 (C.) 10th day and 15th of the month (D.) 05th day and 15th of the month
- (45.) What is the Minimum amount for opening SCSS account and maximum balance that can be retained?
 (A.) Rs. 500 and Rs. 5 Lack (B.) Rs. 500 and Rs. 15 Lack
 (C.) Rs. 1000 and Rs. 15 Lack (D.) Rs. 1000 and Rs. 1.5 Lack
- (46.) Loan and surrender facility under whole life Assurance (Suraksha) is available after
 (A.) Loan-04 years Surrender-03 years (B.) Loan-03 years Surrender-05 years
 (C.) Loan-03 years Surrender-03 years (D.) Loan-04 years Surrender-05 years
- (47.) What is the last declared bonus PLI Endowment Assurance (Santosh) Rs 1000.00 assured per year?
 (A.) Rs 50/- (B.) Rs 52/- (C.) R 55/- (D.) Rs 58/-
- (48.) Deen Dayal SPARSH Yojana is a scholarship scheme to award children in the class Category of standard VI to IX. What is the full form of SPARSH?
 (A.) Scholarship for Promotion of Aptitude & Research in Stamps as a Hobby
 (B.) Scholarship for Promotion of Research in Stamps as a Hobby
 (C.) System of Aptitude & Research in Status as a Hobby
 (D.) Students Promotion of Aptitude & Research in Status as a Hobby
- (49.) My Stamp was first introduced in India during the World Philatelic Exhibition
 (A.) INDIPEX 1973 (B.) ASTANA 197
 (C.) INTEX 2013 (D.) INDIPEX 2011
- (50.) Amount Transferred from addressee on delivery of COD article by post is remitted to the sender through
 (A.) MO (B.) e-Post (C.) e-Payment (D.) e-Pay
- (51.) Which of the following areas or regions is most prone to earthquakes?
 (A.) Deccan Plateau (B.) Plains of northern India
 (C.) Ganga Brahmaputra Valley (D.) Western Ghats
- (52.) India accounts for which percent of the world's land surface area?
 (A.) 1.8% (B.) 2.4% (C.) 2.8% (D.) 3.2%
- (53.) In Indian Polity which one is supreme?
 (A.) The Supreme Court (B.) The Constitution
 (C.) The Parliament (D.) Religion
- (54.) Which article of Indian Constitution enumerates Fundamental Duties of Indian Citizens?
 (A.) Article 50 A (B.) Article 50 B (C.) Article 51 A (D.) Article 51 B
- (55.) When is the National Sports Day (Major Dhyan Chand Jayanti) celebrated?



- (A.) 25 August (B.) 26 August (C.) 28 August (D.) 29 August
- (56.) Who among the following won both Gold and Bronze medal in Tokyo Paralympics 2020?
(A.) Avani Lekhara (B.) Bhavina Patel
(C.) Pramod Bhagat (D.) Suhas Yathiraj
- (57.) Quit India Movement was launched in response to
(A.) Cabinet Mission (B.) Cripps Proposals
(C.) Simon Commission Report (D.) Wavell Plan
- (58.) Who composed the 'Gayatri Mantra'?
(A.) Vishwamitra (B.) Vasishtha
(C.) Indra (D.) Parikshita
- (59.) Due to presence of guests at home you are getting late to office. What should you do?
(A.) Ask your colleague not to come in time
(B.) Prepare a fake story to tell your higher authority
(C.) Don't care and will attain office as usual late
(D.) Intimate the matter to higher authority and ask for permission
- (60.) When you assumed the charge of Sub Postmaster, Old Bazar SO, you received a complaint from one savings account holder regarding balance discrepancy. Checking all records you found hints of misappropriation of money, what will you do?
(A.) Try to suppress the matter in consultation with previous SPM.
(B.) Tell him that no amount will be refunded.
(C.) Forward the complaint with detailed report immediately to higher authority
(D.) Find the modus operandi and make misappropriation of money from other accounts standing there.
- (61.) The average of 11 numbers is 10.8. If the average of the first six is 10.5 and that of the last six is 11.4 then the middle (6th) number is
(A.) 10.5 (B.) 11.5 (C.) 12.5 (D.) 13.5
- (62.) The average wage of 500 workers was found to be Rs 200 Later on it discovered that the wages of two workers were misread as 180 and 20 instead of 80 and 220. The correct average wage is:
(A.) Rs.200.10 (B.) Rs.200.20 (C.) Rs 200.50 (D.) Rs.201.00
- (63.) A is thrice as good a workman as B and therefore, able to finish a job in 60 days less than B. Working together they will do it in
(A.) 20 days (B.) 21.5 days (C.) 22.5 days (D.) 25 days
- (64.) Two taps can fill a tank in 4 Hr and 6 Hr respectively A third tap empty the tank in 3 Hr If all the three taps are opened, how much time will it take to fill the tank?
(A.) 6 Hr (B.) 9 Hr (C.) 12 Hr (D.) 15 HI
- (65.) 10 men working 6 hours a day can complete a work in 18 days. How many hours a day must 15 men work to complete the same work in 12 days?
(A.) 6 (B.) 10 (C.) 12 (D.) 15
- (66.) If a man walking at the rate of 5 km/h crosses a bridge in 15 min. The length of the bridge (in mtr) is
(A.) 600 (B.) 750 (C.) 1000 (D.) 1250
- (67.) A boy goes to his school from his house at a speed of 3 km/h and return at a speed of 2 km/h. If he takes 5 h in going and coming the distance between his house and school is
(A.) 5 Km (B.) 55 Km (C.) 6 Km (D.) 6.5 Km
- (68.) In an hour a boat goes 11 Km along the stream and 5 Km against the stream. The speed of the boat in still water (in Km/h) is
(A.) 6 (B.) 8 (C.) 9 (D.) 10
- (69.) If 70 cows can graze on a field in 12 days, how many days will 40 cows graze on the same field?



- (A.) 21 days (B.) 20 days (C.) 14 days (D.) 10 days
- (70.) A car uses 20 liters of petrol for 100 Km. How far will it run for 5 liters?
 (A.) 15 (B.) 20 (C.) 25 (D.) 30
- (71.) Find the value of $\frac{(0.3)^3 + (0.6)^3 + (0.1)^3 - (0.3)(0.6)(0.1)}{(0.3)^2 + (0.6)^2 + (0.1)^2 - 0.18 - 0.06 - 0.03}$
 (A.) 1 (B.) 0 (C.) 3 (D.) 6
- (72.) Find the value of $\frac{(0.5)^3 + (0.6)^3}{(0.5)^2 - (0.3) + (0.6)^2}$
 (A.) 1 (B.) 1.1 (C.) 0.3 (D.) 6
- (73.) The ratio of the number of boys and girls in a school is 3:2. If 20% of the boys and 25% of girls are scholarship holders. The percentage of the school students who are not scholarship holders is
 (A.) 78% (B.) 77% (C.) 55% (D.) 79%
- (74.) If a student secured 30% and led by 108 marks. Another student secured 52% and got 24 marks more than minimum pass marks. What is the least pass marks?
 (A.) 280 (B.) 284 (C.) 288 (D.) 290
- (75.) In an election between two candidates 75% of the voters cast their votes, out of which 2% votes were declared invalid. A candidate got 9261 votes which were 75% of the valid votes. The total number of voters enrolled in that election was:
 (A.) 16000 (B.) 16800 (C.) 17400 (D.) 18000
- (76.) If an article whose cost price Rs.840, is sold for a profit of 10% and then it is sold again for a loss of 5% find the last selling price
 (A.) 870.50 (B.) 876 (C.) 877.80 (D.) 891
- (77.) A man sells a book at a profit of 20%. If he had bought it at 20% less and sold it for Rs. 18 less, he would have gained 25%. The cost price of the book is ?
 (A.) 110 (B.) 122 (C.) 90 (D.) 78
- (78.) A sum of Rs.1000000 is lent partly 8% and remaining at 10% per annum. If the yearly interest on the average is 9.2%. The two parts are
 (A.) 4000, 6000 (B.) 4500, 3500 (C.) 5000, 5000 (D.) 5500, 4500
- (79.) Divide Rs.2379.00 into 3 parts so that their amount after 2, 3 and 4 years respectively may be equal, the rate of interest being 5% per annum at simple rate. The first part is given by
 (A.) 759 (B.) 792 (C.) 818 (D.) 828
- (80.) A company produces an average 4000 items per month for the first 3 months How much items, it must produce on an average per month over the next 9 months to average 4375 items per month over the whole year?
 (A.) 4200 (B.) 4500 (C.) 4800 (D.) 5000
- (81.) Out of the given answer figures, which is the correct one to replace the question mark?



A Vision of Victory

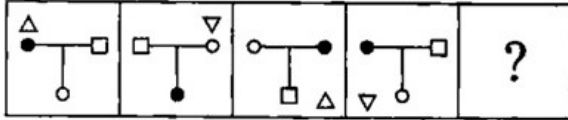
www.vvacademy.com

VV ACADEMY

➤ RPF ➤ RRB GROUP - D ➤ POSTAL ➤ SI/CONSTABLE



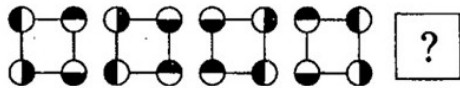
Address : Near Chuttugunta Signals, Eluru Road, VJA 2. Cell : 9985525552, 8977525552



- (a)
- (c)
- (b)
- (d)

(A.) b (B.) a (C.) c (D.) d

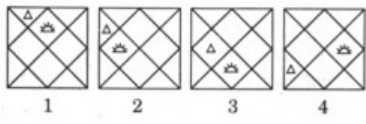
(82.) Out of the given answer figures which is the correct one to replace the question mark?



- (a)
- (c)
- (b)
- (d)

(A.) a (B.) d (C.) b (D.) c

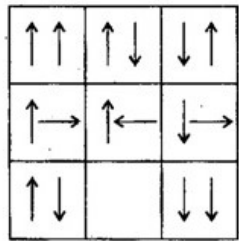
(83.) What will be fifth in the sequence?



- (a)
- (c)
- (b)
- (d)

(A.) a (B.) c (C.) b (D.) d

(84.) Out of the given answer figures, which is the correct one to replace the empty Box



- (a)
- (c)
- (b)
- (d)



A Vision of Victory

V V ACADEMY

➤ RPF ➤ RRB GROUP - D ➤ POSTAL ➤ SI/CONSTABLE

Address : Near Chuttugunta Signals, Eluru Road, VJA 2. Cell : 9985525552, 8977525552

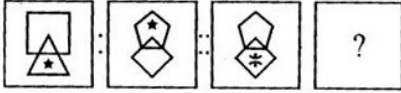
www.vvacademy.com



- (A.) b (B.) d (C.) a (D.) c

(85.) Out of the given answer figures, which is the correct one to replace the question mark?

Question Figure



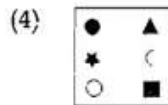
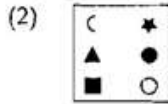
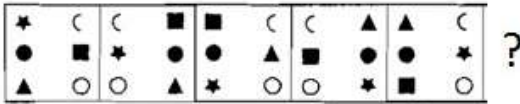
Answer Figures



- (A) (B) (C) (D)

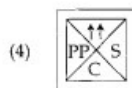
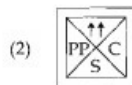

- (A.) D (B.) C (C.) A (D.) B

(86.) Which of the options will replace the question mark?



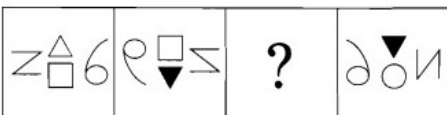
- (A.) 1 (B.) 4 (C.) 3 (D.) 2

(87.) What comes in place of question mark?



- (A.) 2 (B.) 4 (C.) 1 (D.) 3

(88.) What will replace the question mark?



Options :



- (1) (2) (3) (4)

- (A.) 2 (B.) 1 (C.) 3 (D.) 4



A Vision of Victory

www.vvacademy.com

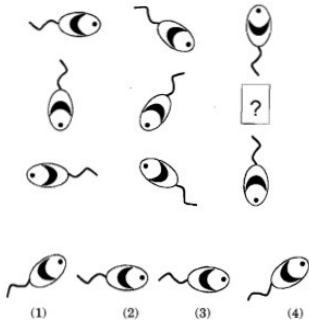
VV ACADEMY

➤ RPF ➤ RRB GROUP - D ➤ POSTAL ➤ SI/CONSTABLE



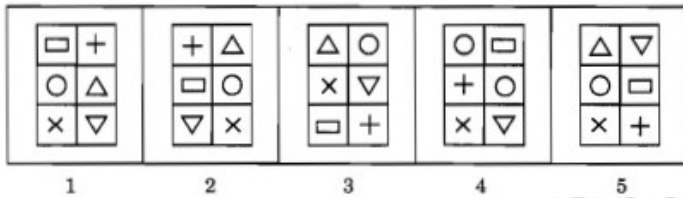
Address : Near Chuttugunta Signals, Eluru Road, VJA 2. Cell : 9985525552, 8977525552

(89.) What comes in place of question mark?



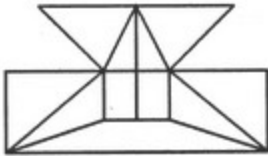
- (A.) 1 (B.) 2 (C.) 3 (D.) 4

(90.) Out of the given 5 images, one image is not same as the other 4. Which is it?



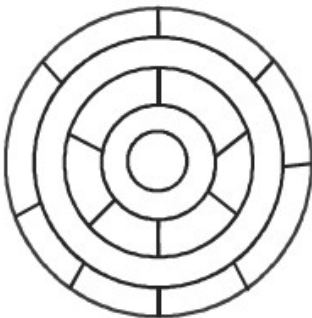
- (A.) 3 (B.) 4 (C.) 2 (D.) 5

(91.) Minimum number of straight lines require to make the given figure?



- (A.) 16 (B.) 17 (C.) 18 (D.) 19

(92.) What is the minimum number of different colours required to paint the given figure such that no two adjacent regions have the same color?



- (A.) 3 (B.) 4 (C.) 5 (D.) 6

(93.) Choose the set of figures which follows the given rule.

Rule: Closed figures gradually become open and open figures gradually become closed.



A Vision of Victory

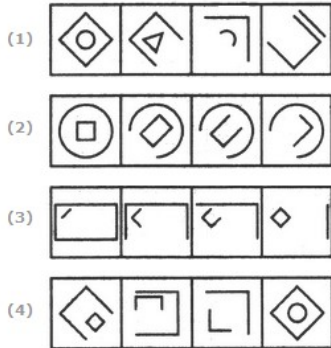
www.vvacademy.com

VV ACADEMY

➤ RPF ➤ RRB GROUP - D ➤ POSTAL ➤ SI/CONSTABLE

Address : Near Chuttugunta Signals, Eluru Road, VJA 2. Cell : 9985525552, 8977525552





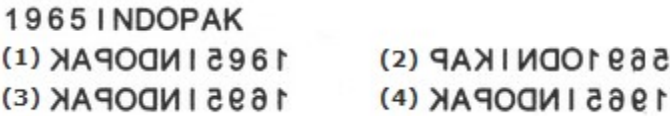
- (A.) 1 (B.) 2 (C.) 3 (D.) 4

(94.) Identify the figure that completes the pattern?



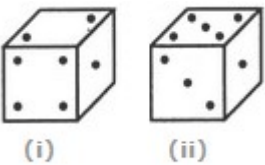
- (A.) 4 (B.) 3 (C.) 2 (D.) 1

(95.) Choose the alternative which closely resembles the mirror image.



- (A.) 2 (B.) 3 (C.) 4 (D.) 1

(96.) Two positions of a cube are shown below. When the number 4 will be at the bottom, then which number will be at the top?



- (A.) 3 (B.) 5 (C.) 6 (D.) 8

(97.) Four positions of a dice are given below Identify the number at the bottom when the top is 3?



- (A.) 5 (B.) 1 (C.) 2 (D.) 6

(98.) Choose the figure which is different from the rest



- (A.) A (B.) B (C.) D (D.) C

(99.) Choose the alternative which is closely resembles the water-image of the given combination



A Vision of Victory

VV ACADEMY

➤ RPF ➤ RRB GROUP - D ➤ POSTAL ➤ SI/CONSTABLE

www.vvacademy.com



Address : Near Chuttugunta Signals, Eluru Road, VJA 2. Cell : 9985525552, 8977525552

A1M3b

- (1) √1M3P (2) √1M3P
 (3) √1M3P (4) √1M3P

- (A.) 4 (B.) 3 (C.) 1 (D.) 2

(100.) Find out the alternative figure which contains figure (X) as its part.



- (X) (1) (2) (3) (4)
 (A.) 1 (B.) 2 (C.) 4 (D.) 3

ODISHA CIRCLE- PA/SA EXAM -2021

ANSWER

(1.)	A	(2.)	D	(3.)	C	(4.)	A	(5.)	A
(6.)	D	(7.)	A	(8.)	B	(9.)	B	(10.)	D
(11.)	C	(12.)	A	(13.)	D	(14.)	B	(15.)	C
(16.)	C	(17.)	B	(18.)	D	(19.)	C	(20.)	A
(21.)	B	(22.)	C	(23.)	A	(24.)	B	(25.)	B
(26.)	A	(27.)	A	(28.)	B	(29.)	D	(30.)	B
(31.)	C	(32.)	B	(33.)	A	(34.)	C	(35.)	A
(36.)	B	(37.)	D	(38.)	D	(39.)	B	(40.)	C
(41.)	A	(42.)	C	(43.)	B	(44.)	B	(45.)	C
(46.)	A	(47.)	B	(48.)	A	(49.)	D	(50.)	C
(51.)	C	(52.)	B	(53.)	B	(54.)	C	(55.)	D
(56.)	A	(57.)	B	(58.)	A	(59.)	D	(60.)	C
(61.)	C	(62.)	B	(63.)	C	(64.)	C	(65.)	A
(66.)	D	(67.)	C	(68.)	B	(69.)	A	(70.)	C
(71.)	A	(72.)	B	(73.)	A	(74.)	C	(75.)	B
(76.)	C	(77.)	C	(78.)	A	(79.)	D	(80.)	B
(81.)	B	(82.)	C	(83.)	C	(84.)	A	(85.)	D
(86.)	C	(87.)	A	(88.)	D	(89.)	B	(90.)	B
(91.)	B	(92.)	A	(93.)	C	(94.)	A	(95.)	C
(96.)	A	(97.)	A	(98.)	D	(99.)	B	(100.)	C