



MAHARASHTRA CIRCLE- PA/SA EXAM -2021

- (1.) What is the fee for Inland Registered parcel weighing 2300gms?
(A.) Rs.88 (B.) Rs.83 (C.) Rs.100 (D.) Rs.85
- (2.) What is recall fee of Postal article?
(A.) Rs 8. (B.) Rs 7. (C.) Rs 6. (D.) Rs 9.
- (3.) What is Home Delivery fee for each parcel weighing more than 5kg?
(A.) Rs 5. (B.) Rs 7. (C.) Rs 6. (D.) Rs 9.
- (4.) What are charges for e-MO for value of Rs 3945/-
(A.) Rs 4143/- (B.) Rs 4142/- (C.) Rs 1987/- (D.) Rs 1977/-
- (5.) What is the maximum weight limit for an Unregistered parcel (URP)?
(A.) 5 Kg (B.) 10 Kg (C.) 6 Kg (D.) 4 Kg
- (6.) What is rate of Post bag for a Single Quarter?
(A.) Rs 150/- (B.) Rs 50/- (C.) Rs 100/- (D.) Rs 200/-
- (7.) Persons changing their address should furnish written instructions regarding the disposal of postal articles received to their address
(A.) To the post office at the place which they are leaving
(B.) To the post office the place to which they are going
(C.) To the post offices both at the place which they are leaving and at the place to which they are going
(D.) To the post man at the place which they are leaving
- (8.) The highest denomination of IPO is
(A.) Rs.50 (B.) Rs.200 (C.) Rs.500 (D.) Rs.100
- (9.) A postal article can be redirected only by
(A.) Any RMS office through which it passes (B.) Any PO through which it passes
(C.) The office to which it is addressed (D.) All of the above
- (10.) If an unpaid or under paid registered article under foreign post is tendered at the counter
(A.) It cannot be registered.
(B.) It can be registered with an note that the deficiency would be collected from addressee
(C.) It has to be handed over to the PM for his disposal
(D.) None of the above
- (11.) What is the maximum weight of Outward Foreign letter?
(A.) 1 Kg (B.) 2 Kg
(C.) 5 Kg (D.) None of these.
- (12.) What is the maximum weight of printed paper containing only books and pamphlet of outward foreign post?
(A.) 1 Kg (B.) 2 Kg (C.) 5 Kg (D.) 35 Kg
- (13.) What is the dimension of Privately Manufactured Foreign Postcard to be sent from India?
(A.) Maximum: 100 mm x 148 mm and Minimum 90 x 140 mm.
(B.) Maximum: 105 mm x 148 mm and Minimum 90 x 140 mm.
(C.) Maximum: 105 mm x 148 mm and Minimum 90 x 148 mm.
(D.) Maximum: 100 mm x 148 mm and Minimum 90 x 148 mm.
- (14.) What is the minimum and maximum weight of "Bulk Bag" as for as foreign post is concerned?
(A.) Each bag shall weigh not less than 5 kg and not more than 25 Kg
(B.) Each bag shall weigh not less than 4 kg and not more than 30 Kg.
(C.) Each bag shall weigh not less than 4 kg and not more than 25 Kg.
(D.) Each bag shall weigh not less than 5 kg and not more than 30 Kg
- (15.) Insufficiently paid outward foreign article can be taxed only by



- (A.) Office of Posting
 - (B.) RMS Office
 - (C.) Office of Foreign Exchange
 - (D.) Country of Destination
- (16.) SAL Mail means
- (A.) Sorted Air Lift Mail
 - (B.) Surface Air Lift Mail
 - (C.) Service Air Lift Mail
 - (D.) None of Above
- (17.) If the addressee of an inward foreign parcel wants to take delivery of his parcel at the office of exchange
- (A.) It will be refused as there is no provision in the rule
 - (B.) It has to be approved by the D section of the directorate
 - (C.) The addressee has to call on the office of exchange with all the documents related including proof of his identity
 - (D.) None of the above
- (18.) Articles liable to export duty are detained at the outward office of exchange and the sender is informed regarding the payment of duty
- (A.) By the office of exchange
 - (B.) By the custom authorities directly
 - (C.) By the head office of the circle concerned
 - (D.) All of the above
- (19.) When an insured foreign parcel is redirected from one country to another
- (A.) No additional insurance fee is to be levied
 - (B.) Half of the original insurance fee is to levied for such transmissions
 - (C.) A fresh insurance fee become payable for each such transmission
 - (D.) None of the Above.
- (20.) Asian - Oceanic Postal Union was established in with headquarter in
- (A.) 1962, Manila.
 - (B.) 1987, Singapore
 - (C.) 1966, Sydney
 - (D.) 1962, New Delhi.
- (21.) The Primary Data Centre of India Post is working at
- (A.) Navi Mumbai.
 - (B.) New Delhi.
 - (C.) Chennai.
 - (D.) Mysore.
- (22.) DARPAN Stands for:
- (A.) Digital Advantage in Rural Post offices for New India.
 - (B.) Digital Administration of Rural Post Offices for National Development.
 - (C.) Digital Administration of Rural Post Office for Network in New India.
 - (D.) Digital Advancement of Rural Pos Office forA New India.
- (23.) Each Post office is called as SOL (service outlet) in
- (A.) Finacle
 - (B.) CSI
 - (C.) Finacle and CSI
 - (D.) None of these
- (24.) DPMS and F&A are module of
- (A.) CIS
 - (B.) CSI.
 - (C.) NI.
 - (D.) None of these
- (25.) The Concept of Cost Centre and Profit is in:
- (A.) McCamish
 - (B.) NI
 - (C.) CSI
 - (D.) None of these
- (26.) In which division CSI got rolled out first in Maharashtra?
- (A.) Mysore
 - (B.) Mumbai East
 - (C.) Pune East
 - (D.) Bangalore city
- (27.) What is KPI with reference to Mail Network optimization project?
- (A.) Key Performance Indicator.
 - (B.) Key Post Indicator.



- (C.) Key Project Service (D.) Key Project Indicator.
- (28.) Which e-book was published on subject of History of Mumbai GPO?
 (A.) Hall of big Dome. (B.) Dawn under the Dome.
 (C.) Hall under the Dome. (D.) None of these.
- (29.) CIS is related to
 (A.) Finacle (B.) McCamish
 (C.) SAP (D.) None of above
- (30.) Type of Printer used in Darpan Device are:
 (A.) Laserjet (B.) Dotmatrix (C.) Thermal (D.) Inkjet.
- (31.) In Which format Nominal Roll is maintained in Post office?
 (A.) Ms-11 (B.) Ms-12 (C.) Ms-13 (D.) Ms-10
- (32.) A S.O. may dispose of its surplus funds in one or other of the following ways:
 (i) by remittances to the treasury or bank in the case of sub-offices situated at treasury or bank stations;
 (ii) by remittances to another sub-office
 (iii) by remittances to the H.O
 (A.) Only (i) & (iii) are correct. (B.) Only (iii) is correct.
 (C.) (i), (ii) & (iii) are correct. (D.) Only (ii) & (iii) are correct.
- (33.) When a remittance is made to a SO through a special carrier, in which document a remark should be written for the information of SPM as to how the Money was sent?
 (A.) In SO daily Account (B.) In SO slip
 (C.) In HO summary (D.) In Treasury's cash book.
- (34.) The following records may not be destroyed without the special permission of the Head of the Circle
 (A.) Order book of a Record Office.
 (B.) Nominal roll of token-holders.
 (C.) Work papers, correspondence, or documents regarding which enquiry is in progress, or these connected with cases which have not been fully decided or closed.
 (D.) All of above.
- (35.) The Head Sorting Assistant prepares a Daily report in format of
 (A.) M.S.84. (B.) M.S.81
 (C.) M.S.83 (D.) None of above.
- (36.) The mail bags addressed to the office should be opened by
 (A.) Sorting Assistant. (B.) Head Sorting Assistant
 (C.) Record officer. (D.) Any of above.
- (37.) Nominal roll of Metal token are kept by
 (A.) Sorting Assistant. (B.) Head Sorting Assistant
 (C.) Record officer. (D.) Any of above.
- (38.) What is Full form of PMJJBY?
 (A.) Pradhan Mantri Jeevan Jyoti Bima Yojna (B.) Pradhan Mantri Jan Jagruti Bima Yojna
 (C.) Pradhan Mantri Jeevan Jagruti Bima Yojna (D.) Pradhan Mantri Jan Jeevan Bima Yojna
- (39.) Who can subscribe to APY?
 (A.) The age of the subscriber should be between 21 - 50 years.
 (B.) The age of the subscriber should be between 18 - 40 years.
 (C.) The age of the subscriber should be between 18 - 50 years.
 (D.) The age of the subscriber should be between 21 - 40 years.
- (40.) My Stamp' was first introduced in India during the World Philatelic Exhibition, of
 (A.) INDIPEX-2010 (B.) INDIPEX-2009



- (C.) INDIPEX-2011 (D.) INDIPEX-2012
- (41.) World Post World Postcard Day celebrated on
 (A.) 1st September (B.) 5th September
 (C.) 5th October (D.) 1st October
- (42.) The general maximum weight for International Speed Post (EMS) is
 (A.) 35kg (B.) 40 kg (C.) 20 Kg (D.) 15 Kg
- (43.) What is the Full form of PBE is
 (A.) Postal bill of Exchange (B.) Postal bill of Export
 (C.) Postal bill of Examination (D.) Postal bill of exhibition
- (44.) Weight restriction for M Bag is up to
 (A.) 7 KG (B.) 10 KG (C.) 20 Kg (D.) 30 KG
- (45.) Weight restriction for blind literature is up to
 (A.) 7 KG (B.) 10 KG (C.) 2 Kg (D.) 5 KG
- (46.) This provides complete mailing solutions right from mail preparation to mail delivery, ideal for small businesses as well as large companies.
 (A.) Logistic Post (B.) Business Post
 (C.) Direct Post (D.) Bill Mail
- (47.) India Post offers a unique advertisement concept to help the Indian corporate and the Government organizations reach potential customers through
 (A.) Business Post (B.) Media Post
 (C.) e-post (D.) Logistic Post
- (48.) The Sukanya Samriddhi Account rules were first notified on and then superseded from through a subsequent Notification.
 (A.) 01.12.2014 & 18.03.2016. (B.) 20.11.2014 & 18.03.2016.
 (C.) 08.12.2014 & 18.03.2016. (D.) 02.12.2014 & 18.03.2016.
- (49.) What is the age criteria for joint holder (Spouse) in case of joint SCSS account?
 (A.) Joint holder also to attain 60 years (B.) No age criteria for joint holder
 (C.) Should attain 50 years (D.) All of these
- (50.) EMS means
 (A.) Electronic mail service (B.) Express mail service
 (C.) Enabled mail service (D.) None of these
- (51.) Amravathi Reservoir is located in which national park in India?
 (A.) Indira Gandhi Wildlife Sanctuary and National Park (B.) Mudumalai National Park
 (C.) Pampadum Shola National Park (D.) None of them
- (52.) Port Pipavav, which is the first private le sector port in India, is located in which of the following states?
 (A.) West Bengal (B.) Maharashtra
 (C.) Gujarat (D.) Andhra Pradesh
- (53.) How many tiers are in the Panchayati Raj system of India?
 (A.) One-tier (B.) Two-tier (C.) Three-tier (D.) Four-tier
- (54.) Goods and Services Tax (GST) was introduced through which amendment?
 (A.) 100th (B.) 101st (C.) 102nd (D.) 103rd
- (55.) Pranati Nayak is an Indian sports person qualified for Tokyo Olympics in which sports?
 (A.) Weight Lifting (B.) Gymnastics
 (C.) Race Walking (D.) Fencing
- (56.) Umayun Nama was written by which of the following authors?



- (A.) Umayun (B.) Khwand Amir
(C.) Gulbadan Beghum (D.) AbuFaza
- (57.) Curzon Wylie who was murdered by Madan Lal Dhillon in London was ___?
(A.) Secretary of State for India (B.) Adviser to the Secretary of State of India
(C.) Law Member (D.) Governor of Bengal
- (58.) Who of the following was the leader of the Bardoli Satyagraha?
(A.) Indulal Yagnik (B.) M.K Gandhi
(C.) Sardar Patel (D.) None of the above
- (59.) Muga silk is associated to which states of India?
(A.) Assam (B.) Bihar (C.) Mizoram (D.) Tamilnadu
- (60.) Kalaripayattu, which was seen in the news recently, is a famous game originating from which state?
(A.) Kerala (B.) Tamil Nadu
(C.) Andhra Pradesh (D.) Karnataka
- (61.) In 40 years an amount becomes 6 times the original amount. What is the rate of interest?
(A.) 12.5% (B.) 24% (C.) 6.67% (D.) 34%
- (62.) If a person sells a sari for Rs. 5200, and purchases it for 4000 then what is Profit
(A.) 25% (B.) 30% (C.) 35% (D.) 22%
- (63.) The average of three numbers is 77. The first number is twice the second number and second number is twice the third. Find the first number.
(A.) 33 (B.) 66 (C.) 77 (D.) 132
- (64.) A train 120 m long passes a telegraph post in 6 seconds. Find the speed of the train.
(A.) 20m/s (B.) 180 m/s (C.) 72 m/s (D.) 18 m/s
- (65.) If 45 students can consume a stock of food in 60 days, then for how many days the same stock of food will last for 27 students?
(A.) 100 days (B.) 144 days (C.) 160 days (D.) 180 days
- (66.) There are total 1400 employees in a company. The ratio of Ladies to Gents is 3:7. Then how many ladies are working in the company?
(A.) 450 (B.) 480 (C.) 420 (D.) 440
- (67.) There are 270 girls studying out of 450 students. Rest of all are boys. What is percentage of Boys in the school?
(A.) 45 (B.) 40 (C.) 48 (D.) 44
- (68.) Average age of Daughter and mother age is 45 yrs. At present age of mother is twice the age of daughter. What is present age of mother?
(A.) 65 yrs (B.) 60 yrs (C.) 55 yrs (D.) 58 yrs
- (69.) Find the average of following numbers 2,8,15,30,45?
(A.) 21 (B.) 15 (C.) 25 (D.) 20
- (70.) Cost of 24 Pens is Rs 96. What will be cost of 16 pens?
(A.) Rs 66 (B.) Rs 64 (C.) Rs 62 (D.) Rs 68
- (71.) Ravi bought a guitar costing Rs. 1404 including sales tax at 8%. He asked the shopkeeper to reduce the price of the guitar so that he can save the amount equal to the tax. The reduction of the price of the Guitar is?
(A.) Rs.108 (B.) Rs.104 (C.) Rs.112 (D.) Rs.120
- (72.) Sharad buys two pens for Rs. 1500. He sells first Pen at a profit of 22% and the second Pen at a loss of 8%. What is the SP of Second pen if in the whole transaction there is no profit no loss?



A Vision of Victory

www.vvacademy.com

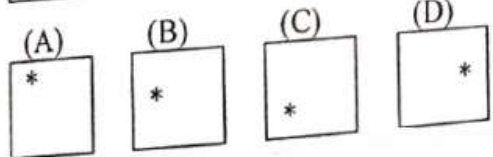
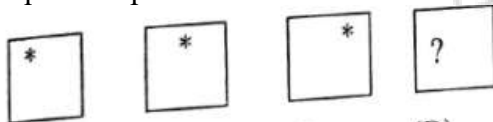
VV ACADEMY

➤ RPF ➤ RRB GROUP - D ➤ POSTAL ➤ SI/CONSTABLE



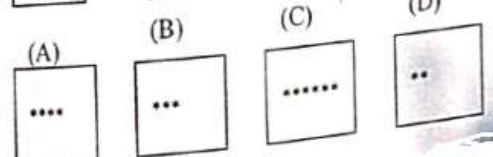
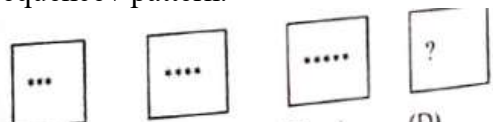
Address : Near Chuttugunta Signals, Eluru Road, VJA 2. Cell : 9985525552, 8977525552

- (73.) (A.) Rs 488 (B.) Rs 1012 (C.) Rs 322 (D.) Rs 1130
 (12/3 + 16/4) of 20
 (A.) 12 (B.) 24 (C.) 80 (D.) 160
- (74.) Find the value of x in
 20% of 250 + x% of 600 = 12.5% of 1000
 (A.) 10% (B.) 12.5% (C.) 20% (D.) 15%
- (75.) (17171.171 - 19199.99) + 18181.1 = ?
 (A.) 15151.51 (B.) 16152.28 (C.) 16172.19 (D.) 18181.11
- (76.) The average age of a family of 9 members is 22 years. Surya is the youngest and his age is 6 years, then what was the average age of the family just before Surya was born?
 (A.) 15 (B.) 16 (C.) 18 (D.) 20
- (77.) A can do a piece of work in 24 days. When he had worked for 4 days. B joined him. If complete work was finished in 16 days, B can alone finish that work in.
 (A.) 36 Days (B.) 30 Days (C.) 45 Days (D.) 48 days
- (78.) A and B together finish a work in 30 days. They worked at it for 20 days and then B left. The remaining work was done by A alone in 20 more days. A alone finish the work in.
 (A.) 35 Days (B.) 60 Days (C.) 55 Days (D.) 95 Days
- (79.) Kabir paid Rs. 9600 as interest on a loan he took 5 years ago at 16% rate of simple interest. What was the amount he took as loan?
 (A.) Rs. 16400 (B.) Rs. 12000 (C.) Rs. 12500 (D.) Rs. 18000
- (80.) Guddi invested some money in a bank at rate of 6% per annum. At simple interest, after 9 years, she got Rs. 8470. How much did she invest?
 (A.) Rs. 5250 (B.) Rs. 6550 (C.) Rs. 6400 (D.) Rs. 5500
- (81.) Find out the correct answer from the four given choices, if the figure in question continue in the same sequence / pattern.



- (A.) A (B.) B (C.) C (D.) D

- (82.) Find out the correct answer from the four given choices, if the figure in question continue in the same sequence / pattern.



- (A.) A (B.) B (C.) C (D.) D

- (83.) Find out the correct answer from the four given choices, if the figure in question continue in the same sequence / pattern.



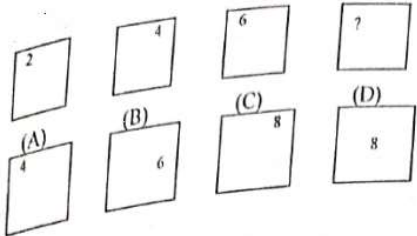
A Vision of Victory

V V ACADEMY

➤ RPF ➤ RRB GROUP - D ➤ POSTAL ➤ SI/CONSTABLE

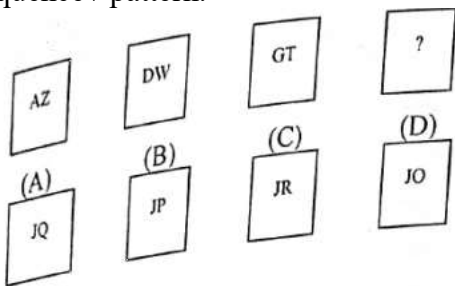
www.vvacademy.com

Address : Near Chuttugunta Signals, Eluru Road, VJA 2. Cell : 9985525552, 8977525552

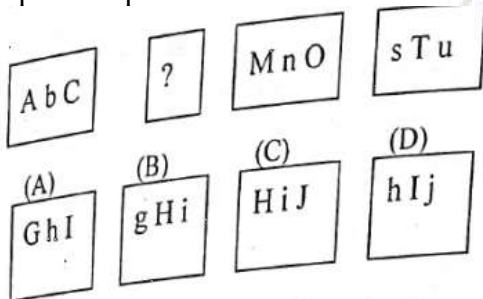
(A.) A (B.) B (C.) C (D.) D

(84.) Find out the correct answer from the four given choices, if the figure in question continue in the same sequence / pattern.



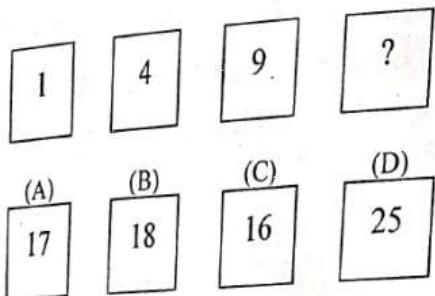
(A.) A (B.) B (C.) C (D.) D

(85.) Find out the correct answer from the four given choices, if the figure in question continue in the same sequence / pattern.



(A.) A (B.) B (C.) C (D.) D

(86.) Find out the correct answer from the four given choices, if the figure in question continue in the same sequence / pattern.



(A.) A (B.) B (C.) C (D.) D

(87.) Find out the correct answer from the four given choices, if the figure in question continue in the same sequence / pattern.



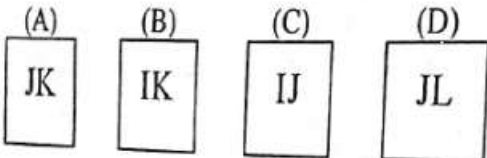
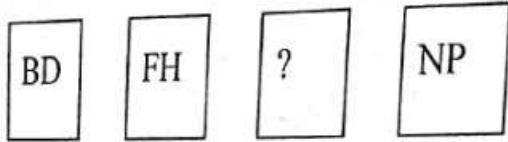
A Vision of Victory

www.vvacademy.com

V V ACADEMY

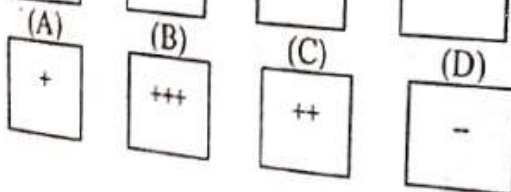
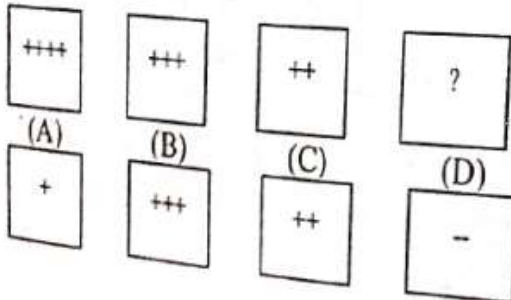
➤ RPF ➤ RRB GROUP - D ➤ POSTAL ➤ SI/CONSTABLE

Address : Near Chuttugunta Signals, Eluru Road, VJA 2. Cell : 9985525552, 8977525552

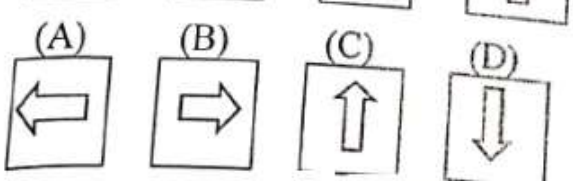
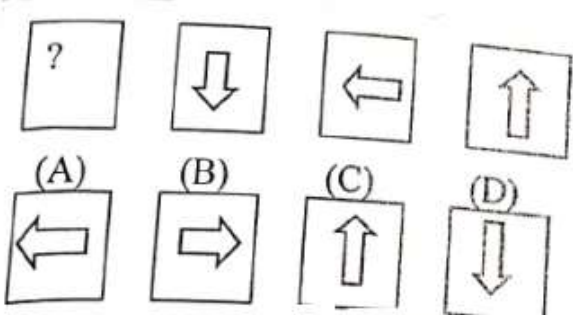
(A.) A (B.) B (C.) C (D.) D

(88.) Find out the correct answer from the four given choices, if the figure in question continue in the same sequence / pattern.



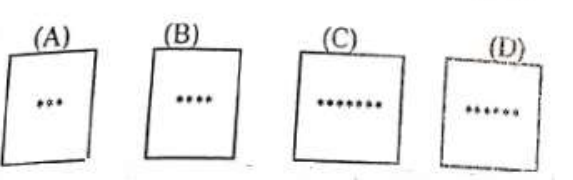
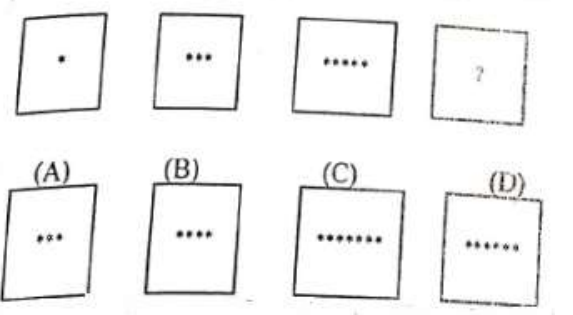
(A.) A (B.) B (C.) C (D.) D

(89.) Find out the correct answer from the four given choices, if the figure in question continue in the same sequence / pattern.



(A.) A (B.) B (C.) C (D.) D

(90.) Find out the correct answer from the four given choices, if the figure in question continue in the same sequence / pattern.





A Vision of Victory

V V ACADEMY

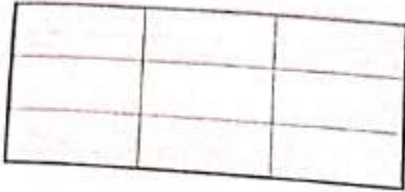
➤ RPF ➤ RRB GROUP - D ➤ POSTAL ➤ SI/CONSTABLE

www.vvacademy.com

Address : Near Chuttugunta Signals, Eluru Road, VJA 2. Cell : 9985525552, 8977525552



- (A.) A (B.) B (C.) C (D.) D
- (91.) Find the number of rectangles?



- (A.) 19 (B.) 28 (C.) 27 (D.) 36
- (92.) Complete the series
8, 10, 12, 14, ?
- (A.) 18 (B.) 15 (C.) 26 (D.) 16
- (93.) Complete the series
19, 25, 32, 40, ?, 59
- (A.) 46 (B.) 49 (C.) 55 (D.) 51
- (94.) Complete the series
8, 27, 64, 125, ?, 343
- (A.) 312 (B.) 216 (C.) 189 (D.) 225
- (95.) Complete the series 2, 5, 10, 17, 28, ?
- (A.) 37 (B.) 35 (C.) 41 (D.) 40
- (96.) Pick the odd one out
- (A.) Tiger (B.) Cow (C.) Lion (D.) Wolf
- (97.) Pick the odd one out
- (A.) 4 (B.) 16 (C.) 36 (D.) 8
- (98.) Pick the odd one out
- (A.) 3 (B.) 7 (C.) 9 (D.) 11
- (99.) Pick the odd one out
- (A.) Peacock (B.) Tiger (C.) Lotus (D.) Palm tree
- (100.) Look at this series: 12,11,13,12,14,13, what number should come next ?
- (A.) 10 (B.) 16 (C.) 13 (D.) 15



MAHARASHTRA CIRCLE- PA/SA EXAM -2021
ANSWER

(1.)	C	(2.)	C	(3.)	A	(4.)	C	(5.)	D
(6.)	B	(7.)	C	(8.)	D	(9.)	C	(10.)	A
(11.)	B	(12.)	C	(13.)	B	(14.)	D	(15.)	C
(16.)	B	(17.)	C	(18.)	B	(19.)	C	(20.)	A
(21.)	A	(22.)	D	(23.)	A	(24.)	B	(25.)	C
(26.)	C	(27.)	A	(28.)	B	(29.)	B	(30.)	C
(31.)	B	(32.)	C	(33.)	B	(34.)	D	(35.)	C
(36.)	B	(37.)	C	(38.)	A	(39.)	B	(40.)	C
(41.)	D	(42.)	A	(43.)	B	(44.)	D	(45.)	A
(46.)	B	(47.)	B	(48.)	D	(49.)	B	(50.)	B
(51.)	A	(52.)	C	(53.)	C	(54.)	B	(55.)	B
(56.)	C	(57.)	B	(58.)	C	(59.)	A	(60.)	A
(61.)	A	(62.)	B	(63.)	D	(64.)	C	(65.)	A
(66.)	C	(67.)	B	(68.)	B	(69.)	D	(70.)	B
(71.)	B	(72.)	B	(73.)	D	(74.)	B	(75.)	B
(76.)	C	(77.)	A	(78.)	B	(79.)	B	(80.)	D
(81.)	D	(82.)	C	(83.)	C	(84.)	A	(85.)	B
(86.)	C	(87.)	D	(88.)	A	(89.)	B	(90.)	C
(91.)	D	(92.)	D	(93.)	B	(94.)	B	(95.)	C
(96.)	B	(97.)	D	(98.)	C	(99.)	D	(100.)	D