



GUJARATH CIRCLE- PA/SA EXAM -2021

- (1.) Which among the following is incorrect with respect of domestic Philatelic Deposit Account?
- (A.) Domestic Philatelic Deposit Account System is available at all the Philatelic Bureaux in India
(B.) The account can be opened with a minimum deposit of Rs. 100/-
(C.) The items are dispatched free on 'Postal Service' by registered post
(D.) None of the Above
- (2.) The name of post town on Business Reply Cards is printed in
- (A.) English (B.) Hindi
(C.) Regional Language (D.) Not required to print
- (3.) All applications for enquiry in respect of miscarriage, loss or destruction of Indian Postal Orders should be made
- (A.) Within six months from the last day of the month of issue
(B.) Within twelve months from the last day of month of issue
(C.) Within eighteen months from the last day of the month of issue
(D.) None of the above the month of issue
- (4.) Prohibition on sale of stamps will apply to:
- (A.) Hospitals (B.) Sanitorium
(C.) Individual selling stamps outside PO (D.) Institute for recreation of Defence Services Personal
- (5.) The Post office will not be responsible for
- (A.) The wrong payment of a money order by incorrect or incomplete information given by the remitter as to the name and address of the payee
(B.) For the payment of a money order being refused or delayed by or on account of any accidental neglect, omission or mistake by or on the part of an officer of the Post Office
(C.) For any wrong payment of the date of issue of the order
(D.) All of the Above
- (6.) In any case in which a postmaster has good reason to suspect that the contents postal article are likely to injure the mails or harm the person of any one engaged in postal service he is directed to detain the suspected article and
- (A.) To refer the case at once for the orders of Director General Post
(B.) To refer the case at once for the orders of the Divisional Head
(C.) To refer the case at once for the orders of the Head of the Circle
(D.) None of the Above
- (7.) Any person who desires to avail the facility of a post box should submit an application in writing to the
- (A.) Chief Postmaster General (B.) Postmaster General
(C.) Superintendent of Post Offices (D.) Postmaster concerned
- (8.) Which among the following is correct for 'Camp bag'?
- (A.) The camp bag will be booked and delivered on all days including Sunday and P.O. Holiday
(B.) The camp bag should have two labels
(C.) A & B Above
(D.) None of the Above
- (9.) The sender of the insured article is entitled to obtain, an acknowledgement of its delivery signed by the addressee or his authorized agent by paying fee
- (A.) Free of charge (B.) Rs 1/- in shape of postage stamp
(C.) Rs.2/- in shape of Postage Stamp (D.) Rs3/- in shape of Postage Stamp



- (10.) A postcard of private manufacture of more than prescribed size and thickness was found in delivery office. The article will be
- (A.) Taxed with double the amount
 - (B.) Returned to office of posting
 - (C.) Taxed with single the amount
 - (D.) Treated as letter and difference between min postage payable on a letter and postage already paid was charged
- (11.) Which among the following country is subscribes to the parcel post agreement under UPU?
- (A.) Chile
 - (B.) Greece
 - (C.) Portugal
 - (D.) All of the Above
- (12.) Packets containing printed invitations for foreign countries for marriage etc will be
- (A.) Packets papers
 - (B.) Book Packets
 - (C.) Printed Papers
 - (D.) None of the Above
- (13.) The word "Postage Paid" and "Port Paye" should be enclosed by a thick border measuring at least
- (A.) 15 mm x 15 mm
 - (B.) 20 mm x 15 mm
 - (C.) 25 mm x 15 mm
 - (D.) 30 mm x 15 mm
- (14.) Which among the following silent features of Bulk Bag system is incorrect?
- (A.) Printed papers for the same addressee at the same address may be inserted in one or more special bag
 - (B.) Each bag shall not less than 5 kg and not more than 30 Kg
 - (C.) The bag shall be legibly addressed with rectangular labels not smaller than 100mm X 150mm
 - (D.) None of the above
- (15.) Export and import of gold, currency notes and coins are permitted only under the licence from
- (A.) Foreign Exchange Regulation
 - (B.) Custom and Central Excise
 - (C.) Reserve Bank of India
 - (D.) None of the Above
- (16.) The Insured value expressed in Indian Currency should be written on the parcel in ink in word in _____ lettering and figures in _____ numerals at the top of the address side.
- (A.) Hindi & Arabic
 - (B.) Roman & Arabic
 - (C.) Italic & Arabic
 - (D.) None of the Above
- (17.) Which among the following countries, compensation in respect of Inward un-insured parcels received is not paid by the postal administration even though the loss or damage has occurred within India?
- (A.) Lesotho
 - (B.) Nauru
 - (C.) Seychella
 - (D.) All of the Above
- (18.) What amount of second commission shall be charged for cancellation of a foreign money order or for altering the address of the payee?
- (A.) Half of the amount of first commission already charged
 - (B.) One third amount of the first commission already charged
 - (C.) No second commission shall be charged
 - (D.) None of the Above
- (19.) Claiming of draw Back duty is provided under
- (A.) Section 75 of the Custom Act 1962
 - (B.) Section 77 of the Custom Act 1962
 - (C.) Section 45 of the Custom Act 1962
 - (D.) None of the Above
- (20.) Which section of the Custom Act (1962) empowers the Government to prohibit import of certain goods?
- (A.) Section-10
 - (B.) Section-11
 - (C.) Section-12
 - (D.) Section-13
- (21.) In IT Modernization Project' IPVS' refer to
- (A.) India Post Visibility System
 - (B.) India Post Value System



- (C.) India Post version System (D.) India Post Voice System
- (22.) The NSP in (NI category) IT Modernization project the word "S" stands for
(A.) Settlement (B.) System (C.) Service (D.) Software
- (23.) In IT Modernization Project' KPI' refer to
(A.) Key Project Indicator (B.) Key Performance Indicator
(C.) Key Positioning Indicator (D.) Key Program Indicator
- (24.) The IPPB has launched the digital payment application 'Dak Pay' on
(A.) 15.10.2020 (B.) 15.11.2020
(C.) 15.12.2020 (D.) None of the above
- (25.) Which among the following is not the segments of implementation of the India Post IT Modernization Project started in the year 2012-13?
(A.) Network Integrator (B.) Financial Solution Integrator
(C.) Rural System Integrator (D.) Change Management
- (26.) The "RICT" has been renamed as
(A.) Digital Advance of Rural Post office for A New India
(B.) Data Advancement of Rural Post office for A New India
(C.) Digital Advancement of Rural post office for A New India
(D.) Digital Achievement of Rural post office for A New India
- (27.) Which among the following is the vision of the DARPAN project of India Posts?
(A.) Provide third party applications a platform for rural reach
(B.) Make disbursement for social security schemes such as MGNREGS etc
(C.) A & B Above
(D.) None of the Above
- (28.) Which among the following has features for digital payment application 'Dak Pay'?
(A.) Unified Payment interface (B.) Virtual Debit Card
(C.) Domestic Money Transfer (D.) All of the Above
- (29.) Which among the following is correct in context of 'Nanyatha MIS'?
(A.) Provides Number of letters cleared (B.) Provides Date and time of clearance
(C.) Provides Facility ID of the office (D.) All of the above
- (30.) In IT Modernization Project' CEPT" refer to
(A.) Centre for Excellent in Postal Technology (B.) Centre for Equipment in Postal Technology
(C.) Centre for Excellence in Postal Technology (D.) Centre for Electronic in Postal Technology
- (31.) Who can open Kisan Vikas Patra Account?
(i) a single adult
(ii) Joint Account (up to 3 adults)
(iii) a guardian on behalf of minor or on behalf of person of unsound mind
(iv) a minor above 10 years in his own name
(A.) i and iv only (B.) ii and iii only
(C.) iv and ii only (D.) All of the above
- (32.) Which among the following location RBI is managing ECS Facility?
(A.) Vadodara (Gujarat) (B.) Pune (Maharashtra)
(C.) Thiruvananthapuram (Kerala) (D.) Jodhpur (Rajasthan)
- (33.) 10 years RPLI policy also known as
(A.) GRAM PRIYA (B.) GRAM SUMANGAL
(C.) GRAM SANTHOSH (D.) GRAM SUVIDHA



- (34.) Which among the following is correct with respect to proposal for issue of commemorative postage stamp?
- (A.) Proposals for issue of Commemorative Postage Stamps may be sent by any non resident of India
(B.) Proposals should be sent at least three years in advance in the prescribed format
(C.) Not more than 50 issues (maximum 100 stamps) of Com, Postage stamps per annum issued.
(D.) Stamps on personalities shall not exceed 50% of the Annual Issue programme.
- (35.) If a walk-in customer presents speed post business of Rs.200000 having the same sender's address. How much discount he can avail?
- (A.) 5%. (B.) 10% (C.) 7.5% (D.) 15%
- (36.) Letter Postal Network services are available for _ destinations across the globe and cover all major destinations.
- (A.) 212 (B.) 213 (C.) 214 (D.) 215
- (37.) Which among the following is incorrect with respect to the benefits of NPS?
- (A.) NPS is considered to be the worlds lowest
(B.) Administrative charges and fund management fee are also lowest
(C.) Applicant get a permanent account cost pension scheme Number immediately.
(D.) The account can be shifted to any other sector like Government Sector, corporate
- (38.) Which among the following is correct with respect of minimum amount required for opening an account in different types of small savings accounts?
- i.) National Savings Recurring Deposit Account Rs.100/-
ii.) Kisan Vikas Patra Account Rs.1000/-
iii.) Senior Citizen Savings Scheme Account Rs.1000/-
iv.) Public Provident Fund Account Rs.1000/-
- (A.) i, ii & iv (B.) i, ii & iii
(C.) iii ,i & iv (D.) All of the Above
- (39.) Which among the following is incorrect with respect to incentive structure for per successful registration of PMJJBY?
- (A.) Counter PA (additional work in Finacle):- Rs.3.00
(B.) Directorate Monitoring Cell (PAF)- Rs.0.25
(C.) Sansad Marg HQ (Nodal Office):- Rs.2.00
(D.) RO/CO Monitoring Cell:- Rs.0.75
- (40.) What among the following is correct with respect to the linking of the POSA and IPPB accounts?
- i.) Automatic transfer of funds from IPPB to the POSA when it exceeds the limit of Rs. 1 lakh
ii.) If day end balance exceeds the limit, rather than than rejecting the transaction the system will transfer the excess funds to POSA
iii.) It is possible to transfer whole balance at a time from account as it does not have maximum balance limit
iv.) Account holder can withdraw / deposit cash via. IPPB savings account
- (A.) i & iii (B.) i, ii & iv (C.) i, ii & iii (D.) ii, iii & iv
- (41.) What amount to be collected from the depositor for providing service of pledging of account/certificate (per registration)?
- (A.) Rs. 50/- plus 18% GST (B.) Rs. 100/- plus 18% GST
(C.) Rs. 120/- Plus 18 % GST (D.) Rs. 150/- plus 18% GST
- (42.) Which form is being used for premature Closure of Account?
- (A.) SB-7 (B.) SB-7A (C.) SB-7B (D.) SB-7C



- (43.) The monthly list of money orders verified in Form (Genl. 6) accompanying the diaries of the last working day of the month showing the particulars of the money orders verified by the Public Relations Inspector or the Overseer Postmen should be submitted to the Superintendent of Post Offices concerned on?
- (A.) By the 1st of the following month (B.) By the 3rd of the following month
(C.) By the 10th of the following month (D.) None of the above
- (44.) Deposit Account of the postage due on all articles of the letter mail is maintained in form
- (A.) A.C.G 45 (B.) A.C.G.12
(C.) A.C.G.90 (D.) None of the Above
- (45.) Disposal of surplus funds at sub office may be disposed by among the following ways:
- (A.) by remittances to the treasury or bank in the case of sub-offices situated at treasury or bank stations
(B.) By remittance to another sub office
(C.) A & B Above
(D.) None of the noon
- (46.) Parcel relating to the postal service are exempted from the postal charges if exchanged between:
- i.) Postal Administration
ii.) Postal Administration and the International Bureau
iii.) Post offices of the member-countries
iv.) Post offices and Postal Administration
- (A.) i & ii (B.) ii & iii
(C.) iii & iv (D.) All of the above
- (47.) Unregistered correspondence in bundle or bag labelled "Envois non distributed" (undelivered items) received from abroad must be examined and those do not have the name and address of the sender should be sent to Calcutta RLO if received from
- (A.) Laos (B.) Timor (C.) Singapore (D.) Papua
- (48.) What are the documents to be forwarded to the Account officer (DAA), Postal Directorate for arranging reimbursement of the amount of compensation paid, from the TOTCIB" Administration Concerned?
- i.) A copy of letter from foreign Administration accepting liability for the loss o damage to the article in their service.
ii.) Or an extract of the endorsement made on the reclamation itself by on administration
iii.) A copy of sanction Memo issued by the Head of the Circle concerned.
iv.) Particulars of payment of the amount of compensation to addressee.
- (A.) i and iv (B.) ii and i
(C.) iii and ii (D.) All of the above
- (49.) Which amongst the following record may not be destroyed without the special permission of the Head of the Circle?
- (A.) Carbon copies, invoices of articles returned to the Stock Depot
(B.) Order book of Record office
(C.) Order Book of a mail office and section
(D.) Correspondence relating to the disposal of registered articles (both letters and parcels)
- (50.) The Insurance seal must always remain in the possession of
- (A.) Sorting Assistant (B.) IP/IRM
(C.) Head Sorting Assistant (D.) ASRM /ASP
- (51.) The forest in Sundarban is called
- (A.) Scrub Jungle (B.) Mangrove
(C.) Deciduous Forest (D.) Tundra



- (52.) Which hill station is called as the Queen of the Satpuras?
 (A.) Pachmarhi (B.) Mahendragiri
 (C.) Nilgiri (D.) Saputara
- (53.) Which one of the following is the guardian of Fundamental Rights?
 (A.) Legislature (B.) Political Parties
 (C.) Executive (D.) Judiciary
- (54.) Which has become a legal right under 44th Constitutional Amendment?
 (A.) Right to Education (B.) Right to Property
 (C.) Right to Judicial Remedies (D.) Right to work
- (55.) Who wrote the book "Why Socialism"?
 (A.) Acharya Narendra Dev (B.) Mahatma Gandhi
 (C.) Jayaprakash Narayan (D.) M.N. Roy
- (56.) The award given for outstanding performance in sports is
 (A.) Arjuna Award (B.) Dronacharya Award
 (C.) BharatRatna (D.) Padma Shri Award
- (57.) Kuka Movement is associated with which of the following states?
 (A.) Assam (B.) Bengal
 (C.) Punjab (D.) Maharashtra
- (58.) With reference to India's culture and tradition, what is "Yakshagana"?
 (A.) A folk theatre of Karnataka
 (B.) An ancient style bronze and brass work of Andhra Pradesh
 (C.) A martial art practiced in Manipur
 (D.) A music style of Tamil Nadu
- (59.) Which state of India is associated with the Folk Dance 'Teratali'?
 (A.) Haryana (B.) Punjab
 (C.) Madhya Pradesh (D.) Rajasthan
- (60.) Which of the following is an unethical business practice?
 (A.) Collusion (B.) False Communication
 (C.) Insider Trading (D.) All of the above
- (61.) The value of $16 - [5 - 2 \{14 \times 2 - (8/4 \times 2 - 1 + 3)\}]$ is :
 (A.) 35 (B.) 45 (C.) 55 (D.) 65
- (62.) What will come in place of question mark? $0.296 + 2.96 + 29.6 + 296 = ?$
 (A.) 327.856 (B.) 328.756 (C.) 327.756 (D.) 328.856
- (63.) The monthly income and monthly expenditure of a person were Rs.13500 and Rs.9000 respectively. In the next year his income is increased by 14% while his expenditure is increased by 7%. The percentage increase in his savings is:
 (A.) 7% (B.) 28% (C.) 14% (D.) 35%
- (64.) The ratio 5:4 expressed in percentage as:
 (A.) 125% (B.) 40% (C.) 20% (D.) 12.5%
- (65.) If the selling price of 50 books is equal to the cost prices of 40 books, then loss or gain per cent is:
 (A.) 20% loss (B.) 20% gain (C.) 25% loss (D.) 25% gain
- (66.) A man buys a cycle for Rs. 1400 and sells it at a loss of 15%. What is the selling price of the cycle?
 (A.) 1090 (B.) 1160 (C.) 1190 (D.) 1202
- (67.) On selling 17 balls at Rs.720, there is a loss equal to the cost prices of 5 balls. What is the cost price of a ball?
 (A.) Rs.45 (B.) Rs.50 (C.) Rs.55 (D.) Rs.60



- (68.) A sum invested at 5% simple interest per annum grows to Rs.504 in 4 years. The same amount at 10% simple interest per annum in 2 years and 6 months will grow to:
 (A.) Rs. 420 (B.) Rs. 525 (C.) Rs. 450 (D.) Rs. 550
- (69.) Abhishek lent Rs.5000 to Bipin for 2 years and Rs.3000 to Chetan for 4 years on simple interest at the same rate of interest and received Rs.2200 in all from both of them as interest. The rate of interest per annum is:
 (A.) 10% (B.) 11% (C.) 5% (D.) 7%
- (70.) If average marks of three batches of 55, 60 and 45 students respectively are 50, 55 and 60, then the average marks of all the students is:
 (A.) 43.33 (B.) 44.68 (C.) 54.68 (D.) 57.50
- (71.) The average of 7 consecutive numbers is 20. The largest of these numbers is:
 (A.) 22 (B.) 23 (C.) 24 (D.) 21
- (72.) The average of five numbers is 27. If one number is excluded, the average becomes 25. What is the excluded number?
 (A.) 25 (B.) 27 (C.) 30 (D.) 35
- (73.) Ram, Rajan and Rangan can do a certain work in 6, 12 and 24 days respectively. In what time will they altogether do it?
 (A.) 6/7 (B.) 12/7 (C.) 24/7 (D.) 48/7
- (74.) 10 women can complete a work in 7 days and 10 children take 14 days to complete the work. How many days will 5 women and 10 children take to complete the same work?
 (A.) 5 days (B.) 7 days (C.) 8 days (D.) 9 days
- (75.) A farmer travelled a distance of 61 km in 9 hours. He travelled partly on foot at 4 km/hr and partly on bicycle at 9 km/hr. The distance travelled on foot is:
 (A.) 16 km. (B.) 17 km (C.) 14 km (D.) 15 km
- (76.) A man on tour travels first 160 km at 64 km/hr and the next 160 km at 80 km/hr. The average speed for the first 320 km of the tour is:
 (A.) 65.55 km/hr (B.) 66 km/hr (C.) 71.11 km/hr (D.) 71 km/hr
- (77.) A car is running at a speed of 108 km/hr. What distance will it cover in 15 second?
 (A.) 45metres (B.) Cannot be determined
 (C.) 55metres (D.) 450metres
- (78.) If cost of 24 oranges is 72, then find out the cost of 120 oranges.
 (A.) Rs.180 (B.) Rs.360 (C.) Rs.172 (D.) Rs.500
- (79.) In a garrison, there was food for 1000 soldiers for one month. After 10 days 1000 more soldiers joined the garrison. How long would the soldiers be able to survive with the remaining food?
 (A.) 25 days (B.) 20 days (C.) 15 days (D.) 10 days
- (80.) The salary of a worker was first increased by 10% and thereafter, decreased by 5%. What was the change in his salary?
 (A.) 4.5% increase (B.) 4.5% decrease
 (C.) 5.5% increase (D.) 5.5% decrease
- (81.) News paper: Press:: Cloth : ?
 (A.) Tailor (B.) Mill (C.) Fibre (D.) Fashion
- (82.) Choose the odd one out from given words
 (A.) Arrow (B.) Missile (C.) Sword (D.) Bullet
- (83.) Choose the correct option that will continue the same pattern and fill in the blank space.
 212, 179, 146, 113, ()
 (A.) 91 (B.) 80 (C.) 112 (D.) 79



A Vision of Victory

www.vvacademy.com

VV ACADEMY

➤ RPF ➤ RRB GROUP - D ➤ POSTAL ➤ SI/CONSTABLE



Address : Near Chuttugunta Signals, Eluru Road, VJA 2. Cell : 9985525552, 8977525552

(84.) Find out the wrong number in given series.

56, 72, 90, 110, 132, 150

- (A.) 90 (B.) 110 (C.) 132 (D.) 150

(85.) Choose the correct alternative.

aab _ ab _ cabcca _ bcab

- (A.) Bbbc (B.) bbab (C.) cabc (D.) cbab


(86.) If in a certain language DISPEL is coded as IDPSLE, how is EFFECT coded in that language?

- (A.) FEEFTC (B.) CTFEEF (C.) EFFFTC (D.) ECTEFF

(87.) Abhishek ranks thirteen in a class of thirty-one. What is his rank from the last?

- (A.) 15th (B.) 15 h (C.) 19th (D.) 20th

(88.) Find the missing number in figure



- (A.) 19 (B.) 17 (C.) 15 (D.) 13

(89.) Arrange the given words in a meaningful sequence and then choose the most appropriate sequence from the alternatives provided below:


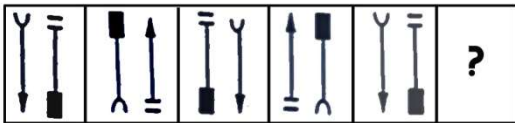
- i.) Police
- ii.) Punishment
- iii.) Crime
- iv.) Court
- v.) Judgment

- (A.) iii,i,ii,iv,v (B.) iii,i,iv,v,ii (C.) v,iv,iii,ii,i (D.) i,ii,iii,iv,v

(90.) A parking lot contains 160 vehicles. Each vehicle is either red or green. 70 vehicles are red, and 120 vehicles are cats. If there are 18 green trucks how many red cars are there?


- (A.) 54 red cars (B.) 50 red cars (C.) 48 red cars (D.) 45 red cars

(91.) Select a suitable figure from the Answer Figures that would replace the question mark



- (A.) a (B.) b (C.) c (D.) d

(92.) How many rectangles are there in the following figure?



- (A.) 6 (B.) 7 (C.) 8 (D.) 9

(93.) Choose the correct mirror image of the figure

A Vision of Victory

www.vvacademy.com

VV ACADEMY

➤ RPF ➤ RRB GROUP - D ➤ POSTAL ➤ SI/CONSTABLE

Address : Near Chuttugunta Signals, Eluru Road, VJA 2. Cell : 9985525552, 8977525552



(a)

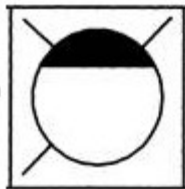
a)



b)



c)



d)



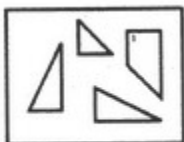
(A.) a

(B.) b

(C.) c

(D.) d

(94.) Find out which of the figures (1), (2), (3) and (4) can be formed from the pieces given in figure (X).



(X)



(1)

(2)

(3)

(4)

(A.) 1

(B.) 2

(C.) 3

(D.) 4

(95.) Identify the figure that completes the pattern.



A Vision of Victory

V V ACADEMY

➤ RPF ➤ RRB GROUP - D ➤ POSTAL ➤ SI/CONSTABLE

Address : Near Chuttugunta Signals, Eluru Road, VJA 2. Cell : 9985525552, 8977525552

www.vvacademy.com





(X)



(1)



(2)



(3)



(4)

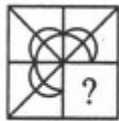
(A.) A

(B.) B

(C.) C

(D.) D

(96.) Identify the figure that completes the pattern.



(X)



(1)



(2)



(3)



(4)

(A.) A

(B.) B

(C.) C

(D.) D

(97.) Select a suitable figure from the Answer Figures that would replace the question mark

Problem Figures:



(A)

(B)

(C)

(D)

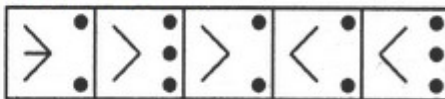
(A.) A

(B.) B

(C.) C

(D.) D

Answer Figures:



(1)

(2)

(3)

(4)

(5)

(98.) Select a suitable figure from the Answer Figures that would replace the question mark (?).

Problem Figures:



(A)

(B)

(C)

(D)

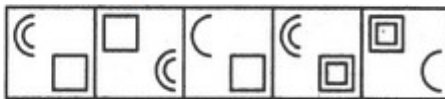
(A.) A

(B.) B

(C.) C

(D.) D

Answer Figures:



(1)

(2)

(3)

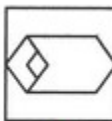
(4)

(5)

(99.) Find out the alternative figure which contains figure (X) as its part



(X)



(1)



(2)



(3)



(4)

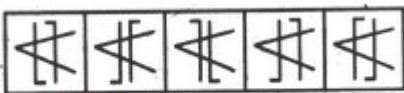
(A.) A

(B.) B

(C.) C

(D.) D

(100.) Choose the figure which is different from the rest



(1)

(2)

(3)

(4)

(5)

(A.) A

(B.) B

(C.) C

(D.) D

**GUJARATH CIRCLE- PA/SA EXAM -2021****ANSWER**

(1.)	B	(2.)	A	(3.)	B	(4.)	C	(5.)	D
(6.)	C	(7.)	D	(8.)	C	(9.)	A	(10.)	D
(11.)	D	(12.)	C	(13.)	B	(14.)	C	(15.)	C
(16.)	B	(17.)	D	(18.)	C	(19.)	A	(20.)	B
(21.)	A	(22.)	C	(23.)	B	(24.)	C	(25.)	B
(26.)	C	(27.)	C	(28.)	D	(29.)	D	(30.)	C
(31.)	D	(32.)	C	(33.)	A	(34.)	C	(35.)	B
(36.)	B	(37.)	C	(38.)	B	(39.)	D	(40.)	D
(41.)	B	(42.)	C	(43.)	D	(44.)	A	(45.)	C
(46.)	D	(47.)	A	(48.)	D	(49.)	B	(50.)	C
(51.)	B	(52.)	A	(53.)	D	(54.)	B	(55.)	C
(56.)	A	(57.)	C	(58.)	A	(59.)	D	(60.)	D
(61.)	C	(62.)	D	(63.)	B	(64.)	A	(65.)	A
(66.)	C	(67.)	D	(68.)	B	(69.)	A	(70.)	C
(71.)	B	(72.)	D	(73.)	C	(74.)	B	(75.)	A
(76.)	C	(77.)	D	(78.)	B	(79.)	D	(80.)	A
(81.)	B	(82.)	C	(83.)	B	(84.)	D	(85.)	D
(86.)	A	(87.)	C	(88.)	C	(89.)	B	(90.)	C
(91.)	A	(92.)	D	(93.)	B	(94.)	B	(95.)	D
(96.)	C	(97.)	C	(98.)	B	(99.)	B	(100.)	D