



CHATTISGARH CIRCLE- PA/SA EXAM -2021

- (1.) If a franked article is found in letter box _____
- (A.) It should be returned to sender (B.) It should be treated as unpaid
(C.) Police case to be registered (D.) Franking Machine license to be cancelled
- (2.) How to deal with a customer appearing in post office for refund the value of unused items of postage stamps?
- (A.) Refund value of unused postage stamps (B.) Exchange with other valuable items
(C.) Normally refund not allowed (D.) Only postcard can be exchanged
- (3.) What is the maximum weight limit of a letter?
- (A.) 2 Kg (B.) 5 Kg (C.) 10 Kg (D.) 15 Kg
- (4.) Which of the following is not exempted in connection with Blind Literature Packets?
- (A.) Postage charge (B.) Registration fee
(C.) Fee for acknowledgement (D.) Airmail charges
- (5.) Which of the following articles can be transmitted by air without any additional charge?
- (A.) Parcel up to 4 kg (B.) First Class mails
(C.) Book packets containing periodicals (D.) Pattern and sample packets
- (6.) If a postal article has once been tendered to the addressee by the postoffice
- (A.) it will not be re-directed to his address elsewhere
(B.) it may be re-directed to his address elsewhere
(C.) it may be sent to Returned Letter office
(D.) it may be kept in Deposit
- (7.) Suggestion and complaints book available at
- (A.) Head Post Offices only (B.) Branch Post Offices only
(C.) All Post offices (D.) Sub Post Offices
- (8.) Instructions received from addressee authorizing the post office to deliver articles to persons other than themselves should be treated as lapsed after a time limit of _____
- (A.) 3 years (B.) 9 months (C.) 3 months (D.) 1 week
- (9.) What is the maximum weight limit of a book packet containing periodicals?
- (A.) Not more than 4 kg. (B.) Not more than 5 kg.
(C.) Not more than 7 kg. (D.) Not more than 10 kg.
- (10.) "Nothing may be attached to the post card". What is not an exception to this statement?
- (A.) Stamps in payment of postage
(B.) Gummed label (5 cm x 1.8 cm) bearing name and address of the sender
(C.) Another Inland Letter Card intended for reply
(D.) Photographs on very thin paper and completely adherent to the card
- (11.) When did India join in APPU (Asian Pacific Postal Union)?
- (A.) 1951 (B.) 1965 (C.) 1968 (D.) 1973
- (12.) Which of the following foreign article is not eligible for re-direction in India by air?
- (A.) Letters (B.) Small Packets
(C.) Aerogrammes (D.) Postcards
- (13.) In connection with foreign mails the indication "Paravion" denotes:
- (A.) By Airmail (B.) Advices of changes of address
(C.) Advice of Delivery (D.) None of the above
- (14.) A pack containing which of the following items should be labeled green?
- (A.) Fragile Objects (B.) Live Bees
(C.) Medicines (D.) Fatty substances that don't liquefy



- (15.) What are postage charges for aerogramme?
(A.) Rs. 6 (B.) Rs.12 (C.) Rs.10 (D.) Rs.15
- (16.) If a foreign article is addressed 'poste restante', from which day warehousing charges will be levied?
(A.) Thirty firstday (B.) Twenty firstday
(C.) Eighth day (D.) Fifteenth day
- (17.) Use of Inland Letter Cards for addressing communication to foreign countries (except Bhutan, Nepal & Bangladesh) is treated as:
(A.) Insufficiently paid (B.) Unpaid
(C.) Parcel (D.) Inland Letter Card
- (18.) Which of the following cannot be accepted at 'printed paper' rate in foreign post?
(A.) Photocopies
(B.) Impression obtained by utilizing computer printers
(C.) Manuscripts of works or for newspapers
(D.) Impression obtained by utilizing typewriter of any type
- (19.) Which of the following indication is permitted on contents of a small packet in foreign post?
(A.) Registration numbers of goods (B.) Trade marks
(C.) Address of sender (D.) All of the above
- (20.) The Post Offices is not liable for the loss of Registered Articles, if the sender has not made an enquiry within:
(A.) La period of 3 years (B.) a period of 1 years
(C.) a period of 18 months (D.) a period of 1 month
- (21.) What is full form of 'RICT'?
(A.) Rural Instant and Common Technology
(B.) Rural Indian Country Technology
(C.) Rural Information and Communication Technology
(D.) Rural Information and Community Terminal
- (22.) 'FSI' with reference to IT Modernization 2 Project of Department of Posts means:
(A.) Fast System Integrator (B.) Financial System Integrator
(C.) Finance Services of India Post (D.) Finance Sector Integrator
- (23.) Primary Data Center of Department of Posts is located at
(A.) New Delhi (B.) Mysuru
(C.) Bengaluru (D.) Navi Mumbai
- (24.) What is meaning of 'IPVS? (With reference to CSI)
(A.) India Post Visibility System (B.) IP Virtual Server
(C.) India Post Vertical Scheme (D.) India Post Vehicle System
- (25.) Which module is used to maintain accounting in CSI SAP application?
(A.) Back Office Module (B.) IPVS Module
(C.) DPMS Module (D.) F&A Module
- (26.) What is purpose of ECMS in Department of Posts?
(A.) For scanning of mails in Delivery Office (B.) For Account opening in Finacle
(C.) For uploading document in McCamish (D.) For e-Payment Module in POS
- (27.) DRC under IT Modernization Project refersto
(A.) Disaster Recovery Center (B.) Data Recovery Center
(C.) Data Recording Center (D.) Dynamic Recovery Center
- (28.) What is the aim of Change Management SILO of IT Modernization Project?
(A.) Changing the product and services (B.) Training to all employees of India Post



- (C.) Changing the all old hardware (D.) Changing accounting of India Post
- (29.) "SSO" in Core System Integrator under IT Modernization Project refers to:
 (A.) Single Sign off (B.) Single sign on
 (C.) Single Stop Solution (D.) Savings Scheme Operations
- (30.) What is toll free enquiry helpline number of India Post?
 (A.) 1800-260-8686 (B.) 1800-450-6868
 (C.) 1800-266-6868 (D.) 1800-250-7676
- (31.) Posting of Bill Mail Service may be posted by a service provider to customers at least once in _____ days under this service.
 (A.) 30 Days (B.) 45 Days (C.) 60 Days (D.) 90 Days
- (32.) The term for "Gram Priya" policy in RPLI is
 (A.) 5 Years (B.) 10 Years (C.) 15 Years (D.) 20 Years
- (33.) What is the fee for transfer of Monthly Income Scheme Account from one post office to another post office?
 (A.) Rs.50 + GST (B.) Rs.100 + GST
 (C.) Rs.200 + GST (D.) Rs.500 + GST
- (34.) What is the minimum amount prescribed for opening of new PPF account?
 (A.) Rs.500 (B.) Rs.100 (C.) Rs.50 (D.) Rs.1000
- (35.) What will be the rebate on advance deposit of 12 months in RD account for denomination of Rs.100?
 (A.) Rs.20 (B.) Rs.40 (C.) Rs.80 (D.) Rs.120
- (36.) How much fee will be charged for alteration in address or place of payment of Money Order on request of remitter?
 (A.) Double of Money Order commission (B.) Equal to the Money Order commission
 (C.) No additional fee will be charged (D.) Half of Money Order commission
- (37.) Commemorative stamps are not issued in whose memory?
 (A.) Important events (B.) Prominent personalities in various fields
 (C.) Aspects of nature (D.) Present Director Generals of Department of Posts
- (38.) What is the brand name for personalized sheets of Postage Stamps of India Post?
 (A.) Nanyatha (B.) My Stamp (C.) Sparsh (D.) Deendayal
- (39.) What is the minimum limit age at entry for the plans under AEA (Sumangal) on the next birthday?
 (A.) 18 years (B.) 19 years (C.) 21 years (D.) 35 years
- (40.) What will be the compensation Amount in case of delay in delivery of speed post articles?
 (A.) Rs.100 (B.) No compensation
 (C.) Rs.500 (D.) Postage charges
- (41.) If a value payable item has been refused / unclaimed by the recipient, what will be done to the money order form attached with it?
 (A.) Returned back to sender
 (B.) Whole MO form will be filed in the office
 (C.) Destroyed by fire
 (D.) Upper portion of money order form will be destroyed and lower portion will be filed
- (42.) What is preservation period of Nominal Roll?
 (A.) 1 year (B.) Permanent (C.) 3 Years (D.) 10 Years
- (43.) Whenever a voucher is wanting, a remark 4 should be written by the subaccount assistant on the daily account and a note of-the irregularity should also be made in
 (A.) Order Book (B.) Treasurer Cash Book
 (C.) Error Book (D.) HO Cash Book



- (44.) Subsequent deposit in Sukanya Samridhi Account (SSA) may be made till completion of__ from the date of opening of account only. (as per SB Order 9/2020)
- (A.) 14 years (B.) 15 years
(C.) 21 years (D.) Up to date of maturity
- (45.) What is rate of GST to be charged along with various fee/charges on transfer / pledging of account? (as per SB Order 3/2020)
- (A.) 6% (B.) 12% (C.) 18% (D.) 24%
- (46.) If the regular accommodation provided in a train is inadequate for the carriage of all mails that is authorized to apply to the Railway authorities for such extra accommodation?
- (A.) Superintendent of RMS (B.) Head Sorting Assistant
(C.) Head Record Office (D.) Mail Agent / Mail Guard in charge of a transit section
- (47.) If the holder loses his metal token, he must immediately report the fact to the
- (A.) Record Officer (B.) Head Sorting Assistant
(C.) Superintendent of RMS (D.) Inspector Posts
- (48.) The form M-42 for Transit Sections and M-43 for Mail Offices is used
- (A.) To prepare error report (B.) To prepare mail abstract
(C.) To prepare report of mis sent bags (D.) To prepare metal token stock
- (49.) How to treat articles addressed in Indian Language intended for despatch abroad?
- (A.) No action required (B.) Returned to sender for transcription
(C.) Transcription in French should be added (D.) Transcription in English should be added
- (50.) How much test checks of credits and debits in each bill shall be checked by another senior and experience official in the office of account? (Related with foreign mails)
- (A.) 5% (B.) 10% (C.) 20% (D.) 25%
- (51.) Zojila pass connects:
- (A.) Nepal and Tibet (B.) Leh and Kargil
(C.) Leh and Srinagar (D.) Kashmir and Tibet
- (52.) Delhi is located on the banks of which river?
- (A.) Yamuna (B.) Ganga (C.) Kosi (D.) Narmada
- (53.) Which of the given options is not included in the state's list?
- (A.) Law and Order (B.) Agriculture
(C.) Education (D.) National Defence
- (54.) Who is the chief executive head of the state?
- (A.) Chief Minister (B.) Governor
(C.) President (D.) Chief Secretary
- (55.) The Indian football team made its first appearance at Olympics in?
- (A.) 1936 (B.) 1948 (C.) 1952 (D.) 1956
- (56.) Who is the author of the book 'Freedom Behind Bars'?
- (A.) Kiran Bedi (B.) Jawaharlal Nehru
(C.) Sheikh Abdullah (D.) Nelson Mandela
- (57.) Who among the following is known as 'Mother of Indian Revolution'?
- (A.) Rani Laxmi Bai of Jhansi (B.) Annie Besant
(C.) Bhikaji Rustam Kama (D.) Sarojini Naidu
- (58.) The "Garba" folk dance is associated with which state?
- (A.) Odisha (B.) Madhya Pradesh
(C.) Punjab (D.) Gujarat
- (59.) Which of the following is the main language of Goa?



- (A.) Marathi (B.) Konkani (C.) Hindi (D.) Malayalam
- (60.) What are Organizational Values?
 (A.) Rules imposed by the Management Team
 (B.) Beliefs or guiding principles that are core to the organization and help steer the right actions
 (C.) The collective value of the organization's assets
 (D.) A statement setting out the organization's strategy
- (61.) Solve: $(12/3 + 16/4) \times 20$
 (A.) 160 (B.) 80 (C.) 36 (D.) 12
- (62.) Pick the odd one out of following
 (A.) $6 \times 4 + 2$ (B.) $3 \times 10 - 3$ (C.) $5 \times 5 + 2$ (D.) $9 \times 4 - 9$
- (63.) Mahesh's salary is increased from Rs.630 to Rs.700. Find the increase per cent?
 (A.) 9% (B.) 11% (C.) $11\frac{1}{9}\%$ (D.) 12%
- (64.) Find 16 percent of Rs.625.
 (A.) Rs.50/ (B.) Rs.100/ (C.) Rs.225/ (D.) Rs.250/
- (65.) Express 250 as a percentage of 50.
 (A.) 5% (B.) 10% (C.) 50% (D.) 500%
- (66.) A man wants to earn 20% profit on a table that cost Rs.1000, what he should charge customer?
 (A.) 200 (B.) 400 (C.) 800 (D.) 1200
- (67.) A grocer sells rice at a profit of 10% and uses a weight which is 20%. Find his total percentage gain?
 (A.) 12.5% (B.) 22.5% (C.) 37.5% (D.) 30%
- (68.) A chair is sold for Rs.5060 at a gain of 10%. What would have been the gain or loss percent if it had been sold for Rs.4370?
 (A.) 5% (B.) 10% (C.) 7.5% (D.) 12%
- (69.) A sum of money doubles itself in 10 years at simple interest. What is the rate of interest?
 (A.) 11% (B.) 10% (C.) 15% (D.) 7.5%
- (70.) A certain sum of money amount to Rs.2613 in 6 years at 5% per annum. In how many years it will amount to Rs.3015 at the same rate?
 (A.) 7 years (B.) 8 years (C.) 9 years (D.) 10 years
- (71.) Arun borrowed a sum of Rs.4000 at 5% per annum simple interest from Ramu. He returns the amount with interest after 2 years. Ramu returns to Arun 2% of the total amount returned. How much did Arun receive?
 (A.) Rs.68 (B.) Rs.880 (C.) Rs.88 (D.) Rs.440
- (72.) The average weight of 4 men is increased by 3 kg when one of them weighs 120 kg is replaced by another man. What is the weight of the new man?
 (A.) 132 kg (B.) 124 kg (C.) 123 kg (D.) 136 kg
- (73.) The average of 11 innings played by a player is 50. If the average of first 6 innings is 49 and that of last six is 52, find the sixth result?
 (A.) 51 (B.) 53 (C.) 54 (D.) 56
- (74.) In an examination, a batch of 60 students made an average score of 55 and another batch of 40 made it only 45. What is the overall average score?
 (A.) 50 (B.) 51 (C.) 49 (D.) 52
- (75.) Rajesh can repair a wall in 10 days and Rohit can do the same work in 15 days. How long will they take if both work together?
 (A.) 6 days (B.) 7 days (C.) 8 days (D.) 9 days



- (76.) Amit and Ahmed can do a work in 45 and 40 days respectively. They began the work together, but Amit left after some time and Ahmed finished the remaining work in 23 days. After how many days did Amit leave?
- (A.) 27 days (B.) 8 days (C.) 9 days (D.) 22 days
- (77.) A boy goes to school at a speed of 3 km/hr and returns to the village at a speed of 2 km/hr. If takes 5 hrs in all, what is the distance between the village and the school?
- (A.) 5 km (B.) 6 km (C.) 7 km (D.) 3 km
- (78.) A motor car takes 50 seconds to travel 500 meters. What is its speed in km per hour?
- (A.) 32 km/hour (B.) 34 km/hour (C.) 35 km/hour (D.) 36 km/hour
- (79.) Cost of 8 dozen bananas is Rs. 180. How many bananas can be purchased for Rs.30?
- (A.) 16 bananas (B.) 20 bananas (C.) 18 bananas (D.) 12 bananas
- (80.) A rope makes 125 rounds of a cylinder with base radius 15 cm. How many times can it go round a cylinder with base radius 25 cm?
- (A.) 100 times (B.) 75 times (C.) 80 times (D.) 65 times
- (81.) Choose the word which is different from the rest:
- (A.) Kiwi (B.) Eagle (C.) Emu (D.) Ostrich
- (82.) Moon: Satellite:: Earth: ?
- (A.) Sun (B.) Solar System
(C.) Planet (D.) Asteroid
- (83.) Choose which pair of numbers comes next?
10, 20, 25, 35, 40, 50, 55, _
- (A.) 65, 70 (B.) 60, 65 (C.) 60, 70 (D.) 65, 75
- (84.) Which number is wrong in the series?
2, 6, 15, 31, 56, 93?
- (A.) 6 (B.) 31 (C.) 56 (D.) 93
- (85.) Suppose a series is 1, 9, 25, 49, ?, 121, the number comes at the place of question mark in the given series is
- (A.) 21 (B.) 52 (C.) 81 (D.) 91
- (86.) Which one set of letters when sequential placed at the gaps in the given letter's series shall complete it?
_ab_b_aba_abab
- (A.) a b b a a (B.) b b a a b (C.) a b a a b (D.) a a a b a
- (87.) In a code language, NEEDLE is written a MFDEKF. How will HAMMER be written in the same language?
- (A.) IBLNDS (B.) GBLNDS (C.) GBLNFT (D.) GALNDS
- (88.) In a row of trees, a tree is 7th from left en and 14th from right end. How manytree are there in the row?
- (A.) 18 (B.) 19 (C.) 20 (D.) 21
- (89.) Which of the following words cannot be formed from the letters of the word "DEPRECIATE"?
- (A.) CREDIT (B.) PRIDE (C.) PEACE (D.) REPRIEVE
- (90.) B is twice as old as A, but twice younger than F.C is half the age ofA but is twice older than D. Who is the second oldest?
- (A.) B (B.) F (C.) C (D.) D
- (91.) Choose the figure which is different from rest.



A Vision of Victory

www.vvacademy.com

VV ACADEMY

➤ RPF ➤ RRB GROUP - D ➤ POSTAL ➤ SI/CONSTABLE



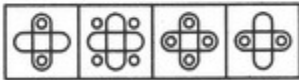

Address : Near Chuttugunta Signals, Eluru Road, VJA 2. Cell : 9985525552, 8977525552



(1) (2) (3) (4) (5)

(A.) A (B.) B (C.) C (D.) D

(92.) Select a suitable figure from the four alternatives that would complete the figure matrix.



(1) (2) (3) (4)

(A.) 1 (B.) 2 (C.) 3 (D.) 4

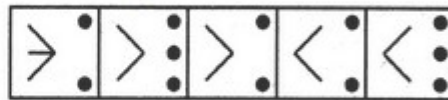
(93.) Select a suitable figure from Answer figures that would replace the question mark?

Problem Figures:

Answer Figures:



(A) (B) (C) (D)



(1) (2) (3) (4) (5)

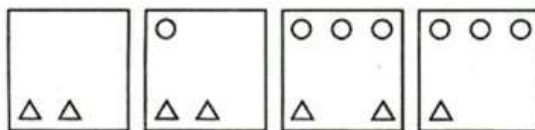

(A.) A (B.) B (C.) C (D.) D

(94.) Select a suitable figure from Answer figures that would replace the question mark?



(A.) a (B.) b (C.) c (D.) d

(95.) Select a suitable figure from Answer figures that would replace the question mark?



(a) (b) (c) (d)

(A.) a (B.) b (C.) c (D.) d

(96.) Find out the alternative which contains figure (X) as its part.



A Vision of Victory

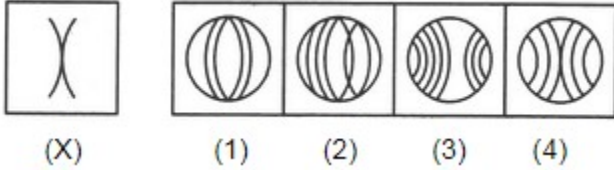
V V ACADEMY

➤ RPF ➤ RRB GROUP - D ➤ POSTAL ➤ SI/CONSTABLE

Address : Near Chuttugunta Signals, Eluru Road, VJA 2. Cell : 9985525552, 8977525552



www.vvacademy.com



- (X) (1) (2) (3) (4)
 (A.) A (B.) B (C.) C (D.) D

(97.) Select a suitable figure from Answer figures that would replace the question mark?

Problem Figures:



- (A) (B) (C) (D)

Answer Figures:



- (1) (2) (3) (4) (5)

- (A.) A (B.) B (C.) C (D.) D

(98.) Which letter will come in place of question mark?

A	D	G
D	I	N
I	P	?

- (A.) V (B.) X (C.) W (D.) Y

(99.) Find the number of triangles in the given figure?



- (A.) 24 (B.) 26 (C.) 28 (D.) 30

(100.) Select a suitable figure from Answer figures that would replace the question mark?

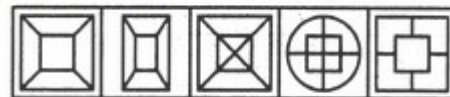
Problem Figures:



- (A) (B) (C) (D)

(A.) A

Answer Figures:



- (1) (2) (3) (4) (5)

- (B.) B (C.) C (D.) D

**CHATTISGARH CIRCLE- PA/SA EXAM -2021****ANSWER**

(1.)	B	(2.)	C	(3.)	A	(4.)	D	(5.)	B
(6.)	A	(7.)	C	(8.)	A	(9.)	B	(10.)	C
(11.)	D	(12.)	B	(13.)	A	(14.)	C	(15.)	D
(16.)	C	(17.)	A	(18.)	D	(19.)	D	(20.)	B
(21.)	C	(22.)	B	(23.)	D	(24.)	A	(25.)	D
(26.)	C	(27.)	A	(28.)	B	(29.)	B	(30.)	C
(31.)	D	(32.)	B	(33.)	B	(34.)	A	(35.)	B
(36.)	C	(37.)	D	(38.)	B	(39.)	B	(40.)	D
(41.)	D	(42.)	B	(43.)	C	(44.)	B	(45.)	C
(46.)	D	(47.)	A	(48.)	B	(49.)	D	(50.)	C
(51.)	C	(52.)	A	(53.)	D	(54.)	B	(55.)	B
(56.)	A	(57.)	C	(58.)	D	(59.)	B	(60.)	B
(61.)	A	(62.)	A	(63.)	C	(64.)	B	(65.)	D
(66.)	D	(67.)	C	(68.)	A	(69.)	B	(70.)	D
(71.)	C	(72.)	A	(73.)	D	(74.)	B	(75.)	A
(76.)	C	(77.)	B	(78.)	D	(79.)	A	(80.)	B
(81.)	B	(82.)	C	(83.)	A	(84.)	D	(85.)	C
(86.)	D	(87.)	B	(88.)	C	(89.)	D	(90.)	A
(91.)	C	(92.)	B	(93.)	C	(94.)	B	(95.)	A
(96.)	D	(97.)	A	(98.)	C	(99.)	C	(100.)	A