



RAJASTHAN CIRCLE- PA/SA EXAM -2020

- (1.) When Insurance is compulsory?(When letter / parcel contains)
 - (A.) Bullion
 - (B.) Platinum
 - (C.) Precious Stone
 - (D.) All the above
- (2.) Machine franked articles posted in letter boxes are treated as:
 - (A.) Unpaid
 - (B.) Insufficiently paid
 - (C.) Undated
 - (D.) None of the above
- (3.) System of delivery of Postal articles in a bag, which along with a lock and duplicate key is to be supplied by the rented, is available at:
 - (A.) Delivery post offices where post box system is available
 - (B.) Delivery post offices where post box system is not available
 - (C.) All delivery post offices, whether post box system is available there or not
 - (D.) None of the above
- (4.) Which of the following are treated as 'Post Restante'?
 - (A.) Article superscribed "To be kept till called for"
 - (B.) Article superscribed "To await arrival"
 - (C.) Articles addressed "Post Office"
 - (D.) All of the above
- (5.) The headquarters of Haryana Circle is located in which city?
 - (A.) Chandigarh
 - (B.) Ambala Cantt
 - (C.) Panchkula
 - (D.) Gurugram
- (6.) What is the maximum weight limit of a book packets?
 - (A.) 2 Kg.
 - (B.) 4 Kg.
 - (C.) 5 Kg.
 - (D.) 7 Kg.
- (7.) Suggestion and Complaints is available at:
 - (A.) All Post Offices
 - (B.) Head Post Office only
 - (C.) Branch Post Office only
 - (D.) Circle Office only
- (8.) Personal communication is not allowed in:
 - (A.) Letter
 - (B.) Inland Letter Card
 - (C.) Book packet containing periodicals
 - (D.) Parcel
- (9.) The prepayment of the postage and registration fee is compulsory in the case of all registered articles.
 - (A.) False
 - (B.) True
 - (C.) No such compulsion
 - (D.) None of the above
- (10.) A 'Blind Literature packet should not contain
 - (A.) Inscriptions
 - (B.) Documents
 - (C.) Both above (A) and (B) not allowed
 - (D.) Both above (A) and (B) allowed
- (11.) Which of the following deals with Foreign Articles?
 - (A.) Office of Exchange
 - (B.) Office of Exchange of Transit
 - (C.) Sub Foreign post Office
 - (D.) All of the above
- (12.) What is maximum weight limit of Printed Papers containing pamphlets for Foreign Countries?
 - (A.) 2 Kg.
 - (B.) 7 Kg.
 - (C.) 5 Kg.
 - (D.) 20 Kg.
- (13.) Categories of Foreign postal article are:
 - (A.) Registered Post and Insured Post
 - (B.) Airmail and Sea mail
 - (C.) Packet Post and Parcel Post
 - (D.) Letter post and Parcel Post
- (14.) Which of the following cannot be transmitted at printed papers rate in foreign post?
 - (A.) Films and sound or video recordings
 - (B.) Papers obtained by means of a typewriter
 - (C.) Copies obtained by means of stamps
 - (D.) All of the above
- (15.) Which of the following items is not included in L.C. (Letters e-Cartes) items?
 - (A.) Letters
 - (B.) Cards



- (C.) Printed Papers (D.) All of the above are included
- (16.) How many maximum International Reply Coupons can be sold to one person at any time?
(A.) 5 (B.) 10 (C.) 15 (D.) 20
- (17.) What is expansion (full name) of 'UPU'?
(A.) Universal Post Unit (B.) Union Postal Unit
(C.) Universal Postal Union (D.) Universal Parcel Union
- (18.) The indication "Paravion" denotes
(A.) By Airmail (B.) Advices of changes of address
(C.) Advice of Delivery (D.) None of the above
- (19.) Asian Pacific Postal Union (APPU) is established in the year
(A.) 1965 (B.) 1951 (C.) 1973 (D.) 1961
- (20.) An aerogramme not conforming to prescribed conditions is treated as:
(A.) Letter (B.) Letter Card
(C.) Postcard (D.) None of the above
- (21.) Mark the incorrect
(A.) CBS = Central Banking Solution (B.) NI = Network Integrator
(C.) CM = Change Management (D.) RICT = Rural Information Communication Technology
- (22.) DARPAN main aims to computerizing
(A.) Divisional Office (B.) Sub Post Office
(C.) Head Post Office (D.) Branch Post Office
- (23.) AEPS stands for
(A.) Aadhaar Enabled Payment Service (B.) ATM Enabled Payment System
(C.) Aadhaar Enabled Payment System (D.) None of the above
- (24.) Financial Services Integrator (FSI) provides solutions for which of the following?
(A.) Core Banking (B.) Core Insurance
(C.) Both (A) and (B) (D.) None of the above
- (25.) Disaster Recovery Centre of Department of Posts is locate at
(A.) New Delhi (B.) Navi Mumbai
(C.) Chennai (D.) Mysuru
- (26.) The full form of 'IPVS' is:
(A.) India Post Visibility System (B.) India Post Value Source
(C.) Internal Postal Van System (D.) India Post Vision Schedule
- (27.) Which is part of IT Modernization Project 2012?
(A.) Core System Integrator (B.) Network Integrator
(C.) Financial System Integrator (D.) All of the above
- (28.) Who is vendor of Data Centre Facility under IT Modernization Project 2012?
(A.) Infosys (B.) TCS
(C.) Reliance (D.) Sify Technologies
- (29.) RSI Stands for
(A.) Rural System Integrator (B.) Rural System Information
(C.) Regional System Integrator (D.) All of the above correct
- (30.) Which segment of IT Modernization Project 2012 prepared the workforce to manage changes in working after implementation of IT Projects in Department of Posts?
(A.) Core System Integrator (B.) Change Management
(C.) Financial Services Integrator (D.) Rural Hardware
- (31.) What is maximum weight limit of Speed Post letters and parcels in India?



- (A.) 30 Kg (B.) 20 Kg (C.) 35 Kg (D.) 25 Kg
- (32.) What is dimension (length and breadth) of Printed Post Card?
 (A.) 14 cm. x 9 cm. (B.) 15 cm. x 9 cm.
 (C.) 11 cm. x 9 cm. (D.) 14 cm. x 10 cm.
- (33.) What is prescribed charge for alternation in address or place of payment in e-MO?
 (A.) Rs.5 only (B.) Without additional charge
 (C.) Single Commission payable on e-MO (D.) Double Commission of normal e-MO
- (34.) What is maximum limit of remittance at a time for personal use through International Money Transfer Services?
 (A.) 1000 US Dollars (B.) 1500 US Dollars
 (C.) 3000 US Dollars (D.) 2500 US Dollars
- (35.) What is the maximum yearly investment limit in Public Provident Fund (PPF) Scheme?
 (A.) Rs.250/- (B.) Rs.1000/- (C.) Rs.150000/- (D.) Rs.100000/-
- (36.) What is rate of interest payable for Recurring Deposit Scheme Account, if closed prematurely after 4 years?
 (A.) Recurring Deposit Interest is payable (B.) Saving Bank interest is payable
 (C.) Time Deposit account interest is payable (D.) Public Provident Fund account interest is payable
- (37.) What is maturity period of Monthly Income Scheme (MIS) Account?
 (A.) 5 Years (B.) 6 Years
 (C.) 5 Years and 6 months (D.) 6 Years and 6 months
- (38.) What is periodicity of payment of benefits in 10 Years RPLI (Gram Priya) policy?
 (A.) After 3 years, 7 years and 10 years (B.) After 4 years, 7 years and 10 years
 (C.) After 5 years, 8 years and 10 years (D.) After 3 years, 6 years and 9 years
- (39.) Deen Dayal SPARSH Yojana is related with
 (A.) Promotion of IPPB (B.) Promotion of Savings Banking
 (C.) Promotion of Premium Product (D.) Promotion of Stamps
- (40.) What is the charge collected for new Aadhaar Enrolments in Post Offices?
 (A.) Rs. 100/ (B.) Rs. 50/
 (C.) Free of Cost (D.) Rs. 100 + GST
- (41.) Mail list should be prepared by Mail PA in:
 (A.) Triplicate (B.) Duplicate
 (C.) Quadruplicate (D.) Single Copy
- (42.) Postmen are forbidden from:
 (A.) Delivering article on which money is due to Post Office on account of postage
 (B.) Deviating from their beat
 (C.) Delivery of registered letter without getting acknowledgement signed
 (D.) All of the above
- (43.) Do night post offices prepare Daily Account of Sunday?
 (A.) Yes (B.) No
 (C.) Occasionally (D.) Has not been provided in rules
- (44.) As per SB Order 12/2018 What is rate of 'commission payable to Agents for procuring business of Senior Citizen's Savings Scheme?
 (A.) 4% (B.) Nil (C.) 2% (D.) 0.5%
- (45.) What pre-requisites for availing DoP Mobile Banking Service?
 (A.) Customer should provide a valid Email ID
 (B.) Customer should provide a valid PAN number



- (C.) Customer should provide a valid unique mobile number (D.) All of the above
- (46.) What is preservation period of "Scanned images of KYC forms at CPC (CBS)"?
- (A.) Two years after scanning and uploading (B.) One year after scanning and uploading
 (C.) Three years after scanning and uploading (D.) Five years after scanning and uploading
- (47.) A sorting assistant should be able to readily repeat or write down from memory
- (A.) List of Indian Post Offices (B.) Sorting List
 (C.) Pin Code of all Pin Sorting Districts in India (D.) All of the above
- (48.) What is full name of "AMPC"?
- (A.) Automatic Mail Processing Centre (B.) Automated Mail Processing Circle
 (C.) Annual Mail Processing Card (D.) Annual Mailing Process Class
- (49.) Letter Sorting Machine (LSM) sorts Bar coded mails at which speed?
- (A.) 30000 articles or more per hour (B.) 3000 articles or more per hour
 (C.) 30000 articles or more per week (D.) 300000 articles or more per month
- (50.) Where a parcel (in the context of foreign) is totally damaged, which of the following is refunded?
- (A.) Insurance Fee (B.) Postal Charges
 (C.) Both of these (D.) None of these
- (51.) What is the other name of Sahyadri Range?
- (A.) Lesser Himalayas (B.) Shivaliks
 (C.) Western Ghats (D.) Eastern Ghats
- (52.) The Radcliffe line is a boundary between
- (A.) India and Pakistan (B.) India and China
 (C.) India and Myanmar (D.) India and Afghanistan
- (53.) Which of the following describes India as a secular state?
- (A.) Fundamental rights (B.) Directive principles of state policy
 (C.) Fifth schedule (D.) Preamble of the constitution
- (54.) What can be maximum strength of Rajya Sabha?
- (A.) 245 (B.) 250 (C.) 255 (D.) 260
- (55.) The famous book 'Anandmath' was authored by
- (A.) Sarojini Naidu (B.) Bankim Chandra Chhottapadhyaya
 (C.) SriAurobindo (D.) Rabindrnath Tagore
- (56.) Country that was called as Land of Rising Sun?
- (A.) Japan (B.) Russia (C.) Korea (D.) Holland
- (57.) Which of the following folk dance forms is associated with Gujarat?
- (A.) Nautanki (B.) Garba (C.) Kathakali (D.) Bhangra
- (58.) The first Satyagraha campaign of Gandhiji was started in:
- (A.) Dandi (B.) Kheda
 (C.) Champaran (D.) Bardoli
- (59.) Morality is science of..
- (A.) Virtues (B.) Vices
 (C.) Both (A) and (B) (D.) Neither (A) and (B)
- (60.) To be effective, what must exist between individuals in the relationship?
- (A.) Antipathy (B.) Rivalry (C.) History (D.) Empathy
- (61.) Evaluate $4 + 3 \times 7 + 6 - 12$
- (A.) 19 (B.) 55 (C.) 43 (D.) 21
- (62.) $1608 - 329 = ? + 323$
- (A.) 1602 (B.) 956 (C.) 652 (D.) 1285

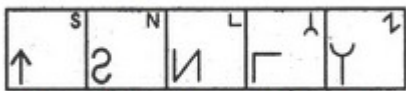


- (63.) $9 - \frac{16}{3} \div \frac{64}{27} = ?$
 (A.) $6\frac{3}{4}$ (B.) $5\frac{1}{3}$ (C.) 6 (D.) 4
- (64.) Evaluate 20% of 720 + 55% of 600
 (A.) 474 (B.) 330 (C.) 144 (D.) 186
- (65.) The population of a town increases every year by 5%. If its present population is 40000, then after 3 years it will be
 (A.) 51576 (B.) 4630500 (C.) 6305 (D.) 46305
- (66.) 8 is what percentage of 400?
 (A.) 1% (B.) 8% (C.) 2% (D.) 4%
- (67.) The cost price of the watch which is sold for Rs.888 at a loss of Rs.189.
 (A.) 699 (B.) 1077 (C.) 1266 (D.) 510
- (68.) A man buys a Bicycle for Rs.3750/- and sells it for Rs.3860/-. Find his gain percent.
 (A.) 1.94% (B.) 2.94% (C.) 3.94% (D.) 4.94%
- (69.) If a man were to sell one book for Rs.225, he would lose 25%. To gain 25% he should sell it for:
 (A.) Rs. 375 (B.) Rs. 300 (C.) Rs. 450 (D.) Rs. 425
- (70.) Sudheer paid Rs. 3600 as interest on a loan he took 3 years ago at 12% rate of simple interest. What was the amount he took as loan?
 (A.) Rs. 13600 (B.) Rs. 10000 (C.) Rs. 12000 (D.) Rs. 12600
- (71.) Nila deposited Rs.2200 in a savings bank account. The bank offered 8.5% simple interest per annum. How much interest does Nila earn in 3 years?
 (A.) Rs. 600 (B.) Rs. 661 (C.) Rs. 760 (D.) Rs. 561
- (72.) In what time would a sum double itself at 12.5% simple interest?
 (A.) 8 Years (B.) 15 Years (C.) 18 Years (D.) 6 Years
- (73.) Shashi obtained 63, 67, 71, 78 and 86 out of 100 in different subjects, What will be the average?
 (A.) 68 (B.) 69 (C.) 73 (D.) 70
- (74.) Find the average of first seven odd numbers?
 (A.) 6 (B.) 5 (C.) 7 (D.) 8
- (75.) In the first 12overs of a cricket match, the run rate was only 3.5 run per over. What should be the run rate in remaining 38 overs to reach the target of 213 runs?
 (A.) 5.5 run per over (B.) 4.5 run per over
 (C.) 6 run per over (D.) 4 run per over
- (76.) If Anil and Ramesh together can complete a repairing work in 8 days and Ramesh alone in 12 days, in how many days can Anil alone complete the work?
 (A.) 20 Days (B.) 18 Days (C.) 16 Days (D.) 24 Days
- (77.) B complete a work in 6 days. A alone can do it in 10 days. If both together can do the work in how many days?
 (A.) 3.75 Days (B.) 4 Days (C.) 5 Days (D.) 6 Days
- (78.) An aeroplane covers a certain distance at a speed of 240 kmph in 5 hours. To cover the same distance in 3 hours, it must travel at a speed of:
 (A.) 300 kmph (B.) 375 kmph (C.) 400 kmph (D.) 600 kmph
- (79.) The speed of a train is 105kmph. What is the distance covered by it in 10 minutes?
 (A.) 15 kmph (B.) 17.5 kmph (C.) 18 kmph (D.) 16 kmph
- (80.) Cost of 8 dozen Apples is Rs.192. How many Apples can be purchased for Rs.30?



- (A.) 15 Apples (B.) 16 Apples (C.) 18 Apples (D.) 20 Apples
- (81.) Look at this series: 6, 10, 9, 13, 12, 16,...
What number should come next?
(A.) 7 (B.) 15 (C.) 12 (D.) 13
- (82.) Look at this series: 58, 52, 46, 40, 34,
What number should come next?
(A.) 42 (B.) 26 (C.) 38 (D.) 28
- (83.) 4, 6, 9, 13, ?
What will come at place of question mark?
(A.) 16 (B.) 15 (C.) 18 (D.) 21
- (84.) QPO, NML, KJI, _, EDC (fill the blank)
(A.) HGF (B.) CAB (C.) JKM (D.) GHD
- (85.) Choose the word which is different from the rest.
(A.) Curd (B.) Butter (C.) Cheese (D.) Oil
- (86.) 4, 7, 12, 19, 28, ?
What will come at place of question mark?
(A.) 49 (B.) 36 (C.) 30 (D.) 39
- (87.) Choose the word which is different from the rest.
(A.) Car (B.) Bicycle (C.) Scooter (D.) Helicopter
- (88.) Find the odd letters from the given options
(A.) PQXZ (B.) CQBN (C.) ABDF (D.) PRMN
- (89.) In a row of trees, a tree is 7th row left end and 14th from right end. How many trees are there in the row?
(A.) 18 (B.) 19 (C.) 20 (D.) 21
- (90.) Book: Cover:: Painting : ?
What will come at place of question mark?
(A.) Example (B.) Frame (C.) Wall (D.) Colour
- (91.) Select a figure from amongst the Answer Figures which will continue the same series as established by the five Problem Figures.

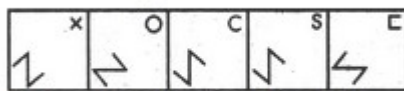
Problem Figures:



(A) (B) (C) (D) (E)

(A.) A

Answer Figures:



(1) (2) (3) (4) (5)

(B.) B

(C.) C

(D.) D

- (92.) Select a figure from amongst the Answer Figures which will continue the same series as established by the five Problem Figures.

Problem Figures:



(A) (B) (C) (D) (E)

(A.) A

Answer Figures:



(1) (2) (3) (4) (5)

(B.) B

(C.) C

(D.) D

- (93.) Choose the figure which is different from the rest.



(1) (2) (3) (4) (5)

(A.) A (B.) B (C.) C (D.) D

(94.) Choose the figure which is different from the rest.



(1) (2) (3) (4) (5)

(A.) A (B.) B (C.) C (D.) D

(95.) Identify the figure that completes the pattern.



(X)



(1)



(2)



(3)



(4)

(A.) A (B.) B (C.) C (D.) D

(96.) Identify the figure that completes the pattern.



(X)



(1)



(2)



(3)




(4)

(A.) A (B.) B (C.) C (D.) D

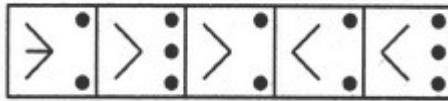
(97.) Select a suitable figure from the Answer Figures that would replace the question mark (?)

Problem Figures:



(A) (B) (C) (D)

Answer Figures:

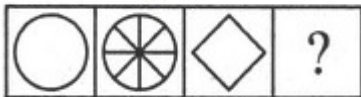


(1) (2) (3) (4) (5)

(A.) A (B.) B (C.) C (D.) D

(98.) Select a suitable figure from the Answer Figures that would replace the question mark (?)

Problem Figures:



(A) (B) (C) (D)

Answer Figures:



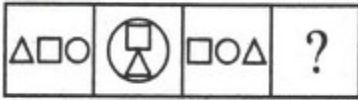
(1) (2) (3) (4) (5)

(A.) A (B.) B (C.) C (D.) D

(99.) Select a suitable figure from the Answer Figures that would replace the question mark (?).



Problem Figures:



(A) (B) (C) (D)

(A.) A

Answer Figures:



(1) (2) (3) (4) (5)

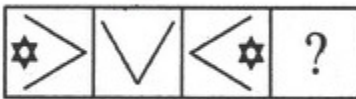
(B.) B

(C.) C

(D.) D

(100.) Select a suitable figure from the Answer Figures that would replace the question mark.

Problem Figures:



(A) (B) (C) (D)

(A.) A

Answer Figures:



(1) (2) (3) (4) (5)

(B.) B

(C.) C

(D.) D

RAJASTHAN CIRCLE- PA/SA EXAM -2020

ANSWER

(1.)	D	(2.)	A	(3.)	C	(4.)	D	(5.)	B
(6.)	C	(7.)	A	(8.)	C	(9.)	B	(10.)	D
(11.)	D	(12.)	C	(13.)	D	(14.)	D	(15.)	C
(16.)	B	(17.)	C	(18.)	A	(19.)	D	(20.)	A
(21.)	A	(22.)	D	(23.)	C	(24.)	C	(25.)	D
(26.)	A	(27.)	D	(28.)	C	(29.)	A	(30.)	B
(31.)	C	(32.)	A	(33.)	B	(34.)	D	(35.)	C
(36.)	B	(37.)	A	(38.)	B	(39.)	D	(40.)	C
(41.)	B	(42.)	D	(43.)	A	(44.)	B	(45.)	D
(46.)	C	(47.)	D	(48.)	A	(49.)	A	(50.)	B
(51.)	C	(52.)	A	(53.)	D	(54.)	B	(55.)	B
(56.)	A	(57.)	B	(58.)	C	(59.)	C	(60.)	D
(61.)	A	(62.)	B	(63.)	A	(64.)	A	(65.)	D
(66.)	C	(67.)	B	(68.)	B	(69.)	A	(70.)	B
(71.)	D	(72.)	A	(73.)	C	(74.)	C	(75.)	B
(76.)	D	(77.)	A	(78.)	C	(79.)	B	(80.)	A
(81.)	B	(82.)	D	(83.)	C	(84.)	A	(85.)	D
(86.)	D	(87.)	B	(88.)	C	(89.)	C	(90.)	B
(91.)	C	(92.)	D	(93.)	B	(94.)	C	(95.)	D
(96.)	D	(97.)	C	(98.)	A	(99.)	C	(100.)	A