



MADHYA PRADESH CIRCLE- PA/SA EXAM -2020

- (1.) When article should be returned to the office of posting for return to the sender and refund of the postage stamps as affixed:
 - (A.) Article addressed to places for which the insured letter services is not available
 - (B.) Articles insured for a sum exceeding the maximum for the particular destination concerned
 - (C.) Articles addressed to initials or the address of which is written in pencil or ceased or corrected
 - (D.) All of the above
- (2.) Mark incorrect option related to Postcard:
 - (A.) Should not be folded, cut or altered and should be sent unenclosed
 - (B.) Breach of the conditions may be treated as letter and postage will be taxed accordingly
 - (C.) Unpaid and insufficiently paid postcards are forwarded taxed with double the deficiency
 - (D.) The amount is recovered from sender after the delivery
- (3.) What is the maximum weight limit of a book post containing periodicals?
 - (A.) 2 Kg
 - (B.) 4 Kg.
 - (C.) 5 Kg.
 - (D.) 7 Kg.
- (4.) These will be delivered through Post Box:
 - (A.) All article including accountable articles and Money Orders
 - (B.) Only fully paid unregistered articles of the letter mail
 - (C.) Fully paid unregistered articles of letter mail and parcels
 - (D.) None of the above
- (5.) In which Post Offices articles can be insured?
 - (A.) Branch Post Offices
 - (B.) Sub Post Offices
 - (C.) Head Post Offices
 - (D.) All Post Offices
- (6.) Head Quarters of Kerala Circle is situated at
 - (A.) Chennai
 - (B.) Thiruvananthapuram
 - (C.) Bangalore
 - (D.) Patna
- (7.) In which case(s) registration is compulsory?
 - (A.) Any parcel exceeding 4 kg
 - (B.) Any insured article
 - (C.) Any VP article
 - (D.) All the above
- (8.) No compensation will be payable in case(s)
 - (A.) For loss or damage caused by the fault or negligence of the sender
 - (B.) Article is prohibited by transmission by post
 - (C.) For damage in case in which the contents of the registered article are liquid or perishable articles or articles of exceptionally fragile nature.
 - (D.) All the above
- (9.) Money order neither paid to payee nor remitter is called as:
 - (A.) Unclaimed money order
 - (B.) Void money order
 - (C.) Lapsed money order
 - (D.) None of these
- (10.) A letter posted unpaid is charged on delivery as
 - (A.) Single Postage
 - (B.) Double the Postage
 - (C.) Deficiency of Postage
 - (D.) No recovery is to be made
- (11.) Article addressed to deceased person:
 - (A.) Deliver such article to any near relative of the deceased who may have applied for them in case uninsured article
 - (B.) Deliver such article to any near relative of the deceased who may have applied for them in case do not appear to contain any valuable property




- (C.) Deliver such article to any near relative of the deceased who may have applied for them in case counter - claimant or likelihood of dispute
- (D.) All of the above
- (12.) What is maximum weight limit of bags for foreign post?
 (A.) 35 Kg. (B.) 30 kg. (C.) 25 Kg. (D.) 10 kg.
- (13.) What is expansion of 'UPU'?
 (A.) Universal Post Unit (B.) Union Postal Unit
 (C.) Universal Postal Union (D.) Universal Parcel Union
- (14.) In the foreign post the term "Letter Post" applies to the following classes of Postal Articles:
 (A.) Printed Papers (B.) Post Cards
 (C.) Registered News Papers (D.) All of the above
- (15.) An aerogramme should not weigh more than
 (A.) 3gms (B.) 5gms
 (C.) 10gms (D.) None of the above
- (16.) The minimum weight of a bag in Bulk Bag (M Bag) System is
 (A.) 2 Kg. (B.) 3 kg. (C.) 4 Kg. (D.) 5 kg.
- (17.) The fee for a blind literature packet to be air lifted to a foreign country is
 (A.) Air surcharge as applicable to letter post
 (B.) Air surcharge as applicable to printed paper
 (C.) Free of charge (D.) None of the above
- (18.) The delivery of a foreign article in the country of destination
 (A.) Varies from country to country (B.) Uniform all over
 (C.) As desired by the sender (D.) None of these
- (19.) In connection with 'Foreign Post' the term L.C. means.....
 (A.) Letter Card (B.) Letter Category
 (C.) Letters and Cards (D.) None of these
- (20.) What is maximum weight limit of a packet of literature for the blind meant for foreign country?
 (A.) 5 kg (B.) 10 Kg. (C.) 7 Kg. (D.) 20 Kg.
- (21.) India Joined the AOPU (APPU) in the year
 (A.) 1970 (B.) 1973 (C.) 1978 (D.) 1975
- (22.) The full form of 'NI' is:
 (A.) National Internet (B.) Network Integrator
 (C.) Network Implementation (D.) National Integrator
- (23.) The segment of IT Modernization Project 2012 which prepared the work tone for the complete change in Departments working after Implementation of IT Projects is named as
 (A.) Change Management (B.) Financial Services Integrator
 (C.) Con System Integrator (D.) Data Centre Facility
- (24.) Financial Services Integrator (FSI) provides solutions for which of the following?
 (A.) Core Banking (B.) Core Insurance
 (C.) Both (A) and (B) (D.) None of the above
- (25.) Core System Integrator (CSI) provides solution for
 (A.) Mail Operations (B.) Finance and Accounts
 (C.) Human Resources (D.) All of the above
- (26.) The full form of DPMS' is:
 (A.) Delivery and Postman Management System (B.) Delivered Postal Mail Scheme
 (C.) Delay in Postal Mail System (D.) Data of Postal Mail System



- (27.) What is / are the objectives of IT Modernization Project?
 (A.) Empower Rural (B.) Increase Market Share and Revenue
 (C.) Offer New Product and Services (D.) All the above
- (28.) Who is the vendor of Data Centre Facility?
 (A.) SIFY (B.) Reliance (C.) Infosys (D.) TCS
- (29.) Under which network post offices have been networked?
 (A.) Local Area Network (B.) Wide Area Network
 (C.) Wireless Area Network (D.) Virtual Private Network
- (30.) Which one is incorrect?
 (A.) CEPT - The Centre For Excellence in Postal Technology
 (B.) UPS - Uninterrupted Power Station
 (C.) DARPAN - Digital Advancement of Rural Post Office for a New India
 (D.) All the above
- (31.) A "SOL" in Core Banking Solutions (CBS) refers to:
 (A.) Systematic Outlet (B.) Sub Office Layout
 (C.) Service Outlet (D.) Service Organization Layout
- (32.) What is the maximum weight up to which domestic Speed Post can be booked?
 (A.) 35 kg (B.) 20 kg (C.) 4 kg (D.) 2 kg
- (33.) Conversion of single to joint account or vice versa is:
 (A.) Allowed (B.) Not allowed
 (C.) Allowed only once (D.) Allowed twice in a year
- (34.) National Savings Time Deposit Account (TD) can be opened with minimum of Rs..... And in multiple of Rs.....
 (A.) 100, 100 (B.) 1000, 1000 (C.) 1000, 100 (D.) 100, 1000
- (35.) Which is correct about Withdrawal from Sukanya Samriddhi Account (SSA)?
 (A.) Withdrawal may be taken after girl child attains age of 18 or passed 10th standard
 (B.) Withdrawal may be taken up to 50% of balance available at the end of preceding F.Y.
 (C.) Withdrawal may be made in one lump sum or in installments, not exceeding one per year
 (D.) All above are correct
- (36.) Amount invested in Kisan Vikas Patra (KVP) doubles in months.
 (A.) 113 (B.) 118 (C.) 124 (D.) 120
- (37.) Who is/are eligible for obtaining a PLI Policy from the following?
 (A.) Central / State Government Employees (B.) Defence Services
 (C.) Nationalized Banks (D.) All the above
- (38.) What is the periodicity of payment of Anticipated Endowment Assurance of 20 year policy?
 (A.) 6 years, 9 years, 12 years & 15 years (B.) 8 years, 12 years, 16 years & 20 years
 (C.) 4 years, 8 years, 12 years & 16 years (D.) 5 years, 10 years, 15 years & 20 years
- (39.) India Post offers a unique advertisement concept to help the Indian Corporate and the Government Organizations to reach potential customer through?
 (A.) Media Post (B.) Business Post
 (C.) Retail Post (D.) e-Post
- (40.) What is the brand name for personalized sheets of Postage Stamps of India Post?
 (A.) Philately (B.) My Stamp
 (C.) SPARSH (D.) None of the above
- (41.) Interest rates of Small Savings Schemes are changed ...
 (A.) Quarterly (B.) Monthly (C.) Annually (D.) Half Yearly



- (42.) NSC and KVP is issued in the shape of Passbook Format w.e.f.
 (A.) 01-06-2016 (B.) 01-07-2016
 (C.) 01-08-2016 (D.) None of the above
- (43.) Cash bag should be sealed by.....
 (A.) Insured Seal (B.) Cash Seal and with black sealing wax
 (C.) Cash Seal (D.) Any of the above
- (44.) In which form attendance register will be maintained?
 (A.) MS-95 (B.) S-35 (C.) S-37 (D.) MS-94
- (45.) As per SB Order 13/2019, who can open Senior Citizen Savings Scheme, 2019 Account?
 (A.) An individual above 60 years of age
 (B.) Retired civilian employees above 55 years
 (C.) Retired defence employees above 50 years (D.) All the above
- (46.) Authority to whom complaints should be addressed:
 (A.) Superintendent of Post Offices (B.) Postmaster of a First Class Head Post Office
 (C.) Either of the above, as the case may be (D.) None of the above
- (47.) Metal token has to be returned, if the Sorting assistant
 (A.) Goes on leave (B.) Transfer to other HRO
 (C.) Dismissed/Removed from service (D.) All the above
- (48.) The authority competent to relax the provision of office attendance at Record Office is
 (A.) The Superintendent of RMS (B.) The sub divisional Inspector
 (C.) The Head of the circle (D.) The record/sub record officer
- (49.) A Sorting Assistant will be considered unfit for his post
 (A.) If he is not dressed neatly
 (B.) If he is a regular late comer
 (C.) If hemis-sent articles regularly which are clearly and legibly addressed
 (D.) None of these
- (50.) "IFS" stands for
 (A.) International Financial System (B.) International Finance Service
 (C.) Internal Funds Service (D.) None of the above
- (51.) Which of the following river has the largest river basin in India?
 (A.) The Indus (B.) The Ganga
 (C.) The Brahmaputra (D.) The Krishna
- (52.) Which of the following part of India receives the first monsoon in summer?
 (A.) Western Ghats (B.) Himalayas
 (C.) Meghalaya Plateau (D.) Eastern Ghats
- (53.) What is the central feature of Democracy?
 (A.) Inequality (B.) Discrimination
 (C.) Equality (D.) restrictions
- (54.) If a 13-year old child is working in a factory, what is it called?
 (A.) Freedom to education (B.) Childlabour
 (C.) Both (a) and (b) (D.) None of these
- (55.) Which place is said to be the cathedral city of India?
 (A.) Varanasi (B.) Madurai
 (C.) Kolkata (D.) Bhubaneswar
- (56.) The famous Rock Garden is located in which city?
 (A.) Jaipur (B.) Shimla (C.) Chandigarh (D.) Lucknow



- (57.) Where is "Pushkar Fair" held?
 (A.) Jaipur (B.) Udaipur (C.) Jodhpur (D.) Ajmer
- (58.) Which of the following is a popular folk dance of Maharashtra?
 (A.) Garba (B.) Dandiya (C.) Tamasha (D.) Bhangra
- (59.) Kuka Movement is associated with which of the following states?
 (A.) Assam (B.) Bengal
 (C.) Punjab (D.) Maharashtra
- (60.) It is always important to.....yourself, others and the place where you work.
 (A.) Appearance (B.) Greed
 (C.) Communicate (D.) Respect
- (61.) Evaluate $2+4 \times 6+8-10$
 (A.) 10 (B.) 18 (C.) 24 (D.) 16
- (62.) Evaluate $(4+7) \times 3$
 (A.) 25 (B.) 33 (C.) 9 (D.) 12
- (63.) Fill in the blanks, such as to make the statements below true
 $36 \div \underline{\quad} + 4 = 10$
 (A.) 5 (B.) 4 (C.) 9 (D.) 6
- (64.) What is 2.5% of 2 quintal?
 (A.) 15 kg (B.) 10 kg (C.) 5 kg (D.) 25 Kg
- (65.) Evaluate 28% of 450 + 45% of 280
 (A.) 232 (B.) 242 (C.) 252 (D.) 262
- (66.) The population of a town is 176400. It increases annually at the rate of 5% per annum. What will be its population after 2 years?
 (A.) 194780 (B.) 194688 (C.) 194546 (D.) 194481
- (67.) Anil buys a motorcycle for Rs.25000/-. If he decides to sell the motorcycle for a profit of 7% find the selling price.
 (A.) Rs.27000/ (B.) Rs.26750/ (C.) Rs.26000/ (D.) Rs.25750/
- (68.) When a plot is sold for Rs.18700, the owner losses 15%. At what prices must that plot be sold in order to gain 15% profit?
 (A.) Rs.22, 500 (B.) Rs.21, 000 (C.) Rs.25, 300 (D.) Rs.25, 800
- (69.) A man buys an chair for Rs.2750/ and sells it for Rs.2860/-, Find his gain percent
 (A.) 1% (B.) 2% (C.) 3% (D.) 4%
- (70.) Nitya deposited Rs.1200 in a savings bank account. The bank offered 12% simple interest per annum. How much interest does Nitya earn in 5 years?
 (A.) Rs.680 (B.) Rs.960 (C.) Rs.720 (D.) Rs.840
- (71.) In what time would a sum double itself at 5% simple interest?
 (A.) 15 years (B.) 20 years (C.) 18 years (D.) 10 years
- (72.) Find the principal that amount to Rs.2360 in 6 years at 3% per annum.
 (A.) Rs. 1000 (B.) Rs.2000 (C.) Rs.3000 (D.) Rs.4000
- (73.) Rekha obtained 65, 67, 76, 82 and 85 out of 100 in different subjects, What will be the average?
 (A.) 70 (B.) 75 (C.) 80 (D.) 85
- (74.) Find the average of first 5 multiples of 3
 (A.) 9 (B.) 11 (C.) 13 (D.) 15
- (75.) In the first 10 overs of a cricket match, the run rate was only 3 run per over. What should be the run rate in remaining 40 overs to reach the target of 270 runs?
 (A.) 7 run per over (B.) 8 run per over



- (C.) 6 run per over (D.) 6.25 run per over
- (76.) Harish alone can do a piece of work in 10 days and Brijesh alone can do it in 15 days. In how many days will Harish and Brijesh together do the same work?
 (A.) 5 days (B.) 6 days (C.) 8 days (D.) 9 days
- (77.) If Rajesh and Ramesh together can build a Hut in 15 days and Ramesh alone in 20 days, in how many days can Rajesh alone complete the work?
 (A.) 60 days (B.) 45 days (C.) 40 days (D.) 30 days
- (78.) The speed of a train is 90kmph. What is the distance covered by it in 10 minutes?
 (A.) 15 km. (B.) 12 km. (C.) 10 km. (D.) 05 km.
- (79.) The speed of a car is 90kmph in the first hour and 60 Kmph in the second hour. What is the average speed of the car?
 (A.) 72kmph (B.) 82kmph (C.) 75kmph (D.) 80kmph
- (80.) The monthly salary of Hari Kishan is 80000. The monthly salary of Manish is 40000. How many times of the salary of Manish is the salary of Hari Kishan?
 (A.) 2 times (B.) 4 times (C.) $\frac{1}{2}$ times (D.) 8 times
- (81.) What will come at the place of question mark?
 1, 9, 25, 49, ?, 121
 (A.) 100 (B.) 91 (C.) 64 (D.) 81
- (82.) What will come at the place of question mark?
 4, 7, 12, 19, 28, ?
 (A.) 39 (B.) 36 (C.) 30 (D.) 73
- (83.) What will come at the place of question mark?
 6, 11, 21, ?, 56, 81
 (A.) 54 (B.) 46 (C.) 36 (D.) 42
- (84.) What will come at the place of question mark?
 10, 100, 200, 310, ?
 (A.) 430 (B.) 420 (C.) 410 (D.) 400
- (85.) Look at this series 7, 10, 8, 11, 9, 12, ... What number comes next?
 (A.) 7 (B.) 10 (C.) 12 (D.) 13
- (86.) FAG, GAF, HAI, IAH _____
 (A.) JAK (B.) HAL (C.) HAK (D.) JAI
- (87.) If LIGHT is coded as GILTH, find the code for RAINY.
 (A.) IARYN (B.) ARINY (C.) NAIRY (D.) RINAY
- (88.) Insert the arithmetical signs in the following numerical figure.
 9 6 3 = 27
 (A.) +, X (B.) -, + (C.) /, + (D.) +, /
- (89.) Find the missing series 2, 3, 8, 63, ?
 (A.) 3900 (B.) 3968 (C.) 3636 (D.) 3988
- (90.) Find the missing series 1, 7, 3, 9, 6, 12, 10, 16, 15, ?
 (A.) 18 (B.) 20 (C.) 15 (D.) 21
- (91.) Find the number of triangles in the given figure.





A Vision of Victory

VV ACADEMY

GDS / POSTMAN / MTS / PA / LGO



(A.) 12 (B.) 18 (C.) 22 (D.) 26
 (92.) Select a suitable figure from the Answer Figures that would question mark (?)

Problem Figures: Answer Figures:

--	--	--	--

--	--	--	--	--

(A) (B) (C) (D) (1) (2) (3) (4) (5)

(A.) 1 (B.) 2 (C.) 3 (D.) 4
 (93.) Select a suitable figure from the Answer Figures that would replace the question mark (?)

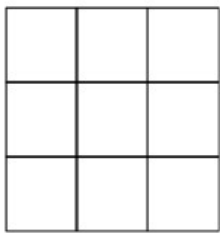
Problem Figures: Answer Figures:

--	--	--	--

--	--	--	--	--

(A) (B) (C) (D) (1) (2) (3) (4) (5)

(A.) 1 (B.) 2 (C.) 3 (D.) 4
 (94.) Find the number of Square in the given figure.



(A.) 9 (B.) 10 (C.) 15 (D.) 14
 (95.) Which figure logically belongs on the spot of the question mark?

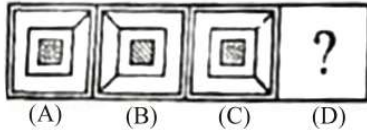
Answer Figure:

--	--	--	--

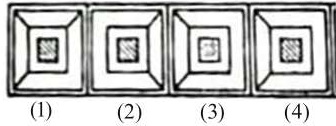
(A) (B) (C) (D)

(A.) A (B.) B (C.) C (D.) D
 (96.) Select a suitable figure from the Answer Figures that would replace the question mark (?)

Question figure:




Answer figures:



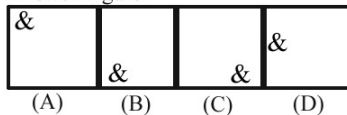
- (A.) 1 (B.) 2 (C.) 3 (D.) 4

(97.) Discover the pattern and then pick up the missing picture from the answer choices.

Question Figure



Answer Figure



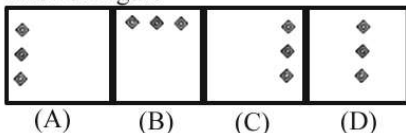
- (A.) A (B.) B (C.) C (D.) D

(98.) Discover the pattern and then pick up the missing picture from the answer choices.

Question Figure



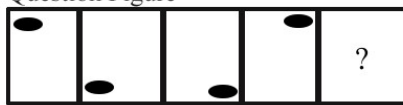
Answer Figure



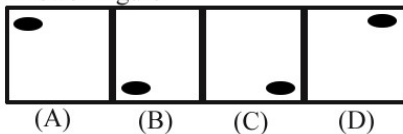
- (A.) A (B.) B (C.) C (D.) D

(99.) Discover the pattern and then pick up the missing picture from the answer choices.

Question Figure




Answer Figure



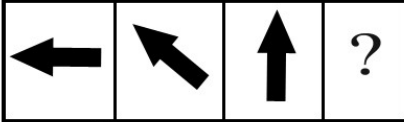
- (A.) A (B.) B (C.) C (D.) D

(100.) Discover the latter and then pick up the missing picture from the answer choice





Question Figure



Answer Figure



(A)

(B)

(C)

(D)

(A.) A

(B.) B

(C.) C

(D.) D

MADHYA PRADESH CIRCLE- PA/SA EXAM -2020

ANSWER

(1.)	D	(2.)	D	(3.)	C	(4.)	B	(5.)	D
(6.)	B	(7.)	D	(8.)	D	(9.)	B	(10.)	B
(11.)	D	(12.)	B	(13.)	C	(14.)	D	(15.)	A
(16.)	D	(17.)	B	(18.)	A	(19.)	C	(20.)	C
(21.)	B	(22.)	B	(23.)	A	(24.)	C	(25.)	D
(26.)	A	(27.)	D	(28.)	B	(29.)	B	(30.)	B
(31.)	C	(32.)	A	(33.)	B	(34.)	C	(35.)	D
(36.)	C	(37.)	D	(38.)	B	(39.)	A	(40.)	B
(41.)	A	(42.)	B	(43.)	B	(44.)	C	(45.)	D
(46.)	C	(47.)	D	(48.)	C	(49.)	C	(50.)	A
(51.)	B	(52.)	A	(53.)	C	(54.)	B	(55.)	D
(56.)	C	(57.)	D	(58.)	C	(59.)	C	(60.)	D
(61.)	C	(62.)	B	(63.)	D	(64.)	C	(65.)	C
(66.)	D	(67.)	B	(68.)	C	(69.)	D	(70.)	C
(71.)	B	(72.)	B	(73.)	B	(74.)	A	(75.)	C
(76.)	B	(77.)	A	(78.)	A	(79.)	C	(80.)	A
(81.)	D	(82.)	A	(83.)	C	(84.)	A	(85.)	B
(86.)	A	(87.)	A	(88.)	A	(89.)	B	(90.)	D
(91.)	B	(92.)	A	(93.)	C	(94.)	D	(95.)	D
(96.)	A	(97.)	D	(98.)	A	(99.)	A	(100.)	D