



KARNATAKA CIRCLE- PA/SA EXAM -2020

- (1.) The weight of a book packet shall not exceed
 (A.) 7 kilograms (B.) 5 kilograms (C.) 2 kilograms (D.) 4 kilograms
- (2.) The annual fee for issue of a permit to use business reply cards and envelopes is
 (A.) Rs 100 (B.) Rs 200 (C.) Rs 250 (D.) Rs 500
- (3.) Article bearing the frank of a date immediately preceding the date of presentation of the article will be accepted provided:
 (A.) The consignment is accompanied by the window Ticket for the identification of the licensee's representative.
 (B.) The licence die from the machine is removed.
 (C.) They bear also the impression of the licence die of the date of presentation.
 (D.) The daily docket register possessed by the licensee is submitted.
- (4.) Which among the following is incorrect about franking machines?
 (A.) Impressions of "frank" consist of "value die" and "License die".
 (B.) Machine franked articles posted in letter boxes shall be treated as paid articles.
 (C.) Machine franked articles can be posted at not more than two office specified by the SPO's in the license.
 (D.) An advertisement device may also appear alongside the date stamp impression provided it relates solely to the business or profession of the licensee
- (5.) Which of the following is correct about Blind Literature Packets?
 1) No postage is required. 2) Free registration fee and acknowledgment.
 3) If airlift is required customer has to pay air surcharge. 4) Maximum weight is 7 kg,
 (A.) 1 & 3 above (B.) 1 & 4 above
 (C.) 1, 2 & 4 above (D.) All the above
- (6.) Night Post Office working can be extended up to 8:30 pm and also kept open on Sundays under the orders of the
 (A.) Director General, Posts. (B.) Head of the Circle.
 (C.) Director of Postal Services.
 (D.) Senior Superintendent./ Superintendent of Post Offices.
- (7.) Registration of an article is compulsory; if it is a parcel exceeding ----- in weight
 (A.) 5 kg (B.) 3 kg (C.) 4 kg (D.) 6 kg
- (8.) Conditions for free re-direction are prescribed in which clause of Post Office Guide Part -I?
 (A.) Clause 79 (B.) Clause 69 (C.) Clause 96 (D.) Clause 97
- (9.) Fee for redirection of an inland money order is
 (A.) Double of MO commission (B.) Equal to the MO commission
 (C.) Half of MO commission (D.) Free of cost
- (10.) If the remitter of a money order presents an application requesting postmaster of office of issue to change the name of the payee, the fee to be collected is.
 (A.) Second commission equal to first, (B.) Double of MO commission
 (C.) Half of MO commission (D.) Free of cost
- (11.) The headquarters of Asia Pacific Postal Union is located at
 (A.) Berne, Switzerland. (B.) Bangkok, Thailand.
 (C.) Manila, Philippines. (D.) The Hague, Netherlands.
- (12.) Which among the following conditions are correct with respect to withdrawal from post and alteration of address of a foreign article?



- a. The sender should submit a written application accompanied by a prescribed fee in the form of postage stamps.
- b. The sender should submit a sealed cover containing a statement of reasons for withdrawing the article or altering the address.
- c. The sender can submit the application in any sub or head post office.
- d. If the article was a registered article the sender should submit receipt of booking of registered article along with the application
- (A.) a, b & d (B.) b, c, & d
(C.) a, 6, &c (D.) All the above.
- (13.) If the addressee of any ordinary or VP inward foreign packet of printed papers of an ordinary or V.P inward foreign parcel fails to take delivery of it within 7 days following the date of its first presentation and if the article weighs more than 500 grams, a charge at the rate per day as prescribed commencing from the 8th day is to be collected from the addressee at the time of delivery. This charge is called
- (A.) Demurrage charge (B.) Warehousing charge
(C.) Poste-Restante charge (D.) Air mail charge
- (14.) Value - Payable inward foreign articles addressed to Poste-Restante are retained in the office to which they are addressed for a period of
- (A.) Seven days. (B.) Two weeks.
(C.) One month. (D.) Ten days.
- (15.) In the Bulk Bag System available for dispatch/receipt of special bags of printed papers to/from addressees/senders in foreign countries weight of each bag should not be less than _____ kilogram and not more than _____ kilogram
- (A.) 5, 25 (B.) 10, 40 (C.) 15, 25 (D.) 5, 30
- (16.) The general maximum limit of weight for a foreign parcel is
- (A.) 10 Kilogram (B.) 15 Kilogram (C.) 20 Kilogram (D.) No limit
- (17.) Inward foreign parcels addressed Poste-Restante are detained in the office of delivery for a period not exceeding _____
- (A.) Seven days. (B.) One month
(C.) Ten days (D.) Two weeks
- (18.) Letter post articles containing dutiable goods addressed to foreign destination should be accompanied by
- (A.) Cash on Delivery Form (B.) Customer ID proof
(C.) Customs Declaration Form (D.) Customs Duty Form
- (19.) Which among the following cannot be transmitted at Printed Papers rate in foreign Post
- (A.) Impression obtained by means of computer printers
(B.) Musical scores in manuscript
(C.) Photocopies (D.) Papers obtained by means of a typewriter of any type
- (20.) The maximum weight of "Small Packets" service in foreign Post is
- (A.) 1 Kilogram (B.) 2 Kilogram (C.) 5 Kilogram (D.) 7 Kilogram
- (21.) Which among the following is NOT CORRECT about DARPAN DEVICE?
- (A.) Speed Post, e-MO can be booked through the device.
(B.) After delivery of VP articles, VPMO can be booked directly through the device.
(C.) BPM can prepare daily account electronically and print out can be taken
(D.) Stamp sales cannot be made through the device.
- (22.) QR card is associated with which of the following:
- (A.) Core Banking Solutions. (B.) DARPAN



- (C.) India Post Payments Bank (D.) Post Office Savings Bank
- (23.) The full form of ECMS is:
 - (A.) Electronic Counter Machine System (B.) Electric Controlled Mechanical Solution
 - (C.) Enterprise Content Management System (D.) Enterprise Core Memory System
- (24.) The full form of DCT IS
 - (A.) Detailed Cash Transactions (B.) Direct Customs Transfer
 - (C.) Detailed Cash Transfer (D.) Direct cash Transfer
- (25.) The term STR in CBS means
 - (A.) Sub account Transit Report (B.) Sub office Transfer Register
 - (C.) Sub office Transaction Report (D.) Suspicious Transaction Report 48
- (26.) The IT Modernization Project of Department of Posts was approved by the Government of India in
 - (A.) October, 2012 (B.) November, 2012
 - (C.) December, 2012 (D.) September, 2012
- (27.) Which stream of the IT Modernization Project aimed to prepare all the employees of the Department including Gramin Dak Sevaks to enable them to function effectively in an IT environment?
 - (A.) Change Management Stream (B.) Core Systems Integrator Stream
 - (C.) Mail Operations Hardware Stream (D.) Net Work Integrator Stream
- (28.) Full form of AEPS is
 - (A.) Aadhar Equipped Payment System (B.) Aadhar Enabled Payment System
 - (C.) Aadhar Enterprise Processing System (D.) Aadhar Entry Payment System
- (29.) Nanyatha software is associated with:
 - (A.) Electronic clearance of letter boxes (B.) Electronic clearance of c-MOs
 - (C.) Electronic clearance of mails (D.) Electronic clearance of Speed Posts
- (30.) Minimum number of pieces prescribed a time for Direct Past is
 - (A.) 500 (B.) 1000 (C.) 1500 (D.) 2000
- (31.) Posting of Bill Mail Service should be at least once in ___ days.
 - (A.) 30 days (B.) 60 days (C.) 45 days (D.) 90 days
- (32.) Minimum amount required for opening of Sukanya Samriddhi Account is
 - (A.) Rs 100 (B.) Rs 500 (C.) Rs 1000 (D.) Rs 1500
- (33.) Which among the following comprises of un-addressed postal articles like letters, cards, brochures, pamphlets, coupons etc.?
 - (A.) Retail Port (B.) Media Post (C.) Direct Mail (D.) Direct Post
- (34.) India was represented at International Post Corporation Conference 2019 on 24th May, 2019 at
 - (A.) Bangkok, Thailand (B.) Germany
 - (C.) Netherlands (D.) Berne, Switzerland
- (35.) POPSKS (Post Office Passport Seva Kendra) are opened as per the feasibility of space & manpower in Post Offices in consultation with which Ministry?
 - (A.) Ministry of Defence (B.) Ministry of Home Affairs
 - (C.) Ministry of Finance (D.) Ministry of External Affairs
- (36.) Which among the following is not a JanSuraksha Scheme?
 - (A.) Pradhan Mantri Suraksha Bima Yojana (PMSBY)
 - (B.) Pradhan Mantri Jeevan Jyothi Bima Yojana (PMJJBY)
 - (C.) National Pension Scheme (NPS) (D.) Atal Pension Yojana (APY)
- (37.) Convertible Whole Life Assurance Policy under Postal Life Insurance is also known as:
 - (A.) Suraksha (B.) Suvidha (C.) Santhosh (D.) Sumanga



- (38.) In Bima Gram Yojana, a minimum of - - households in each of the identified villages are brought under the coverage of at least one RPLI Policy.
- (A.) 100 numbers (B.) 200 numbers
(C.) 50 numbers (D.) 150 numbers
- (39.) National Postal Week is celebrated across the country from:
- (A.) 1st October to 8th October. (B.) 9th October to 15th October.
(C.) 16th October to 22nd October. (D.) 23rd October to 29th October.
- (40.) A Postal Life Insurance Policy can be surrendered for an immediate payment in cash, provided the policy is of not less than ----- years duration and is in force on the date of application.
- (A.) 3 (B.) 5 (C.) 4 (D.) 6
- (41.) Letter Sorting Machine (LSM) in AMPCs (Automated Mail Processing Centre) has a sorting capacity of _____ items per hour.
- (A.) 25000 or more (B.) 40000 or more
(C.) 30000 or more (D.) 20000 or more
- (42.) All RMS officials other than Supervising officers, who travel on duty in a vehicle or compartment reserved for the Post Office, or who have to enter the platform for exchange of mails must carry the following to show their right to be present in the mail van or reserved compartment or on the platform
- (A.) Work paper (B.) Mail List
(C.) Memorandum of Distribution of work (D.) Metal Token
- (43.) When more than one official work in an office or a section, memorandum of distribution of work is issued by the
- (A.) Head of the RMS Division (B.) Inspector, Posts
(C.) Asst Superintendent of Posts (D.) Head Sorting Assistant
- (44.) Period of Preservation of an order book of a mail office and a section is
- (A.) One year (B.) Three years
(C.) Two Years (D.) Eighteen months
- (45.) Which among the following will not keep any stock of bags?
- (A.) Unit Bag Office (B.) District Bag Office
(C.) Central Bag Office (D.) Circle Bag Office
- (46.) After the close of the office, the stamps and seals used in the several departments of a mail office must be collected and locked by the
- (A.) Head Sorting Assistant (B.) Head Record Officer
(C.) Head Mail Agent (D.) Head Mail Man
- (47.) Which among the following SB orders made mobile phone number MANDATORY while opening of a new account in any of the PO Small Savings Schemes?
- (A.) SB Order No. 17/2017 (B.) SB Order No. 27/2017
(C.) SB Order No.07/2017 (D.) SB Order No. 11/2017
- (48.) SB order 01/2019 prescribes
- (A.) SOP after implementation of GL Integration between CBS and CSI transactions
(B.) Revision of interest rates for small Savings Schemes
(C.) SOP of DOP Mobile banking for Post Office Savings Account customers
(D.) Intra Operable Net banking for POSB Savings Accounts
- (49.) Which among the following is NOT CORRECT about Postmasters order book maintained in Head Post offices?
- (A.) It contains temporary arrangements made in cases of absence of clerks, postmen etc.
(B.) It contains unusual occurrences.



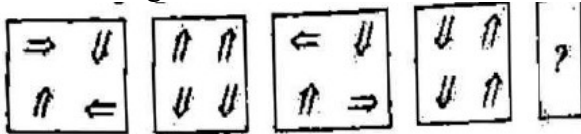
- (C.) It contains daily statistics of ordinary, registered & VP articles posted in the office.
- (D.) Orders passed by the head postmaster for the regulation of his office and which it is desirable should be placed on record.
- (50.) The minimum and maximum cash balance and the maximum balance to be held in postage and other stamps will be fixed for each sub office by the
- (A.) Head of the Division. (B.) Head of the Circle,
(C.) Asst Supdt of Posts (D.) Inspector of Posts.
- (51.) Indira Point was formerly known as
- (A.) Barsaat Point (B.) Pyramidal point
(C.) Python point (D.) Pygmalion Point
- (52.) Name the National Park which is famous for Asiatic Lions
- (A.) Kanha National park (B.) Gir National Park
(C.) Jim Corbett Sanctuary (D.) Ranthambore National Park
- (53.) _____ is the harvest festival of South India
- (A.) Pongal (B.) Diwali (C.) Harmpi (D.) Pooram
- (54.) Which of the following rivers does not drain into the Arabian Sea
- (A.) Tapti (B.) Godavari (C.) Narmada. (D.) Indus
- (55.) How many National highways were merging to form National Highway 44 (NH 44)
- (A.) 4 (B.) 8 (C.) 6 (D.) 7
- (56.) Who among the following can remove the Governor of a State from Office
- (A.) Legislative Assembly (B.) Parliament
(C.) President (D.) Supreme Court
- (57.) Which Indian received the Nobel Peace Prize after Mother Teresa
- (A.) Vandana Shiva (B.) Kailash Satyarthi
(C.) K Radhakrishnan (D.) Fali Nariman
- (58.) First state in India to introduce Aadhar Card
- (A.) Maharashtra (B.) Kerala
(C.) Telangana (D.) Tamilnadu
- (59.) Which is known as Red River in India?
- (A.) Yamuna (B.) Brahmaputra
(C.) Kaveri (D.) Sutlej
- (60.) What was the another name of Quit India Movement
- (A.) Khilafat Movement (B.) Swadeshi Movement
(C.) Home Rule Movement (D.) August Movement
- (61.) Who is the author of the book "The Indian Struggle?"
- (A.) Maulana Abul Kalam Azad (B.) Jawahar Lal Nehru
(C.) Lala Lajpat Rai (D.) Subhash Chandra Bose
- (62.) If the income of Ram is 20% more than shyam's income, how much percent shyam's Income is less than that of Ram's income?
- (A.) 12% (B.) 20% (C.) 30% (D.) $16\frac{2}{3}\%$
- (63.) If the price of salt decrease by 20% then by what percent consumption should be increased to keep the expenditure same
- (A.) 27% (B.) 26% (C.) 25% (D.) 36%



- (64.) $12 \times \frac{3}{4} \div \frac{1}{2} + 12 \div 30 = ?$
 (A.) 17.4 (B.) 18.5 (C.) 18.6 (D.) 18.4
- (65.) If the CP is 60% of the selling price. What is the profit %?
 (A.) 33.60% (B.) 66.67% (C.) 63.27 % (D.) 60.67 %
- (66.) If on selling 12 notebooks any seller makes a profit equal to the selling price of 4 note books, what is his profit percent?
 (A.) 50% (B.) 75%
 (C.) 25% (D.) Data inadequate
- (67.) If Rs. 4 becomes Rs. 10 in 50 years at simple interest, the rate % per annum is.
 (A.) 5% (B.) 4% (C.) 3% (D.) 6%
- (68.) Average age of students in section A of 55 students is 12 and the average age of students in section B of 45 students is 14 years. Find the average age of students in both section taken together
 (A.) 13 years (B.) 12.5years (C.) 13.2 years (D.) 12.9 years
- (69.) A rail journey of 75 kilo meter costs Rs. 215. How much will a journey of 120 kilo meter cost?
 (A.) Rs.344 (B.) Rs.340 (C.) Rs.320 (D.) Rs.322
- (70.) The cost of 37 meters of silk is Rs. 6290. What length of this silk can be purchased for Rs. 4420?
 (A.) 28metres (B.) 26metres (C.) 24metres (D.) 22metres
- (71.) If the thickness of a pile of 16 cardboards is 44mm, how many card boards will be there is a pile which is 71.5 cm thick
 (A.) 264 (B.) 262 (C.) 260 (D.) 261
- (72.) In a hospital, the monthly consumption of milk of 60 patients is 1350 liters. How many patients can be accommodated in the hospital if the monthly ration of milk is raised to 1710 liters, assuming that the quota per head remains the same
 (A.) 74 (B.) 76 (C.) 78 (D.) 70
- (73.) A train 150metre long is running at a uniform speed of 90 kilometer per hour. Find the time taken by it to cross a man standing on the platform
 (A.) 6 seconds (B.) 5 seconds (C.) 8 seconds (D.) 10 seconds
- (74.) A train 700metre long is running at 72 kilometre/hour. If it crosses a tunnel in one minute, find the length of the tunnel
 (A.) 480metre (B.) 500metre (C.) 510metre (D.) 520metre
- (75.) Solve and find the value of x
 $42 \div 2 + x3 - 22 = 8$
 (A.) 2 (B.) 5 (C.) 4 (D.) 3
- (76.) Simplify $-25+14 \div (5-3)$
 (A.) -18 (B.) 18 (C.) -21 (D.) 16
- (77.) Find the value of $(-40) \times (-1) + (-28) \div 7$
 (A.) 38 (B.) 36 (C.) 34 (D.) 37
- (78.) Find the value of $(-3)+ (-8) \div (-4)-2 \times (-2)$
 (A.) 3 (B.) -3 (C.) 2 (D.) -4
- (79.) A man can do a job in 15 days. His father takes 20 days and his son finishes it in 25 days. How long will they take to complete the job if they all work together?
 (A.) $5\frac{15}{47}$ days (B.) $5\frac{17}{23}$ days (C.) $6\frac{18}{47}$ days (D.) $6\frac{12}{47}$ days
- (80.) If the cost price of 25 pens is equal to the selling price of 20 pens, then the profit percent is

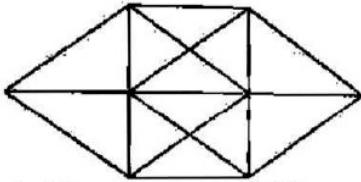


- (A.) 25% (B.) 20% (C.) 15% (D.) 17%
- (81.) What should come in the place (?) in the following number series?
7, 18, 40, 84, 172, ?
- (A.) 326 (B.) 328 (C.) 330 (D.) 348
- (82.) What should come in the place (?) in the following Number series
100, 50, 52, 26, 28, ?
- (A.) 30 (B.) 32 (C.) 14 (D.) 16
- (83.) Select the figure that will come next in the following figure series



- (A.)
- (B.)
- (C.)
- (D.)

- (84.) Arrange the following words in a logical and meaningful order
1) Student 2) Job 3) Interview 4) Education 5) Retirement 6) Degree
- (A.) 1,5,3,6,4,2 (B.) 5,3,2,1,4,6 (C.) 3,5,4,6,1,2 (D.) 1,4,6,3,2,5
- (85.) In an ordinary year, if today is Monday, then find the day after 68 days
- (A.) Sunday (B.) Saturday (C.) Monday (D.) Friday
- (86.) Arrange the five given words in order in which they will appear in English dictionary
1) Puke 2) Pike 3) Peak 4) Poke 5) Pack
- (A.) 5, 4,3,2,1 (B.) 5, 4,1,2,3 (C.) 5, 3,2,4,1 (D.) 5, 3,4,1,2
- (87.) Select the correct option that will fill in the blank and complete the series.
3, 4, 8, 35,.....
- (A.) 165 (B.) 108 (C.) 291 (D.) 250
- (88.) If moon is called sea, sea is called water, water is called air, air is called sun and sun is called river, then what gives us light and heat
- (A.) River (B.) Water (C.) Sun (D.) SCH
- (89.) Out of the given four words, three words are similar in some way whereas one word is different. Choose the different word.
- (A.) Hole: Driller (B.) Cutting: Knife
(C.) Photo: Frame (D.) Painting: Brush
- (90.) Four number given, out of which three are alike in some manner & one is different Select the one that is different
256, 81, 676, 144
- (A.) 256 (B.) 81 (C.) 676 (D.) 144
- (91.) How many triangles are there in the given figure?



- (A.) 28 (B.) 29 (C.) 30 (D.) 27

(92.) A, B, C, D & E are sitting on a bench. A is sitting next to B, C is sitting next to D, D is not sitting with E who is on the left end of the bench. C is on the second position from the right. A is on the right of B & E. A & C are sitting together. In which position is A sitting

- (A.) between E&D (B.) between C&E
 (C.) between B&D (D.) between B&C

(93.) Which number will be in the middle if the following numbers are arranged in descending order?
 6726, 6762, 6676, 6667, 6276

- (A.) 6726 (B.) 6762 (C.) 6676 (D.) 6667

(94.) Select the missing number from the given responses

2	1	2
21	22	?
1	2	5
20	23	43

- (A.) 40 (B.) 42 (C.) 43 (D.) 41

(95.) Which among the following words formed from the word ARCHITECTURE?

- (A.) TEXTURE (B.) KITE (C.) ARCHIVE (D.) TRUE

(96.) Which number will replace the question mark (?) in the following series?
 2, 4, 16, 96, 768, ?

- (A.) 6144 (B.) 7680 (C.) 5665 (D.) 4380

(97.) Find the next in the given series
 1, 3, 8, 19, 42, 89, _____

- (A.) 142 (B.) 182 (C.) 178 (D.) 184

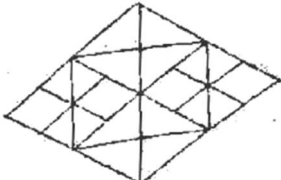
(98.) In a row of 68 people, Rohan is 22nd from the left and Rita is 17th from the right. Counting from the left end, what will be the position of Pinky who is sitting exactly in the middle of Rohan and Rita

- (A.) 27 (B.) 41 (C.) 37 (D.) 34

(99.) Find the wrong number in the given series 32, 75, 144, 244, 567, 800

- (A.) 32 (B.) 75 (C.) 244 (D.) 800

(100.) How many squares are there in the following figure?



- (A.) 14 (B.) 16 (C.) 12 (D.) 18



KARNATAKA CIRCLE- PA/SA EXAM -2020

ANSWER

(1.)	B	(2.)	B	(3.)	C	(4.)	B	(5.)	D
(6.)	A	(7.)	C	(8.)	B	(9.)	D	(10.)	A
(11.)	B	(12.)	D	(13.)	B	(14.)	A	(15.)	D
(16.)	C	(17.)	B	(18.)	C	(19.)	D	(20.)	A
(21.)	D	(22.)	C	(23.)	C	(24.)	D	(25.)	D
(26.)	B	(27.)	A	(28.)	B	(29.)	A	(30.)	B
(31.)	D	(32.)	C	(33.)	D	(34.)	B	(35.)	D
(36.)	C	(37.)	B	(38.)	A	(39.)	B	(40.)	A
(41.)	C	(42.)	D	(43.)	A	(44.)	B	(45.)	C
(46.)	A	(47.)	A	(48.)	D	(49.)	C	(50.)	A
(51.)	D	(52.)	B	(53.)	A	(54.)	B	(55.)	D
(56.)	C	(57.)	B	(58.)	A	(59.)	B	(60.)	D
(61.)	D	(62.)	D	(63.)	C	(64.)	D	(65.)	B
(66.)	A	(67.)	C	(68.)	D	(69.)	A	(70.)	B
(71.)	C	(72.)	B	(73.)	A	(74.)	B	(75.)	D
(76.)	A	(77.)	B	(78.)	A	(79.)	C	(80.)	A
(81.)	D	(82.)	C	(83.)	B	(84.)	D	(85.)	B
(86.)	C	(87.)	C	(88.)	A	(89.)	C	(90.)	B
(91.)	A	(92.)	D	(93.)	C	(94.)	A	(95.)	D
(96.)	B	(97.)	D	(98.)	C	(99.)	C	(100.)	A

