



HIMACHAL PRADESH CIRCLE - PA/SA EXAM -2020

- (1.) Choose the correct option
- (i) The Postal Department is under the administrative control of the Director General of Posts, New Delhi
 - (ii) Postal Circle jurisdiction of Sikkim comes under North Eastern Circle
 - (iii) Value Payable articles and Money Orders will not be booked to the address of Army Post Offices
 - (iv) Post Offices are divided into three classes
- (A.) (i)(ii), (iii) & (iv) (B.) (i)(ii) & (iv) only
(C.) (i)(iii) & (iv) only (D.) (i) & (iii) only
- (2.) The franked articles will be tendered at the counter bundled in separate bundles according to the value of the franks and each consignment must be accompanied by a Window Delivery Ticket for:
- (A.) Receipt given by Post office for posting Franked articles
 - (B.) Identification of Franking machine licensee's representative
 - (C.) Daily Docket duly filled in signed and date
 - (D.) None of these
- (3.) A Value Payable postal article marked as "Post Restante" is kept in Post Office up to:
- (A.) 30 days (B.) 15 days (C.) 10 days (D.) 07 days
- (4.) Complaints regarding miscarriage, loss or destruction of Indian Postal Orders should be preferred within
- (A.) 12 months from the last day of the month issue
 - (B.) 06 months from the last day of the month issue Paper money
 - (C.) 24 months from the date of issue of Money Order
 - (D.) 24 months from the last day of the month issue
- (5.) Choose incorrect option: Blind literature packets not exceeding 7kgs exempted from payment of the following fees
- (A.) Registration Fee (B.) Fee for Airmail
 - (C.) Fee for acknowledgement (D.) Fee for attested copy of the receipt
- (6.) License for posting of Registered Newspapers without prepayment of postage issued by
- (A.) Head of the Circle/Head of the Region (B.) SPOS/SSPOS
 - (C.) Head of the Post Office (D.) None of the above
- (7.) Choose incorrect option regarding Parcel
- (A.) The weight of an un-registered parcel should not exceed 4Kgs
 - (B.) The maximum weight of Parcel booking at Departmental Post office is 20Kgs
 - (C.) The weight of an un-registered parcel should not exceed 10Kgs posted at BO
 - (D.) None of the above
- (8.) The "official Postal articles" when posted by Government Officials authorized to use service postage stamps must bear the superscription
- (A.) On India Government Service (B.) On Public service
 - (C.) On Service (D.) None of the above
- (9.) The fee payable for acknowledgement card in respect of insured article is
- (A.) Rs. 3/ (B.) Rs. 2/ (C.) Free (D.) Rs. 1/
- (10.) The following articles prohibited through the inland post
- (i) Anything which is sent in contravention of any enactment for the time being in force
 - (ii) Osmic Acid securely packed
 - (iii) Any sharp instrument properly protected
 - (iv) Any indecent or obscene printing, painting, photograph



- (A.) (i), (iii), (iv) only (B.) (ii), (iii) only
(C.) (i),(iv) only (D.) (i), (ii), (iii), (iv)
- (11.) Which of the following is correct in respect of correspondence addressed to personnel of Indian Armed Forces serving outside India?
(A.) It shall be addressed to Indian Army PO (56 APO) or Fleet Mail office, Mumbai
(B.) It is treated as inland article for all purposes
(C.) It is not exempted from postal charges (D.) All the above
- (12.) Which of the following statements are correct as per PO Guide Part-II
(i) Free redirection by Air within India is for Aerogrammes
(ii) Free redirection by Air within India is for Postcards
(iii) Free redirection by Air within India is for Air Parcels
(iv) Free redirection by Air within India is for Letter
(A.) (ii) & (iii) Only (B.) (i), (ii), (iii), (iv)
(C.) (i)&(ii) only (D.) (i), (ii) & (iv) only
- (13.) India Joined APPU in the year
(A.) 1964 (B.) 1970 (C.) 1973 (D.) 1974
- (14.) What is the maximum weight of Bulk Bag (M Bag) under International Mail Products?
(A.) 20 kg (B.) 30 Kg (C.) 7 kg (D.) 10 Kg
- (15.) The compensation to be paid in respect of loss/total theft/ total damage of International Registered article is?
(A.) 15 SDR (B.) 20 SDR (C.) 25 SDR (D.) 30 SDR
- (16.) The period with in which a person can exercise an option to take delivery of foreign Registered Letter on the subsequent recovery of a lost Registered, Letter is
(A.) 2 Months (B.) 3 Months (C.) 6 Months (D.) 1 Month
- (17.) Maximum weight of Foreign Letter posted in India is
(A.) 2Kgs (B.) 3kgs (C.) 1 kg (D.) 5Kgs
- (18.) International reply coupons will be sold to any one individual at any time
(A.) Not more than 20 (B.) Not more than 10
(C.) Not more than 15 (D.) Not more than 25
- (19.) UPU Means
(A.) Universal Postal Union (B.) Unified Postal Union
(C.) Unique Postal Union (D.) Union of Postal Universe
- (20.) Headquarters of Asia Pacific Postal Union at
(A.) Jakarta (B.) Berne (C.) Geneva (D.) Bangkok
- (21.) HDMS means in CSI
(A.) Help Desk Monitoring Setup (B.) Help Definition Management Setup
(C.) Help Desk Management System (D.) Help Disk Management System
- (22.) System Integrator for computerizing Postal Life Insurance is
(A.) CSI (B.) RSI
(C.) FSI (D.) None of the above
- (23.) DARPAN refers to
(A.) Digital Awareness of Rural Post for a New India
(B.) Digital Advancement of Rural Post Office for a New India
(C.) Digital Advancement of Rural Post for a New India
(D.) Digital Achievement of Rural Post Office for a New India
- (24.) In the context of IT, FTP is:



- (A.) File Transfer Post (B.) File Transfer Protocol
(C.) File Transmission Protocol (D.) File Transit Protocol
- (25.) In CBS, End of Day (EOD) can be performed using the command
(A.) HACAA (B.) HETI (C.) HEINRPT (D.) HISCOD
- (26.) IPVS means
(A.) India Post Visibility System (B.) India Post Vision System
(C.) India Postman Visibility System (D.) None of the above
- (27.) The ATMs of Postal Department inter-operable with other banks w.e.f.
(A.) 30.12.2015 (B.) 30.12.2016 (C.) 30.12.2017 (D.) 30.12.2018
- (28.) In India Post Project, connectivity single network and connection to Data Centre called as
(A.) LAN (Local Area Network) (B.) VAN (Vast Area Network)
(C.) WAN (Wide Area Network) (D.) PAN (Post Area Network)
- (29.) Project of supply of required hardware to Mail Offices and handheld devices to Postmen Staff of the POs called as
(A.) Mail Operation Hardware (B.) Parcel Network Optimization Project
(C.) Mail Network Optimization Project (D.) Nodal Delivery Centre Project
- (30.) The Primary Data Centre is functioning at
(A.) Navi Mumbai w.e.f 15th May 2015 (B.) Mysuru w.e.f 3rd April 2013
(C.) Mysuru w.e.f. 15th May 2015 (D.) Navi Mumbai w.e.f. 3rd April 2013
- (31.) Choose the incorrect option
(i) Daily cash withdrawal limit by using Postal ATM card is Rs. 10000/
(ii) NSC VIII issue Premature encashment is not permitted in case of Death and forfeiture
(iii) Minimum Deposit of MIS account is Rs. 1000/
(iv) Annual premium for PMSBY is Rs. 330/
(A.) (i), (ii) & (iii) only (B.) (i), (ii), & (iv) only
(C.) (ii), (iii) & (iv) only (D.) (iii) & (iv) only
- (32.) Choose the correct option
(i) IFS Money Order service is operational with La Post Group, France and UAE
(ii) Only 30 transactions can be received by a single beneficiary in a calendar year in international Money Transfer
(iii) Deposits of PPF, SSA, RD Accounts in Post Office can be paid through IPPB Account
(iv) Minimum subsequent deposit in SB account is not less than Rs. 10/- and minimum withdrawal amount is Rs. 50/
(A.) (i), (ii) & (iii) only (B.) (iv) only
(C.) (i), (ii), (iii) & (iv) (D.) (i), (ii) & (iv) only
- (33.) Discount eligible for corporate customers who provide Speed Post business of over Rs 50,001/- to Rs. 5, 00,000/- per month is:
(A.) 10% (B.) 20% (C.) 30% (D.) 40%
- (34.) Choose the incorrect option
(A.) The length of a Domestic parcel should not exceed 1 meter and the length and girth combined should not exceed 1.80 meter
(B.) Maximum weight of Domestic Book Packet is 5Kgs and Maximum weight of Domestic Pattern and Sample Packet is 2 Kgs
(C.) Dimensions of the Post Card is 140 mm x 90 mm (length and breadth)
(D.) Gold Coins or bullion or both of a value exceeding Rs. 20000/- can be sent through Speed Post
- (35.) Which of the following RPLI policy does not offer a Loan facility.



- (A.) Gram Sumangal
- (B.) Gram Suraksha
- (C.) Gram Suvidha
- (D.) Gram Santosh

(36.) Choose the correct option

- (i) Definitive Stamps are used for day to day postal mailing purpose
- (ii) Commemorative stamps are only available at Philatelic Bureaux and counters or under the Philatelic Deposit Account Scheme

(iii) My stamp was first introduced in India during the World Philatelic Exhibition INDIPEX-2011

(iv) Philatelic deposit account may be opened with a minimum deposit of Rs. 200/-

- (A.) (i), (ii) & (iv) only
- (B.) (ii), (iii) & (iv) only
- (C.) (i), (ii), (iii) & (iv)
- (D.) (i), (ii) & (iii) only

(37.) Choose the incorrect option regarding Deen Dayal SPARSH Yojana

- (A.) To award children in the class category of standard VI to X
- (B.) 'SPARSH' refers to Scholarship for Promotion of Aptitude & Research in Stamps as a Hobby
- (C.) The amount of Scholarship is to be Rs. 6000/ per annum @ Rs. 500/- per month.
- (D.) None of the above

(38.) The minimum quantity of pieces can be accepted under Direct Post is:

- (A.) 1000 addressed Postal articles
- (B.) 1000 Unaddressed Postal articles
- (C.) 5000 addressed Postal articles
- (D.) 5000 Unaddressed Postal articles

(39.) Choose correct option

(i) 250ml Gangajal Bottle cost at Post Office counters is Rs. 50/

(ii) Charges for Aadhar Enrolment in Post Offices is Rs. 50/

(iii) Minimum quantity of articles to be posted at a time is 5000 in Bill Mail Service

(iv) In Logistic Post FTL & LTL means Full Truck Load & Less than a Truck Load?

- (A.) (i)& (ii) only
- (B.) (i)& (iii) only
- (C.) (iii) & (iv)
- (D.) (iii)& (iv) only

(40.) Which customs declaration form to be submitted by sender at the time of International articles of value above SDR 300 is

- (A.) CN22
- (B.) CN23
- (C.) PBE I
- (D.) PBE II

(41.) Choose the incorrect option

(A.) In offices where there are one or more clerks, the Postmaster should submit MDW in the form of MS-11 to Superintendent for approval

(B.) A Nominal Roll of the clerical staff should be maintained in the form of MS-12

(C.) A Nominal Roll of the Postman and Village Postman may also be maintained where their strength is less than 25

(D.) A village Sorting list in the form of M-52 will be prepared and supplied to each office by the Sub Divisional Inspector.

(42.) Choose the correct option

(A.) Unregistered articles of the letter mail, while in deposit, must be locked up in the deposit case.

(B.) Book of addressee's instruction maintained in Form M 23

(C.) Money Orders addressed to persons without hands or fingers will be returned to sender without payment.

(D.) Commission of Family Allotment Money Order should bear the dependents of combatants on field service.


(43.) Account Bag from Head Post Office to Sub Post Office should not contain the following:

- (A.) SO daily account
- (B.) BO Daily accounts after check
- (C.) SO daily account
- (D.) None of the above

(44.) SB Order No. 9/2019



- (A.) Regarding replacement of existing National Small Savings Schemes (POSB) Rules and issuance of fresh National Small Savings Schemes (POSB) Rules 2019
- (B.) SOP after implementation of GL integration between CBS and CSI transactions
- (C.) Change in limit for accepting POSB Cheques for deposit in SB/PPF/SSA/RD accounts
- (D.) SOP of DoP Mobile Banking for Post Office Savings Account customers
- (45.) Manual entry is not to be allowed in Post Office Pass Books of various POSB schemes in CBS Post Offices where Passbook printers have been supplied stipulate vide order
 - (A.) SB Order No. 11/2017
 - (B.) SB Order No. 12/2017
 - (C.) SB Order No. 13/2017
 - (D.) SB Order No. 14/2017
- (46.) The Head Sorting Assistant in which form required to submit a daily report to Superintendent through Record Officer
 - (A.) MS-82
 - (B.) MS-81
 - (C.) MS-83
 - (D.) MS-82 (a)
- (47.) AMPC Stands for
 - (A.) Automatic Mail Protecting Centre
 - (B.) Automatic Mail Processing Centre
 - (C.) Approved Mail Processing Centre
 - (D.) Any type of Mail Processing Centre
- (48.) Nominal Roll of Metal Tokens to be kept at
 - (A.) Transit Mail Office
 - (B.) Superintendent RMS office
 - (C.) Record Office
 - (D.) Mail Office
- (49.) In order to test the efficiency of the mail system and to devise remedial steps to be taken in this regard, Sample surveys of mail is to be carried out as per Rule
 - (A.) Rule 157-A of Postal Manual Vol-VII
 - (B.) Rule 157-B of Postal Manual Vol-VII
 - (C.) Rule 157-C of Postal Manual Vol-VII
 - (D.) Rule 157 of Postal Manual Vol-VII
- (50.) As per Foreign Post Manual L.C. means
 - (A.) Letters et Carry
 - (B.) Letters et Cartes
 - (C.) Letters at Common
 - (D.) Letters et Control
- (51.) The Shimla Convention an agreement that
 - (A.) Shimla as the capital of Himachal Pradesh
 - (B.) Shimla as a tourist spot
 - (C.) Boundary between India and Tibet
 - (D.) None of the above
- (52.) The oldest mountains in India are
 - (A.) Vindhya
 - (B.) Satpura
 - (C.) Nilgiri
 - (D.) Aravali
- (53.) The minimum age required to become Prime Minister of India is
 - (A.) 25 Years
 - (B.) 30 Years
 - (C.) 21 Years
 - (D.) 18 Years
- (54.) The Oath of office is conducted to the President by
 - (A.) Speaker of Lok sabha
 - (B.) Vice President of India
 - (C.) Chief Justice of India
 - (D.) None of the above
- (55.) The last ruler of the Mughal dynasty was
 - (A.) Akbar
 - (B.) Babar
 - (C.) Aurangazeb
 - (D.) Bahadurshah Zafar
- (56.) The Himalayan Mountaineering Institute is located
 - (A.) Dehradun
 - (B.) Shimla
 - (C.) Darjeeling
 - (D.) Shillong
- (57.) Kuchipudi is a classical dance of which state
 - (A.) Andhra Pradesh
 - (B.) Tamil Nadu
 - (C.) Karnataka
 - (D.) Kerala
- (58.) When Non-cooperation movement was started by Mahatma Gandhi
 - (A.) 1st July 1920
 - (B.) 1st August 1920
 - (C.) 8th August 1942
 - (D.) 13th April 1919



- (59.) Who said this "Cowards can never be moral"
 (A.) Swami Vivekananda (B.) ShivaKhera
 (C.) Mahatma Gandhiji (D.) Rahindranath Tagore
- (60.) Who said this "Your best teacher is your last mistake"
 (A.) APJ AbdulKalam (B.) Mahatma Gandhi
 (C.) RamakrishnaParamahamsa (D.) Swami Vivekananda
- (61.) The average age of Husband, wife and their child 3 years ago was 27 years and that of wife and the child 5 years ago was 20 years. The present age of the husband is
 (A.) 35 Years (B.) 40 Years
 (C.) 50 Years (D.) None of the above
- (62.) If 6 men and 8 boys can do a piece of work in 10 days while 26 men and 48 boys can do the same in 2 days, the time taken by 15 men and 20 boys in doing the same type of work will be
 (A.) 4 days (B.) 5 days (C.) 6 days (D.) 7 days
- (63.) A man can do a piece of work in 5 days, but with the help of his son, he can do it in 3 days. In what time can the son do it alone?
 (A.) 6 1/2 days (B.) 7 days (C.) 7 1/2 days (D.) 8 days
- (64.) A and B walk around a circular track. They start at 8 a.m. from the same point in the opposite directions. A and B walk at a speed of 2 rounds per hour and 3 rounds per hour respectively. How many times shall they cross each other before 9:30 a.m.?
 (A.) 5 (B.) 6 (C.) 7 (D.) 8
- (65.) Two men start together to walk to a certain destination, one at 3kmph and another 3.75 kmph. The latter arrives half an hour before the former. The distance is
 (A.) 6 km (B.) 7.5 km (C.) 8 km (D.) 9.5 km
- (66.) If a car takes 24 minutes to cover a 15 n length of road, how long will it take travel 100 Km?
 (A.) 2 Hours 20 Minutes (B.) 2 Hours 30 Minutes
 (C.) 2 Hours 25 Minutes (D.) 2 Hours 40 Minutes
- (67.) Cost of 24 toys is Rs. 96/-. Find the cost of 16 toys.
 (A.) 32 (B.) 64 (C.) 48 (D.) 68
- (68.) A train covers a distance of 51 Km in 45 minutes, How long will it take to cover 221 Km?
 (A.) 3 Hours 15 minutes (B.) 2 Hours 15 minutes
 (C.) 4 Hours 15 minutes (D.) 1 Hour 15 minutes
- (69.) If 45 students can consume a stock of food in 60 days, then for how many days the same stock of food will last for 27 students?
 (A.) 144 days (B.) 100 days (C.) 160 days (D.) 180 days
- (70.) $1\frac{4}{3} + 1\frac{3}{4} = ?$
 (A.) $\frac{7}{14}$ (B.) $\frac{12}{49}$ (C.) $4\frac{1}{12}$ (D.) None
- (71.) If $\frac{1}{3} + \frac{1}{2} + \frac{1}{x} = 6$ then x=?
 (A.) $\frac{6}{31}$ (B.) $\frac{6}{19}$ (C.) $\frac{19}{6}$ (D.) $\frac{31}{6}$
- (72.) Two-fifth of one-fourth of three-seventh of a number is 15.what is half of that number?



- (A.) 94 (B.) 96 (C.) 350 (D.) 175
- (73.) If A's salary is 20% less than B's salary, by how much percent is B's salary more than A's
 (A.) 25% (B.) 20% (C.) 28% (D.) 30%
- (74.) In an examination 35% candidates failed in one subject and 42% failed in another subject while 15% failed in both the subjects. If 2500 candidates appeared at the examination, how many passes in either subject but not in both?
 (A.) 325 (B.) 1175 (C.) 2125 (D.) None
- (75.) At what percentage above the CP. must an article be marked so as to gain 33% after allowing a customer discount of 5%?
 (A.) 35% above C.P. (B.) 20% above C.P.
 (C.) 30% above C.P. (D.) 40% above C.P.
- (76.) A person earns 15% on an investment but loses 10% on another investment the ratio of the two investments be 3:5, what is the gain or loss on the two investments taken together?
 (A.) 6% Loss (B.) 13% Gain
 (C.) 13% Loss (D.) None of the above
- (77.) Nitin borrowed some money at the rate of 6% p.a. for the first three years, 9% p.a. for the next five years and 13% p.a. for the period beyond eight years, If the total interest paid by him at the end of eleven years is Rs. 8160/-, how much money did he borrow?
 (A.) Rs. 8000/ (B.) Rs. 10000/
 (C.) Data inadequate (D.) None of the above
- (78.) The rates of simple interest in two banks 'A' and 'B' are in the ratio 5:4. A person wants to deposit his total savings in two banks in such a way that he received equal half-yearly interest from both. He should deposit the savings in banks A and B in the ratio
 (A.) 2:5 (B.) 4:5 (C.) 5:2 (D.) 5:4
- (79.) A batsman makes a score of 87 runs in the 17th inning and thus increases his average by 3. Find his average after 17th inning?
 (A.) 42 (B.) 39 (C.) 45 (D.) 36
- (80.) The average weight of three boys A, B and C is 45 Kg. If the average weight of A and B be 40 kg and that of B and C be 43 Kg, then the weight of B is:
 (A.) 17 kg (B.) 20 kg (C.) 26 Kg (D.) 31 Kg
- (81.) In Question the mathematical numbers follow according to a pattern. Discover the pattern and then pick up the missing number from the answer choices
 5, 10, 13, 26, 29, 58, 61, ?
 (A.) 122 (B.) 64 (C.) 125 (D.) 128
- (82.) In Question the mathematical numbers follow according to a pattern. Discover the pattern and then pick up the missing number from the answer choices
 28, 33, 31, ?, 34, 39, 37
 (A.) 29 (B.) 38 (C.) 36 (D.) 42
- (83.) In Question the mathematical numbers follow according to a pattern. Discover the pattern and then pick up the missing number from the answer choices
 2, 5, 9, 19, 37, ?
 (A.) 76 (B.) 74
 (C.) 75 (D.) None of these
- (84.) In Question the mathematical numbers follow according to a pattern. Discover the pattern and then pick up the missing number from the answer choices
 71, 76, 69, 74, 67, 72, ?



(A.) 77 (B.) 76 (C.) 80 (D.) 65
(85.) In Question the mathematical numbers follow according to a pattern. Discover the pattern and then pick up the missing number from the answer choices

2, 4, 12, 48, 240 ?

(A.) 1080 (B.) 1440 (C.) 960 (D.) 1920

(86.) Find out the wrong number in each sequence

6, 13, 18, 25, 30, 37, 40

(A.) 25 (B.) 37 (C.) 40 (D.) 30

(87.) Find out the wrong number in each sequence

125, 127, 130, 135, 142, 153

(A.) 135 (B.) 153 (C.) 142 (D.) 165

(88.) Find out the wrong number in each sequence

15, 14, 30, 60, 91

(A.) 91 (B.) 60 (C.) 14 (D.) 5

(89.) Find out the wrong number in each sequence

14, 9, 16, 20, 36, 49

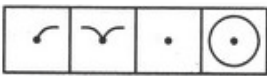
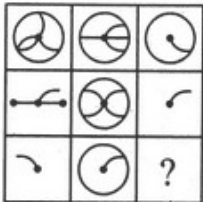
(A.) 20 (B.) 36 (C.) 49 (D.) 9

(90.) Find out the wrong number in each sequence

11, 26, 24, 96, 720

(A.) 24 (B.) 96
 (C.) 6 (D.) None of these

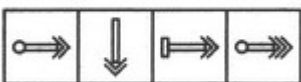
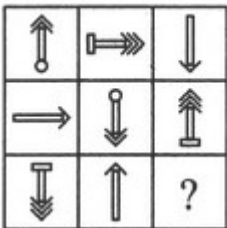
(91.) Select a appropriate picture from the four alternatives picture from the four alternatives that would complete the figure matrix.



(1) (2) (3) (4)

(A.) 1 (B.) 2 (C.) 3 (D.) 4

(92.) Selecta appropriate picture from the four alternatives picture from the four alternatives that would complete the figure matrix.



(1) (2) (3) (4)



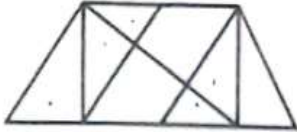
A Vision of Victory

VV ACADEMY

GDS / POSTMAN / MTS / PA / LGO



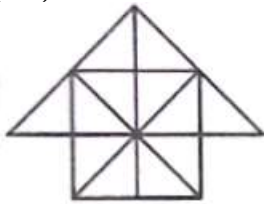
(A.) 1 (B.) 2 (C.) 3 (D.) 4
 (93.) Find the number of triangles in given picture



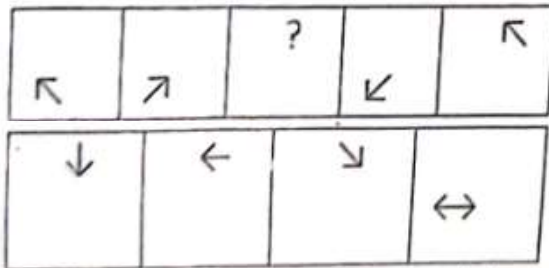
(A.) 8 (B.) 10 (C.) 12 (D.) 14
 (94.) Find the number of triangles in given picture



(A.) 4 (B.) 5 (C.) 6 (D.) 7
 (95.) Find the number of squares in given picture

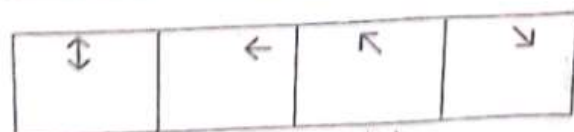
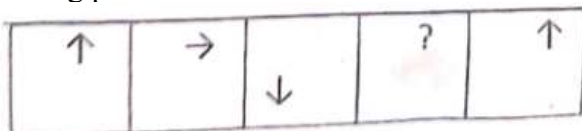


(A.) 6 (B.) 5 (C.) 7 (D.) 8
 (96.) In Question the pictures follow according to a pattern, Discover the pattern and then pick up the missing picture from the answer choices.



(A) (B) (C) (D)

(A.) A (B.) B (C.) C (D.) D
 (97.) In Question the pictures follow according to a pattern, discover the pattern and then pick up the missing picture from the answer choices.

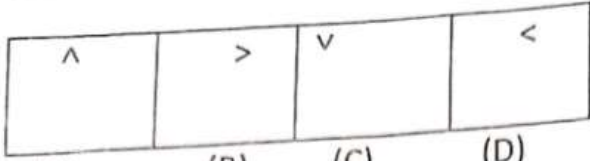
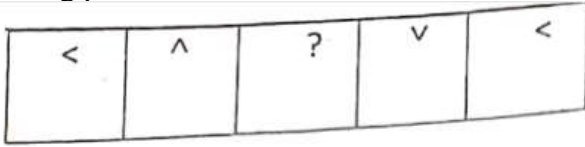


(B) (C) (D)

(A.) A (B.) B (C.) C (D.) D

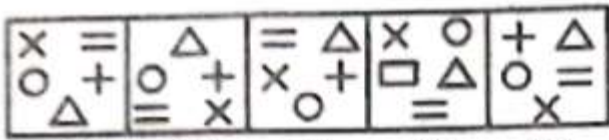


(98.) In Question the pictures follow according to a pattern, Discover the pattern and then pick up the missing picture from the answer choices.



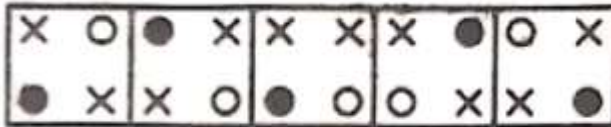
- (A.) A (B.) B (C.) C (D.) D

(99.) In Question the pictures follow according to a pattern, Choose the picture different from rest.




- (1) (2) (3) (4) (5)
 (A.) 4 (B.) 5 (C.) 3 (D.) 2

(100.) In Question the pictures follow according to a pattern; choose the picture different from rest.



- (1) (2) (3) (4) (5)
 (A.) 4 (B.) 5 (C.) 3 (D.) 2

**HIMACHAL PRADESH CIRCLE - PA/SA EXAM -2020****ANSWER**

(1.)	C	(2.)	B	(3.)	D	(4.)	A
(5.)	B	(6.)	A	(7.)	C	(8.)	A
(9.)	C	(10.)	C	(11.)	D	(12.)	D
(13.)	C	(14.)	B	(15.)	D	(16.)	B
(17.)	A	(18.)	B	(19.)	A	(20.)	D
(21.)	C	(22.)	C	(23.)	B	(24.)	B
(25.)	D	(26.)	A	(27.)	B	(28.)	C
(29.)	A	(30.)	D	(31.)	B	(32.)	C
(33.)	A	(34.)	D	(35.)	A	(36.)	C
(37.)	A	(38.)	B	(39.)	D	(40.)	B
(41.)	C	(42.)	A	(43.)	C	(44.)	B
(45.)	D	(46.)	C	(47.)	B	(48.)	C
(49.)	A	(50.)	B	(51.)	D	(52.)	D
(53.)	A	(54.)	C	(55.)	D	(56.)	C
(57.)	A	(58.)	B	(59.)	C	(60.)	A
(61.)	B	(62.)	A	(63.)	C	(64.)	C
(65.)	B	(66.)	D	(67.)	B	(68.)	A
(69.)	B	(70.)	D	(71.)	A	(72.)	D
(73.)	A	(74.)	B	(75.)	D	(76.)	D
(77.)	A	(78.)	B	(79.)	B	(80.)	D
(81.)	A	(82.)	C	(83.)	C	(84.)	D
(85.)	B	(86.)	C	(87.)	D	(88.)	B
(89.)	A	(90.)	B	(91.)	C	(92.)	A
(93.)	D	(94.)	B	(95.)	A	(96.)	C
(97.)	A,B,C,D	(98.)	B	(99.)	A	(100.)	B